


FORMATIVE ASSESSMENT - I

Class - 5 : Learning Express

Social Studies



Syllabus:
(1- 3 Lessons)
(Pg. No.s : 5 - 25)

Time : 1 Hour

Max. Marks : 25

Name :	Class :	Section :	Roll No :
---------------	----------------	------------------	------------------

A. Define : (5 × 1 = 5)

1. Poles
2. Symbol
3. Climate
4. Latitude
5. Directions

B. Answer the following questions. (4 × 1 = 4)

1. Differentiate between climate and weather.
2. What is the language of a map ?
3. What does a globe depict ?
4. How is the grid useful to us ?

C Fill in the blanks with suitable words given below. (4 × 1 = 4)

Asia, Moderate, Flat, Hottest

1. is the largest continent on the earth.
2. Maps are drawn on surface.
3. Climate of Mumbai is type.
4. Equator is the region of the earth.

D. Write 'T' for True and 'F' for False statements. (4 × 1 = 4)

1. The surface of the earth is flat.
2. Gujarat lie in the south.
3. Green colour in a map indicates plains.
4. Temperate zones are neither very hot nor very cold.

Note : Cut along the marking to avoid un-even cutting or torn

E. Multiple choice questions. Tick(✓) the correct option.

(3 × 1 = 3)

1. The scientific study of climate is called

- i) Climatology
- ii) Clima
- iii) Metrology
- iv) Meteorology

2. A globe is a model of

- i) earth
- ii) sun
- iii) moon
- iv) star

3. The total number of continents on the earth is

- i) four
- ii) five
- iii) six
- iv) seven

F. Match the following.

(5 × 1 = 5)

A


B

- | | | |
|---------------|---------|---|
| 1) Dark brown | [] | i) Deep water of oceans, seas, rivers, etc. |
| 2) Deep blue | [] | ii) Mountains and hills |
| 3) Blue | [] | iii) Shallow water of oceans or seas |
| 4) Light blue | [] | iv) Low land regions |
| 5) Green | [] | v) Water bodies like oceans, seas, etc. |

★★★★★

FORMATIVE ASSESSMENT - II

Class - 5 : Learning Express
Social Studies



Syllabus:
(4 - 6 Lessons)
(Pg. No.s : 26 - 44)

Time : 1 Hour

Max. Marks : 25

Name :	Class :	Section :	Roll No :
---------------	----------------	------------------	------------------

A. Define : (5 × 1 = 5)

1. Dune
2. Iceberg
3. Tribe
4. Cassava
5. Peninsula

B. Answer the following questions. (4 × 1 = 4)

1. What is the capital of Saudi Arabia ?
2. What is an iceberg ? Why is it dangerous ?
3. Describe the physical appearance of the pygmies.
4. Where do Eskimos live ?

C Fill in the blanks with suitable words given below. (4 × 1 = 4)

Nuuk, Tundra, Sahara, Congo

1. desert is the largest desert in the world.
2. The capital city of Greenland is
3. The river is a big and important river in Africa.
4. A big part of Greenland lies in the region.


D. Write 'T' for True and 'F' for False statements. (4 × 1 = 4)

1. Savannas are like a desert.
2. Sledges are carts having wheels.
3. Thar desert is the largest desert in the world.
4. The atmosphere of Saudi Arabia is very cool.

Note : Cut along the marking to avoid un-even cutting or torn

FORMATIVE ASSESSMENT - III

Class - 5 : Learning Express
Social Studies



Syllabus:
(7 – 10 Lessons)
(Pg. No.s : 45 – 75)

Time : 1 Hour

Max. Marks : 25

Name :	Class :	Section :	Roll No :
--------	---------	-----------	-----------

A. Define : (5 × 1 = 5)

1. Beef
2. Highway
3. Metro
4. Internet
5. Script

B. Answer the following questions. (5 × 1 = 5)

1. The prairies are called the 'Wheat basket of the world'. Why ?
2. Write two highways of the world.
3. How are the satellites useful to us ?
4. What is the importance of literacy ?
5. What are ranches ?

C. Fill in the blanks with suitable words given below. (4 × 1 = 4)

Telephone, Braille, Wheel, Downs

1. Grasslands are called in Australia.
2. The invention of was the turning point in the history of transport.
3. We use to speak to people over long distances.
4. A script for the blind is called

D. Write 'T' for True and 'F' for False statements. (3 × 1 = 3)

1. The concept of zero was first used by the Arabs.
2. There are more than 5000 satellites today.
3. India is surrounded by water bodies on 2 sides.

<input type="checkbox"/>
<input type="checkbox"/>
<input type="checkbox"/>

Note : Cut along the marking to avoid un-even cutting or torn

E. Multiple choice questions. Tick(✓) the correct option. (3 × 1 = 3)

1. The minerals found in prairies are

- a) Iron
- b) Mineral oil
- c) Coal
- d) All of these

2. Airbus 380 can carry more than people.

- a) 800
- b) 700
- c) 600
- d) 900

3. A machine used to send and receive messages via network is

- a) Television
- b) Printer
- c) Computer
- d) Radio


F. Match the following. (5 × 1 = 5)

A		B
1) Prairies	[]	i) South Africa
2) Pampas	[]	ii) Russia
3) Downs	[]	iii) South America
4) Steppes	[]	iv) Australia
5) Velds	[]	v) North America

★★★★★

FORMATIVE ASSESSMENT - IV

Class - 5 : Learning Express
Social Studies



Syllabus:
(14 – 17 Lessons)
(Pg. No.s : 98 – 126)

Time : 1 Hour

Max. Marks : 25

Name :	Class :	Section :	Roll No :
---------------	----------------	------------------	------------------

A. Define : (5 × 1 = 5)

1. Atom bomb
2. Veto
3. Alignment
4. Revolt
5. Explorer

B. Answer the following questions. (4 × 1 = 4)

1. Why did the Revolt of 1857 fail ?
2. Why was the NAM formed ?
3. What is the role of WHO ?
4. What led to the World Wars ?

C Fill in the blanks with suitable words given below. (4 × 1 = 4)

Movement, Sepoys, Industrial, UNICEF

1. The Revolution resulted in large-scale production.
2. The works for children's welfare.
3. A group of people who share the same ideas or aims is known as
4. The revolt of 1857 was started by the

D. Write 'T' for True and 'F' for False statements. (4 × 1 = 4)

1. The USA did not join the first World War.
2. General Assembly meets twice in a year.
3. India was in favour of racial discrimination.
4. The British East India Company was established in 1700.

Note : Cut along the marking to avoid un-even cutting or torn

E. Multiple choice questions. Tick(✓) the correct option. (3 × 1 = 3)

1. The India farmers were forced to grow

- i) Foodgrains
- ii) Both (i) & (ii)
- iii) Cash crops
- iv) None of these

2. was the president of Egypt.

- a) Marshal Tito
- b) Dr. Sukarno
- c) G.A. Nasser
- d) None of these

3. The headquarters of the WHO is located at

- a) Geneva
- b) Paris
- c) Rome
- d) New York


F. Match the following. (5 × 1 = 5)

A		B
1) ICJ	[]	i) Paris
2) UNICEF	[]	ii) Geneva
3) UNESCO	[]	iii) Hague
4) WHO	[]	iv) Rome
5) FAO	[]	v) New York

★★★★★

SUMMATIVE ASSESSMENT - I

Class - 5 : Learning Express
Social Studies



Syllabus:
(1 – 6 Lessons)
(Pg. No.s : 5 – 44)

Time : 2½ Hours

Max. Marks : 50

Name :	Class :	Section :	Roll No :
--------	---------	-----------	-----------

A. Answer the following questions. (9 × 2 = 18)

1. Why people in Saudi Arabia / Live near Oasis ?
2. Where do Eskimos live ?
3. Describe a Tropical Rainforest.
4. How does altitude influence climate ?
5. Differentiate between climate and weather.
6. How is a map different from an atlas ?
7. What are topographic maps ?
8. How is the grid useful to us ?
9. Explain the climate of Greenland.

B. Define : (7 × 1 = 7)

- | | |
|------------|---------------|
| 1. Dune | 2. Oasis |
| 3. Iceberg | 4. Tribe |
| 5. Climate | 6. Directions |
| 7. Poles | |

C. Fill in the blanks with suitable words given below. (7 × 1 = 7)

Moderate, Bantu, Tundra, South, Asia, Sahara, Haj

1. is the largest continent on the earth.
2. The bottom of a map is always
3. Climate of Mumbai is type.
4. Most of the people in Congo speak language.
5. A big part of Greenland lies in the region.
6. desert is the largest desert in the world.
7. The pilgrimage to Mecca and Medina is called

Note : Cut along the marking to avoid un-even cutting or torn

D. Write 'T' for True and 'F' for False statements.

(7 × 1 = 7)

- 1. The atmosphere of Saudi Arabia is very cool.
- 2. Thar desert is the largest desert in the world.
- 3. Sledges are carts having wheels.
- 4. Savannas are like a desert.
- 5. Moisture in the air is called humidity.
- 6. Green colour in a map indicates plains.
- 7. The surface of the earth is flat.

E. Multiple choice questions. Tick(✓) the correct option.

(6 × 1 = 6)

- 1. **Mecca and Medina is situated in**
 - i) Saudi Arabia
 - ii) Iran
 - iii) Iraq
 - iv) Afghanistan
- 2. **The huge ship Titanic, sank after hitting an**
 - i) Mountain
 - ii) Island
 - iii) Hill
 - iv) Ice berg
- 3. **The main spoken languages of the DRC are**
 - i) Bantu
 - ii) French
 - iii) English
 - iv) All of these
- 4. **The climate of India is of type.**
 - i) tropical
 - ii) polar
 - iii) moderate
 - iv) temperate
- 5. **A globe is a model of**
 - i) earth
 - ii) moon
 - iii) sun
 - iv) star
- 6. **The Antarctic Circle lies at**
 - i) 23½° N
 - ii) 66½° S
 - iii) 66½° N
 - iv) 23½° S

F. Match the following.

(5 × 1 = 5)

A

- 1) Matadi []
- 2) Pygmies []
- 3) Bantu []
- 4) Savanna []
- 5) Swahili []

B


- i) Grassland
- ii) Language
- iii) Seaport
- iv) Original inhabitants
- v) Tribe

★★★★★

Note : Cut along the marking to avoid un-even cutting or torn

SUMMATIVE ASSESSMENT - II

Class - 5 : Learning Express
Social Studies



Syllabus:
(1 – 13 Lessons)
(Pg. No.s : 5 – 97)

Time : 2½ Hours

Max. Marks : 50

Name :	Class :	Section :	Roll No :
--------	---------	-----------	-----------

A. Answer the following questions.

(8 × 2 = 16)

1. Describe the ideas of Karl Marx.
2. What is hydroelectricity ?
3. How is milk pasteurised ?
4. What is the importance of literacy ?
5. How are the satellites useful to us ?
6. Describe the wildlife of the Prairies
7. What is sand dunes ?
8. How is the climate of DRC ?

B. Define :

(6 × 1 = 6)

1. Slave
2. Drill
3. Surgery
4. Braille
5. Satellite
6. Metro

C. Fill in the blanks with suitable words given below.

(6 × 1 = 6)

documentary, Braille, Fahrenheit, Iron, Greece, goods

1. Socrates was born in Athens, the capital of
2. was stronger and harder than copper.
3. Thermometer was invented by
4. A script for the blind is called
5. Short films are called
6. Early humans made rafts to carry

Note : Cut along the marking to avoid un-even cutting or torn

D. Write 'T' for True and 'F' for False statements.

(6 × 1 = 6)

1. Karl Marx was born to a poor family.
2. Electricity is not a form of energy.
3. We should eat junk food.
4. Gutenberg was an Egyptian.
5. Televisions are only used for entertainment.
6. India is surrounded by water bodies on 2 sides.

E. Multiple choice questions. Tick(✓) the correct option.

(6 × 1 = 6)

1. **The first metal discovered by early man was**
 - i) iron
 - ii) gold
 - iii) silver
 - iv) copper
2. **Thermometer was invented in**
 - i) 1615
 - ii) 1815
 - iii) 1715
 - iv) 1785
3. **The total number of continents on the earth is**
 - i) four
 - ii) six
 - iii) five
 - iv) seven
4. **A machine used to send and receive messages via network is**
 - i) Television
 - ii) Printer
 - iii) Computer
 - iv) Radio
5. **Water transport includes**
 - i) rivers
 - ii) oceans
 - iii) seas
 - iv) all of these
6. **The minerals found in Prairies are**
 - i) iron
 - ii) mineral oil
 - iii) coal
 - iv) all of these

Note : Cut along the marking to avoid un-even cutting or torn

F. Match the following.

(5 × 1 = 5)

A		B
1) India	[]	i) Papyrus
2) Paper	[]	ii) Zero
3) Louis Braille	[]	iii) Gutenberg
4) Hindsa	[]	iv) France
5) Germany	[]	v) Indian System of numbers

G. Complete the crossword using the clues given below.

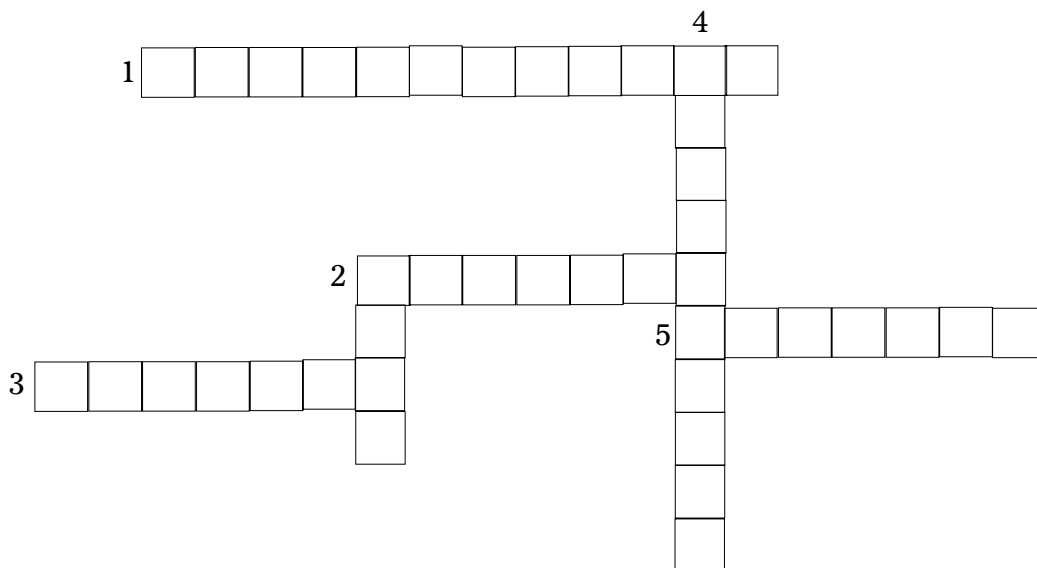
(5 × 1 = 5)

Acroos

1. Founded Missionaries of Charity.
2. City where Mother Teresa worked.
3. Fought against slavery in USA.
4. Fought against discrimination of blacks and Indians is South Africa.

Down

2. Equality for the blacks.
4. Non-violent protest.



★★★★★

C-16
Learning Express
Social Studies
Textbook

SUMMATIVE ASSESSMENT - III

Class - 5 : Learning Express
Social Studies

50

Syllabus:
(1 – 20 Lessons)
(Pg. No.s : 5 – 149)

Time : 2½ Hours

Max. Marks : 50

Name : Class : Section : Roll No :

A. Answer the following questions.

(8 × 2 = 16)

1. Why do earthquakes occur ?
2. Why did Gandhiji call off the Non-cooperation movement ?
3. Who were known as 'Lal, Bal, Pal' ?
4. Who was Bahadur Shah Zafar ?
5. Why was the NAM formed ?
6. What is the importance of literacy ?
7. How are the satellites useful to us ?
8. How many types of transport are there ?

B. Define :

(6 × 1 = 6)

1. Metro
2. Prairies
3. Iceberg
4. Tribe
5. Symbol
6. Surgery

C. Fill in the blanks with suitable words given below.

(6 × 1 = 6)

Moderate, Pacific, Downs, Arabs, Caste, Calamity

1. A flood is a natural
2. The system kept the people divided and backward.
3. Gopal Krishna Gokhale was a leader.
4. called the Indian system of numbers Hindsa.
5. Grasslands are called in Australia.
6. The ocean is the largest ocea on the earth.

Note : Cut along the marking to avoid un-even cutting or torn

D. Write 'T' for True and 'F' for False statements.

(6 × 1 = 6)

1. A Tusnami is a massive earthquake.
2. The World War II broke out in 1914.
3. Indian society during the British rule was backward.
4. The British East India Company was established in 1700.
5. India was in favour of racial discrimination.
6. Karl Marx was born to a poor family.

E. Multiple choice questions. Tick(✓) the correct option.

(6 × 1 = 6)

1. **The largest circle around the earth is**
 - i) Equator
 - ii) Tropic of Cancer
 - iii) Tropic of Capricorn
 - iv) Arctic Circle
2. **The bottom of a map is always**
 - i) north
 - ii) east
 - iii) south
 - iv) west
3. **The scientific study of climate is called**
 - i) climatology
 - ii) metrology
 - iii) clima
 - iv) meteorology
4. **The staple food of DRC is**
 - i) cassava
 - ii) maize
 - iii) rice
 - iv) sugarcane
5. **Water transport includes**
 - i) rivers
 - ii) oceans
 - iii) seas
 - iv) all of these
6. **First World War ended in**
 - i) 1914
 - ii) 1939
 - iii) 1919
 - iv) 1945

F. Complete the given table.

(5 × 1 = 5)

Degree Latitude	Name of Latitudes	Climatic Zone
1. 23½° N to 23½°S	Tropic of to	Tropical
2. 23½° N to 66½° N	Tropic of to circle.
3. 66½° N to 90° N to pole.
4. 23½° S to 66½° S to circle	South Temperate
5. 66½° S to 90°S Circle to Pole.

G. Match the following.

(5 × 1 = 5)

A		B
1) Equator	[]	i) Neither hot nor cold
2) Torrid Zone	[]	ii) Humidity
3) Frigid Zone	[]	iii) Hottest
4) Temperate zone	[]	iv) Hot
5) Moisture	[]	v) Cold

★★★★★

Note : Cut along the marking to avoid un-even cutting or torn

