

C - 16  
Lotus  
SEMESTERS

# FORMATIVE ASSESSMENT - IV


Lotus Rainbow SEMESTER BOOK

Class - 1:: MATHEMATICS : SEMESTER - II

Syllabus:  
(Lessons : 3 - 5 )  
Pg. No.s: 58 - 82

Time : 1 Hour

Max. Marks : 25




Name : \_\_\_\_\_ Class : \_\_\_\_\_ Section : \_\_\_\_\_ Roll No. \_\_\_\_\_

I. Each picture has one shape. Name it.

[6 x 1 = 6 M]

1.



\_\_\_\_\_

3.



\_\_\_\_\_

5.



\_\_\_\_\_

2.



\_\_\_\_\_

4.



\_\_\_\_\_

6.



\_\_\_\_\_

II. Name the following questions.

[4 x 1 = 4 M]

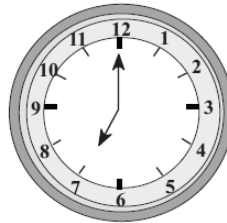


1. This shape is a round \_\_\_\_\_

2. This shape has 4 equal sides. \_\_\_\_\_

3. This shape has 2 short sides and 2 long sides \_\_\_\_\_

4. This shape has 3 corners and 3 sides. \_\_\_\_\_

III. Look at the clocks drawn below. Write the time on the blanks below. [4 x 1 = 4 M]



\_\_\_\_\_

\_\_\_\_\_

\_\_\_\_\_

\_\_\_\_\_

IV. Match the shapes. Draw a line from each shape to its name. [3 x 1 = 3 M]

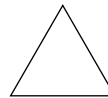
1. Square

a.



2. Triangle

b.



3. Rectangle

c.



V. Read these statements carefully and arrange them in the order that you would be doing it during the day. [6 x 1 = 6 M]

1. Going to school

\_\_\_\_\_

2. Bathing

\_\_\_\_\_

3. Doing homework

\_\_\_\_\_

4. Having lunch

\_\_\_\_\_

5. Returning home after school

\_\_\_\_\_

6. Playing with friends

\_\_\_\_\_

VI. Look at the patterns below and fill in the missing boxes. [2 x 1 = 2 M]

1)



2)



★ ★ ★ ★ ★