

C - 16
Lotus
SEMESTERS

FORMATIVE ASSESSMENT - II

Lotus Rainbow SEMESTER BOOK

25

Syllabus:
(Chapters 3 - 4)
Pg. No.s 241 - 250

Class - 2:: GENERAL KNOWLEDGE : SEMESTER - I


Time : 1 Hour

Max. Marks : 25

Name : _____ Class : _____ Section : _____ Roll No. _____

I. Name the nuts given below.

[9 × 1 = 9]



1 _____

2 _____

3 _____

4 _____

5 _____

6 _____


7 _____

8 _____

9 _____

II. Look at the pictures below and name the plant.

[4 × 1 = 4]



1. _____

2. _____

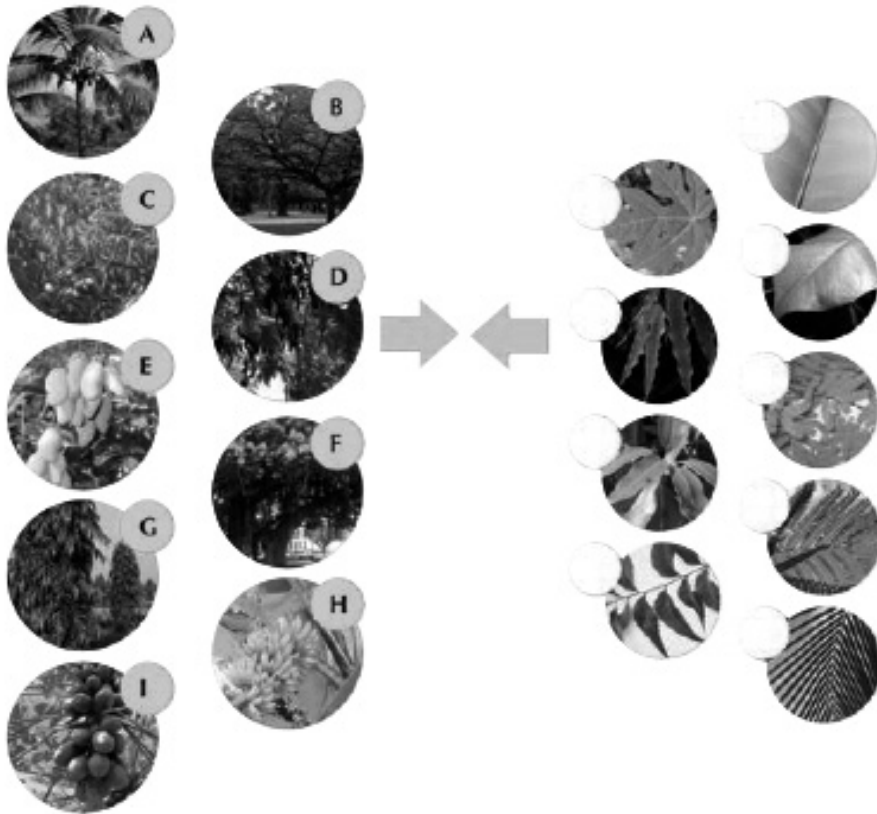
3. _____

4. _____

Note : Cut along the marking to avoid un-even cutting or torn

III. Match the leaf with its tree.


[9 × 1 = 9]



IV. Name the roots given below.

[3 × 1 = 3]

1. _____



2. _____



3. _____



★★★★