

C - 16
Lotus
SEMESTERS

FORMATIVE ASSESSMENT - III

Lotus Rainbow SEMESTER BOOK

Syllabus:
(Chapters 1, 2)
Pg. No.s 197 - 202

Class - 2 :: GENERAL KNOWLEDGE : SEMESTER - II

Time : 1 Hour

Max. Marks : 25

25

Name : _____ Class : _____ Section : _____ Roll No. _____

I. Name these means of transport.

[8 × 1 = 8]



1



2



3



4



5



6



7



8

Write

Your

answers

here

1

2

3

4

5

6

7

8

II. Name the parts of computer given below.

[8 × 1 = 8]

1. _____

2. _____

3. _____


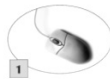
4. _____

5. _____

6. _____

7. _____

8. _____



Webcam,
CD Drive,
Printer,
Monitor,
Key Board,
Speakers,
Mouse, CPU.

III. Write the name under each road sign.

[4 × 1 = 4]



①

1. _____



②

3. _____



③

2. _____



④

4. _____


Help Box

Pedstrain path, Right turn, Cycle track, Left turn.

IV. Name the food items.

[5 × 1 = 5]

1. _____



2. _____



3. _____



4. _____



5. _____



★★★★