

C - 16
Lotus
SEMESTERS

SUMMATIVE ASSESSMENT - II

Lotus Rainbow SEMESTER BOOK

50

Syllabus:
(Chapters 1-7)
Pg. No.s 197 - 214

Class - 2 :: GENERAL KNOWLEDGE : SEMESTER - II

Time : 2½ Hrs

Max. Marks : 50

Name : _____ Class : _____ Section : _____ Roll No. _____

I. This is the list of golden good habits. Test yourself how many of these you have.

(12 × 1 = 12)

1. Get up early in the morning. Go to bed early.
2. Exercise every day to keep yourself active the whole day.
3. Wear neat clothes.
4. Go to school daily.
5. Reach school on time.
6. Wish your elders and greet your friends with a smile.
7. Listen carefully to your teachers and elders.
8. Help the old and needy.
9. Always speak the truth.
10. Speak politely.
11. Do your work on your own.
12. Share your things with your friends.

II. Name the food items.

(5 × 1 = 5)



1.
2.
3.
4.
5.

Note : Cut along the marking to avoid un-even cutting or torn

III. Write the name under each road sign.

(5 × 1 = 5)











Help Box


Speed breaker, Men at work,
No right turn, School ahead,
No left turn.

IV. Look at the following food items and state who has to eat what ?


(6 × 1 = 6)



a



b



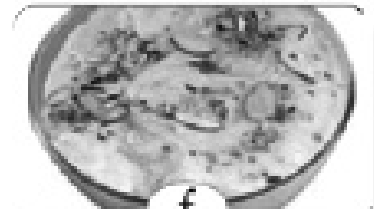
c



d



e



f

Match the following :

- | | | | |
|---|--------------|---|---|
| 1. Nanapatekar from Maharashtra | a. Rasagulla | [|] |
| 2. Lalu Prasad Yadav from Bihar can eat | b. Dosa | [|] |
| 3. Chandra Babu from Andhra Pradesh likes to eat | c. Belpuri | [|] |
| 4. Thankare from Maharashtra eats | d. Biryani | [|] |
| 5. Srinivasan from Tamil Nadu likes to eat | e. Srikhand | [|] |
| 6. Siddhartha Basu from West Bengal simply loves to eat | f. Malpuas | [|] |

V. Can you identify these icons ?

[3 × 1 = 3]

1.



2.



3.



Cycling, Tennis, Weight lifting.

VI. Name the following games and sports.

[9 × 1 = 9]



1



2




3




4



5



6



7



8



9

1 _____

2 _____

3 _____

4 _____

5 _____

6 _____

7 _____

8 _____

9 _____

Note : Cut along the marking to avoid un-even cutting or torn

VII. Look at the pictures and write which State are these people from ? [4 × 1 = 4]



1. _____

3. _____

2. _____

4. _____

VIII. Match the term to the game.

[6 × 1 = 6]



1. Penalty Kick



2. Knight



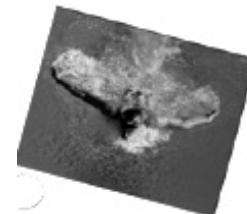
3. Butterfly stroke



4. Silly Point



5. Love all



6. Scoop

★★★★