

Name :

Section :

Roll No.

I. Name the group of animals.

[4 x 1 = 4 M]

1. A of Cows



2. A of Fish



3. A of Whales



4. A of Lions



II State whether the following statements are true or false.

[6 x 1 = 6 M]

1. Some were meat – eaters.

2. Some of them were as tiny as a chicken.

3. All the dinosaurs were reptiles.









4. Dinosaurs have become extinct.

5. Dinosaurs were as heavy as Ten Elephants.

6. Most dinosaurs were plant eaters.

III. Identify the following animals and write their names.

[8 x 1 = 8]

1) 	2) 	3) 	4) 
5) 	6) 	7) 	8) 

Now write the answers here.

- | | |
|--|---|
| <input type="checkbox"/> The largest bird | <input type="checkbox"/> Largest animal of the cat family |
| <input type="checkbox"/> Largest wing spanned bird | <input type="checkbox"/> Largest animal of the sea |
| <input type="checkbox"/> Largest living lizard | <input type="checkbox"/> Tallest animal |
| <input type="checkbox"/> Largest land animal | <input type="checkbox"/> Largest snake |

IV. Name the kind of plant on the basis of its description.

[7 x 1 = 7]

- | | | |
|------------------|---|-----------------------------|
| 1. Pitcher plant | <input type="checkbox"/> This plant grow bushy. | <input type="checkbox"/> a. |
| 2. Lotus | <input type="checkbox"/> These plants are usually less than one metre in height | <input type="checkbox"/> b. |
| 3. Rose plant | <input type="checkbox"/> The plants have weak stems. | <input type="checkbox"/> c. |
| 4. Water Melon | <input type="checkbox"/> These plants creep on the ground. | <input type="checkbox"/> d. |
| 5. Grapes | <input type="checkbox"/> These plants bear thorns. | <input type="checkbox"/> e. |
| 6. Tomato | <input type="checkbox"/> These are water plants. | <input type="checkbox"/> f. |
| 7. Jasmine plant | <input type="checkbox"/> These are insect-eating plants. | <input type="checkbox"/> g. |



◆◆◆◆◆