

Name :

Section :

Roll No.

I. Plants gives us different kinds of things which we use every day. Fill in the blanks.

[9 x 1 = 9]

1. Trees give us



○ ○ ○ ○ ○ ○

2. Trees give us



○ ○ ○ ○ ○ ○ ○ ○ ○ ○

3. Trees give us



○ ○ ○ ○ ○ ○ ○

4. Trees give us



○ ○ ○ ○ ○

5. Trees give us



○ ○ ○ ○ ○ ○

6. Trees give us



○ ○ ○ ○ ○ ○ ○ ○ ○ ○

7. Trees give us



○ ○ ○ ○

8. Trees give us



○ ○ ○ ○ ○ ○ ○ ○ ○ ○

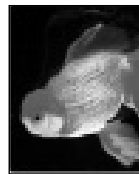
9. Trees give us



○ ○ ○ ○ ○ ○

II. Name these aquatic animals.

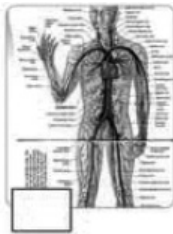
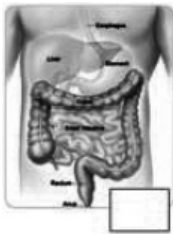
[6 x 1 = 6]



Help Box : Star Fish, Eel, Gold fish, Octopus, Dolphin, Shark

III. Number the system with the help of description.

[6 x 1 = 6]



1. Reproductive system helps in producing sex cells.
2. Skeletal system gives the shape and protects important organs.
3. Nervous system controls the activities of the human body.
4. Digestive system helps in the digestive of food.
5. Circulatory system supplies blood to different parts of the body
6. Respiratory system helps in supplying oxygen.

IV. Name the great men of science who invented the following.

[6 x 1 = 6]

He was an American inventor. He invented Electric Light Bulb.

This Scottish born American scientist invented Telephone.

This Scottish Engineer invented the first Steam Engine.

This German professor made the first Helicopter.

This English surgeon was the first to use antiseptics to prevent infections during operations.

He invented the Refrigerator.

Help Box

1. Jacob Perkin

3. Heinriche Focke

5. Graham Bell









2. Joesph Lister

4. James Watt

6. Thomas Alva Edison

IV. Name the spices and beverages.

[8 x 1 = 8]

1. 
2. 
3. 
4. 
5. 
6. 
7. 
8. 

**Help Box**

Ginger,  
Coffee beans,  
Coriander,  
Turmeric,  
Blackpepper,  
Tea Leaves  
Cloves, Chillies.

VI. Look at the food items. Write B for body building foods, E for energy giving foods and P for protective foods. [6 x 1 = 6]



**VII. Answer the following questions.**

[6 x 1 = 6]

1. .... is the largest planet in the Solar System.
2. A galaxy is the collection of .....
3. .... is also known as the 'red planet'.
4. .... is the farthest planet from the Sun.
5. .... is the planet that has rings around it.
6. .... is the planet that takes the longest to rotate around the Sun.

**VIII. Look at the plants and write where they grow best.**

[3 x 1 = 3]



Mango tree

\_\_\_\_\_



Pine tree

\_\_\_\_\_



Water lily

\_\_\_\_\_

**Help Box**

Hills and Mountains, Fresh water, Swamps.

