

C - 16
Lotus
SEMESTERS

FORMATIVE ASSESSMENT - III
Lotus Rainbow SEMESTER BOOK

Syllabus:
(1 - 3 Units)
Pg. No.s 57 – 98

Class - 4 :: MATHEMATICS : SEMESTER - II

Time : 1 Hour

Max. Marks : 25

25

Name :

Class :

Section :

Roll No.

A. Write the following time in numbers.

[3 x 1 = 3]

1. Quarter to one _____
2. Half past six _____
3. Quarter past eleven _____

B. Estimate the sum by rounding each number to the nearest ten.

[3 x 1 = 3]

1. $169 + 529 =$ _____
2. $753 + 814 =$ _____
3. $914 + 521 =$ _____

C. Write the weights after examining the pictures carefully.

[6 x 1 = 6]

1. 2 packets of milk _____
2. 1 bottle of honey _____
3. 5 bars of chocolate _____
4. 4 packets of sugar _____
5. 1 packet of tea _____
6. 2 packets of salt _____



250 g



500 g



350 g



40 g



750 ml

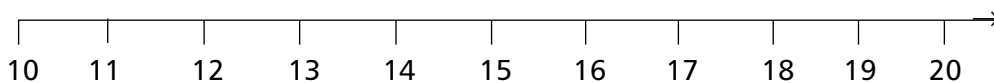


600 ml

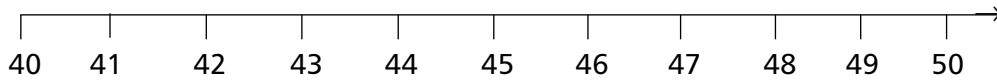
D. Using the number line, round the following numbers to nearest ten.

[3 x 1 = 3]

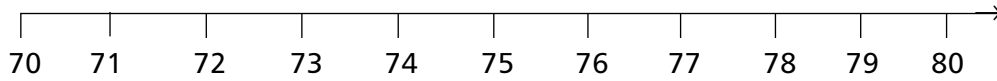
1. Is 15 nearer to 10 or 20 ? _____



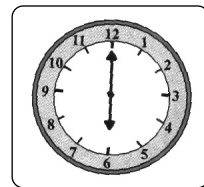
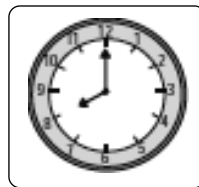
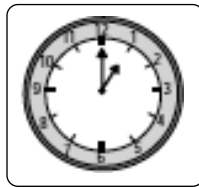
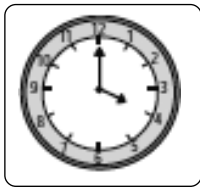
2. Is 44 nearer to 40 or 50 ? _____



3. Is 73 nearer to 70 or 80 ? _____



E. All the clocks below show the time in the afternoon or evening. Write the times below the clocks using 24 – hour time. [4 x 1 = 4]



Time is : _____ Time is : _____ Time is : _____ Time is : _____

F. Add the following. [3 x 1 = 3]

1. km m	2. l ml	3. kg g
25 105	21	3 400
+ 22 203	+ 2 237	+ 2 132
_____	_____	_____

G. Solve the following. [3 x 1 = 3]

1. 2 : 34 : 32 + 6 : 35 : 40 = _____

2. 4 : 52 : 12 + 3 : 24 : 29 = _____

3. 3 : 45 : 12 – 2 : 45 : 30 = _____

★ ★ ★ ★