

C - 16
Lotus
SEMESTERS

SUMMATIVE ASSESSMENT - II


Lotus Rainbow SEMESTER BOOK

Syllabus:
(Chapters 1 - 3)
Pg. No.s 287 - 310

Class - 4 :: GENERAL KNOWLEDGE : SEMESTER - II

Time : 2½ Hour

Max. Marks : 50



Name : _____ Class : _____ Section : _____ Roll No. _____

I. Answer the questions.

[6 x 1 = 6]

1. The is your body's control centre.
2. The hair and nail are made of
3. The longest bone in the human body is the
4. An adult human body contains about
5. The muscle has the most active muscle of the human body.
6. The Adam's apple is found in the

Eye	Brain
Throat	Thigh
45 litres of water	Kertain

II. Name the following personalities using picture clues.

[4 x 1 = 4]

Name :

1. Saurav Ganguly
2. Mahatma Gandhi
3. Balagangadhar Tilak
4. Sachin Tendulkar



--	--

--	--

Nick name :

- a. Lokmanya
- b. Bengal Tiger
- c. Bapu
- d. Master Blaster



--	--

--	--

III. Now answer the following questions.


[5 x 1 = 5]

1. The second largest planet is
2. is god of the underworld in Roman Mythology.
3. The planet with rings of ice and dust is
4. The planet closest to the sun is
5. Neptune has the strongest in the Solar System.

Venus	Wind
Saturn	Neptune
Mars	

IV. Here are some important Indian Superlatives. Name them.

[4 x 1 = 4]



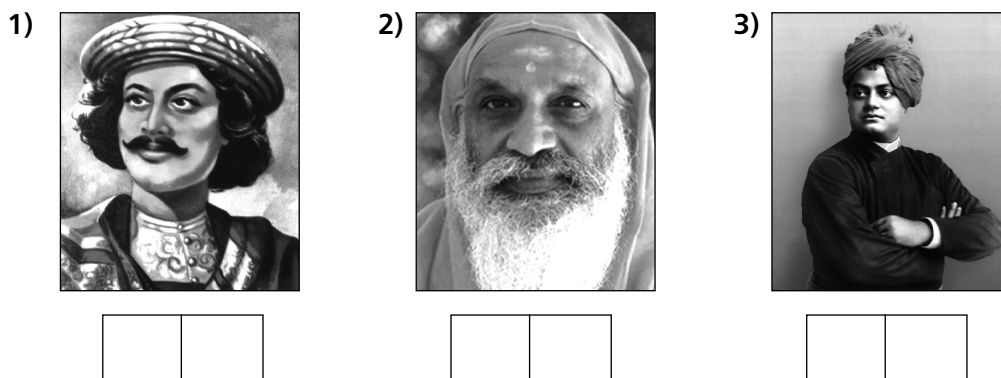
1. The Longest Bridge
2. The Largest Mosque
3. The Highest Minar
4. The Largest Statue



Mahatma Gandhi Sethu	Jama Masjid
Qutub Minar	Gomateswar

V. Here are some social reformers. Identify them.

[6 x 1 = 6]

Also associate with their movements.





- | | |
|-----------------------------|-------------------------------|
| 1. Sir Syed Ahmed Khan | a) Deccan Educational Society |
| 2. Mahadev Govind Ranade | b) Servants of Indian Society |
| 3. Gopalakrishna Gokhale | c) Aligarh Movement |
| 4. Swami Vivekananda | d) Brahma Samaj |
| 5. Swami Dayanand Saraswati | e) Arya Samaj |
| 6. Raja Ram Mohan Roy | f) Rama Krishna Mission |

VI. Different countries have different currency. Now look at the currency given below.

Name the country and currency.

[6 x 1 = 6]



- | | |
|--------------------|--------------------|
| 1. Country : | 4. Country : |
| Currency : | Currency : |
| 2. Country : | 5. Country : |
| Currency : | Currency : |
| 3. Country : | 6. Country : |
| Currency : | Currency : |

VII. Choose the correct answer.

[7 x 1 = 7]

- The temple of Seven Hills is located in this city. []
a) Delhi b) Agra c) Tirupathi
- This state is known as 'the granary of India'. []
a) Kerala b) Gujarat c) Punjab



3. State whose name means 'The Abode of Clouds'. []
 a) Mizoram b) Assam c) Megalaya
4. The world famous Tajmahal is located in this city. []
 a) Delhi b) Agra c) Gandhi Nagar
5. We call this city 'Green City'. []
 a) Jaipur b) Allahabad c) Banglore
6. State where the famous Pushkar fair is held every year. []
 a) Karnataka b) Rajasthan c) Gujarat
7. The city is known as ' the pink city of India'. []
 a) Hyderabad b) Banglore c) Jaipur

VIII. Here are some things. Can you name the inventors ? [6 x 1 = 6]

1. Aeroplane [] a) Charles Babbage
 2. Electric bulb [] b) Wright Brothers
 3. Computer [] c) Thomas Alwa Edison
 4. Rabies vaccine [] d) J.L. Baird
 5. Television [] e) Alexander Graham Bell
 6. Telephone [] f) Louis Pasteur

IX. Name the instrument and write how each one is used or played. [6 x 1 = 6]

1)



2)



3)



4)



5)



6)



Instrument Name :

- | | | |
|------------|-----------|-----------|
| 1) Sitar | 3) Guitar | 5) Drums |
| 2) Shehnai | 4) Violin | 6) Tabala |

How it is played ?

- | | |
|------------------------------|---------------------------|
| a) beat with fingers | d) blow into |
| b) vibrate with your fingers | e) play with a bow |
| c) hit with sticks | f) play with your fingers |

★ ★ ★ ★ ★