

C - 16  
Lotus Rainbow  
Semesters

## FORMATIVE ASSESSMENT - II


Lotus Rainbow Semester Book

Class - 5 :: English : SEMESTER - I

Syllabus:  
(3 & 4 Lessons)  
(Pg. No.s : 15 – 25)

Time : 1 Hour

Max. Marks: 25



Name :

Section :

Roll No.

### Listening and Speaking

I. Read the below text for baking chocolate cake.

(4M)

1. Sift white flour with baking soda and chocolate powder.
2. Put sugar and curd, and blend well using your hands or a blender.
3. Gradually, add butter and milk, and continue blending.
4. Once smooth, take a floured baking pan and put the batter in it.
5. Bake the cake for 7-8 minutes.
6. Once done, let the cake rest for 5 minutes.
7. Reverse the pan and take the chocolate cake out.
8. Apply a frosting of your choice or serve as it is after slicing.

Then make a list of the ingredients you will need to make the chocolate cake.

Write it below.

---

---

---

---

II. Do you have a room of your own at home ?

(3M)

If not, would you like one ? Describe the room you would like to have. Write in detail about the furniture, the colours of the wall, the various kinds of decorations you would like to put up, and any other detail you can think of.

---

---

---

**Reading**

I. **Read the following stanza and answer the questions.** [2 x 1 = 2]

No time to see, when woods we pass,  
Where squirrels hide their nuts in grass :  
No time to see, in broad daylight,  
Streams full of stars, like skies at night :

1. What is the poet trying to tell us in the above stanza ?
2. Why is there no time in today's world ?

II. **Answer the following questions.** [2 x 1 = 2]

1. Why did Deva Sharma's wife not leave her child with the mongoose ?
2. Why did Deva Sharma want to buy a pet ?

**Writing**

I. **Read these well-known proverbs. Find their meaning and use them in a sentence.** [6 x 1 = 6]

1. Look before you leap.
2. Let bygones be bygones.
3. Half a loaf is better than no bread.
4. When the cat's away, the mice are at play.
5. Pride goes before a fall.
6. Too many cooks spoil the broth.

**Grammar**

I. **Fill in the blanks using the simple present tense of the verbs given in the brackets below.** [4 x 1 = 4]

1. Shhhhh ! Be quiet ! John usually (sleep) \_\_\_\_\_ at this time of the day.
2. I hate living in Seattle because it always (rain) \_\_\_\_\_ there.
3. Every Monday, Sally (drive) \_\_\_\_\_ her kids to football practice.
4. Don't forget to take your umbrella. It (rain) \_\_\_\_\_ every evening these days.

**Vocabulary**

I. **Think of two words each which also mean the following.** [4 x 1 = 4]

1. Greedy : \_\_\_\_\_
2. Busy : \_\_\_\_\_
3. Important : \_\_\_\_\_
4. Happy : \_\_\_\_\_

★ ★ ★ ★ ★

C - 16  
Lotus Rainbow  
Semesters

## FORMATIVE ASSESSMENT - II


Lotus Rainbow Semester Book

Class - 5 :: Grammar : SEMESTER - I

Syllabus:  
(2 & 3 Lessons)  
(Pg. No.s : 45 – 52)

Time : 1 Hour

Max. Marks: 25



Name :

Section :

Roll No.

**A. Circle the right answers.**

[5 x 1 = 5]

1. Judy (is / isn't) a beautiful woman, isn't she ?
2. She (can / can't) read, can't she ?
3. They (didn't play / played) baseball, did they ?
4. He is (the / a) fastest boy in his class.
5. She is the (more beautiful / most beautiful) girl in school.

**B. Write the comparative and superlative forms.**

[4 x 1 = 4]

1. fast - \_\_\_\_\_ - \_\_\_\_\_
2. large - \_\_\_\_\_ - \_\_\_\_\_
3. hot - \_\_\_\_\_ - \_\_\_\_\_
4. long - \_\_\_\_\_ - \_\_\_\_\_

**C. Correct the tags in these tag questions.**

[4 x 1 = 4]

1. George and Bob can swim, they can't ?

\_\_\_\_\_

2. He drinks coffee, does he ?

\_\_\_\_\_

3. Amy doesn't go to shcool, does Amy ?

\_\_\_\_\_

4. These aren't your books, are books ?

\_\_\_\_\_

**D. Put the words in the correct order.**

[4 x 1 = 4]

1. biggest / It / animal / is / the / in the zoo.

\_\_\_\_\_

2. She / the / swimmer / fastest / on her team. / is

\_\_\_\_\_

3. This / higher / building / is / that / than / one.

\_\_\_\_\_

4. colder / December / is / than / October.

\_\_\_\_\_

**E. Fill in the blanks.**

[4 x 1 = 4]

1. He is a good student, \_\_\_\_\_ ?

2. She is an English teacher, \_\_\_\_\_ ?

3. This is your car, \_\_\_\_\_ ?

4. They can't swim in the sea, \_\_\_\_\_ ?

**F. Write the nouns in the correct order.**

[4 x 1 = 4]

1. Sam is nicer than Bobby. Tina is nicer than Sam.

\_\_\_\_\_

2. This red hat is more expensive than that blue hat. However, that pink hat is the most expensive hat in the store.

\_\_\_\_\_


3. A pencil is longer than an eraser. A ruler is longer than a pencil.

\_\_\_\_\_

4. John is taller than Mike. Kathy is taller than John.

\_\_\_\_\_

★ ★ ★ ★ ★



<b>Name :</b>	<b>Section :</b>	<b>Roll No.</b>
---------------	------------------	-----------------

I. Solve the following word problems. [3 x 2 = 6]

- Three strings of different lengths 240 cm, 318 cm and 426 cm are to be cut into equal lengths. What is the greatest possible length of each piece ?
- To make a jug of fruit punch, Karan needs  $2\frac{2}{3}$  cups of guava juice. If Karan wants to make 6 jugs of the punch how much guava juice does he need ?
- Mr. Sharma earns Rs.5,600 per week. He works 8 hours per day. How much does he earn in an hour ?

II. The L.C.M. of two numbers is 420 and their H.C.F. is 20. One of the numbers is 40 find the other. [2M]

III. Find the product of the following. [3 x 1 = 3]

- $4.98 \times 1000$  - \_\_\_\_\_
- $13.49 \times 10$  - \_\_\_\_\_
- $194.343 \times 100$  - \_\_\_\_\_

IV. Use properties of division to fill the blanks. [3 x 1 = 3]

- $0 \div \frac{5}{8} =$  \_\_\_\_\_
- $2\frac{1}{7} \div 2\frac{1}{7} =$  \_\_\_\_\_
- $\frac{4}{5} \div$  \_\_\_\_\_  $= 1$

V. Which of these numbers are divisible by 15. [3 x 1 = 3]

- 1,32,450 - \_\_\_\_\_
- 47,92,005 - \_\_\_\_\_
- 19,26,004 - \_\_\_\_\_

VI. Change the following improper fractions to mixed fractions. [4 x 1 = 4]

1.  $\frac{95}{14}$  - \_\_\_\_\_

3.  $\frac{51}{9}$  - \_\_\_\_\_

2.  $\frac{15}{4}$  - \_\_\_\_\_

4.  $\frac{12}{7}$  - \_\_\_\_\_

VII. Convert the decimals into fractions. [2 x 2 = 4]


1. 4.79 - \_\_\_\_\_

2. 15.12 - \_\_\_\_\_

\* \* \* \* \*

C - 16  
Lotus Rainbow  
Semesters

**FORMATIVE ASSESSMENT - II**  
**Lotus Rainbow SEMESTER BOOK**  
**Class - 5 :: Science : SEMESTER - I**



Syllabus:  
(3 – 5 Lessons)  
(Pg. No.s : 168 – 190)

Time : 1 Hour

Max. Marks: 25

**Name :** \_\_\_\_\_ **Section :** \_\_\_\_\_ **Roll No.** \_\_\_\_\_

**A. Short Answer Type Questions.** [2 x 2 = 4]

1. Give different ways of keeping your brain safe and healthy.
2. What are herbivores and omnivores ?

**B. Very Short Answer Type Questions.** [2 x 1 = 2]

1. What is the use of lungs in mammals ?
2. Define Floating ribs.

**C. Fill in the blanks with suitable words given below.** [4 x 1 = 4]

pupil    eight    resident birds    motor

1. The birds, which do not migrate, are called \_\_\_\_\_.
2. The skull is made up of \_\_\_\_\_ flat bones.
3. The \_\_\_\_\_ nerves carry messages from the brain to the muscles.
4. The black spot in the centre of eye is called \_\_\_\_\_.

**D. Write 'T' for True statement and 'F' for False statements.** [5 x 1 = 5]

1. The point at which two bones meet is called a joint.
2. The eyes are not the organs of sight.
3. Tadpoles breathe through their gills.
4. The bat is a mammal but it can't walk on its limbs.
5. The ribs form a type of cage, called rib cage.

E. Tick ( ✓ ) the correct answers.

[5 x 1 = 5]

1. How many bones are present in an adult human body ?

- a) 205       b) 206   
b) 210       d) 308

2. Mammals, reptiles and birds can breathe through their \_\_\_\_\_

- a) kidneys       b) spiracles   
c) lungs       d) all of these

3. Which are the components of the human brain ?

- a) spinal cord       b) nerves   
c) iris       d) cerebrum, cerebellum and medulla

4. The number of bones in a vertebrae is

- a) 33       b) 30   
c) 26       d) 34

5. Crocodile and geckos have \_\_\_\_\_

- a) 2 limbs to crawl       b) 4 limbs to crawl   
c) 6 limbs to crawl       d) None of these

F. Match the following columns.

[5 x 1 = 5]

Column - A

Column - B

- |                                  |        |                             |
|----------------------------------|--------|-----------------------------|
| 1. Animals like mice and rabbits | (    ) | a) hooked beaks             |
| 2. Plant eating animals          | (    ) | b) tracheae                 |
| 3. Owls and hawks have           | (    ) | c) floods, earthquakes, etc |
| 4. The spiracles lead into       | (    ) | d) rodents                  |
| 5. Natural calamities are        | (    ) | e) herbivores               |

★ ★ ★ ★ ★



C - 16  
Lotus Rainbow  
Semesters


**FORMATIVE ASSESSMENT - II**  
**Lotus Rainbow SEMESTER BOOK**

Syllabus:  
(5 - 8 Lessons)  
(Pg.No.s 236 - 261)

**Class - 5 :: Social Studies : SEMESTER - I**

Time : 1 Hour

Max. Marks: 25



**Name :** \_\_\_\_\_ **Section :** \_\_\_\_\_ **Roll No.** \_\_\_\_\_

**A. Define :** \_\_\_\_\_ [2 x 1 = 2]

1. Oasis
2. Homesteads

**B. Answer the following questions.** [3 x 2 = 6]

1. Describe the wildlife of the Prairies.
2. Explain the climate of Greenland.
3. What advantage has the airways over the other means of transport ?

**C. Fill in the blanks with suitable words given below.** [4 x 1 = 4]

ranches Thane Haj Iceberg

1. The pilgrimage to Mecca and Medina is called \_\_\_\_\_.
2. First railway line in India was laid between Mumbai and \_\_\_\_\_.
3. Open grasslands are called \_\_\_\_\_.
4. Huge pieces of ice floating in the sea are known as \_\_\_\_\_.

**D. Write 'T' for true and 'F' for false statements.** [4 x 1 = 4]

1. Beef is the main food of the people of Prairies.
2. Sledges are carts having wheels.
3. Lord Dalhousie was a British Governor – General.
4. There is very little rainfall in Saudi Arabia.

E. Tick ( ✓ ) the correct option.

[4 x 1 = 4]

1. The major ports of Saudi Arabia is

- |                   |                          |                  |                          |
|-------------------|--------------------------|------------------|--------------------------|
| i) Ras Taruna     | <input type="checkbox"/> | ii) Ad Dammam    | <input type="checkbox"/> |
| iii) Red Sea Port | <input type="checkbox"/> | iv) All of these | <input type="checkbox"/> |

2. Water transport includes \_\_\_\_\_

- |             |                          |                  |                          |
|-------------|--------------------------|------------------|--------------------------|
| i) rivers   | <input type="checkbox"/> | ii) seas         | <input type="checkbox"/> |
| iii) oceans | <input type="checkbox"/> | iv) all of these | <input type="checkbox"/> |

3. The population of Greenland is

- |             |                          |              |                          |
|-------------|--------------------------|--------------|--------------------------|
| i) 50,000   | <input type="checkbox"/> | ii) 80,000   | <input type="checkbox"/> |
| iii) 60,000 | <input type="checkbox"/> | iv) 1,00,000 | <input type="checkbox"/> |

4. The minerals found in Prairies are

- |                  |                          |                  |                          |
|------------------|--------------------------|------------------|--------------------------|
| i) iron          | <input type="checkbox"/> | ii) coal         | <input type="checkbox"/> |
| iii) mineral oil | <input type="checkbox"/> | iv) all of these | <input type="checkbox"/> |

F. Match the following.

[5 x 1 = 5]

**A**

**B**

- |                  |     |                                |
|------------------|-----|--------------------------------|
| 1. Sand dunes    | ( ) | i) Big city                    |
| 2. Sahara desert | ( ) | ii) Mecca and Medina           |
| 3. Jiddah        | ( ) | iii) Hillocks of sand          |
| 4. Haj           | ( ) | iv) Capital of Saudi Arab      |
| 5. Riyadh        | ( ) | v) Largest desert in the world |

★ ★ ★ ★ ★

C - 16  
Lotus Rainbow  
Semesters

## FORMATIVE ASSESSMENT - II


Lotus Rainbow SEMESTER BOOK

Syllabus:  
(2(c), 3 Chapters)  
(Pg. No.s : 285 – 290)

Class - 5:: General Knowledge : SEMESTER - I

Time : 1 Hour

Max. Marks: 25



Name :

Section :

Roll No.

I. Answer the following questions.

[5 x 1 = 5]

Help Box

thigh skeleton cerebrum neurons joint

1. A point where two bones meet is called a \_\_\_\_\_
2. The largest part of the brain is \_\_\_\_\_
3. The brain is made up of \_\_\_\_\_
4. The bony frame work of the body is called the \_\_\_\_\_
5. The longest bone in the human body is the \_\_\_\_\_

II. There are several different doctors for treating different kinds of diseases. They are called specialists. Can you name them. [5 x 1 = 5]

1. A Doctor who specialises in the treatment of kidney disease is called a \_\_\_\_\_
2. A Doctor who specialises in the treatment of heart diseases is called a \_\_\_\_\_
3. A Doctor who specialises in the treatment of skin diseases is called a \_\_\_\_\_
4. A Doctor who specialises in the treatment of Women's disease is called a \_\_\_\_\_
5. A Doctor who specialises in the treatment of eye disease is called an \_\_\_\_\_

III. Now say 'Yes' or 'No' to the following statements.

[5 x 1 = 5]

1. The heart is made up of 3 muscular chambers.
2. The heart has two artia and two ventricles.

3. The blood carries oxygen and food materials from the digestive system to the body tissues.

4. The right side of the heart takes in oxygen-carrying blood from the lungs.

5. The pulse is a wave of blood being pushed by heart beat.

**IV. Here are statements related to plants. Name them.**

**[5 x 1 = 5]**

**Help Box**

Field Orchard Nursery Biology Bonsai

1. A place where different kinds of fruits are grown.

2. The study of plants.

3. This term means miniature tree or shrub.

4. A place where young plants are grown.

5. A place where farmers grow crops.

**V. Complete the following statements.**

**[5 x 1 = 5]**

1. Sleeping sickness is caused by a fly called \_\_\_\_\_

2. \_\_\_\_\_ is a wasting disease that affects the lungs.

3. Leprosy is a disease caused by the \_\_\_\_\_

4. \_\_\_\_\_ is caused by the bite of mosquitoes.

5. Scurvy is caused due to the deficiency of \_\_\_\_\_

**Help Box**

germs Malaria vitamin C Tuberculosis tsetse

\*\*\*\*