

FORMATIVE ASSESSMENT - I

Class - III :: Vikram Lotus English

25

Time : 1 Hour

Max.Marks: 25

Name :

Class :

Section :

Roll No.

Listening and Speaking

- I. Listen to the conversation between two people. Then note down all the important information given by one speaker to the other. [4 x 1 = 4M]

Speaker 1 : Hello

Speaker 2 : Hello, can I speak to Mr. Jha ?

Speaker 1 : Mr. Jha is not at home at the moment. I am his son. Can I take a message for him ?

Speaker 2 : Yes. Could you please inform him that the members of the Road Safety Club are arranging for a meet on Sunday, 23 July, at 1.00 pm? We will be discussing how and when to organise a road safety training session for children aged 6 to 12 years.

Speaker 1 : Sure, I will let him know that.

Speaker 2 : Also, please ask him if he could create a Road sign chart or display for the same day ?

Speaker 1 : Sure.

Speaker 2 : Thank you. Have a good day.

- II. A Rainy Day [4×1=4M]

Have you ever been stuck anywhere due to heavy rainfall ?

- 1) How did you feel ? What did you see ? What did you do ? How did you reach home that day ? Write everything about it.

Reading

- I. Answer the questions in one sentence. [3 x 1 = 3M]

1. How did the lake in the forest help the elephants ?
2. Who was Katarina ?
3. What solution did the king come up with to solve the problem of water shortage ?

Writing

- I. Look at the sentences given below and write a short story using them. [5M]
A group of dogs chases a jackal. The jackal falls into a tub of dye and becomes blue. All the other jackals in the forest are scared of him. And then one rainy night ...









Grammar

- I. Write the plural forms of the following words. [5×1=5M]

- 1) Tomato _____
- 2) House _____
- 3) Elf _____
- 4) Scarf _____
- 5) Bell _____

Vocabulary

- I. Match the animals to their homes. [4 x 1 = 4M]

 Fish	●	●	 Coop
 Pigeon	●	●	 Pond
 Mouse	●	●	 Kennel
 Dog	●	●	 Burrow



FORMATIVE ASSESSMENT - I

Class - III :: Vikram Lotus Mathematics

25

Time : 1 Hour

Max.Marks: 25

Name :

Class :

Section :

Roll No.

I. Write these numbers in standard form.

[3 x 1 = 3M]

1) $600 + 20 + 5 =$ _____

2) Two hundred six – _____

3) Seven hundred eighty five – _____

II. Fill in the correct order of numbers.

[2 x 1 = 2M]

1) 4179, _____, _____, _____, _____.

2) 6145, _____, _____, _____, _____.

III. Write the given numbers in the standard form.

[3 x 1 = 3M]

1) Eight thousand nine hundred nine – _____

2) Five thousand fifty five – _____

3) One thousand ten – _____

IV. Give the place value of the circled digit.

[2 x 1 = 2M]

1) 37 (8) 1 = _____

2) 700 (2) = _____

V. Compare the numbers. Write $<$, $>$ or $=$.

[6 x 1/2 = 3M]

1) 7 3 2 1 _____ 7 3 1 2

4) 2 9 7 1 _____ 3 1 2 5

2) 3 2 4 1 _____ 3 2 5 1

5) 4 7 0 0 _____ 4 7 0 0

3) 1 9 7 6 _____ 2 9 7 6

6) 7 3 2 1 _____ 4 9 3 7

VI. Arrange the numbers in each set in ascending and descending order. [4 x 1 = 4M]

1) 6109, 6910, 6190, 6091 _____

2) 2345, 1927, 2176, 3124 _____

3) 2896, 2986, 3910, 3210 _____

4) 1900, 1700, 1800, 1100 _____

VII. Write the given numerals in roman numerals. [2 x 1 = 2M]

1) 25 _____

2) 85 _____

VIII. What do the following roman numerals stand for ? [2 x 1 = 2M]

1) VII _____

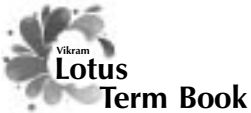
2) XL _____

IX. What is the difference between VI and IV ? [2M]

X. Write the answer of the following in roman numerals. [2 x 1 = 2M]


1) $100 - 5 =$ _____

2) $8 \times 1 =$ _____



FORMATIVE ASSESSMENT - I

Class - III :: Vikram Lotus Science



Time : 1 Hour

Max.Marks: 25

Name :	Class :	Section :	Roll No.
---------------	----------------	------------------	-----------------

A. Short Answer Type Questions.

[2 x 2 = 4M]

- 1) Why do living things move ?
- 2) How do plants breathe ?

B. Very Short Answer Type Questions.

[4 x 1 = 4M]

- 1) What do animals breathe out from their lungs ?
- 2) Why do the leaves of a plant look green ?
- 3) Write two features of non-living things ?
- 4) How does a fish breathe ?

C. Tick (✓) the right statements and cross (×) the wrong statements.

[4 x 1 = 4M]

- 1) Plants reproduce from seeds.
- 2) Birds and snakes lay eggs.
- 3) Leaves are the source of energy for a plant.
- 4) Animals are not dependent on plants for their food.

D. Tick (✓) the correct answers.

[4 x 1 = 4M]

- 1) Which one of the following series contains the things that can move and grow ?

i) roof, wall, floor

ii) ball, notebook, mountain

iii) baby, plant, animal

iv) scale, eraser, sharpner

2) What are the tiny pores in leaves called ?

i) roots

ii) shoot system

iii) stomata

iv) chlorophyll

3) Which one of the following series contains living things ?

i) rock, mineral, computer

ii) dog, tree, ant

iii) table, chair, toy

iv) scooter, car, cycle

4) Which one of the following is called the food factory of a plant ?

i) stem

ii) leaves

iii) flowers

iv) fruits

E. Fill in the blanks with suitable words given below.

[4 × 1 = 4M]

stomata air plants sense organs

1) Animals have _____ to feel.

2) _____ have no sense organs.

3) All plants and animals breathe in _____ .

4) Plants breathe through the tiny pores under their leaves, called _____ .

F. Match the following columns.

[5 × 1 = 5M]

Column – A

Column – B

1) Cat

()

a) tadpole

2) Frog

()

b) kitten

3) Man

()

c) caterpillar

4) Lion

()

d) a young boy

5) Butterfly

()

e) cub

E. Multiple Choice Questions. Tick (✓) the correct option.

[5 x 1 = 5M]

1) Magellan was a sailor from

i) USA

ii) Spain

iii) Portugal

iv) Pakistan

2) The left side of the map is

i) North

ii) South

iii) East

iv) West

3) India's rank in terms of area is

i) 2nd

ii) 3rd

iii) 5th

iv) 7th

4) A globe is useful for studying the different parts of the

i) Universe

ii) Earth

iii) Country

iv) Ocean

5) The Sun is a part of

i) Star

ii) Solar system

iii) Orbit

iv) None of the above

F. Match the following columns.

[5 x 1 = 5M]

Column – A

Column – B

1) Book of small maps

() a) Asia

2) Cartographer

() b) Landmasses

3) India

() c) One who makes map

4) Largest water body

() d) Atlas

5) Brown

() e) Pacific Ocean

FORMATIVE ASSESSMENT - I

Class - III :: Vikram Lotus General Knowledge

Time : 1 Hour

Max.Marks: 25

25

Name :

Class :

Section :

Roll No.

- I. Read the descriptions given below and find out our feathered friends from the image of words and circle it. [8M]

A	N	I	G	H	T	I	N	G	A	L	E	S
B	D	C	R	A	N	E	P	Q	R	S	T	U
C	D	E	P	A	R	R	O	T	M	N	O	P
P	C	U	C	K	O	O	M	N	O	T	S	P
A	B	P	E	L	I	C	A	N	C	D	E	F
P	I	G	E	O	N	P	Q	R	S	T	U	V
A	B	Q	U	E	T	Z	A	L	P	Q	R	S
R	O	A	D	R	U	N	N	E	R	S	T	U



1



2



3



4



5



6



7



8

Now read the descriptions.

If trained, it can speak like us.

It is a little bird once used to carry messages.

This bird is a symbol of long life in Japan.

A grey coloured bird that lays its eggs in another's nest.

It can run very fast.

This bird has a pouted beak to scoop up water and fish.

It can sing many tunes.

It is a beautiful bird that lives in the rain forests of South and Central America.

II. Match the animal to its right description.

[6M]



People use me to carry heavy logs in the forests.

I can walk miles and miles in the desert. I am called the ship of the desert.

People call me the friend of a farmer.

The washer men and others use me to carry loads.

You find me mostly in villages. I pull carts.

I am the better's favourite. I run the race.

III. Match the Beaks to its Claws.

[6 × ½ = 3M]



[]



[]



[]



[]



[]

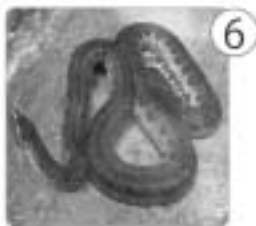


[]



IV. Identify the following animals and write their names.

[8M]



Write the answers here.

The largest bird

Largest animal of the cat family

Largest wing spanned bird

Largest animal of the sea

Largest living lizard

Tallest animal

Largest land animal

Largest snake
