

FORMATIVE ASSESSMENT - II**Class - III :: Vikram Lotus English****25**
 Syllabus :
 Term 1 (Lesson 3 - 4)
 Page No. 15- 26

Time : 1 Hour

Max.Marks: 25

Name :**Class :****Section :****Roll No.****Listening and Speaking**

- I. Read the following some pair of words same but have different meaning ? Write the meanings of each word in the pairs. [4M]

aloud – allowed

bare – bear

sun – son

Shoe – shoo

- II. Now complete the sentences with suitable words. [5 × 1 = 5M]

Please forgive me, I beg you pardon, I am sorry, I feel really bad

- 1) _____ I could not attend your party last evening.
- 2) _____ for not paying attention while you were reading.
- 3) Mummy _____ for making noise and waking you up.
- 4) _____ that I broke your scale.
- 5) _____ for losing your book.

Reading

Answer the following questions. [3 x 1 = 3]

1. Why was King John worried about his people ?
2. How did (Wright Brother's) their fascination with flying emerge ?
3. How do you think have airplanes changed our life to day ?

Writing

I. Have you ever visited an airport ? If you have, write a few lines to describe the airport. If you have not, write a few sentences on what you think an airport will be like. [5M]

Grammar

I. Fill in the blanks with present continuous tense of the verbs given in the bracket [3 × 1 = 3M]

- 1) The doctor _____ his patients. (examine)
- 2) The teacher _____ on the blackboard. (write)
- 3) My daddy _____ around the country this month. (travel)

Vocabulary

I. Match the words with the faces given below. [5 x 1 = 5M]

1) Happy ●



2) Sad ●



3) Scared ●



4) Angry ●



5) Surprised ●



V. Subtract 3 - digit numbers without regrouping.

[2 x 1 = 2M]

$$\begin{array}{r} \text{H} \quad \text{T} \quad \text{O} \\ \hline 7 \quad 8 \quad 5 \\ - 2 \quad 8 \quad 4 \\ \hline \\ \hline \end{array}$$

$$\begin{array}{r} \text{H} \quad \text{T} \quad \text{O} \\ \hline 6 \quad 3 \quad 8 \\ - 2 \quad 2 \quad 6 \\ \hline \\ \hline \end{array}$$

VI. Add the following.

[3 x 1 = 3M]

1) 65 and 25 = _____

2) 38 and 44 = _____

3) 74 and 08 = _____

VII. Find the sum of the following.

[3 x 1 = 3M]

1) 231 + _____ = 232

2) 193 + 1 = _____

3) 1 + _____ = 49

VIII. Arrange the given numbers in a vertical order and add.

[3 x 1 = 3M]

1) 7181 + 297 = _____

2) 4619 + 1972 = _____

3) 1987 + 2094 = _____

IX. Fill in the blanks.

[2 x 1 = 2M]

1) 470 - 470 = _____

2) 197 - _____ = 197



FORMATIVE ASSESSMENT - II

Class - III :: Vikram Lotus Science

25

Time : 1 Hour

Max.Marks: 25

Name :	Class :	Section :	Roll No.
--------	---------	-----------	----------

I. Short Answer Type Questions.

[2 x 2 = 4M]

- 1) What do you mean by Omnivores ?
- 2) Name any two plants that have tap roots.

II. Very Short Answer Type Questions.

[4 x 1 = 4M]

- 1) Differentiate between stem and trunk.
- 2) Why is root an important part of any plant ?
- 3) Name two animals that are called beasts of burden.
- 4) Why do animals eat food ?

III. Tick (✓) the right statements and cross (×) the wrong statements.

[4 x 1 = 4M]

- 1) Leech sucks the blood of its victim.
- 2) The stem of money plant is very hard and strong.
- 3) Bear eats both plants and flesh of other animals.
- 4) In a tap root plant, main root grows from end of the stem.

IV. Tick (✓) the correct answers.

[5 x 1 = 5M]

- 1) Which one of the following does not have any seed ?

i) Guava

ii) Banana

iii) Orange

iv) Apple

2) Which part of the plant is called kitchen of the plant ?

i) stem

ii) root

iii) fruit

iv) leaf

3) In which of the following plant, roots store food ?

i) Radish

ii) Beet root

iii) Carrot

iv) All of these

4) Which series of animals belongs to herbivores ?

i) cow, buffalo, goat, horse etc.

ii) lion, wolf, fox, snake etc.

iii) man, bear, crow, peacock etc.

iv) pigeon, sparrow, butterfly etc.

V. Fill in the blanks with suitable words given below.

[4 × 1 = 4M]

leech lamina upright scavengers

1) _____ feed on dead animals.

2) The root helps the plants to stand _____ .

3) The flat and broad part of leaf is called _____ .

4) The _____ sucks the blood of animals.

IV. Match the following columns.

[5 x 1 = 5M]

Column – A

Column – B

1) Tearing teeth

() a) cow

2) Grinding teeth

() b) radish

3) Sucking tubes

() c) mango

4) Tap root

() d) mosquito

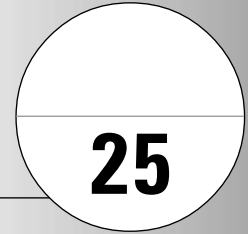
5) With one seed

() e) tiger



FORMATIVE ASSESSMENT - II

Class - III :: Vikram Lotus Social Studies



Time : 1 Hour

Max.Marks: 25

Name :	Class :	Section :	Roll No.
--------	---------	-----------	----------

I. Define [3 x 1 = 3M]

- 1) Phiran 2) Food grains 3) Union Territory

II. Answer the following questions. [3 x 1 = 3M]

- 1) How do women wear saree in different parts of India ?
- 2) What are seasonal fruits and vegetables ?
- 3) How are the Union Territories governed ?

III. Fill in the blanks with suitable words given below. [4 x 1 = 4M]

Central	Popular	West	West Bengal
---------	---------	------	-------------

- 1) Gujarat lies to the _____ of India.
- 2) Sandesh of _____ are famous worldwide.
- 3) Many Indian dresses are _____ worldwide.
- 4) The _____ government is responsible for the security of the people.

IV. Write 'T' for True and 'F' for False Statement. [5 x 1 = 5M]

- 1) There are 28 Union Territories in India.
- 2) Men wear different clothes in different states.
- 3) Bananas are available throughout the year.
- 4) A pyjama or dhoti worn as upper garment.
- 5) The offices of the state government are located in its capital.

V. Multiple Choice Questions. Tick (✓) the correct option. [5 x 1 = 5M]

1) The National capital Territory of Delhi is a

i) Union Territory

ii) State

iii) Central Government

2) Litch is available in

i) Summer

ii) Winter

iii) None of these

3) Veshti is a type of

i) Shirt

ii) Pant

iii) Lungi

4) Which of the following determines the clothes of a place ?

i) Air

ii) Wind

iii) Climate

5) Shimla is the capital of

i) Arunachal Pradesh

ii) Himachal Pradesh

iii) Rajasthan

VI. Match the following columns.

[5 x 1 = 5M]

Column – A

Column – B

16) Mundu

a) Upper garment

17) Phiran

b) Rajasthan

18) Angrakha

c) Kashmir

19) Mekhla-chador

d) Kerala

20) Ghagra-kachali

e) Assam

FORMATIVE ASSESSMENT - II

Class - III :: Vikram Lotus General Knowledge

25

Time : 1 Hour

Max.Marks: 25

Name : Class : Section : Roll No.

I. Fill in the blanks.

[9M]

1) Trees give us



2) Trees give us



3) Trees give us



4) Trees give us



5) Trees give us



6) Trees give us



7) Trees give us



8) Trees give us



9) Trees give us



II. Name the spices and beverages.







[8M]

1.



2.



3. 
4. 
5. 
6. 
7. 
8. 

Take My Help :

Ginger, Coffee beans, Coriander, Turmeric, Black pepper, Tea leaves, Cloves, Chillies

III. Plants grow in different kinds of soil. Look at the plants and write where they grow best. [8M]



Mango tree



Coconut tree



Pine tree



Date palm



Cactus tree



Banyan tree



Sea weeds



Water lily

Take My Help :

desert

plains

mountains and hills

coast

sea

fresh water

swamps
