

# SUMMATIVE ASSESSMENT - III

## Class - III :: Vikram Lotus English

# 50

 Syllabus :  
Term 3 (Lesson 1 - 4)  
Page No. 3 - 28

Time : 2½ Hours

Max.Marks: 50

<b>Name :</b>	<b>Class :</b>	<b>Section :</b>	<b>Roll No.</b>
---------------	----------------	------------------	-----------------

### Listening and Speaking

- I. Have you heard a match commentary ? Listen to the match commentary which your teacher will read out. Then answer the questions. [5 × 1 = 5M]

It's the second ball of the final over in the match between India and South Africa. Ashish Nehra is bowling to Robin Peterson. It's a six!!! Nehra bowls a length ball and Peterson slogs it over deep mid-wicket.

Nehra bowls to Peterson again. It's the third ball. Peterson comes down the track and edges the ball to the right of Dhoni. Tendulkar starts chasing the ball and throws a direct hit at the stumps. However, Peterson is not out.

The fourth ball of the over and it's boundary!!! Nehra bowls a fuller delivery outside the off stump and Peterson drives it through the covers. Peterson is a last over hero for South Africa. He yells out in joy and pumps his fist in the air.

- 1) Which teams are playing the game ?
- 2) Which team wins the match ?
- 3) What was the run scored in the last ball ?
- 4) Who was bowling to whom in the last ball ?
- 5) What does the batsman do when the game was over ?

- II. Talk about the dishes you love the most. [5M]

Tell your partner who prepares the food at home. Do you help in cooking? What ingredients are required to make your favourite dish ? Does everyone in your family enjoy it too ?

### Reading

- I. Answer the questions in one sentence. [3 x 1 = 3M]

- 1) From where did Jawaharlal Nehru receive his education ?
- 2) Which remarkable event took place in his life in 1947 ?
- 3) Why did Jawaharlal Nehru go to jail ?

- II. Answer the questions. [2 x 1 = 2M]

- 1) The giant saw a wonderful sight through a hole. What did he see ?
- 2) Why was it still winter in one corner of the garden ?

**III. Read the paragraph given below again, and answer the questions. [5 x 1 = 5M]**

The Second, feeling of the tusk,  
Cried, - "Ho! what have we here  
So very round and smooth and sharp ?  
To me 'tis mighty clear  
This wonder of an Elephant  
Is very like a spear !"

- 1) Name the poem and the poet of the above stanza
- 2) What do the second man compare the tusk to ?
- 3) On which part are the tusks of an elephant located ?
- 4) Name five items made of an elephant's tusk.
- 5) How are the tusks useful to the animal ?

**Writing**

**I. Write a letter to your principal requesting him to attend a Talent Show. Read the layout of the letter on the page and fill it up. [5M]**

Sender's address

---

---

---

Date:- \_\_\_\_\_

Receiver's designation

---

Receiver's address

---

---

Greetings :- \_\_\_\_\_

Body of the letter

---

---

---

---

---

---

---

---

---

Yours Sincerely,

Sender's name

---

II . Children's Day is all about having fun. Write down 10 lines on what you did last year on Children's Day. What made the day special. [5M]

**Grammar**

I. Fill in the blanks with the adverbs given below. [4 × 1 = 4M]

**upstairs      inside      back      anywhere**

- 1) We couldn't find you \_\_\_\_\_ .
- 2) Let's go \_\_\_\_\_ our house.
- 3) The bathroom is \_\_\_\_\_ .
- 4) We must walk \_\_\_\_\_ home.

II. Using these suffixes, make new words and fill in the blanks. [5 x 1 = 5M]

- 1) \_\_\_\_\_ er                      2) \_\_\_\_\_ ious
- 3) \_\_\_\_\_ le                      4) \_\_\_\_\_ ful
- 5) \_\_\_\_\_ ly

**Vocabulary**

I. Fill in the blanks from the story (The Giants Garden). Find the meanings of the words written in the blanks. [3 x 1 = 3M]

- 1) He sat on a window sill and looked out at the cold, \_\_\_\_\_ garden. "I want spring to come". he said to himself. "I want to go outdoors".
- 2) The giant thought to himself, "I wonder where spring is. Spring is \_\_\_\_\_ late this year.
- 3) In the giant's garden, it was still \_\_\_\_\_. Spring did not want to enter such an \_\_\_\_\_ place.

II. Write the short forms of the following. [4 x 1 = 4M]

- 1) We are \_\_\_\_\_
- 2) Should have \_\_\_\_\_
- 3) You are \_\_\_\_\_
- 4) Has not \_\_\_\_\_ .

III. Fill in the blanks either with 'make' or 'do' [4 x 1 = 4M]

- 1) To \_\_\_\_\_ an examination.
- 2) To \_\_\_\_\_ progress.
- 3) To \_\_\_\_\_ money.
- 4) To \_\_\_\_\_ harm to someone.

\*\*\*\*\*



# SUMMATIVE ASSESSMENT - III

## Class - III :: Vikram Lotus Mathematics

# 50

 Syllabus :  
 Term 3 (Units 1 - 7)  
 Page No. 31- 92

Time : 2½ Hours

Max.Marks: 50

<b>Name :</b>	<b>Class :</b>	<b>Section :</b>	<b>Roll No.</b>
---------------	----------------	------------------	-----------------

### I. Word problems (Verbal sums)

[2 × 2 = 4M]

- 1) Mini has 20 apples which weigh 4kg 400g and she has 20 pears which weigh 5 kg 300g. What is the total weight of apples and pears ?
- 2) Anjali decides to buy kthe toy engine for Madhav and pays ₹ 200. How much change would she get back ?

### II. Circle the units that would work best for measuring each thing.

[4 × 1 = 4M]

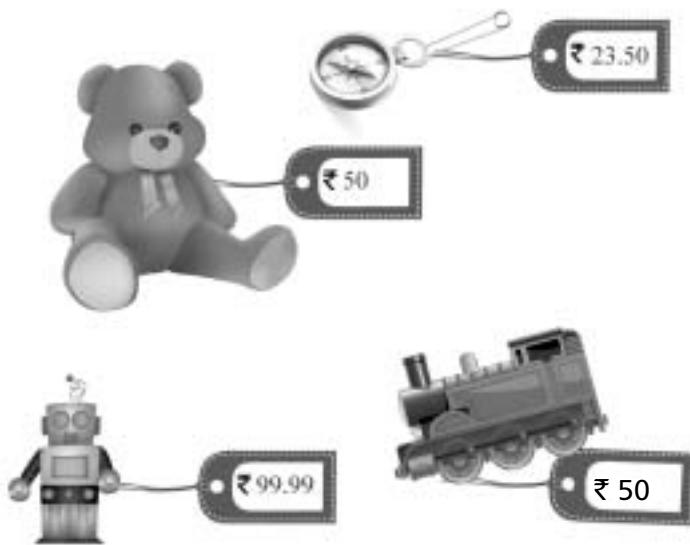
- 1) A compact disc                      kilograms              grams
- 2) A blue whale                      Kilograms              tonnes
- 3) A bar of soap                      grams                      kilograms
- 4) The salt in a bowl of soup              grams                      kilograms

### III. Write each time in the 24-hour clock time :

[5M]

1.	3:30 pm	
2.	4:15 am	
3.	5:45 am	
4.	11:00 pm	
5.	7:10 pm	
6.	9:45 am	

IV. Anjali goes shopping with her kids to a Mall. She sees the prices of the following toys. [4M]



- a) What would a teddy and a toy robot together cost ?
- b) What would be the total cost of keyring and a teddy bear ?
- c) How much would a toy engine and a keyring cost together ?
- d) Anjali decides to buy the toy engine for Madhav and pays ₹ 200. How much change would she get back ?

V. Write the time shown by the following clocks. [2 x 1 = 2M]



VI. Seema was writing her time table for some activities, however she forgot to put a.m. or p.m., can you help her to do it. [5 × 1 = 5M]

- 1) Going to school at 8 : 15    -    \_\_\_\_\_
- 2) Having dinner at 8 : 45    -    \_\_\_\_\_
- 3) Taking a bath at 7 : 15    -    \_\_\_\_\_
- 4) Doing homework at 5 : 45    -    \_\_\_\_\_
- 5) Milk time at 5 : 00    -    \_\_\_\_\_

VII. Convert the following from paise to rupees. [4 × 1 = 4M]

- 1) 805 p = ₹ \_\_\_\_\_
- 2) 1394 p = ₹ \_\_\_\_\_
- 3) 72 p = ₹ \_\_\_\_\_
- 4) 1215 p = ₹ \_\_\_\_\_

VIII. Solve the following. [3 × 1 = 3M]

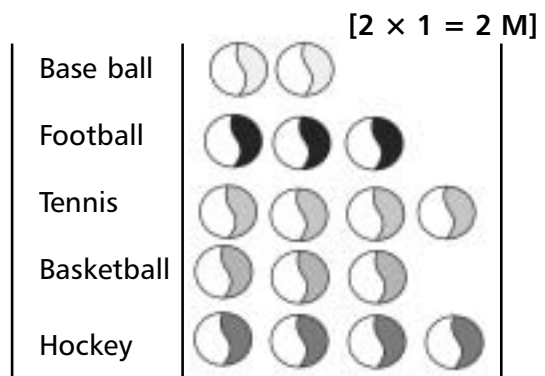
- |              |               |              |
|--------------|---------------|--------------|
| 1)    ₹    p | 2)    l    ml | 3)    ₹    p |
| 760. 00      | 21. 300       | 132.95       |
| - 245. 25    | - 12. 200     | + 216.83     |
| _____        | _____         | _____        |
| _____        | _____         | _____        |

IX. Divide the following : [4 × 1 = 4M]

- 1) ₹ 85 ÷ 5
- 2) ₹ 728.19 ÷ 9
- 3) ₹ 54.25 ÷ 5
- 4) ₹ 27.52 ÷ 2

X. The pictograph shows the bottles Ravi collected for recycling. The pictograph shows the favourite sports. [2 × 1 = 2 M]

- a) How many students choose Tennis as their favourite sport than Football ?
- b) How many students choose basketball as their favourite sport ?



XI. Write numbers for the given tally marks.

[3 × 1 = 3M]

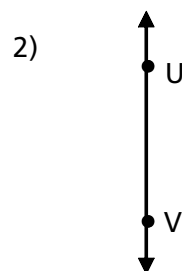
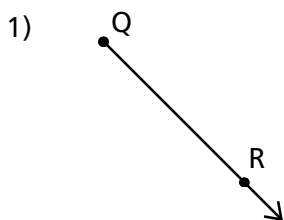
1) \_\_\_\_\_

2) \_\_\_\_\_

3) \_\_\_\_\_

XI. Write if each is a point, line segment, line or ray and its name.

[2 × 1 = 2M]



XII. Look at the number patterns below and complete the sequence.

[2×1=2M]

1) 22, 33, 44, 55, 66, \_\_\_\_\_, \_\_\_\_\_, \_\_\_\_\_

2) 11, 14, 18, 23, 29, 36, \_\_\_\_\_, \_\_\_\_\_



XIII. Use the calendar below to answer the questions.

[12 × ½ = 6M]



- 1) What is the day after 19th September ?
- 2) How many days is it from Monday 6th September to thursday 16th September ?  
\_\_\_\_\_
- 3) How many Wednesday's are there in September ? \_\_\_\_\_
- 4) What day of the week does September end on ? \_\_\_\_\_
- 5) What is the date the second Saturday in September ? \_\_\_\_\_
- 6) What is the date the first Tuesday in August ? \_\_\_\_\_
- 7) What day of the week does August Start on? \_\_\_\_\_
- 8) How many Sundays are there in August ? \_\_\_\_\_
- 9) How many days is it from Friday 20th August to 29th September ?
- 10) Which dates in August fall on a Monday ? \_\_\_\_\_
- 11) Which dates in September fall on a Friday ? \_\_\_\_\_ , \_\_\_\_\_ ,  
\_\_\_\_\_ and \_\_\_\_\_ .
- 12) What day is August 12<sup>th</sup> ?

\*\*\*\*\*





# SUMMATIVE ASSESSMENT - III

## Class - III :: Vikram Lotus Science

# 50

Syllabus :  
Term 3 (Lesson 1 - 5)  
Page No. 95 - 130

Time : 2½ Hours

Max.Marks: 50

<b>Name :</b>	<b>Class :</b>	<b>Section :</b>	<b>Roll No.</b>
---------------	----------------	------------------	-----------------

### I. Short Answer Type Questions.

[7 x 2 = 14M]

- 1) Define water cycle.
- 2) What are the phases of Moon ? Explain.
- 3) What is measured in Kilometers ?
- 4) What first aid must be given to an injured person who is bleeding ?
- 5) How do you keep your house clean ?
- 6) What causes day and night on the Earth ?
- 7) How is vapour formed from water ?

### II. Very Short Answer Type Questions.

[5 x 1 = 5M]

- 1) What are the three states of water ?
- 2) Who are astronauts ?
- 3) Write the names of countries where the unit 'yard' is still used.
- 4) What are igloos ?
- 5) What should first aid be given in the case of body burn ?

### III. Tick ( ✓ ) the right statements and cross ( × ) the wrong statements.

[8 x 1 = 8M]

- 1) The rotation of Earth causes day and night.
- 2) We wear cotton clothes in winter.
- 3) Some planets have many moons.
- 4) Nylon clothes catch fire easily.

5) Our milkman gives us milk in litres.

6) The shape of the Earth is like a ball.

7) Oxygen is not needed for burning.

8) The drains of kitchen and bathroom should be left open.

**IV. Tick ( ✓ ) the correct answers.**

**[8 x 1 = 8M]**

1) When we cannot see the moon at all, is called .....

i) Full moon

ii) New moon

iii) Half moon

iv) None of these

2) Never take medicines without consulting a .....

i) Farmer

ii) Doctor

iii) Postman

iv) Lawyer

3) Which is the correct statement about revolution of Earth ?

i) The revolution of the earth is completed in 365 days.

ii) The revolution of the earth is completed in 30 days.

iii) The revolution of the earth is completed in 24 days.

iv) None of the above.

4) Which one of these helps in burning ?

i) Air

ii) Water

iii) Dust

iv) None of these

5) One yard is equal to \_\_\_\_\_ .

i) 0.8599 m

ii) 0.9144 m

iii) 1 m

iv) None of these

6) When we freeze water, it changes into \_\_\_\_\_ .

i) ice

ii) water vapour

iii) steam

iv) none of these

7) How much of the Earth's surface is covered with water ?

i)  $\frac{3}{4}$   ii)  $\frac{2}{3}$

iii)  $\frac{1}{2}$   iv)  $\frac{1}{3}$

8) Temperature is measured in

i) Celsius  ii) Fahrenheit

iii) Both (i) & (ii)  iv) None of these

V. Fill in the blanks with suitable words given below.

[6 × 1 = 6M]

Left axis light watervapour electric shock liquid

- 1) While riding a bicycle, always keep to your \_\_\_\_\_ .
- 2) The earth rotates about an imaginary line called its \_\_\_\_\_ .
- 3) The moon has no \_\_\_\_\_ of its own.
- 4) Dust particles and \_\_\_\_\_ are contained in air.
- 5) You may get \_\_\_\_\_ if you touch the electric appliances with wet hands.
- 6) Normally, water exists in \_\_\_\_\_ form.

IV. Match the following columns.

[4 x 1 = 4M]

I. Column – A

Column – B

- |           |                    |
|-----------|--------------------|
| 1) Cotton | a) Sheep           |
| 2) Jute   | b) man-made fibres |
| 3) Nylon  | c) jute plant      |
| 4) Wool   | d) cotton plant    |

II. Column – A

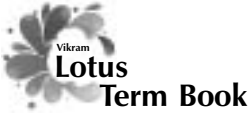
Column – B

[5 x 1 = 5M]

- |                 |   |
|-----------------|---|
| 1) Air          | a) Cold wind                                      |
| 2) Cyclone      | b) a strong wind with lighting, thunder and rain. |
| 3) Condensation | c) rain   |
| 4) Water cycle  | d) mixture of gases                               |
| 5) Breeze       | e) turning of vapours into drops of water         |

\*\*\*\*\*





# SUMMATIVE ASSESSMENT - III

Class - III :: Vikram Lotus Social Studies

Time : 2½ Hours

Max.Marks: 50

50

Name :	Class :	Section :	Roll No.
--------	---------	-----------	----------

I. Define in a sentence.

[5 x 1 = 5M]

- |           |             |                  |
|-----------|-------------|------------------|
| 1) Invent | 2) Discover | 3) Bay of Bengal |
| 4) Seabed | 5) Embassy  |                  |

II. Answer the following questions.

[5 x 3 = 15M]

- 1) What is a raft ?
- 2) How was fire useful to the early humans ?
- 3) Write down the names of some industries in Kolkata.
- 4) Why is Mumbai called the Business Capital of India ?
- 5) Why is Delhi a Mini - India ?

III. Fill in the blanks with suitable words given below.

[7 x 1 = 7M]

fire Yamuna seabed kolkata winter food goods

- 1) The early men used rafts to transport \_\_\_\_\_ across rivers.
- 2) The early men spent most of their time looking for \_\_\_\_\_ .
- 3) Chennai receives rain mainly in \_\_\_\_\_ .
- 4) Science city is situated in \_\_\_\_\_
- 5) Crude oil has been found in \_\_\_\_\_ off the Mumbai coast.
- 6) Delhi is situated on the banks of the river \_\_\_\_\_.
- 7) At first, they were afraid of the \_\_\_\_\_ .

**IV. Write 'T' for True and 'F' for False Statements.**

**[7 x 1 = 7M]**

- 1) All wheels are round.
- 2) The early humans used to eat wild fruit and roots, and raw flesh of animals.
- 3) New name of Chennai is Madras.
- 4) Vidyasagar Setu has also been built on the River Hoogli.
- 5) Bhabha Atomic Research Centre (BARC) is situated at Delhi.
- 6) The Iron Pillar near Qutub Minar has not rusted since it was built.
- 7) The early men first settled in villages near rivers.

**V. Multiple Choice Questions. Tick ( ✓ ) the correct option.**

**[6 x 1 = 6M]**

- 1) The early men kept moving from place to place in search of
  - i) clothes
  - ii) food
  - iii) tools
  - iv) animals
- 2) The Howrah Bridge has \_\_\_\_\_ pillars.
  - i) no
  - ii) one
  - iii) two
  - iv) three
- 3) Which of the following is not a beach ?
  - i) Varsova
  - ii) Chaupati
  - iii) CST
  - iv) Marine Drive
- 4) The Mughal Garden is located in the premises of
  - i) Parliament house
  - ii) Rashtrapati Bhawan
  - iii) North Block
  - iv) South Block



5) The main means of transport in Kolkata is

i) trams

ii) metro

iii) double decker buses

iv) all of these

6) The tools of the early men were made of

i) stones

ii) wood

iii) iron

iv) steel

VI. Match the following columns.

[5 x 1 = 5M]

I. Column – A

Column – B

1) Barks and leaves of trees

a) Fire

2) Fruits and roots

b) Digging and Killing

3) Wild animals

c) Dress of early man

4) Sharp stones

d) Ran away from fire

5) Rubbing two tones

e) Food of early man

II. Column – A

Column – B

[5 x 1 = 5M]

1) Haryana

a) South Block

2) Shahjahan

b) Jawaharlal Nehru

3) Rainy Season

c) On three sides of Delhi

4) Shanti Van

d) July to September

5) Prime Minister's Office

e) Red Fort

\*\*\*\*\*



# SUMMATIVE ASSESSMENT - III

## Class - III :: Vikram Lotus General Knowledge

# 50

Syllabus :  
Term 3 (Chapter 1 - 3)  
Page No. 171- 190

Time : 2½ Hours

Max.Marks: 50

**Name :** \_\_\_\_\_ **Class :** \_\_\_\_\_ **Section :** \_\_\_\_\_ **Roll No.** \_\_\_\_\_

I. Name the people and match each of them with the work they do. [8M]



Write your answers here.

1. .... 5. ....  
2. .... 6. ....  
3. .... 7. ....  
4. .... 8. ....

Take My help :

- (a) Odissi Dancer, (b) Shehnai (c) Carnatic Vocal (d) Flute  
(e) Tabala (f) Kathak (g) Magician (h) Sitar

II. Following are the national sports of different countries. Write the names of countries.

[8M]



1 Hockey



2 Foot ball



3 Cricket



4 Gymnastics



5 Sumo



6 Base Ball



7 Chess



8 Bull Racing

1. China

2. India

3. Brazil

4. England

5. Spain

6. Japan

7. USA

8. Russia

III. Write the Nationality and also identify the national flag of the country.[8 × 1 = 8M]

1)  The People of America \_\_\_\_\_

2)  The People of China \_\_\_\_\_

3)  The People of Denmark \_\_\_\_\_

4)  The People of England \_\_\_\_\_

5)  The People of Germany \_\_\_\_\_

6)  The People of Indonesia \_\_\_\_\_

7)  The People of Japan \_\_\_\_\_

8)  The People of India \_\_\_\_\_



Take My help :

(a) Indians

(b) Chinese

(c) British

(d) Indonesians

(e) Americans

(f) Danes

(g) Germans

(h) Japanese

IV. Here are some popular brand names. Can you name the product ?

[12M]

1.	Titan	
2.	Lifebuoy	
3.	Britannia	
4.	Colgate	
5.	Kodak	
6.	Bata	
7.	Pepsi	
8.	Horlicks	
9.	M.R.F	
10.	Nutrine	
11.	Hero Honda	
12.	Bru	

V. The following Sports persons have done something great in their field of game. Can you identify them ? Also name the game / sport with which they are associated.

[9 × 1 = 9M]

1) 	2) 	3) 
4) 	5) 	6) 
7) 	8) 	9) 

**Take My Help :**

- |                      |                 |                 |                    |
|----------------------|-----------------|-----------------|--------------------|
| 1) Sania Mirza       | 2) Mithali Raj  | 3) Koneru Humpi | 4) Irfan Pathan    |
| 5) Anju Bobby George | 6) Karthi Keyan | 7) Tiger Woods  | 8) Anna Kournikova |
| 9) P.T. Usha         |                 |                 |                    |
| a. Chess             | b. Cricket      | c. Wait Lifting | d. Athletics       |
| e. Motar Racing      | f. Golf         | g. Tennis       |                    |

V. How much do you know about the different States in our country ? Write the right number. [5 × 1 = 5M]

1)  Chattisgarh

2)  Jharkhand

3)  Uttaranchal

4)  Andhra Pradesh

5)  Tamil Nadu

**Take My Help :**

1) Chennai

2) Hyderabad

3) Dehradun

4) Ranchi

5) Raipur

\*\*\*\*\*