

# SUMMATIVE ASSESSMENT - III

## Class - V :: Vikram Lotus English

# 50

 Syllabus :  
 Term 3 (Lessons 1- 3)  
 Page No. 3 - 22

Time : 2½ Hours

Max.Marks: 50

<b>Name :</b>	<b>Class :</b>	<b>Section :</b>	<b>Roll No.</b>
---------------	----------------	------------------	-----------------

### Speaking

I. Do you know any stories related to Christmas ? Write that story.

[5M]

II. This is Preety's room. Can you write your class how she can look after her things and tidy up her room ?

[5M]



### Reading

I. Answer the following questions.

[4 x 1 = 4M]

1. What gift did the Greeks send? Why ?
2. What was the weaver's name ?
3. What advice did the weaver's wife give him ?
4. What advice did the barber give the weaver ?

II. Read the stanza below and answer the questions.

[2 x 1 = 2M]

"The music in my heart I bore,  
 Long after it was heard no more".

- 1) What does the poet guess about the theme of the reaper girls song ?
- 2) How does Wordsworth describe the song of the Solitary Reaper ?

III. Answer the questions.

[4 x 1 = 4M]

- 1) What dream did Van Amsterdam have ?
- 2) How did they know that Mary had died ?
- 3) Why did Mary go across the sands of Dee ?
- 4) Name the famous cookies made by the baker. Describe the cookies.

Writing

- I. The Scuba diver has made a new underwater friend. Write a short story that explains how they met. [5M]



- II. Write the story in a short paragraph from the point of view of the old women.[5M]

Grammar

- I. Complete the sentences by using 'for' or 'since' correctly.

[2 x 1 = 2M]

- 1) We've been here \_\_\_\_\_ nine O'clock.
- 2) I have studied non-stop \_\_\_\_\_ 9.15.

- II. Let's learn some common idiomatic comparisons with 'as \_\_\_\_\_ as'. Complete the idioms given below. [3 x 1 = 3M]

- 1) As bright as a \_\_\_\_\_ .
- 2) As brittle as \_\_\_\_\_ .
- 3) As hungry as a \_\_\_\_\_ .

**III. Spot the adverbs in each sentence and write their correct category. [2 × 1 = 2M]**

- 1) He received his friend eagerly at the station after a long time.
- 2) The terrorists attacked people brutally.

**IV. Fill in the blanks with suitable non-finites, using the verb given in brackets.**

[4 × 1 = 4M]

After \_\_\_\_\_ (spend) a week in the cottage, he decided that he didn't really enjoy \_\_\_\_\_ (live) in the country and began \_\_\_\_\_ (think) of an excuse for \_\_\_\_\_ (sell) the cottage.

**Vocabulary**

**I. Write the names of the places where these people work.**

[3 × 1 = 3M]

- 1) Postman - \_\_\_\_\_
- 2) Driver - \_\_\_\_\_
- 3) Pilot - \_\_\_\_\_

**II. Choose the options from the bracket fill in the blank in each question. [4 × 1 = 4M]**

- 1) I \_\_\_\_\_ I had more money. (hope, wish, desire )
- 2) They \_\_\_\_\_ from India to England by sea. (travel, journey, voyage)
- 3) The earth \_\_\_\_\_ round the sun. (rotate, revolve, move)
- 4) I can \_\_\_\_\_ some one knocking at the door. (listen, hear, receive)

**III. In each line, underline the word that is different from the others in meaning.**

[2 × 1 = 2M]

1.	pledge	prize	award	trophy	medal
2.	cover	mask	facade	cavern	front

\*\*\*\*\*





# SUMMATIVE ASSESSMENT - III

## Class - V :: Vikram Lotus Mathematics

Time : 2½ Hours

Max.Marks: 50

50

Name :

Class :

Section :

Roll No.

I. Solve the following word problems.

[5 x 2 = 10M]

- 1) A man works for 17 days and earns ₹ 306. What is his daily wage ?
- 2) If a car covers 102 kms in 6.8 litres of petrol, how much distance will it cover in 24.2l of petrol ?
- 3) 12 men can dig a pond in 8 days. How many men can dig it in 6 days ?
- 4) 21 classrooms of the same size require 546 desks altogether. How many desks does 1 classroom require ?
- 5) If 18 dolls cost ₹ 630, how many dolls can be bought for ₹ 455 ?

II. Mr. Sharma drives from Mumbai to Lonavala, a distance of 112 km in 2 hrs. Find the speed with which Mr. Sharma travels ?

[2M]

III. Find the volume of the cuboids given in the following measurements. [2×1=2M]

- 1)  $l = 10$  cm,  $b = 4$  m,  $h = 5$  cm – \_\_\_\_\_
- 2)  $l = 5$  cm,  $b = 4$  cm,  $h = 3$  cm – \_\_\_\_\_

IV. Fill in the blanks.

[5 × 1 = 5M]

- 1) If volume is  $70 \text{ cm}^3$  then capacity is \_\_\_\_\_ .
- 2) The unequal side of an isosceles triangle is called the \_\_\_\_\_ .
- 3) In an equilateral triangle all sides are of \_\_\_\_\_ length.
- 4) Volume of a cuboid = \_\_\_\_\_ .
- 5) If volume is  $2,000 \text{ cm}^3$  then capacity is \_\_\_\_\_ .

V. Express each of the speeds in km / hr.

[3 × 1 = 3 M]

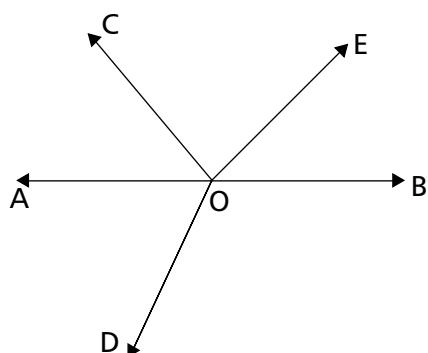
1) 80 m / sec – \_\_\_\_\_.

2) 40 m / sec – \_\_\_\_\_

3) 35 m / sec – \_\_\_\_\_

VI. Name all the angles formed in the given figure :

[2M]



\_\_\_\_\_

\_\_\_\_\_

\_\_\_\_\_

\_\_\_\_\_

\_\_\_\_\_

VII. Draw angles of the following measure using a protractor and name them. [3×1=3M]

1) 75°      2) 45°      3) 59°

VIII. Convert the following temperatures from Celsius to Fahrenheit scale. [3 x 1 = 3M]

1) 45°C – \_\_\_\_\_

2) 82°C – \_\_\_\_\_

3) 70°C – \_\_\_\_\_

IX. A survey of 145 people was done to find their favourite fruit.

[5M]

Fruit	People
Apple	35
Mango	30
Banana	10
Orange	25
Grapes	40
Kiwi	5

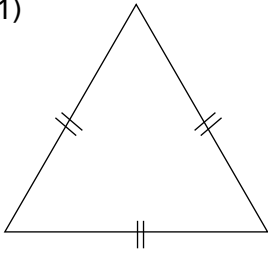
Draw a bar graph for the given data and answer the following :

1. What is represented on the X-axis ?
2. What is represented on the Y-axis ?
3. Which is the most popular fruit ?
4. Which is the least popular fruit ?
5. Do you need a key with this graph ?

X. Classify the given triangles as scalene, isosceles or equilateral.

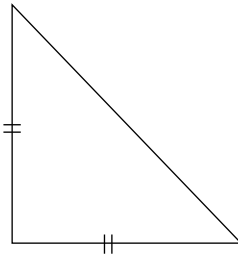
[3 x 1 = 3M]

1)



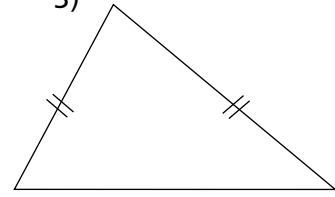
\_\_\_\_\_

2)



\_\_\_\_\_

3)




\_\_\_\_\_


XI. Use a pencil to draw as many lines of symmetry as possible for each figure.

[2 x 1 = 2M]

1)



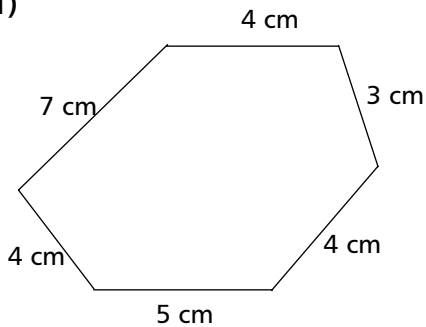
2)



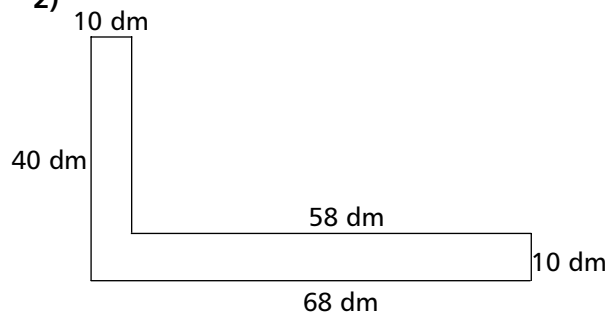
XII. Find the perimeter of the following figures.

[2 x 1 = 2M]

1)



2)



XIII. The average outside temperature of each day of a city is recorded as follows. [2M]

Monday 86° F, Tuesday 90° F, Wednesday 87° F,

Thursday 84° F, Friday 85° F

1) On which day was the temperature maximum ?

2) What is the average temperature of 5 days ?

XIV. Write the temperature shown in each thermometer.

[2 × 1 = 2M]



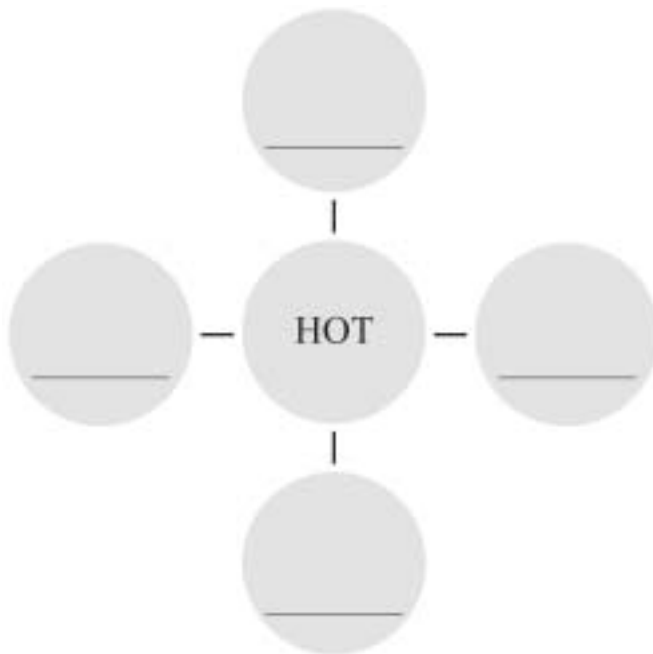
\_\_\_\_\_



\_\_\_\_\_

XV. Write 4 things that are hot in temperature.

[4M]



\*\*\*\*\*





# SUMMATIVE ASSESSMENT - III

## Class - V :: Vikram Lotus Science

# 50

Syllabus :  
Term 3 (Lessons 1 - 5)  
Page No. 99 - 134

Time : 2½ Hours

Max.Marks: 50

<b>Name :</b>	<b>Class :</b>	<b>Section :</b>	<b>Roll No.</b>
---------------	----------------	------------------	-----------------

### I. Short Answer Type Questions.

[5 x 3 = 15M]

- 1) What precautions you should give to an injured person having fracture ?
- 2) Explain solar eclipse.
- 3) What are the different types of volcano ?
- 4) How earth acts as a greenhouse ?
- 5) What do you mean by satellite ?

### II. Very Short Answer Type Questions.

[6 x 2 = 12M]

- 1) I am called the red planet. Who am I ?
- 2) Epicenter.
- 3) What is neap tide and spring tide ?
- 4) What is first aid ?
- 5) Environmental degradation.
- 6) Tectonic plates.

### III. Tick ( ✓ ) the right statements and cross ( × ) the wrong statements.

[6 x 1 = 6M]

- 1) Methane is produced from cattle as they digest their food. [       ]
- 2) Earthquake can trigger Tsunamis. [       ]
- 3) A lunar month is about 27 days. [       ]
- 4) We should wash our hands before giving first aid to an injured person. [       ]
- 5) Mercury is the largest planet. [       ]
- 6) Earthquakes can be predicted in advance. [       ]

### IV. Tick ( ✓ ) the correct answers.

[5 x 1 = 5M]

- 1) Which planet is the farthest one from the sun ?

i) Venus

ii) Mars

iii) Saturn

iv) Neptune

2) The astronaut to go into space aboard Apollo 11

- i) Neil Armstrong  ii) Michael Collins   
iii) Edwin Aldrin  iv) All of these

3) CFCs are used in

- i) refrigerators  ii) trains   
iii) cars  iv) ACs

4) Which statement is correct in case of safety ?

- i) Be alert  ii) Be properly dressed   
iii) Avoid being over confident  iv) Do not follow the safety rules impatiently

5) An earthquake can disrupt \_\_\_\_\_ .

- i) electricity in cities  ii) air   
iii) sun light  iv) all of these

V. Unscramble the following words to make meaningful words.

[7 × 1 = 7M]

- 1) OCVLAON : \_\_\_\_\_ .  
2) OUSEHEENGR : \_\_\_\_\_ .  
3) TURESFRAC : \_\_\_\_\_ .  
4) UTRALTELOIV : \_\_\_\_\_ .  
5) CENEPITRE : \_\_\_\_\_ .  
6) DENTSACCI : \_\_\_\_\_ .  
7) NBOCAR : \_\_\_\_\_ .

VI. Fill in the blanks with suitable words given below.

[5 x 1 = 5M]

stars, bone, sun, epicenter, mars, planets

- 1) The centre of the earthquake is called \_\_\_\_\_ .  
2) Any break or crack in the \_\_\_\_\_ is called a fracture.  
3) The fourth nearest planet to the sun is \_\_\_\_\_ .  
4) Solar system consist of the \_\_\_\_\_ and eight \_\_\_\_\_ .  
5) We can see a large number of \_\_\_\_\_ in the sky.

\*\*\*\*\*



# SUMMATIVE ASSESSMENT - III

## Class - V :: Vikram Lotus Social Studies

# 50

Syllabus :  
Term 3 (Lessons 1 - 7)  
Page No. 137-188

Time : 2½ Hours

Max.Marks: 50

Name :	Class :	Section :	Roll No.
--------	---------	-----------	----------

I. Answer the following questions.

[7 x 2 = 14M]

- 1) Give two reasons why floods occur.
- 2) Why were extremists different from moderates ?
- 3) Why did the Europeans come to India ?
- 4) Name the super-powers of the world after the World War II.
- 5) Describe the UN Flag.
- 6) What is the role of WHO ?
- 7) What is the reason behind the Civil Disobedience movement ?

II. Define

[6 x 1 = 6M]

- 1) Social
- 2) Conscience
- 3) Doctrine of Lapse
- 4) Panchsheel
- 5) Secretary General
- 6) World War

III. Fill in the blanks with suitable words given below.

[6 x 1 = 6M]

calamity 1935 moderate Sepoys brain-child 200

- 1) There are nearly \_\_\_\_\_ members of United Nations.
- 2) The revolt of 1857 was started by the \_\_\_\_\_ .
- 3) The Government of India Act was passed in \_\_\_\_\_ .
- 4) A flood is a natural \_\_\_\_\_.
- 5) Gopal Krishna Gokhale was a \_\_\_\_\_ leader.
- 6) Non-alignment was the \_\_\_\_\_ of Pt. Nehru.

**IV. Write 'T' for True and 'F' for False Statements.**

**[7 x 1 = 7M]**

- 1) The Portuguese dealt in spices as it made meat Tastier. [       ]
- 2) Basic principle of NAM are also known as Panchsheel. [       ]
- 3) Indian society during the British rule was backward. [       ]
- 4) Dr. Rajendra Prasad was the first president of independent India. [       ]
- 5) A Tsunami is a massive earthquake. [       ]
- 6) The USA did not join the first World War. [       ]
- 7) The Security Council has 10 permanent members. [       ]

**V. Multiple Choice Questions. Tick ( ✓ ) the correct option.**

**[6 x 1 = 6M]**

1) The World War – 1 broke out in

i) 1913

ii) 1914

iii) 1916

iv) None of these

2) The USSR collapsed in

i) 1990

ii) 1991

iii) 1994

iv) 1999

3) The Battle of Plassey took place in

i) 1757

ii) 1857

iii) 1783

iv) 1764

4) Tilak voiced his opinion through his newspaper

i) Indian Opion

ii) Navjeevan

iii) Hari Bhumi

iv) Kesari

5) The Simon Commission Visited India in

i) 1914

ii) 1945

iii) 1942

iv) 1928

6) The headquarters of the WHO is located at

i) Geneva

ii) Rome

iii) Paris

iv) New York

**VI. Write the full form of the following.**

**[6 x 1 = 6M]**

- 1) ITU \_\_\_\_\_
- 2) UNICEF \_\_\_\_\_
- 3) ECOSOC \_\_\_\_\_
- 4) UNESCO \_\_\_\_\_
- 5) IMF \_\_\_\_\_
- 6) WHO \_\_\_\_\_

**VII. Match the following columns.**

**[5 x 1 = 5M]**

**Column – A**

**Column – B**

- 1) Raja Rammohan Roy ( ) a) 1905
- 2) S.N. Banerjee ( ) b) 1914
- 3) Bal Gangadhar Tilak ( ) c) Moderate
- 4) Partition of Bengal ( ) d) Social Reformer
- 5) World War – I ( ) e) Extremist

\*\*\*\*\*



# SUMMATIVE ASSESSMENT - III

## Class - V :: Vikram Lotus General Knowledge

# 50

 Syllabus :  
 Term 3 (Chapters 1 - 3)  
 Page No. 191- 202

Time : 2½ Hours

Max.Marks: 50

**Name :****Class :****Section :****Roll No.**

I. Identify the State. Write the name of its capital and the language spoken.

[2 × 3 = 6M]

1)



2)



State

\_\_\_\_\_

Capital

\_\_\_\_\_

Language

\_\_\_\_\_

State

\_\_\_\_\_

Capital

\_\_\_\_\_

Language

\_\_\_\_\_

II. Pick the right word and tick it.

[8 × 1 = 8M]

1) How many puranas are there ? \_\_\_\_\_ (17/18)

2) The Quran contains \_\_\_\_\_ (114/115) surahs.

3) The Mahabharata has \_\_\_\_\_ (10,000 / 20,000) verses.

4) The Holy book of the Parsis is \_\_\_\_\_ (the Holy Bible / Avesta)

- 5) The Bible contains \_\_\_\_\_ (65/66) books.
- 6) What is the number of the Vedas ? \_\_\_\_\_ (4 / 5)
- 7) There are \_\_\_\_\_ (600 / 700) shlokas in the Gita.
- 8) There are \_\_\_\_\_ (38 / 39) books in the old testament of the Bible.



**III. Name the sport / game with which these terms are associated. [15 × 1 = 15M]**

	<b>TERMS</b>	<b>SPORTS</b>
1)	Target	_____
2)	Smash	_____
3)	Double Fault	_____
4)	Dribble	_____
5)	Pivot	_____
6)	Cue	_____
7)	Punch	_____
8)	Gambit	_____
9)	Crease	_____
10)	Free kick	_____
11)	Caddie	_____
12)	Bully	_____
13)	Roll-in	_____
14)	Punter	_____
15)	Free style	_____



V. Name the following sport ?

[9 × 1 = 9M]



1) \_\_\_\_\_ 2) \_\_\_\_\_ 3) \_\_\_\_\_


4) \_\_\_\_\_ 5) \_\_\_\_\_ 6) \_\_\_\_\_

7) \_\_\_\_\_ 8) \_\_\_\_\_ 9) \_\_\_\_\_

**Take My Help :**

Skating, Weight lifting, Athletics, Cycling, Lawn Tennis, Shooting,  
Archery, Skiing, Swimming

V. Children, Let's solve a cross word puzzle on the countries of the world. The clues given below will help you to solve it. Get ..... Set ..... Solve. [12M]



**Down :**

1. Ancient Abyssinia is known as (8)
2. The only place in the world where one can see the sunrise on the Pacific Ocean and Sunset on the Atlantic Ocean. (6)
6. Myanmar is the new name for (5)
8. Second largest continent (6)
9. This country covers the ancient land of Mesopotamia. (4)
10. The largest island in Japan. (6)

**Across :**

1. The former name of Bangladesh (12)
3. The flattest continent. (9)
4. The tallest mountain in Western Europe. (5)
5. The Shalimar Gardens is located in this Indian State. (7)
6. The Swiss City famous for its bears. (5)
7. Largest among the grain producing countries in the world. (10)

**Take My Help :**

Panama, Burma, Iraq, East Pakistan, Blanc, Berne, Ethiopia,  
Africa, Honshu, Australia, Kashmir, Kazakhstan

\*\*\*\*\*