

C - 16

Vikram  
Real Life  
Term Book


# FORMATIVE ASSESSMENT - I

Syllabus :  
Term 1 (Lessons 1 & 2)  
Page No's. 5 - 14

Class - III :: Vikram Real Life English

Time : 1 Hour

Max.Marks: 25



Name :	Class :	Section :	Roll No.
--------	---------	-----------	----------

I. Answer the following questions. [5 x 2 = 10M]

- 1) Who is the following footsteps ?
- 2) Where did the tortoise and the fox live ?
- 3) Why did the boy want to follow his father ?
- 4) Why did the tortoise not run back to the pond when it saw the cheetah ?
- 5) Is the boy's father is walking fast ?

II. Write the appropriate meaning for the following. [6 x 1 = 6M]

- 1) footsteps = .....
- 2) curious = .....
- 3) lead = .....
- 4) crack = .....
- 5) pounced = .....
- 6) follow = .....

III. Write TRUE or FALSE for the following statement. [3 x 1 = 3M]

- 1) The cheetah took the tortoise to its den. [     ]
- 2) The fox saved the tortoise. [     ]
- 3) The boy wants his father to walk slowly. [     ]

IV. Fill in the blanks with the words given below.

[4 x 1 = 4M]

eat, drink, fly, look at

- 1) I ..... cool drinks.
- 2) I ..... samosas.
- 3) I ..... a kite.
- 4) I ..... different places around.

V. Write the answers given below.

[2 x 1 = 2M]

- 1) Who used to help me with my homework ?
- 2) Who used to take me to the park ?

\*\*\*\*\*

C - 16

**Vikram**  
**Real Life**  
Term Book

# FORMATIVE ASSESSMENT - I

Syllabus :  
Term 1 (Lessons 1 - 3)  
Page No's. 31 - 41

Class - III :: Vikram Real Life English Grammar

Time : 1 Hour

Max.Marks: 25

25

Name :

Class :

Section :

Roll No.

I. Pick out nouns in the following sentences.

[5 x 1 = 5M]

- 1) Kolkata is a big city \_\_\_\_\_ .
- 2) The girl wrote a letter \_\_\_\_\_ .
- 3) Ashok is a smart boy \_\_\_\_\_ .
- 4) Money makes many things \_\_\_\_\_ .
- 5) Akbar was a great king \_\_\_\_\_ .

II. Fill up the blanks with collective nouns. Choose the nouns from the list given below.

Pack, flock, fleet, swarm, committee

[5 x 1 = 5M]

- 1) A collection of ships is called a \_\_\_\_\_ .
- 2) A collection of sheep is called a \_\_\_\_\_ .
- 3) A collection of flies is called a \_\_\_\_\_ .
- 4) A collection of wolves is called a \_\_\_\_\_ .
- 5) A collection of members is called a \_\_\_\_\_ .

III. Fill in the blanks with the correct form of Reflexive Pronoun.

[5 x 1 = 5M]

- 1) Rama has hurt \_\_\_\_\_ .
- 2) He washes \_\_\_\_\_ when he gets up.
- 3) She killed \_\_\_\_\_ .
- 4) The prisoner hanged \_\_\_\_\_ .
- 5) We often deceive \_\_\_\_\_ .

**IV. Identify the common nouns and the proper nouns in the following sentences.**

**[5 x 1 = 5M]**

- 1) Asoka was an ideal king.
- 2) Tokyo is the capital of Japan.
- 3) Jawaharlal was the first Prime Minister.
- 4) The Krishna is a holy river.
- 5) January is the first month of the year.

**V. Choose the correct verb in the brackets.**

**[5 x 1 = 5M]**

- 1) John is (climbing / running) the hill. ....
- 2) The cat (catches / praises) the mice. ....
- 3) Clouds (take / give ) us rain . ....
- 4) The hunter (kills / meets) the lion. ....
- 5) The earth (moves / dances) round the sun. ....

\*\*\*\*\*

C - 16

Vikram  
Real Life  
Term Book

# FORMATIVE ASSESSMENT - I

Syllabus :  
Term 1 (Units 1 - 2)  
Page No's. 51 - 75

Class - III :: Vikram Real Life Mathematics

Time : 1 Hour

Max.Marks: 25

25

Name :

Class :

Section :

Roll No.

I. Do the following sums.

[5 x 2 = 10M]

- 1) Counting in thousands write all numerals from 2250 to 8250.
- 2) Write the numeral for each number name given below.
  - a) Five thousand, four hundred thirty six.
  - b) One thousand sixteen .
- 3) Using each digit only once in the same number write the largest and the smallest numbers which form with the digits 5, 0 and 9.
- 4) Write the number names for the following numerals.  
(a) 976 (b) 9008.
- 5) Arrange the following group of numerals both in the ascending and in the descending order. 7096, 9800, 6403, 900, 1650.

II. Fill in the blanks.

[5 x 1 = 5M]

- 1) The place value of 6 in 4368 = .....
- 2) If ..... is subtracted from any number, we get its immediate predecessor.
- 3) The largest two-digit number is .....
- 4) The smallest three-digit number is .....

5) 904 =  Hundreds +  Tens +  ones

III. Compare the following pairs of numbers using the symbols  $>$ ,  $<$  or  $=$  .

[4 × 1 = 4M]

1) 4720  2702

2) 3691  3961

3) 8003  8003

4) 2675  2567

IV. Write the number which comes between.

[3 × 1 = 3M]

1) 899  901

2) 75  77

3) 128  130

V. Complete the following pattern.

[3 × 1 = 3M]

1) 35, 40, 45 , \_\_\_\_\_, \_\_\_\_\_, \_\_\_\_\_, \_\_\_\_\_.

2) 150, 160, 170 , \_\_\_\_\_, \_\_\_\_\_, \_\_\_\_\_, \_\_\_\_\_.

3) 18, 20, 22 , \_\_\_\_\_, \_\_\_\_\_, \_\_\_\_\_, \_\_\_\_\_.

\*\*\*\*\*

C - 16

Vikram  
Real Life  
Term Book

# FORMATIVE ASSESSMENT - I

Syllabus :  
Term 1 (Lesson 1 - 2)  
Page No. 117 - 135

Class - III :: Vikram Real Life Science

Time : 1 Hour

Max.Marks: 25

25

Name :	Class :	Section :	Roll No.
--------	---------	-----------	----------

I. Answer the following questions.

[5 x 2 = 10M]

- 1) Give five examples of man-made things.
- 2) Give three examples of non-living natural things.
- 3) What are the common features of living things ?
- 4) Why is the leaf called food factory of a plant ?
- 5) What is photosynthesis ?

II. Fill in the blanks with right words.

[4 x 1 = 4M]

stomata, animals, die, stem

- 1) ..... have sense organs.
- 2) All living things ..... someday.
- 3) Plants breathe through the .....
- 4) The ..... grows above the ground.

III. Choose the correct answer.

[4 x 1 = 4M]

- 1) Plants take in this gas during day time ( )  
a) oxygen                      b) carbon dioxide              c) both
- 2) An example for non-living thing ( )  
a) rose plant                      b) sparrow                      c) pen

3) The part of the plant that prepares food for the plant is ( )  
a) fruit                      b) stem                      c) leaves

4) Flowers help the plant to ( )  
a) prepare food              b) reproduce              c) suck water from soil

**IV. Write True or False for the following. [3 x 1 = 3M]**

1) Only green plants make their own food. [ ]

2) Plants are non-living things. [ ]

3) Flowers are called food the factories of a plant. [ ]

**V. Match the following. [4 x 1 = 4M]**

1) Stomata                      a) absorb water from soil ( )

2) Dogs                      b) babies ( )

3) Roots                      c) puppies ( )

4) Human beings              d) tiny pores present in leaves ( )

\*\*\*\*\*



C - 16

Vikram  
Real Life  
Term Book

# FORMATIVE ASSESSMENT - I

Syllabus :  
Term 1 (Lessons 1 - 3)  
Page No's 163 - 178

Class - III :: Vikram Real Life Social Studies

Time : 1 Hour

Max.Marks: 25

25

Name :	Class :	Section :	Roll No.
--------	---------	-----------	----------

I. Answer the following questions.

[5 x 2 = 10M]

- 1) What is an Atlas ?
- 2) How does the Earth look like ?
- 3) Why is India called a sub-continent ?
- 4) Who was the first Indian to travel in space ?
- 5) Which countries are our neighbours on the north and the west ?

II. Fill in the blanks.

[5 x 1 = 5M]

- 1) The Earth revolves round the .....
- 2) Longitudes help us in calculating ..... also.
- 3) The desert in India is .....
- 4) Our neighbours on the east are .....
- 5) Our country is in the ..... continent.

III. Write True or False for the following.

[5 x 1 = 5M]

- 1) Pakistan is our neighbour in the east. [     ]
- 2) The sun revolves round the Earth. [     ]
- 3) The area beyond the Earth and the atmosphere is known as space. [     ]
- 4) A sea is bigger than an ocean. [     ]
- 5) India is the seventh largest country in the world. [     ]

**IV. Match the following**

**[5 x 1 = 5M]**

(A)

(B)

1) South

a) Islands ( )

2) Andaman and Nicobar

b) Bottom side of a map ( )

3) Continent

c) Moderate climate ( )

4) Cauvery


d) Africa ( )

5) Coastal plains

e) River ( )

\*\*\*\*\*

# FORMATIVE ASSESSMENT - I



Syllabus :  
Term 1 (Chapter - 1)  
Page No's 211 - 222

Class - III :: Vikram Real Life General Knowledge

Time : 1 Hour

Max.Marks: 25

<b>Name :</b>	<b>Class :</b>	<b>Section :</b>	<b>Roll No.</b>
---------------	----------------	------------------	-----------------

I. Name these Reptiles.


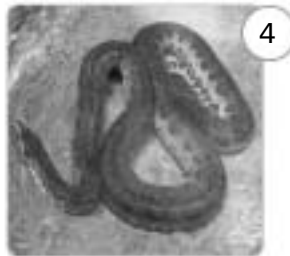
[5 x 1 = 5M]



1) ..... 2) ..... 3)..... 4)..... 5).....

II. Identify the following animals and write their names.

[5 x 1 = 5M]



- Largest snake .....
- Tallest animal .....
- Largest animal of the sea .....
- Largest animal of the cat family .....
- Largest land animal .....

**III. State whether the following statements are true or false.**

[5 x 1 = 5M]

- 1) Dinosaurs were as heavy as Ten Elephants. [      ]
- 2) Some of them were as tiny as a chicken. [      ]
- 3) Dinosaurs have become extinct. [      ]
- 4) Dinosaurs laid eggs. [      ]
- 5) Some were meat – eaters. [      ]

**IV. Match the animal to its right description.**


[6 x 1 = 6M]



- People use me to carry heavy logs in the forests.
- I can walk miles and miles in the desert. I am called the ship of the desert.
- People call me the friend of a farmer.
- The washer men and others use me to carry loads.
- You find me mostly in villages. I pull carts.
- I am the better's favourite. I run the race.

**V. Name these aquatic animals.**

[4 x 1 = 4M]



- 1) .....
- 2) .....
- 3) .....
- 4) .....

**Help Box**

Octopus, Shark, Puffer Fish, Dolphin

\*\*\*\*\*