

C - 16

Vikram  
Real Life  
Term Book

# SUMMATIVE ASSESSMENT - I

Syllabus :  
Term 1 (Lessons 1 - 4)  
Page No's. 5 - 26

Class - III :: Vikram Real Life English

Time : 2½ Hour

Max.Marks: 50

50

Name :

Class :

Section :

Roll No.

I. Answer the following questions.

[5 x 3 = 15M]

- 1) Where did the tortoise and the fox live ?
- 2) Why did the boy want to follow his father ?
- 3) Why do you find waiting halls on the platform ?
- 4) Why did Mrs. Gupta speak to Manish ?
- 5) How do the porters help the passengers ?

II. Read the following and write (T) for "TRUE" and (F) for "FALSE".

[5 x 1 = 5M]

- 1) The fox saw another cheetah breaking the shell. ( )
- 2) The boy wants his son to follow him. ( )
- 3) Rohan didn't go to school. ( )
- 4) Manish works in a bank. ( )
- 5) The fox and the tortoise used to play everyday. ( )

III. Complete the paragraph with words from the box, using "used to".

[5 x 1 = 5M]

work go play live buy

When I was born, my parents \_\_\_\_\_ in Visakhapatnam. My father \_\_\_\_\_ in a company there. We went to Visakhapatnam last week . My father showed me where he \_\_\_\_\_ vegetables everyday. My mother took me to the house of a boy with whom I \_\_\_\_\_ to school. We also went to the beach where I \_\_\_\_\_ on the sands of the beach.

**IV. Match the following.**

[4 x 1 = 4M]

- | A                      |         | B                  |
|------------------------|---------|--------------------|
| 1) announcements       | (     ) | a) guards          |
| 2) hooting and puffing | (     ) | b) hawkers         |
| 3) whistles            | (     ) | c) speakers        |
| 4) sounds              | (     ) | d) railway engines |

**V. Fill in the blanks given below using 'see' or 'hear'.**

[5 x 1 = 5M]

- 1) It's time for lunch break. I \_\_\_\_\_ the bell of my school.
- 2) I am standing in front of a cinema hall. I \_\_\_\_\_ the people coming out of the cinema hall.
- 3) I am waiting near a bus stop. I \_\_\_\_\_ the sounds of different vehicles.
- 4) I am waiting at the bus stop. I \_\_\_\_\_ people getting down the bus.
- 5) I am in a bus station. I \_\_\_\_\_ drivers blowing horns.

**VI. Complete the following definitions.**

[5 x 2 = 10M]

- 1) An airport is a place where \_\_\_\_\_.
- 2) A school is a place where children learn different subjects \_\_\_\_\_.
- 3) A hospital is a place where \_\_\_\_\_.
- 4) A market is a place where \_\_\_\_\_.
- 5) A restaurant is a place where \_\_\_\_\_.

**VII. Write the following means.**

[6 x 1 = 6M]

- 1) lead = \_\_\_\_\_
- 2) struggle = \_\_\_\_\_
- 3) to ring = \_\_\_\_\_
- 4) arrive = \_\_\_\_\_
- 5) depart = \_\_\_\_\_
- 6) passengers = \_\_\_\_\_

\*\*\*\*\*

C - 16

**Vikram**  
Real Life  
Term Book

# SUMMATIVE ASSESSMENT - I

Syllabus :  
Term - 1  
(Lessons 1 - 7)  
Page No's. 31 - 48

Class - III :: Vikram Real Life English Grammar

Time : 2½ Hour

Max.Marks: 50

50

**Name :** \_\_\_\_\_ **Class :** \_\_\_\_\_ **Section :** \_\_\_\_\_ **Roll No.** \_\_\_\_\_

I. Here are some people who help us. Choose the right word from the list:

cobbler, teacher, tailor, postman, fisherman

[5x 2 = 10M]

- 1) The person who teaches. \_\_\_\_\_
- 2) The person who makes our clothes. \_\_\_\_\_
- 3) The person who brings us letters. \_\_\_\_\_
- 4) The person who mends our shoes. \_\_\_\_\_
- 5) The person who catches fish. \_\_\_\_\_

II. Fill in the blanks with collective nouns. Choose the nouns from the list given below.

Pack, class, fleet, army, swarm

[5 x 1 = 5M]

- 1) A collection of flies is called a .....
- 2) A collection of wolves is called a .....
- 3) A collection of students is called a .....
- 4) A collection of ships is called a .....
- 5) A collection of soldiers is called a .....

III. Write Adj. for Demonstrative Adjectives, Pron. for Demonstrative Pronouns :

[10 x 1 = 10M]

- 1) These books are mine. ....
- 2) That is my father's car. ....
- 3) What was that noise ?.....
- 4) This horse is better. ....
- 5) Those are our books. ....
- 6) These are his shoes. ....
- 7) Those mangoes are ripe. ....
- 8) This is my house. ....
- 9) Whose bicycle is that ? .....
- 10) This is a bright star. ....

**IV. Choose the correct verb in the brackets. [5 x 1 = 5M]**

- 1) The gardener (paints / plants) the saplings. ....
- 2) The donkey (carries / eats) loads .....
- 3) John is (climbing / running) the hill .....
- 4) Clouds (take / give) us rain .....
- 5) The earth (moves / dances) round the sun .....

**V. Pick out the Adjectives of Quality or Quantity in the following sentences.**

[5 x 1 = 5M]

- 1) He has lost all his wealth. ....
- 2) The lazy boy is punished. ....
- 3) It is a foolish old crow. ....
- 4) He has little or no sense. ....
- 5) There was not enough rain this year. ....

**VI. Pick out Adverbs of Time in the following sentences.**

[5 x 1 = 5M]

- 1) We shall now begin our work .....
- 2) He finished his work yesterday .....
- 3) My father returns today .....
- 4) He came late to the class .....
- 5) He left this place only a few minutes ago .....

**VII. Identify the Prepositions in the following sentences. Write them in the space given.**

[5 x 1 = 5M]

- 1) There is a cow in the field. ....
- 2) The cat jumped off the chair.....
- 3) He is suffering from fever. ....
- 4) She asked for a watch. ....
- 5) I want a chair to sit on. ....

**VIII. Pick up the Conjunctions in the following sentences.**

[5 x 1 = 5M]

- 1) Hari and Rama are brothers. ....
- 2) Rama is present but Krishna is absent. ....
- 3) Kishore is poor but he is honest. ....
- 4) Unless you run, you cannot catch the train. ....
- 5) He failed because he did not work hard. ....

\*\*\*\*\*

C - 16

Vikram  
Real Life  
Term Book

# SUMMATIVE ASSESSMENT - I

Syllabus :  
Term - 1  
(Units 1 - 5)

Class - III :: Vikram Real Life Mathematics

Page No's. 51 - 107

Time : 2½ Hour

Max.Marks: 50

50

Name :	Class :	Section :	Roll No.
--------	---------	-----------	----------

I. Answer the following questions.

[5 x 3 = 15M]

1) Rewrite the set of numbers given below in the descending order.

104, 192, 129, 291, 219

2) Write the place value of the digit underlined.

a) 2684

b) 7396

c) 5791

3) Add the following sum :

	Th	H	T	O
	4	0	0	8
	2	9	9	2
+	1	0	1	4
_____				
_____				

4) Do the following subtraction.

	3	5	9	8
(-)	2	4	1	6
_____				
_____				

5) Find the product of  $32 \times 200$ .

II. Answer any ONE of the following.

[1 x 5 = 5M]

1) There are 3217 men, 2995 women and 2908 children in a village. What is the total population of the village ?

2) Write all possible 2-digit numbers using the digits (i) 3, 4 (ii) 5, 7 (iii) 6, 9.

III. Answer any ONE of the following.

[1 x 5 = 5M]

1) There are 24 rows of trees in a garden. In each row there are 12 trees. What is the total number of trees in the garden ?

2) An express train from Chennai to Mumbai has 12 sleeper coaches. In each coach there are 72 berths. Find the total number of berths the train has.

**IV. Answer any ONE of the following.**

[1 x 5 = 5M]

- 1) Counting in HUNDREDS write 5 numerals coming before 920.
- 2) Sreenila has 6400 rupees in her bank account. If she withdraws 2750 rupees. What is the total amount she has now in her bank account ?

**V. Choose the correct answer.**

[5 x 1 = 5M]

- 1)  $500 + 20 + 7$  in short form ( )
  - a) 527
  - b) 5027
  - c) 5207
- 2) Write the SUCCESSOR of 1690 ( )
  - a) 1692
  - b) 1693
  - c) 1691
- 3)  $468 + \dots = 468$  ( )
  - a) 0
  - b) 1
  - c) 2
- 4)  $9700 - 0 =$  ( )
  - a) 9700
  - b) 0
  - c) 970
- 5)  $24 \times 2 =$  ( )
  - a) 48
  - b) 24
  - c) 242

**VI. Fill in the blanks.**

[5 x 1 = 5M]

- 1) The product form of  $8 \times 40 = \dots$
- 2)  $4 + 3075 = \dots$
- 3)  $576 \dots 567$
- 4)  $2305 - 1204 = \dots$
- 5) 6835 expanded form  $\dots$

**VII. Write True or False.**

[5 x 1 = 5M]

- 1)  $468 > 458$  ( )
- 2) The place value of 4 in 2408 is 400 ( )
- 3)  $555 + 55 + 5 = 555555$  ( )
- 4)  $3568 - 1256 = 2312$  ( )
- 5)  $600 \times 9 = 4500$  ( )

**VIII. Match the following.**

[5 x 1 = 5M]

- | A                            | B          |
|------------------------------|------------|
| 1. $0 + 576$                 | ( ) a) 398 |
| 2. Predecessor of 399        | ( ) b) 763 |
| 3. Seven hundred sixty three | ( ) c) 0   |
| 4. $1641 - 1641$             | ( ) d) 560 |
| 5. $7 \times 80$             | ( ) e) 576 |

\*\*\*\*\*

C - 16

Vikram  
Real Life  
Term Book

# SUMMATIVE ASSESSMENT - I

Syllabus :  
Term - 1

Class - III :: Vikram Real Life Science

(Lessons 1 - 5)

Page No's. 117 - 158

Time : 2½ Hour

Max.Marks: 50

50

Name :	Class :	Section :	Roll No.
--------	---------	-----------	----------

I. Answer the following questions.

[5 x 3 = 15M]

- 1) Give three examples of non-living natural things.
- 2) What are rodents ? Give two examples.
- 3) What is the function of stomata ?
- 4) What are talons ?
- 5) Why do birds build nests ?

II. Answer any ONE of the following.

[5 x 5 = 5M]

- 1) Why is the leaf called food factory of a plant ?
- 2) What is photosynthesis ?

III. Answer any ONE of the following.

[1 x 5 = 5M]

- 1) How does a woodpecker make its nest ?
- 2) How do birds look after their babies ?

IV. Answer any ONE of the following.

[1 x 5 = 5M]

- 1) Draw the picture of a plant and label it.
- 2) Draw the diagram of a Tap root.

V. Choose the correct answer.

[5 x 1 = 5M]

- 1) Human beings breathe with their ( )  
a) lungs                                      b) gills                                      c) stomata
- 2) This part of the plant helps it to stand erect. ( )  
a) roots                                      b) stem                                      c) leaves
- 3) Animal that eats soil on its way ( )  
a) frog                                      b) earthworm                                      c) dog

- 4) This bird sucks nectar from flower ( )  
 a) parrot                                      b) sparrow                                      c) humming bird
- 5) The entrance to this bird's nest is at the bottom. ( )  
 a) woodpecker                                      b) parrot                                      c) weaver bird

**VI. Fill in the blanks using the words given. [5 x 1 = 5M]**

fruits, penguin, webbed, rodents, Non-living

- 1) ..... things cannot reproduce.
- 2) The flowers grow into .....
- 3) Gnawers are also called .....
- 4) All swimming birds have ..... feet.
- 5) A ..... makes its nest with stones.

**VII. Write 'T' for True statements and 'F' for False statements. [5 x 1 = 5M]**

- 1) Plants can live without water. ( )
- 2) Plants are non-living things. ( )
- 3) A flower is the most beautiful part of a plant. ( )
- 4) Flowers are called the food factories of a plant. ( )
- 5) Only green plants make their own food. ( )

**VIII. Match the following. [5 x 1 = 5M]**

A		B
1. Flowers	( )	a) sucks the nectar of flowers
2. Butterfly	( )	b) produce fruits
3. Parrot	( )	c) use stones
4. Penguins	( )	d) chicks
5. Hens	( )	e) hooked

\*\*\*\*\*



C - 16

Vikram  
Real Life  
Term Book

Syllabus :  
Term - 1  
(Lessons 1 - 7)  
Page No's. 163 - 205

# SUMMATIVE ASSESSMENT - I

Class - III :: Vikram Real Life Social Studies

Time : 2½ Hour

Max.Marks: 50

50

Name :	Class :	Section :	Roll No.
--------	---------	-----------	----------

I. Answer the following questions.

[5 x 3 = 15M]

- 1) What did the travel of Magellan round the world prove ?
- 2) What is the difference between a continent and an ocean ?
- 3) Why is India called a peninsula ?
- 4) How many Union Territories are there in India ?
- 5) Where is Andhra Pradesh located ?

II. Answer any ONE of the following.

[1 x 5 = 5M]

- 1) What are the important food grains produced in our country ?
- 2) What kind of dress is worn by men in our country ?

III. Answer any ONE of the following.

[1 x 5 = 5M]

- 1) How is Diwali celebrated ?
- 2) Write about Id festival.

IV. Answer any ONE of the following.

[1 x 5 = 5M]

Locate the following on an outline map of India.

- 1) 1) Tamil Nadu    2) Jammu and Kashmir    3) Kerala
- 4) Gujarat    5) Odisha
- 2) 1) Indian Ocean    2) Andaman and Nicobar    3) Arabian Sea
- 4) Nepal    5) Kolkata

**V. Fill in the blanks.**

**[7 x 1 = 7M]**

- 1) Colour of the Planet Earth is .....
- 2) The smallest ocean is the .....
- 3) India is the ..... largest country in the world.
- 4) The capital city of Gujarat is .....
- 5) ..... is the longest beach in India.
- 6) Wheat is used mostly in ..... India.
- 7) ..... is the last day of Dussehra.

**VI. Write 'TRUE' or 'False'.**

**[7 x 1 = 7M]**

- 1) The Earth is flat. ( )
- 2) The longest latitude is called the equator. ( )
- 3) India is a continent. ( )
- 4) In India only one language is spoken. ( )
- 5) The Meenakshi temple is at Tiruchirapalli. ( )
- 6) Indians wear cotton clothes because of the hot climate. ( )
- 7) Christmas is celebrated all over the world. ( )

**VII. Match the following.**

**[6 x 1 = 6M]**

- | A                            |     | B                          |
|------------------------------|-----|----------------------------|
| 1. Rajasthan                 | ( ) | a) Kerala                  |
| 2. Lungi                     | ( ) | b) Jaipur                  |
| 3. China                     | ( ) | c) Southern Ocean          |
| 4. Antarctic                 | ( ) | d) Tamil Nadu              |
| 5. The spice garden of India | ( ) | e) 15 <sup>th</sup> August |
| 6. Independence Day          | ( ) | f) First in population     |

\*\*\*\*\*

India





C - 16

Vikram  
Real Life  
Term Book


# SUMMATIVE ASSESSMENT - I

Syllabus : GK  
Term - 1  
(Chapters 1 - 2)  
Page No's. 211 - 226

Class - III :: Vikram Real Life General Knowledge

Time : 2½ Hour

Max.Marks: 50



<b>Name :</b>	<b>Class :</b>	<b>Section :</b>	<b>Roll No.</b>
---------------	----------------	------------------	-----------------

## I. Fill in the blanks.

[5 x 2 = 10M]

1) Trees give us  ○ ○ ○ ○ ○ ○ ○ ○

2) Trees give us  ○ ○ ○ ○ ○ ○ ○ ○ ○ ○ ○ ○ ○ ○

3) Trees give us  ○ ○ ○ ○ ○ ○ ○ ○ ○ ○


4) Trees give us  ○ ○ ○ ○ ○ ○ ○ ○

5) Trees give us  ○ ○ ○ ○ ○ ○ ○ ○ ○ ○

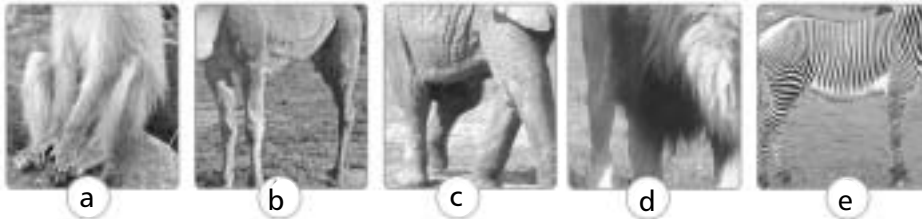
## II. Match their heads to their hooves.

[5 x 2 = 10M]

### Heads



### Hooves



Now write your answers here.

--	--

--	--









--	--

--	--

--	--

III. Name the spices and beverages.

[8 x 1 = 8M]





1. 
2. 
3. 
4. 
5. 
6. 
7. 
8. 

**Help Box**

Ginger      Coffee Beans      Coriander      Turmeric  
Black Pepper      Tea leaves      Cloves      Chillies

IV. Name the group of animals.

[8 x 1 = 8M]

- 1) A  of Sheep 
- 2) A  of Cows 
- 3) A  of Puppies 
- 4) A  of Fish 

5) A  of Whales



6) A  of Bees



7) A  of Chickens



8) A  of Lions



**Help Box**

Pride, brood, Swarm, School, Shoal, lilter, herd, flock

V. Find the feathered friends from the mage of words and circle it.

[8M]



A	N	I	G	H	T	I	N	G	A	L	E	S
B	D	C	R	A	N	E	P	Q	R	S	T	U
C	D	E	P	A	R	R	O	T	M	N	O	P
P	C	U	C	K	O	O	M	N	O	T	S	P
A	B	P	E	L	I	C	A	N	C	D	E	F
P	I	G	E	O	N	P	Q	R	S	T	U	V
A	B	Q	U	E	T	Z	A	L	P	Q	R	S
R	O	A	D	R	U	N	N	E	R	S	T	U

VI. Name these Reptiles.

[6 x 1 = 6M]



1. ....

2. ....

3. ....

4. ....

5. ....

6. ....

\*\*\*\*\*