

C - 16

Vikram
Real Life
Term Book

SUMMATIVE ASSESSMENT - III

Syllabus :
Term 3 (Lessons 1 - 5)
Page No's. 4 - 38

Class - III :: Vikram Real Life English

Time : 2½ Hour

Max.Marks: 50

50

Name : _____ Class : _____ Section : _____ Roll No. _____

I. Answer the following questions.

[5x 2 = 10M]

- 1) What did Raju's father want Raju to do and what did he promise him ?
- 2) How is food poisoning caused ?
- 3) How did Nasruddin dress himself and return to the dinner ?
- 4) Why is a dog called 'the man's best friend' ?
- 5) Where should we always cross the road ?

II. Write the meanings of the following words.

[5 x 1 = 5M]

- 1) Amazed = _____
- 2) Environment = _____
- 3) Visitor = _____
- 4) Chase = _____
- 5) Safety = _____

III. Imagine you have a younger brother. Live five do's and five don'ts for him.

Do's

Don'ts

[10 x 1 = 10M]

- | | |
|----------|----------|
| 1. _____ | 1. _____ |
| 2. _____ | 2. _____ |
| 3. _____ | 3. _____ |
| 4. _____ | 4. _____ |
| 5. _____ | 5. _____ |

IV. Rewrite the following sentences.

[5 x 1 = 5M]

1. Those pencils are long. Ans. _____
2. This book is thin. Ans. _____
3. These curtains are green. Ans. _____
4. These dolls are pretty. Ans. _____
5. That tiger is strong. Ans. _____

V. Write "True" or "False" for the following statement. [5 x 1 = 5M]

- 1) Raju's mother was amazed to see Raju getting up early. ()
- 2) Samuel always washes his hands before eating. ()
- 3) Nasruddin returned for the dinner on a horse. ()
- 4) Sonu ate a banana at the birthday party. ()
- 5) Raju did not change at all. ()

VI. Complete the following sentences using the clues given in brackets. [5 x 1 = 5M]

- 1) I like Popeye show because
_____ (funny)
- 2) I don't like James because
_____ (fight)
- 3) I like my puppy because
_____ (play)
- 4) I like my brother because
_____ (share chocolate)
- 5) I like my mother because
_____ (doing homework)

VII. Rewrite the following sentences using 'Should' or 'Should not'. [5 x 1 = 5M]

- 1) Do not play cricket on the road.
- 2) Carry water while travelling.
- 3) Stand in a queue at the bus stop.
- 4) Do not move about on a bus while travelling.
- 5) Do not talk while crossing the road.

VIII. Match the following. [5 x 1 = 5M]

- | | |
|---------------------------------------|---|
| 1. Jaya didn't go to school yesterday | when she was going to school. |
| 2. Vineet has to work hard | because she fought with her friends. |
| 3. Raman visited Hyderabad | because she attended her uncle's wedding. |
| 4. Priya saw a mad dog | when he was a child. |
| 5. Simran was not playing tennis | if he wants to stand first in the class. |

C - 16

Vikram
Real Life
Term Book

SUMMATIVE ASSESSMENT - III

Syllabus :
Term - 3
(Lesson 1 - 10)
Page No's. 43 - 64

Class - III :: Vikram Real Life English Grammar

Time : 2½ Hour

Max.Marks: 50

50

Name :	Class :	Section :	Roll No.
--------	---------	-----------	----------

I. Choose the correct alternative given in brackets. Fill in the blanks with it.[5x 1=5M]

- 1) The public requested not to walk on the grass. (is / are)
- 2) Each one of the boys rewarded. (is / are)
- 3) Two and two four. (makes / make)
- 4) The murderer with his friends escaped. (has / have)
- 5) The quality of the mangoes not good. (is / are)

II. Rewrite the following sentences changing the present tense verb into the past tense.

[5 x 1 = 5M]

- 1) He refuses me leaves.
- 2) We go to Mumbai.
- 3) Gita takes Horlicks.
- 4) Clouds give us rain.
- 5) She sings a song.

III. Rewrite the following sentences using present continuous tense in the place of simple present tense.

[5 x 1 = 5M]

- 1) The telephone rings.
- 2) She drinks milk.
- 3) They pull down the tree.
- 4) The teacher punishes him severely.
- 5) They lay the road.

IV. Change the following into Negative Sentences.

[5 x 1 = 5M]

- 1) They are very poor.
- 2) He swims the river easily.
- 3) She sings sweetly.
- 4) I am tired today.
- 5) She is happy now.

V. Rewrite the following statements into interrogative sentences.

[5 x 1 = 5M]

- 1) They are present today.
- 2) We are busy now.
- 3) She is hungry.
- 4) I am happy.
- 5) He is bold.

VI. Answer the following questions briefly.

[5 x 1 = 5M]

- 1) What is your name ?
- 2) Where were you born ?
- 3) How old are you ?
- 4) Where do you live ?
- 5) When do you get up ?

VII. Read the following passage.

[5 x 1 = 5M]

All books are divisible into two classes – books of the hour and books for all time. Mark this distinction. It is not one of quality only. It is not merely the bad book that does not last and the good one that does. There are good books for the hour and good ones for all time; bad books for the hour and bad ones for all time. I must define the two kinds before I go further.

The good book of the hour then – I do not speak of the bad ones – is simply the useful or pleasant talk of some persons whom you cannot otherwise converse with, printed for you – very often telling you what you need to know, very pleasant, often as a sensible friend's pleasant talk would be; those bright accounts of travels; good humoured and witty discussions of questions; lively or pathetic story telling in the form of novel, firm fact telling by the real agents concerned in the events of past history.

Say whether the following statements are True or False.

- 1) Some good books last only for sometime. ()
- 2) The ideas and views of the writer are presented in the form of a book. ()
- 3) A friend's talk is more pleasant than a good book. ()
- 4) A good book often tells us about the passing history. ()
- 5) We can converse with all our friends. ()

VIII. You are Mohan Krishna. You are celebrating your birthday. Write a formal letter of invitation to your friend Gopi. [1 × 5 = 5M]

IX. Write a paragraph on any one of the topic. [1 x 5 = 5M]

- 1) About myself (or) 2) My school

X. Develop the hints into a story in your own words. [5M]

Peter and Paul – good friends – passing through forest – saw a bear approaching – Peter saved himself – climbing the nearest tree – Paul – did not know how to climb trees – he knew about wild animals – they do not hurt dead bodies – Paul lay down like a dead person – bear sniffed at Paul – thought him dead – went away – Peter came down – asked Paul – what did the bear tell you – "Keep away from friend like you " – Peter felt ashamed – a friend in need is a friend indeed.

C - 16

Vikram
Real Life
Term Book

SUMMATIVE ASSESSMENT - III

Syllabus :
Term - 3
(Units 1 - 6)

Class - III :: Vikram Real Life Mathematics

Page No's. 67 - 113

Time : 2½ Hour

Max.Marks: 50

50

Name :

Class :

Section :

Roll No.

I. Answer the following questions.

[5 x 3 = 15M]

- 1) Find the sum of 10km 260 m; 13 km 75 m and 24 km 780 m.
- 2) Find the difference between 9 kg 270 gms and 6 kg 150gms.
- 3) Convert 420 minutes into hours and minutes.
- 4) Write any three points about a square.
- 5) Do the following sum

$$\begin{array}{r} l - ml \\ 10 - 900 \\ (+) 5 - 750 \\ \hline \\ \hline \end{array}$$

II. Answer any ONE of the following.

[1 x 5 = 5M]

- 1) The quantities of milk sold by a milkmaid on the first three days of a week are respectively 45 l 500 ml, 53 l 250 ml and 64 l 750ml. Find the total quantity of milk the milkmaid sold on all the three days.
- 2) Multiply : 1) 6g 7 cg × 9 2) 4kg 185 g × 13

III. Answer any ONE of the following.

[1 x 5 = 5M]






- 1) Convert the following into hours. a) 2 days 20 hours. b) 4 days
- 2) There are 5 rolls of copper wire with 7m 50cm of wire in each roll. Find the total length of wire in all the 5 rolls.

IV. Answer any ONE of the following.

[1 x 5 = 5M]

- 1) Draw the following lines.
(i) 2 vertical (ii) 3 curved (iii) 3 slant

2) The following pictograph depicts the collection of toys a girl possesses. Each picture symbol represents 2 toys of any kind.


Elephants	
Teddy bears	
Aeroplanes	
Cars	
Horses	

Questions :

- 1) What is the number of horse toys ?
- 2) How many aeroplanes does the girl possess ?
- 3) How many more cars than aeroplanes does the girl have ?

V. Choose the correct answer and write its letter in the brackets.

[5 x 1 = 5M]

- 1) $8\text{cm} = \underline{\hspace{2cm}} \text{mm}$ ()
 a) 100 b) 800 c) 80
- 2) The unit of measuring mass is ()
 a) Kgs b) Metres c) Grams
- 3) $14\text{l} - 5\text{l} = \underline{\hspace{2cm}} \text{l}$ ()
 a) 9 b) 8 c) 10
- 4) hours make one day. ()
 a) 21 b) 26 c) 24
- 5)  Number of Rectangles ()
 a) 2 b) 1 c) 3

VI. Fill in the blanks.

[5 x 1 = 5M]

- 1) 800 cm = _____ m.
- 2) 90 g – 65 g = _____ g.
- 3) 4 l = _____ ml.
- 4) A leap year has = _____ days
- 5) Rectangle _____ corners.

VII. Write 'True' or 'False' for the following statement.

[5 x 1 = 5M]

- 1) 5 m = 500 cm. ()
- 2) 2 kg = 200 g. ()
- 3) 2 litres 10ml = 2010 ml. ()
- 4) A month has 34 days. ()
- 5) A circle has no corners. ()

VIII. Match the following.

[5 x 1 = 5M]

- | | | |
|-----------------|-----|------------|
| 1) 9m 75 cm = | () | a) 7 days |
| 2) 8 kg | () | b) 3 sides |
| 3) 5l + 3l | () | c) 975 cm |
| 4) 1 week | () | d) 8 l |
| 5) Triangle has | () | e) 8000 g |

C - 16

Vikram
Real Life
Term Book

SUMMATIVE ASSESSMENT - III

Syllabus :
Term - 3

Class - III :: Vikram Real Life Science

(Lessons 1 - 4)

Page No's. 120 - 149

Time : 2½ Hour

Max.Marks: 50

50

Name :	Class :	Section :	Roll No.
--------	---------	-----------	----------

I. Answer the following questions.

[5 x 3 = 15M]

- 1) What is a solvent ?
- 2) Name any four food items you like to eat in the summer season.
- 3) What is humus ?
- 4) Name the planets in the solar system.
- 5) What causes day and night ?

II. Answer any ONE of the following questions.

[1 x 5 = 5M]

- 1) Why do farmers add manure to the soil ?
- 2) Which is the best soil for growing plants ?

III. Answer any ONE of the following questions.

[1 x 5 = 5M]

- 1) What is filtration ?
- 2) What is residue ?

IV. Answer any ONE of the following questions.

[1 x 5 = 5M]

- 1) What is the earth's surface made up of ?
- 2) Why do the stars look smaller than the sun and the moon ?

V. Choose the correct answer and write its letter in the brackets.

[5 x 1 = 5M]

- 1) Sugar dissolves quickly in ()
a) cold water b) hot water c) ice
- 2) We wear woolen clothes in _____ season. ()
a) summer b) winter c) rainy

- 3) This is used for making bricks. ()
 a) sand b) clay c) loam
- 4) All planets move around the ()
 a) sun b) moon c) earth
- 5) Number of planets in the solar system ()
 a) 10 b) 9 c) 88

VI. Fill in the blanks using the words given. [5 x 1 = 5M]

hails, earth, axis, organic matter, water

- 1) _____ dissolves several solids.
- 2) Heavy showers bring _____ too.
- 3) Sandy soil contains small quantity of _____.
- 4) The moon goes round the _____.
- 5) The earth rotates on its own _____.

VII. Write "TRUE" or "FALSE" for the following statement. [5 x 1 = 5M]

- 1) Evaporation in nature takes place due to sunshine. ()
- 2) Weather is similar in all seasons. ()
- 3) Gravel is used in making pots and toys. ()
- 4) The earth is flat. ()
- 5) The moon emits its own light. ()

VIII. Match the following : [5 x 1 = 5M]

- | A | | B |
|-------------------------------------|-----|----------------------------|
| 1. Clay | () | a) rotation of the earth |
| 2. Water | () | b) revolution of the earth |
| 3. Sugar dissolves in water to form | () | c) heavy soil |
| 4. Day and night | () | d) universal solvent |
| 5. Seasons | () | e) solution |

C - 16

Vikram
Real Life
Term Book

Syllabus :
Term - 3
(Lessons 1 - 6)
Page No's. 154 - 183

SUMMATIVE ASSESSMENT - III

Class - III :: Vikram Real Life Social Studies

Time : 2½ Hour

Max.Marks: 50

50

Name :	Class :	Section :	Roll No.
--------	---------	-----------	----------

I. Answer the following questions.

[5 x 3 = 15M]

- 1) Which transport system of Kolkata is not found in other cities of India ?
- 2) Give two reasons for the importance of Chennai.
- 3) What was the food of the early man ?
- 4) Which animals were domesticated by the early man ?
- 5) How did Rama marry Sita ?

II. Answer any ONE of the following questions.

[1 x 5 = 5M]

- 1) Which observations helped the discovery of the wheel ?
- 2) Write how Duryodhana tried to kill the pandavas with an example.

III. Answer any ONE of the following questions.

[1 x 5 = 5M]

- 1) Write a few lines about Gautam Buddha.
- 2) Write a short note on Jesus Christ.

IV. Locate the capital cities of the following states in an outline map of India.

[5 x 1 = 5M]

- 1) Kerala
- 2) Karnataka
- 3) Andhra Pradesh
- 4) Madhya Pradesh
- 5) Gujarat

V. Fill in the blanks.

[7 × 1 = 7M]

- 1) A new bridge built on the river Hoogly is known as _____.
- 2) The Theosophical Society is at _____.
- 3) Early man used _____ as his weapons.
- 4) _____ is a cart without wheels.
- 5) _____ was the king of Ayodhya.
- 6) Prophet Mohammad was born at _____ in Arabia.
- 7) The followers of Guru Nanak are known as _____.

VI. Write 'True' or 'False' for the following statement.

[6 × 1 = 6M]

- 1) Kolkata is the capital city of the State of West Bengal. ()
- 2) People of Kolkata are fond of fish. ()
- 3) Early man lived in caves. ()
- 4) Early man wore cotton clothes. ()
- 5) Raja Janaka was the father of Sita. ()
- 6) 'The Mahabharata' was written by Rishi Valmiki. ()

VII. Match the following.

[7 × 1 = 7M]

- | A | B |
|-------------------------|------------------------------|
| 1. Prophet Mohammad () | a) Buddhism |
| 2. Christmas () | b) Holy Book |
| 3. Gautama Buddha () | c) Sikhism |
| 4. Guru Nanak () | d) 25 th December |
| 5. The Quran () | e) Islam |
| 6. Anna Salai () | f) Melting |
| 7. Metals () | g) mainroad |

India



C - 16

Vikram
Real Life
Term Book

SUMMATIVE ASSESSMENT - III

Syllabus : GK
Term - 3
(Chapters 1 - 4)

Class - III :: Vikram Real Life General Knowledge

Page No's. 187 - 204

Time : 2½ Hour

Max.Marks: 50

50

Name :

Class :

Section :

Roll No.

I. Write the name of the country where these famous buildings and monuments are located. [5 x 2 = 10M]



II. Name the following.

[10 x 1 = 10M]

	Country	Capital	Currency
1.	Argentina	Buenos Aires	Peso
2.	Bangladesh		Taka
3.	China	Beijing	
4.		Copenhagen	Krone
5.	Egypt		Egyptian Pound
6.	France	Paris	
7.		Berlin	Euro
8.	Japan		Yen
9.	Malaysia	Kaulalumpur	
10.		Kathmandu	Rupee

Help Box

Nepal Tokyo Euro Denmark Dhaka
Ringgit Germany Cairo Yuan

III. Write the Nationality and also identify the national flag of the country.

[5 x 2 = 10M]


1) The people of America _____

2) The people of China _____

3) The people of Denmark _____

4) The people of Japan _____

5) The people of India _____



Help Box

Indians Chinese Danes Japanese Americans

IV. Write the capitals for the following States.

[10 x 1 = 10M]

Lucknow, Srinagar, Bhopal, Mumbai, Chennai,
Jaipur, Itanagar, Chandigarh, Kolkata, Gangtok

1) Uttar Pradesh _____

2) Madhya Pradesh _____

3) Tamil Nadu _____

4) Arunachal Pradesh _____

5) West Bengal _____

6) Jammu & Kashmir _____

- 7) Maharashtra _____
- 8) Rajasthan _____
- 9) Punjab _____
- 10) Sikkim _____

V. Here are some popular brand names. Name the product.

[10 x 1 = 10M]

1.	Titan	
2.	Lifebuoy	
3.	Britannia	
4.	Colgate	
5.	Kodak	
6.	Bata	
7.	Pepsi	
8.	Horlicks	
9.	M.R.F.	
10.	Nutrine	
