

C - 16

Vikram
Real Life
Term Book

FORMATIVE ASSESSMENT - II

Syllabus :

Term 1 (Lessons 3 & 4)

Class - IV :: Vikram Real Life English

Page No. 16 - 31

Time : 1 Hour

Max.Marks: 25

25

Name :

Class :

Section :

Roll No.

I. Answer the following questions.

[5 x 2 = 10M]

- 1) What was the shape of the cloud that Sonu saw ?
- 2) What did Kanaya say when he saw the doll in Kiju's hands ?
- 3) What is a cloud made up of ?
- 4) What was the dream that the man in the shop had ?
- 5) How does water in lakes, rivers and seas turn into water vapour ?

II. Fill in the following blanks using a question word.

[2 x 1 = 2M]

(what, who, where, why, how)

- 1) _____ is taking you to the market ?
- 2) _____ are you going ?

III. Read the following sentences and write who said these sentences and to whom.

[2 x 1 = 2M]

- 1) "It is so beautiful! It's like a child, not a doll".
- 2) "How much is that doll ?"

IV. Read the following and write True or False in each box.

[5 x 1 = 5M]

1) Kiju and Kanaya had a beautiful child.

2) A cloud is made of smoke.

3) Kiju liked the doll in the window of the shop.

4) Sonu was looking at the clouds in the sky.

5) Kanaya was not happy to see the doll.

V. Write the meanings for the following.

[3 x 1 = 3M]

1) Pray = _____

2) Beautiful = _____

3) Droplets = _____

VI. Write the negative sentences for the following.

[3 x 1 = 3M]

1) Kanaya liked the doll very much.

2) The shopkeeper called her into the shop.

3) Kiju waited till the shop was opened.

C - 16

Vikram
Real Life
Term Book

FORMATIVE ASSESSMENT - II

Syllabus :
Term 1 (Lessons 4 - 6)

Class - IV :: Vikram Fundamentals of English Grammar

Page No. 50 - 56

Time : 1 Hour

Max.Marks: 25

25

Name : _____ **Class :** _____ **Section :** _____ **Roll No.** _____

I. Pick out the objects and complements in the following sentences. [5 x 1 = 5M]

	Objects	Complements
1) The wind is cold.	_____	_____
2) He told a lie.	_____	_____
3) The news was true.	_____	_____
4) The lion roars.	_____	_____
5) You look happy.	_____	_____

II. Pick out Adverbs in the following sentences and say what kind of adverbs they are.

[5 x 1 = 5M]

- 1) I have seen him once. _____
- 2) You should not do so. _____
- 3) The sea is very calm. _____
- 4) The story is written well. _____
- 5) I hurt my leg yesterday. _____

III. Pick out adjectives in the following sentences. Say to which class each of them belongs. Also mention the noun it qualifies. [10 x 1 = 10M]

- 1) Which pen do you prefer ?
- 2) Gita got the second prize.
- 3) Several Americans were killed in the Terrorist attack.

- 4) I like strong coffee.
- 5) I hate such things.
- 6) He was absent last week.
- 7) He has lost all his wealth.
- 8) She is a great leader.
- 9) He comes here everyday.
- 10) What time is it ?

IV. Fill in the blanks in the following sentences with suitable adjectives.

Pick the adjectives from the list.

[5 x 1 = 5M]

(Rude, Poor, Sweet, Harsh, Wise)

- 1) Rich people should help the people who are _____
- 2) Sour mangoes cannot be _____
- 3) Ravi is polite but Raghu is _____
- 4) A foolish fellow cannot be _____
- 5) He is soft but his sister is _____

C - 16

Vikram
Real Life
Term Book

FORMATIVE ASSESSMENT - II

Syllabus :

Term 1 (Lessons 3 & 4)

Class - IV :: Vikram Real Life Mathematics

Page No. 93 - 113

Time : 1 Hour

Max.Marks: 25

25

Name :

Class :

Section :

Roll No.

I. Do the following sums.

[3 x 2 = 6M]

- 1) Find the product using simple method : 564×99 .
- 2) What should be subtracted from 4600 to get 1875 ?
- 3) Find the sum : $3,33,444 + 66,999 + 8,888$.

II. Do the following sum.

[1 x 4 = 4M]

- 1) A, B and C are three brothers. Their annual savings in one year are respectively Rs. 24,750, Rs. 30,900 and Rs. 19,800. Find the total savings of the three brothers.

III. Fill in the blanks.

[5 x 1 = 5M]

- 1) $175 \times 400 = \underline{\hspace{2cm}} \times 100$.
- 2) $0 \times 125 = \underline{\hspace{2cm}}$.
- 3) $198 - 154 = \underline{\hspace{2cm}}$.
- 4) $426 \times 1 = \underline{\hspace{2cm}}$.
- 5) $(4 \times 5) \times 6 = 5 \times (\times) \underline{\hspace{2cm}}$.

IV. Choose the correct answer and write the letter of the correct answer in the box.

[5 x 1 = 5M]

1) $\underline{\hspace{2cm}} - 235 = 0$.

A) 135

B) 235

C) 230

D) 200

2) $96 + 58 = 154$, $58 + 96 = \underline{\hspace{2cm}}$

A) 155

B) 152

C) 154

D) 150

3) $72 \times 300 =$ _____ .

- A) 21600 B) 21620 C) 21500 D) 20400

4) When any number is multiplied by '1' or '1' is multiplied by any number the product is

- A) zero B) the same number C) one D) none

5) The difference between the largest 3-digit number and the smallest 6-digit number.

- A) 99000 B) 99,001 c) 99,900 d) 90000

IV. Match the following.

[5 x 1 = 5M]

1) $62 - 25 =$

a) 44

2) $468 - 0 =$

b) 193350

3) $198 - 154 =$

c) 25

4) $67 \times 2000 =$

d) 468

5) $2578 \times 75 =$

e) 134000

C - 16

Vikram
Real Life
Term Book

FORMATIVE ASSESSMENT - II

Syllabus :

Term 1 (Lessons 3 & 4)

Class - IV :: Vikram Real Life Science

Page No. 151 - 167

Time : 1 Hour

Max.Marks: 25

25

Name :

Class :

Section :

Roll No.

I. Answer the following questions.

[5 x 2 = 10M]

- 1) What are the results of deforestation ?
- 2) Mention the different parts of the digestive system.
- 3) What are the steps to be taken to preserve wildlife ?
- 4) What are the functions of the excretory system ?
- 5) Define movable joints and immovable joints.

II. Fill in the blanks with suitable words.

[4 x 1 = 4M]

- 1) All the fuctions of our body are controlled by the _____
- 2) Human beings and animals depend on plants for their _____.
- 3) _____ and _____ can damage plants
- 4) The heart pumps _____ to all parts of the body.

III. Choose the correct answer and write the letter of the correct answer in the boxes.

[4 x 1 = 4M]

1) Gliding joint is present in this body part.

A) Shoulder

B) wrist

C) neck

2) The protected places of wild animals and birds are called.

A) hospitals

B) clinics

C) sanctuaries

3) Corbett National Park is situated in

- A) Uttar Pradesh B) Bihar C) Asom

4) Backbone protects.

- A) Brain B) spinalcord C) lungs

IV. Write True or False for the following.

[3 x 1 = 3M]

1) Timely watering is not necessary for plants.

2) Forests are the wealth of a country.

3) A greenhouse does not maintain optimum temperature.

V. Match the following.

[4 x 1 = 4M]

1) Nerves

a) a protected place for wild animals and birds

2) Veins

b) natural wealth

3) Plant and animals

c) carry impulses

4) Sanctuary

d) bring impure blood to the heart

C - 16

Vikram
Real Life
Term Book

FORMATIVE ASSESSMENT - II

Syllabus :

Term 1 (Lessons 4 - 6)

Class - IV :: Vikram Real Life Social Studies

Page No. 189 - 202

Time : 1 Hour

Max.Marks: 25

25

Name :

Class :

Section :

Roll No.

I. Answer the following questions.

[5 x 2 = 10M]

- 1) What are the two groups of Islands in India ?
- 2) What is a plateau ?
- 3) Name the important rivers of the central plateau region.
- 4) What is meant by Desert ?
- 5) Where does the Thar Desert lie ?

II. Fill in the blanks.

[5 x 1 = 5M]

- 1) The river Mahanadi flows through the _____ plains.
- 2) The Chilka Lake is in the state of _____.
- 3) A _____ is a broad, flat area of land.
- 4) The _____ is called the 'Ship of the Desert'.
- 5) _____ is the most important port on the Malabar coast.

III. Write True or False for the following.

[5 x 1 = 5M]

- 1) The Rajasthan desert receives abundant rainfall.
- 2) The Indian Desert extends up to Gujarat in the South.
- 3) Animals are found in large numbers in the Thar Desert.

4) The desert area is more suitable for sustaining a large population.

5) Formation of sand dunes is a natural phenomenon in the Thar Desert.

IV. Match the following.

[5 x 1 = 5M]

1) Narmada and Tapti

a) Lakshadweep Islands

2) Central Plateau

b) Flowing westward

3) Arabian Sea

c) Black cotton Region

4) Visakhapatnam

d) Kerala

5) Lagoons

e) Andhra Pradesh

C - 16

Vikram
Real Life
Term Book

FORMATIVE ASSESSMENT - II

Syllabus : GK

Term 1 (Chapters 3 & 4)

Class - IV :: Vikram Real Life General Knowledge

Page No. 226 - 229

Time : 1 Hour

Max.Marks: 25

25

Name :

Class :

Section :

Roll No.

I. Choose the right word for the following statements. [6 x 1 = 6M]
(atmosphere, soil erosion, acid rain, globalwarming, conservation, extinct)

- 1) Carrying away of soil by wind or water is _____.
- 2) Rain containing harmful chemicals is called _____.
- 3) Slow increase in temperature of the world is called _____.
- 4) Protecting the environment and trying to reduce the damage caused to it by pollution is called _____.
- 5) The layer of air surrounding the earth is _____.
- 6) Plants and animals not existing any more is called _____.

II. What do the following abbreviations stand for ? Match them. [10 x 1 = 10M]

- | | |
|-----------|-----------------------------|
| 1) a.m. | a) First Information Report |
| 2) B.A. | b) Children's Book Trust |
| 3) B.Sc. | c) Ante Meridiem |
| 4) C.B.T. | d) Bachelor of Science |
| 5) F.I.R. | e) Bachelor of Arts |

6) B.C.

f) Please Turn Over

7) B.Com.

g) Before Christ

8) B.S.F.

h) Bachelor of Commerce

9) e.g.

i) Border Security Force








10) P.T.O.

j) Exempli gratia (for example)

Write your answers here.

1		2		3		4		5		6		7		8		9		10	
---	--	---	--	---	--	---	--	---	--	---	--	---	--	---	--	---	--	----	--

III. Match the description with the help of clues and put a tick next to what is right and a cross next to what is wrong. [9 x 1 = 9M]

1) 	2) 	3) 
4) 	5) 	6) 
7) 	8) 	9) 

Take My help :

- | | | |
|---|----------------------------------|-----------------------|
| 1) Say no to Plastic | 2) Don't cut down trees | 3) Plant trees |
| 4) Throw garbage on the road | 5) Keep the tap running and play | |
| 6) Water the plants | 7) Stop burning garbage | 8) Stop blowing horns |
| 9) Put garbage in the covered dust bin. | | |
