

C - 16

Vikram
Real Life
Term Book

FORMATIVE ASSESSMENT - I

Syllabus :
Term 1 (Lessons 1 & 2)
Page No. 5 - 16

Class - V :: Vikram Real Life English

Time : 1 Hour

Max.Marks: 25

25

| Name : | Class : | Section : | Roll No. |
|--------|---------|-----------|----------|
|--------|---------|-----------|----------|

I. Answer the following questions.

[5 x 2 = 10M]

- 1) Why didn't the boy find his belt ?
- 2) What were the duties of the dog and the donkey ?
- 3) Why did the donkey bray ? What happened after that ?
- 4) How did the boy burn his tongue ?
- 5) What is the moral of the story 'A Washer man's Donkey' ?

II. Write meanings for the following.

[3 x 1 = 3M]

- 1) realize =
- 2) went off =
- 3) pretend =

III. Fill in the blanks using had, has, don't have, didn't have

[3 x 1 = 3M]

- 1) They _____ a dog last year. They have bought a new dog recently.
- 2) I _____ a long pencil when I was in class 4. Now I _____ it.
- 3) He writes very well. He _____ a good hand.

IV. Fill in the blanks using good (or) well.

[3 x 1 = 3M]

- 1) I like your shirt. It looks _____ on you.
- 2) She has a _____ hand. She writes _____.
- 3) George is from America. He speaks English _____.

V. Write True (or) False for the following.

[3 x 1 = 3M]

1) The dog guarded the washerman's clothes.

2) The boy's mother woke him up.

3) The boy slept very late the night before.

VI. Complete each blank with a sentence as shown in the example.


[3 x 1 = 3M]

1) They do the work fast.

2) Tina writes stories well.

3) Malleesh works hard.

FORMATIVE ASSESSMENT - I



| | | | |
|---------------|----------------|------------------|-----------------|
| Name : | Class : | Section : | Roll No. |
|---------------|----------------|------------------|-----------------|

I. Fill in the blanks with one of those collective nouns. [5 x 1 = 5M]

| | | | | |
|-------|-----|------|-------|--------|
| fleet | mob | herb | bunch | packet |
|-------|-----|------|-------|--------|

- 1) A group of ships is _____ .
- 2) A collection of people is _____ .
- 3) A group of cattle is _____ .
- 4) A _____ of cigarettes.
- 5) A _____ of flowers.

II. Fill in the blanks with Reflexive or Emphatic Pronouns. [5 x 1 = 5M]

- 1) I will go _____ .
- 2) She poisoned _____ .
- 3) I was sitting by _____ .
- 4) He has landed _____ in troubles.
- 5) You must express _____ clearly.

III. Pick out the verbs in the following sentences, and say whether it is Transitive or Intransitive or of incomplete predication. If the verb is transitive, name the object. In case of incomplete predication identify the complement. [5 x 1 = 5M]

- 1) Tell the truth.
- 2) The policeman blew his whistle.
- 3) The wind is cold.
- 4) The earth moves round the sun.
- 5) He waited an hour.

IV. Fill in the blanks with suitable words picked up from the list.

[5 x 1 = 5M]

| | | | | |
|---------|----------|---------|--------|-----------|
| bravery | goodness | cruelty | wisdom | happiness |
|---------|----------|---------|--------|-----------|

- 1) A soldier shows his _____ .
- 2) A happy man has the quality of _____ .
- 3) A cruel man shows his _____ .
- 4) A good man shows his _____ .
- 5) The quality of a wise man is _____ .

V. Fill in the blanks with Possessive Pronouns (or) Possessive Adjectives. [3 x 1 = 3M]

- 1) They have lost _____ money. Take care of _____ .
- 2) You have your purse. Have you seen _____ ?
- 3) Sita has lost _____ book. Can you give her _____ ?

VI. Fill in the blanks with suitable Interrogative Pronouns.

[2 x 1 = 2M]

- 1) Of _____ are you speaking ?
- 2) _____ do you say ?

C - 16

Vikram
Real Life
Term Book

FORMATIVE ASSESSMENT - I

Syllabus :
Term 1 (Units 1 - 3)
Page No. 57 - 98

Class - V :: Vikram Real Life Mathematics

Time : 1 Hour

Max.Marks: 25

25

Name :

Class :

Section :

Roll No.

I. Do the following sums.

[5 x 2 = 10M]

1) Write the following in words using the international place-value system.

a) 8244536

b) 796078

2) Write the corresponding Roman numeral for each of the following.

a) 99

b) 54

3) Write the numeral for the following number name and number name for the numeral.

a) Write numeral for Seventy six lakh eighty thousand one hundred four.

b) Write number name for 8,40,079.

4) Rearrange the following in the Ascending order.

28,764; 24,768; 28,746; 24,678.

5) Find the L.C.M of 8, 9, 12 by Prime factorization method.

II. Fill in the blanks.

[5 x 1 = 5M]

1) One is a _____ of all the numbers.

2) Every number is a _____ of 1.

3) Twin primes differ by _____ .

4) A composite number has atleast _____ factors.

5) The H.C.F of 62 and 63 = _____ .

III. Choose the correct answer and write the letter in the box.

[5 x 1 = 5M]

- 1) The place value of 6 in 568921 is
- a) 60 b) 600 c) 60000 d) 6000
- 2) One of the factors of 64 is
- a) 5 b) 6 c) 7 d) 8
- 3) The least fo the 3 digit number is
- a) 111 b) 100 c) 999 d) 101
- 4) The immediate predecessor of 1000 is
- a) 1001 b) 10000 c) 900 d) 999
- 5) An example of Twin Primes is
- a) 7, 11 b) 2, 3 c) 11, 13 d) 15, 16

IV. Compare the following pairs of numbers using inequality symbols (> and <)

[5 x 1 = 5M]

- 1) 49627 64972
- 2) 563642 56643
- 3) 390007 397000
- 4) 760054 76504
- 5) 9136008 9603108

C - 16

Vikram
Real Life
Term Book

FORMATIVE ASSESSMENT - I

Syllabus :
Term 1 (Lessons 1 - 3)
Page No. 155 - 178

Class - V :: Vikram Real Life Science

Time : 1 Hour

Max.Marks: 25

25

| | | | |
|--------|---------|-----------|----------|
| Name : | Class : | Section : | Roll No. |
|--------|---------|-----------|----------|

I. Answer the following questions.

[5 x 2 = 10M]

- 1) What is germination ?
- 2) Which process releases energy in the body ?
- 3) What are the conditions required for seed germination ?
- 4) Mention any four kinds of stimuli.
- 5) What is tadpole ?

II. Fill in the blanks with suitable words.

[4 x 1 = 4M]

- 1) Egg-laying animals are called _____ .
- 2) _____ is the male organ of a flower.
- 3) The Pupa of a housefly is covered in a case called _____ .
- 4) Limewater turns milky in the presence of _____ .

III. Choose the correct answer and write the letter of the correct answer in the box.

[4 x 1 = 4M]

1) Animals and human beings give out

- a) oxygen b) carbon dioxide c) nitrogen

2) Parental care is seen in

- a) insects b) birds c) reptiles

3) A fish breathes through its
a) lungs b) gills c) holes

4) The female part of a flower
a) Androecium b) Gynoecium c) Stamen

IV. Write True or False for the following. **[3 x 1 = 3M]**

1) Some living things respond to stimuli.

2) Cows breathe through their lungs.

3) New branches grow in plants when they are cut off.

V. Match the following **[4 x 1 = 4M]**

- | | | |
|------------------|--------------------------|-----------------------|
| 1) Coconut seeds | <input type="checkbox"/> | a) butterfly |
| 2) Plants | <input type="checkbox"/> | b) dispersal by water |
| 3) Caterpillar | <input type="checkbox"/> | c) Spiracles |
| 4) Cockroach | <input type="checkbox"/> | d) stomata |

C - 16

Vikram
Real Life
Term Book

FORMATIVE ASSESSMENT - I

Syllabus :
Term 1 (Lessons 1 - 3)
Page No. 197 - 214

Class - V :: Vikram Real Life Social Studies

Time : 1 Hour

Max.Marks: 25

25

| Name : | Class : | Section : | Roll No. |
|--------|---------|-----------|----------|
|--------|---------|-----------|----------|

I. Answer the following questions.

[5 x 2 = 10M]

- 1) What is Climate ?
- 2) What are parallels of latitudes ?
- 3) What is humidity ?
- 4) What is a map ?
- 5) What are represented by the following colours in a map ?
a) Blue b) Green c) Yellow d) Brown

II. Fill in the blanks.

[5 x 1 = 5M]

- 1) A book of maps is called an _____ .
- 2) Places at high altitudes have _____ climate.
- 3) The equator is of _____ degrees.
- 4) The line which is located at $23\frac{1}{2}^{\circ}$ N is known as the _____ .
- 5) By noon the rays of the sun fall _____ on the earth.

III. Write True or False for the following.

[5 x 1 = 5M]


- 1) A map is more useful than a globe.
- 2) The earth is spherical in shape.
- 3) A globe is not a replica of the earth.
- 4) A map without a scale is useful.
- 5) One who makes a map is called a photographer.

IV. Match the following

[5 x 1 = 5M]

- | | | |
|------------------------------|----------------------|-------------------------|
| 1) $66\frac{1}{2}^{\circ}$ N | <input type="text"/> | a) Very cold |
| 2) Torrid zone | <input type="text"/> | b) Arctic circle |
| 3) $23\frac{1}{2}^{\circ}$ S | <input type="text"/> | c) Pleasant |
| 4) Temperate zone | <input type="text"/> | d) Tropic of capricorn. |
| 5) Frigid Zone | <input type="text"/> | d) very hot |

FORMATIVE ASSESSMENT - I



Syllabus :
Term 1 (Chapters 1- 2)
Page No. 237 - 243

Class - V :: Vikram Real Life General Knowledge



Time : 1 Hour

Max.Marks: 25

| | | | |
|---------------|----------------|------------------|-----------------|
| Name : | Class : | Section : | Roll No. |
|---------------|----------------|------------------|-----------------|

I. Name these wild animals.

[5 x 1 = 5M]



| | | | | |
|----------------|------------------|-------------|--------------|------------|
| Golden Langur, | Clouded Leopard, | Black Buck, | Asiatic Lion | Rhinoceros |
|----------------|------------------|-------------|--------------|------------|

- 1) 2)
- 3) 4)
- 5)

II. Read the following facts on plants and fill in the blanks with suitable words.

(Chlorophyll, Seeds, Shade, Pulp, medicines)

[2 x 1 = 2M]

- 1) The part of a plant which uses sunlight to make food for the plant is _____
- 2) The _____ of wood is used for making paper.
- 3) Coriander is used for its leaves and _____.
- 4) Trees give _____ to the passer by.
- 5) We use plant leaves for making _____ .

III. Read the following statements and write 'Yes' or 'No'.

[3 x 1 = 3M]

- 1) A shark hunts by smell.
- 2) Cat's hearing ability is dim.
- 3) Bears are carnivorous.

IV. Write 'True' or 'False' for the following statements.

[5 x 1 = 5M]

- 1) Sea weed is a kind of algae.
- 2) Opium is obtained from poppy.
- 3) Ferns have no flowers or seeds.
- 4) Pencillin is made from a fungus.
- 5) The biggest flower in the world is the Rafflesia flower.

V. Here are statements related to plants. Name them.

[7 x 1 = 7M]

- 1) The study of plants.
- 2) A place where grapes are grown.
- 3) This term means miniature tree (or) shrub.
- 4) A place where farmers grow crops.
- 5) A place where young plants are grown.
- 6) The name given to plants that live for many years.
- 7) Plants that live for a few weeks or months.

Take My help

Annuals Biology Vineyard Nursery Field Perennials Bonsai
