

# COMPUTER - 3

## EASY LEARNING

### Question Papers

With Lesson Plan

#### FORMATIVE ASSESSMENT PAPERS

- \* FORMATIVE ASSESSMENT - I
- \* FORMATIVE ASSESSMENT - II
- \* FORMATIVE ASSESSMENT - III
- \* FORMATIVE ASSESSMENT - IV

#### SUMMATIVE ASSESSMENT PAPERS

- \* SUMMATIVE ASSESSMENT - I
- \* SUMMATIVE ASSESSMENT - II
- \* SUMMATIVE ASSESSMENT - III

**Total Pages : 24**

**Note :** These Question Papers are meant for students, using **Lotus Computer Easy Learning Books** Summative Exam papers are as complement for schools. The price of ₹ 2/- against Formative Exam papers also charged nominally towards transportation and handling charges only and to avoid misusage / wastage.

**Total : 1 Set**

**No. of Students : 1**

# LOTUS COMPUTER EASY LEARNING TEXT BOOK

## LESSON PLAN : CLASS - 3

	Months	Computer Easy Learning
		Chapters
FA - I	June - July	1. The Computer System
FA-II	August	2. Introduction of Windows 7
SA-I	September	1. The Computer System 2. Introduction to Windows 7 3. More on Paint
FA - III	Oct - Nov	4. Playing with Images in Paint
SA - II	December	1. The Computer System 2. Introduction to windows 7 3. More on Paint 4. Playing with Images in Paint 5. More on Tux Paint
FA - IV	Jan - Feb	6. MSW LOGO 7. More on MSW LOGO
	March	<b>Revision</b>
SA - III	April	1. The Computer System 2. Introduction to window 7 3. More on Paint 4. Playing with Images in Paint 5. More on Tux Paint 6. MSW LOGO 7. More on MSW LOGO 8. MS - Word 2010

**C-18**

**Lotus  
Computers  
Text Book**

# FORMATIVE ASSESSMENT - I

**Class - III :: Computer Easy Learning**

**Syllabus:  
(Chapter : 1  
Pg. Nos : 5-17)**

**Time : 1 Hour**

**Max. Marks : 25**

**25**

**Name :**

**Class :**

**Section :**

**Roll No.**

**I. Answer the following questions.**

**[5 × 1 = 5]**

- 1) What do you mean by a processing device ? Explain.
- 2) Where the places Barcode scanners are used ?
- 3) Give differences between :
  - (a) Scanner and Printer
  - (b) Webcam and Digital Camera
- 4) What is Operating Software ?
- 5) Give the differences between application software and system software.

**II. Fill in the blanks.**

**[5 × 1 = 5]**

- 1) MS paint is a type of ..... software.
- 2) ..... is the cheapest printer.
- 3) ..... is an output device.
- 4) ..... controls the working of hardware.
- 5) The parts of the computer which can be touched and seen are called .....

**III. State True or False.**

**[5 × 1 = 5]**

- 1) The physical components of the computer are called hardware.
- 2) There are six types of printers.
- 3) Inkjet printer is the costliest printer.
- 4) Windows 7 is a type of application software.
- 5) Keyboard is an input device.

**IV. Choose the correct answer.**

**[5 × 1 = 5]**

- 1) A computer displays ..... after processing data.   
a) Input                      b) Process                      c) None of these                      d) Output
- 2) What can be used to play a song ?   
a) Speakers                      b) Mouse                      c) Keyboard                      d) None of these
- 3) A display screen that responds to touch is called .....   
a) Touchscreen                      b) Touchpad                      c) Both a and b                      d) None of these
- 4) ..... is the best quality printer.   
a) Inkjet printer                      b) Laser printer                      c) Both a and b                      d) None of these
- 5) VDU stands for .....   
a) Visual Display Unit                      b) Visual Drive Unit  
c) Vista Drive Unit                      d) Vertical Display Unit

**V. Unscramble the jumbled letters to form names of input devices.**

**[5 × 1 = 5]**

- 1) UOCHTSCRENE \_\_\_\_\_
- 2) CSANNRE \_\_\_\_\_
- 3) EBWAMC \_\_\_\_\_
- 4) ICENHOPORM \_\_\_\_\_
- 5) GHLIT NPE \_\_\_\_\_



**C-18**

**Lotus  
Computers  
Text Book**

# FORMATIVE ASSESSMENT - II

**Syllabus:  
(Chapter : 2**

**Pg. Nos : 18-30)**

**Class - III :: Computer Easy Learning**

**Time : 1 Hour**

**Max. Marks : 25**

**25**

**Name :**

**Class :**

**Section :**

**Roll No.**

**I. Answer the following questions.**

**[5 × 1 = 5]**

- 1) What do you mean by gadgets ?
- 2) What do the icons do ?
- 3) What do you mean by a recycle bin ?
- 4) What is Windows 7 ?
- 5) What is a desktop background ? What is it used for ?

**II. Write 'T' for True and 'F' for false.**

**[5 × 1 = 5]**

- 1) Taskbar is the longest bar on the desktop.
- 2) Windows is a system software.
- 3) Background picture cannot be changed.
- 4) Icons are files and folders on desktop.
- 5) Recycle bin cannot delete files.

**III. Fill in the blanks.**

**[5 × 1 = 5]**

- 1) Small programs in Windows providing information to the user are known as .....
- 2) ..... is the look and the feel of an operating system.



**Name :****Class :****Section :****Roll No.****I. Answer the following questions.****[5 × 1 = 5]**

- 1) Where will you find the pasted object on the Paint Window ?
- 2) How can you resize a picture ?
- 3) How can you use the Transparent Selection option ?
- 4) Is there any difference between the Rotate and Flip options ?
- 5) Write the steps to crop a picture.

**II. Fill in the blanks.****[5 × 1 = 5]**

- 1) ..... selection helps to select a square or rectangular part of the picture.
- 2) ..... is the keyboard shortcut for Undo.
- 3) A picture can be resized by stretching or skewed horizontally or vertically with the help of the ..... option.
- 4) A picture saved in the computer's memory can be pasted in Paint using the ..... option.
- 5) The angle of a picture or a portion of the picture can be changed by using the ..... option.

**III. Write 'T' for True or 'F' for False.****[5 × 1 = 5]**

- 1) An image that has been cut can only be pasted once in the drawing area.
- 2) Ctrl + V is the keyboard shortcut for Undo.
- 3) The Resize option is present in the Images group.
- 4) You can remove selection box by clicking on the drawing.
- 5) The Esc key helps to deselect a picture.

**IV. Choose the correct answer.**

**[5 × 1 = 5]**

1) This option is used to get a mirror image of the picture.

- a) Rotate left       b) Flip Vertical   
 c) Flip Horizontal       d) None of these

2) The paste option is present in the ..... group.

- a) Images       b) Clipboard   
 c) All of these       d) None of these

3) ..... is the keyboard shortcut for Redo.

- a) Ctrl + x       b) Ctrl + y   
 c) Ctrl + w       d) None of these

4) This option can help to copy a picture without its background colour.

- a) Select all       b) Transparent selection   
 c) Free form selection       d) None of these

5) Which of the following is a type of selection ?

- a) Free-form       b) Horizontal   
 c) Box       d) None of these

**V. Find the three types of selections that paint offers us in word puzzle and encircle it :**

**[5 M]**

C	S	V	R	Y	I	P	A	Q	X	V
R	E	C	T	A	N	G	U	L	A	R
G	L	H	F	R	T	G	B	U	P	O
T	L	K	F	R	E	E	F	O	R	M
Y	E	S	E	A	K	U	N	S	X	X
V	C	O	O	O	D	R	F	H	K	M
C	T	E	R	G	H	I	O	L	V	Z
C	A	Q	Y	I	N	B	O	W	X	F
E	L	Y	I	U	J	J	K	N	R	E
F	L	T	Y	G	F	S	A	V	C	N





C-18

Lotus  
Computers  
Text Book

# FORMATIVE ASSESSMENT - IV

Syllabus:  
(Chapters : 6, 7  
Pg. Nos : 69-91)

Class - III :: Computer Easy Learning

Time : 1 Hour

Max. Marks : 25

25

Name :

Class :

Section :

Roll No.

**I. Answer the following questions.**

[5 × 1 = 5]

- 1) What is the pen erase command used for ?
- 2) What do you mean by pen up command ?
- 3) Write the steps to start LOGO.
- 4) What do you mean by pen down command ?
- 5) What do you mean by pen paint command ?

**II. Fill in the blanks.**

[5 × 1 = 5]

- 1) LOGO is a ..... language.
- 2) The lower part of a turtle is .....
- 3) The turtle can be hidden using ..... command.
- 4) To calculate the sum of two numbers we use .....
- 5) ..... allows the user to find product of two numbers.

**III. State True or False.**

[5 × 1 = 5]

- 1) Home command brings the turtle to the centre.
- 2) ST command stands for show Turtle.
- 3) PE is used to draw a line.
- 4) MSW logo is a language understood by the computers.
- 5) LOGO can only draw pictures.

**IV. Choose the correct answer.**

**[5 × 1 = 5]**

1) What does PPT command stand for ?

a) Pen paint

b) Paint pen

c) Pencil paint

d) None of these

2) ..... command is used when she user does not want the turtle to draw a line when it moves.

a) PE

b) PU

c) PR

d) None of these

3) What command brings to turtle home ?

a) Home command

b) Back command

c) Forward command

d) None of these

4) What command can be used in LOGO to find the product of two numbers ?

a) Product

b) Difference

c) Addition

d) None of these

5) The area where the user can draw pictures is known as :

a) Commander Screen

b) Main Command

c) Main Screen

d) None of these

**V. Write the full form of the following :**

**[5 × 1 = 5]**

1) LT \_\_\_\_\_

2) RT \_\_\_\_\_

3) BK \_\_\_\_\_

4) FD \_\_\_\_\_

5) CT \_\_\_\_\_



**C-18**

**Lotus  
Computers  
Text Book**

# SUMMATIVE ASSESSMENT - I

**Syllabus:  
(Chapters : 1 to 3  
Pg. Nos : 5-43)**

**Class - III :: Computer Easy Learning**

**Time : 2½ Hours**

**Max. Marks : 50**

**50**

**Name :**

**Class :**

**Section :**

**Roll No.**

**I. Answer the following questions.**

**[7 × 2 = 14]**

- 1) Write the steps to draw a hexagon in MS Paint.
- 2) What do the icons do ?
- 3) How can we draw a curved line in MS Paint ?
- 4) What do you mean by a processing device ? Explain.
- 5) What is a desktop background ? What is it used for ?
- 6) How can you create and modify colours in MS Paint ?
- 7) What is Operating Software ?

**II. Write 'T' for true and 'F' for false.**

**[6 × 1 = 6]**

- 1) Taskbar is the longest bar on the desktop.
- 2) The polygon tool helps to make squares only.
- 3) Thy physical components of the computer are called hardware.
- 4) You need to right click on the drawing area to bring the picture back to its original size after being magnified.
- 5) Inkjet printer is the costliest printer.
- 6) There are six types of printers.

**III. Fill in the blanks.**

**[6 × 1 = 6]**

- 1) The parts of the computer which can be touched and seen are called .....
- 2) Small programs in Windows providing information to the user are known as .....

- 3) ..... Background is the background picture on a Windows desktop.
- 4) ..... is an output device.
- 5) New colours can be created and already existing ones can be modified by the ..... option.
- 6) MS paint is a type of ..... software.

**IV. Choose the correct answer.**

**[6 × 1 = 6]**

- 1) ..... is the best quality printer. 
  - a) Inkjet printer    b) Laser printer    c) Both a and b    d) None of these
- 2) A computer displays ..... after processing data. 
  - a) Input                      b) Process                      c) Output                      d) None of these
- 3) ..... icon is used to display hard disk drives and saved files. 
  - a) Computer              b) Recycle bin              c) My documents              d) None of these
- 4) To open a list of programs the user should click on : 
  - a) Taskbar                      b) All programs                      c) Recycle bin                      d) None of these
- 5) The Set as desktop background option is in the menu of ..... 
  - a) Paint button              b) Home tab                      c) Picker tool                      d) None of these
- 6) What can be used to play a song ? 
  - a) Speakers                      b) Mouse                      c) Keyboard                      d) None of these
  - a) Edit colour                      b) Colour picker                      c) Both a and b                      d) None of these

**V. Unscramble the jumbled letters to form a word.**

**[5 × 1 = 5]**

1. LGPONYO LOT \_\_\_\_\_

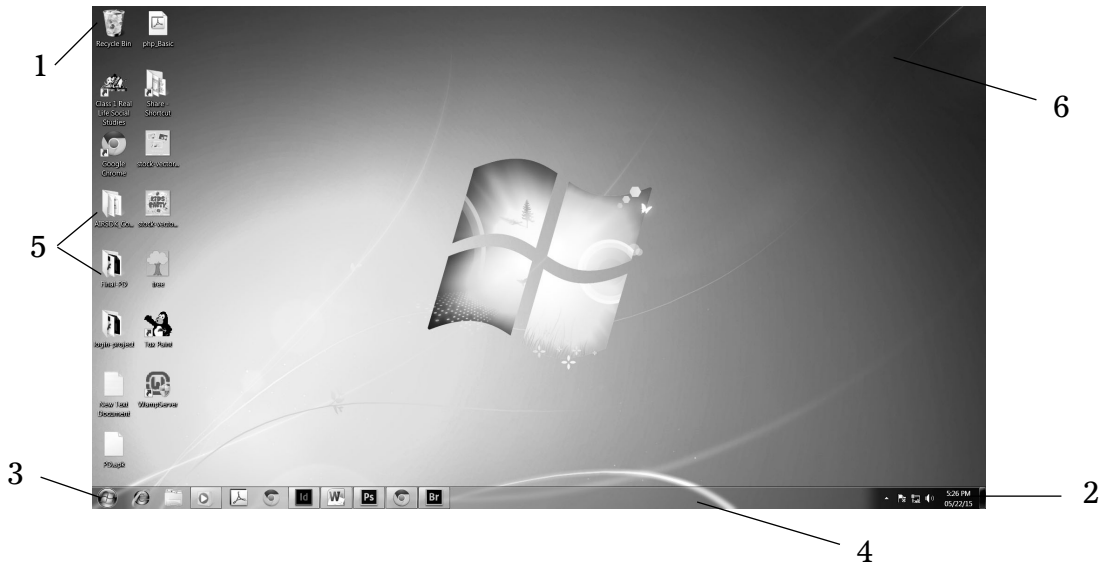
2. CSANNRE \_\_\_\_\_

3. EBWAMC \_\_\_\_\_

4. MNIAFIEGR \_\_\_\_\_

5. VRCEU LOOT \_\_\_\_\_

VI. Below is a screenshot of the Windows 7's desktop. Label it neatly. [6 × 1 = 6]



1. \_\_\_\_\_

2. \_\_\_\_\_

3. \_\_\_\_\_

4. \_\_\_\_\_

5. \_\_\_\_\_

6. \_\_\_\_\_

VII. Windows 7 has many different types of gadgets. Write the names of any seven.

[7 × 1 = 7]

1. \_\_\_\_\_

2. \_\_\_\_\_

3. \_\_\_\_\_

4. \_\_\_\_\_

5. \_\_\_\_\_

6. \_\_\_\_\_

7. \_\_\_\_\_





**C-18**

**Lotus  
Computers  
Text Book**

# SUMMATIVE ASSESSMENT - II

**Syllabus:  
(Chapters : 1 to 5  
Pg. Nos : 5-68)**

**Class - III :: Computer Easy Learning**

**Time : 2½ Hours**

**Max. Marks : 50**

**50**

**Name :**

**Class :**

**Section :**

**Roll No.**

**I. Answer the following questions.**

**[8 × 2 = 16]**

- 1) What is Operating Software ?
- 2) How can we use the Magic tool in Tux Paint ?
- 3) Give the differences between application software and system software.
- 4) How can you create and modify colours in MS Paint ?
- 5) What is Windows 7 ?
- 6) Where the places Barcode scanners are used ?
- 7) How can you use the Transparent Selection option ?
- 8) Is it possible to set a picture made in MS Paint as the desktop background ? If yes, how ?

**II. Fill in the blanks.**

**[8 × 1 = 8]**

1. MS paint is a type of ..... software.
2. A colour can be selected from any part of the picture in paint and can be set as Colour 1 or Colour 2 using the ..... tool.
3. .... controls the working of hardware.
4. .... is the keyboard shortcut for Undo.
5. The magnifier tool is present in the .....
6. .... and .... are types of magic effects.
7. The parts of the computer which can be touched and seen are called .....
8. Different special effects can be applied to a picture using the ..... tool.

**III. Write 'T' for true and 'F' for false.**

**[7 × 1 = 7]**

- 1) Alt + S is the keyboard shortcut to save.
- 2) The Resize option is present in the Images group.
- 3) You need to right click on the drawing area to bring the picture back to its original size after being magnified.
- 4) Flower, Foam and Waves are types of magic effects.
- 5) Icons are files and folders on desktop.
- 6) Taskbar is the longest bar on the desktop.
- 7) The Esc key helps to deselect a picture.

**IV. Look at the following pictures and write the names.**

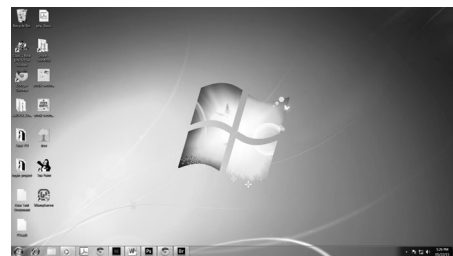
**[4 × 1 = 4]**

1.



\_\_\_\_\_

2.




\_\_\_\_\_

3.



\_\_\_\_\_

4.



\_\_\_\_\_



**V. Choose the correct answer.**

**(7 × 1 = 7)**

1) This option can help to copy a picture without its background colour.

- a) Select all       b) Transparent selection   
c) Free from selection       d) None of these

2) Ctrl + O is the shortcut to :

- a) Close       b) Open   
c) Save       d) None of these

3) VDU stands for .....

- a) Visual Display Unit       b) Visual Drive Unit   
c) Vista Drive Unit       d) Vertical Display Unit

4) To open a list of programs the user should click on :

- a) Taskbar       b) All programs   
c) Recycle bin       d) None of these

5) If you wish to make waves in a sea, which tool will you use ?

- a) Polygon tool       b) Colour picker tool   
c) Curve tool       d) None of these



6) The paste option is present in the ..... group.

- a) Images       b) Clipboard   
c) All of these       d) None of these

7) Which of the following is not a magic effect ?

- a) Pizza       b) Foam   
c) Rainbow       d) None of these

VI. Write the names of various Tux tools by looking at their icons below. (8 × 1 = 8)



**C-18**

**Lotus  
Computers  
Text Book**

# SUMMATIVE ASSESSMENT - III

**Syllabus:  
(Chapters : 1 to 8  
Pg. Nos : 5-107)**

**Class - III :: Computer Easy Learning**

**Time : 2½ Hours**

**Max. Marks : 50**

**50**

**Name :**

**Class :**

**Section :**

**Roll No.**

**I. Answer the following questions.**

**[8 × 2 = 16]**

- 1) How can you save a file ?
- 2) Give differences between :
  - a) Scanner and Printer
  - b) Webcam and Digital Camera.
- 3) Name any five stamps in Tux Paint.
- 4) How can you change the font, font size and font colour of the text ?
- 5) What do you mean by Commander Window ?
- 6) What is the pen erase command used for ?
- 7) Is there any difference between the Rotate and Flip options ?
- 8) How can we draw a curved line in MS Paint ?

**II. Fill in the blanks.**

**[7 × 1 = 7]**

- 1) When all the scenes are displayed one after the other in a set sequence within an interval of some seconds, it's called a .....
- 2) The Font colour can be changed from the ..... group of the Home tab.
- 3) We can zoom into any area of the picture we wish by using the .....
- 4) ..... Command can be used along with operators to make calculations in logo.

- 5) The angle of a picture or a portion of the picture can be changed by using the ..... option.
- 6) Pressing the ..... key will deselect the text.
- 7) ..... allows the user to find product of two numbers.

**III. Write 'T' for true or 'F' for false.**

**[6 × 1 = 6]**

- 1) Windows 7 is a type of application software.
- 2) To move the turtle forward, BK command is used.
- 3) The picture repeats and fills the desktop in the fill style of setting the picture as the desktop background.
- 4) PD command is used to calculate sum of two numbers.
- 5) There's a 'Recent' option in the File Tab which shows files that have recently been opened.
- 6) When saving a document for the first time, the Save and Save As option work in the same way.

**IV. Choose the correct answer.**

**(6 × 1 = 6)**

- 1) Grass, Rails and Bricks are types of :
 

a) Stamps <input type="checkbox"/>	b) Magic effects <input type="checkbox"/>
c) Both a and b <input type="checkbox"/>	d) None of these <input type="checkbox"/>
- 2) Which of the following is present on the Title Bar ?
 

a) Quick Access toolbar <input type="checkbox"/>	b) Zoom slider <input type="checkbox"/>
c) Page number <input type="checkbox"/>	d) None of these <input type="checkbox"/>

3) Which from the following options is a gadget ?

a) Picture puzzle  b) Icons

c) Wallpaper  d) None of these

4) What is the shortcut for opening a saved file ?

a) Ctrl + O  b) Ctrl + E

c) Both of these  d) None of these

5) ..... is the best quality printer.

a) Inkjet Printer  b) Laser Printer

c) Both a and b  d) None of these

6) What command can be used in LOGO to find the product of two numbers ?

a) Product  b) Difference

c) Addition  d) None of these

**V. Solve the word puzzle to find the words from the Help Box.**

**(5 × 1 = 5)**

TURTLE, LOGO, INPUT BOX, LIST BOX, MAIN SCREEN

L	S	V	R	Y	I	P	A	Q	X
I	I	N	P	U	T	B	O	X	A
S	L	H	F	R	T	G	B	U	P
T	L	K	F	R	E	E	F	O	R
B	E	S	E	A	K	U	N	S	X
O	T	U	R	T	L	E	F	H	K
X	T	E	R	G	H	I	O	L	V
C	A	Q	Y	I	L	O	G	O	X
E	L	Y	I	U	J	J	K	N	R
M	A	I	N	S	C	R	E	E	N

**VI. Write the full form of the following :**

**(6 × 1 = 6)**

1) LT \_\_\_\_\_

2) RT \_\_\_\_\_

3) BK \_\_\_\_\_

4) FD \_\_\_\_\_

5) CT \_\_\_\_\_

6) CS \_\_\_\_\_

**VII. Match the columns.**

**(4 × 1 = 4)**

**A**

**B**

1. FD ( )

a) Forward

2. Home ( )

b) Clear Text

3. CT ( )

c) Hide Turtle

4. HT ( )

d) Centre of the screen





