



GENERAL KNOWLEDGE

Class : 4

C-18

Question Papers

with Lesson Plan

Formative Assessment : I

Formative Assessment : II

Formative Assessment : III

Formative Assessment : IV

Summative Assessment : I

Summative Assessment : II

Summative Assessment : III

Total Pages : 24

Note : These Question Papers are meant for students, using Lotus General Knowledge. Formative and Summative Exam papers are as complement for schools. The price of ₹ 2/- against Formative Exam papers also charged nominally towards transportation and handling charges only and to avoid misuse/wastage.

Total : 1 Set

No. of Students : 1

LESSON PLAN

CLASS : 4

| | Months | Lotus G.K. |
|----------|--------------------|------------------|
| | | Lessons |
| FA – I | June – July | Lessons : 1 - 8 |
| FA – II | August | Lesson : 9 - 16 |
| SA – I | September | Lessons : 1 – 20 |
| FA – III | October – November | Lesson : 21 - 33 |
| SA – II | December | Lessons : 1 - 40 |
| FA – IV | January – February | Lesson : 41 - 50 |
| | March | Revision |
| SA – III | April | Lessons : 1 – 60 |

| | | | |
|--------|---------|-----------|----------|
| Name : | Class : | Section : | Roll No. |
|--------|---------|-----------|----------|

I. Recognise amazing animals using the 'Help Box'.

[5 × 1 = 5]

1.



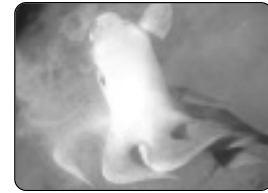
.....

2.



.....

3.



.....

4.



.....

5.



.....

Help Box

Pangolin, Dumbo Octopus,
Armadillo, Babirusa,
Duck - billed platypus.

II. Write the names of the birds in the blank spaces using the 'Help Box'.

[5 × 1 = 5]

1.



.....

2.



.....

3.




.....

4.



.....

5.



.....

Help Box

Hummingbird, Ostrich,
Flamingo, Quail,
Woodpecker.

Note : Cut along the marking to avoid un-even cutting or torn

III. Write the names of the following plants. Use the 'Help Box'. [4 × 1 = 4]

1.



This plant is named after the Italian scientist Ulisse Aldrovandi.



It catches its prey with a trapping structure formed by its leaves.

2.



This attracts insects with a sweet smell, captures and kills them.

3.



This plant is floating on water and it is hairy in structure, which traps insects.

Help Box

Cobra plant, Venus Flytrap
Aldrovanda, Pitcher plant.

IV. Recognise them reading the hints and fill in the blanks using the 'Help Box'. [4 × 1 = 4]




1. Glow worm is another name of



2. ----- lives in large social group.

3. ----- has brightly coloured wings.



4. The insects which destroy vegetation : -----

Help Box

Locust, Firefly, Ant, Butterfly.

V. Fill in the blanks with the names of plants using the 'Help Box'. [7 × 1 = 7]

1. The oil from the pods of this plant is used in ice creams and milkshakes.

2. Medicines are made from this herb for stomach disorders, cough drops, mouthwash etc. -----

3. A blue dye is produced from the leaves of this plant -----

4. We get quinine drug from this plant which is used for curing malaria. -----

5. Seeds of this plant are crushed to make cooking oil. -----

6. We use the sap of this tree to make tyres, erasers, slippers etc. -----

7. It is found in most of houses of Hindus. The leaves of this plant cure cold and cough.


Help Box

Mint, Vanilla, Rubber, Tulsi, Cinchona, Indigo, Mustard.

C - 18
Lotus GK
Text book

FORMATIVE ASSESSMENT - II

Class - 4 :: Lotus General Knowledge



Syllabus:
(Chapters : 9 – 16)
Pg. No. 13 – 20

Time : 1 Hour

Max. Marks : 25

Name : _____ Class : _____ Section : _____ Roll No. _____

I. Choose the names of the authors using the 'Help Box' and write them in the space provided. [5 × 1 = 5]

Books

Authors

1. Godan

.....

2. The Blue Umbrella

.....

3. Discovery of India

.....

4. The Ramayana

.....

5. Gitanjali

.....

Help Box

Rabindranath Tagore, Munshi Premchand, Valmiki, Jawaharlal Nehru, Ruskin Bond.

II. Fill in the blanks with the characters of fairy tales. [5 × 1 = 5]

1. In which fairy tale a girl is lost in imaginary world ? -----

2. How many dwarfs did snow white meet ? -----

3. Whom did elves help ? -----

4. Who was so tiny that she could sleep in a walnut shell ? -----

5. In which fairy tale the king had a palace built up of porcelain and it was delicate ?

.....

Help Box

Shoemaker, Alice in Wonderland, The Nightingale, Seven, Thumbelina.

III. Fill in the blanks with appropriate homophones. [5 × 1 = 5]

1. Meenu bought this saree in a -----, [sail / sale]

2. Every nation wants ----- and prosperity. [piece / peace]

3. Rohit will be home in an ----- . [our / hour]
4. Can you give me an ----- of a student who has passed the high school examination at the age of ten ? [instant / instance]
5. The teacher gave less homework to ----- the burden on the students. [lesson / lessen]

IV. Given below are some important idioms and phrases. Match them with their meanings correctly. [5 × 1 = 5]

- | | |
|----------------------------|--------------------------|
| 1. Apple pie order | a. In a state of decline |
| 2. To add fuel to the fire | b. To break the silence |
| 3. At a low ebb | c. To increase anger |
| 4. To bury the hatchet | d. In perfect order |
| 5. To break the ice | e. To forget a quarrel |


V. Write the names of creators of these cartoon characters. Use the Help Box.


[5 × 1 = 5]











HELP BOX

Jerry Siegel and Joe Shuster, Walt Disney, Stan Lee and Steve, Bob Kane, William Hanna and Joseph Barbera.

C - 18

Lotus GK
Text book

FORMATIVE ASSESSMENT - III

Class - 4 :: Lotus General Knowledge

25

Syllabus:

(Chapters : 21 – 33)

Pg. No. 25 – 37

Time : 1 Hour

Max. Marks : 25

Name :

Class :

Section :

Roll No.

I Choose the correct answers and (✓) mark in the boxes.

[5 × 1 = 5]

1. Which one of the following is a search engine ?

a) Adobe Acrobat

b) Google

c) Firefox

2. How much time does the earth take to complete a rotation on its axis ?

a) 365 days

b) 30 days

c) 24 hours

3. Which of the following is the largest glacier in India ?

a) Shafat Glacier

b) Gangotri Glacier

c) Siachen Glacier

4. Which of these lakes is not in India ?

a) Sambhar lake

b) Chilika lake

c) Baikal lake

5. What is the Thar Desert also known as ?

a) The Great Indian Desert

b) The Desert

c) The Desert of India

II Match the following cities with the rivers on the bank which they are situated.

[5 × 1 = 5]

Cities

Rivers

1) Agra

Musi

2) Vijayawada

Yamuna

3) Nasik

Krishna

4) Hyderabad

Godavari

5) Allahabad

Ganga

III. Match the statements to the related freedom fighters. Pictures with names have been given as clue. [5 × 1 = 5]



1. He is considered the political guru of Mahatma Gandhi.



2. The Nightingale of India, who participated in the Civil Disobedience Movement.



3. He said 'Swaraj is my birthright and I Shall have it.'



4. She unfurled the flag of Indian Independence in a conference in Stuttgart, Germany.



5. He said, "Given me blood, and I promise your freedom."

IV Write the names of the Presidents of India with the 'Help Box'. [5 × 1 = 5]



HELP BOX

Pratiba Patil, Dr. APJ Abdul Kalam, KR Narayanan, Giani Zail Singh, Dr. Sarvepalli RadhaKrishnan.

V Name your doctor using the 'Help Box'. [5 × 1 = 5]

- 1) A person who treats skin diseases. -----
- 2) A person who carries out operations. -----
- 3) A person who treats heart diseases. -----
- 4) A person who tests your eyes. -----
- 5) A person who treats illness and disorder of the mind. -----

HELP BOX

Psychiatrist, Surgeon, Cardiologist, Optician, Dermatologist.

C - 18

Lotus GK
Text book

FORMATIVE ASSESSMENT - IV

Class - 4 :: Lotus General Knowledge

25

Syllabus:
(Chapters : 41 – 50)

Pg. No. 45 – 54

Time : 1 Hour

Max. Marks : 25

Name :

Class :

Section :

Roll No.

I Recognise these famous Indian musicians and write their names using the

'Help Box'.

[5 × 1 = 5]

1)



2)



3)



4)



5)



HELP BOX

Shivkumar Sharma, Pt. Hariprasad Chaurasia, Ustad Zakir Hussain, Shujaat Khan, Vishwa Mohan Bhatt.

II. Here is a list of the medalists who brought laurels to the country. Tick (✓) the correct events in which they won medals. [5 × 1 = 5]

1)



Boxing

Cycling

Wrestling

Saina Nehwal won the bronze medal in London Olympics 2012 in

2)



Lawn Tennis

Badminton

Table Tennis

Gagan Narang won the bronze medal in London Olympics 2012 in

3)



10m Air Pistol

25m Rapid Fire Pistol

50m Rifle Prone

M.C. Mary Kom won the bronze medal in London Olympics 2012 in

4)



Wrestling

High Jump

Boxing

5)



10m Air Rifle

25m Rapid Fire Pistol

50m Rifle Prone

III Recognise the film with the poster and 'Help Box'.

[5 × 1 = 5]

1)



2)



3)



4)



5)




HELP BOX

Bandu Boxer, Heda Honda, Taare Zameen Par, Karamati Coat, Kabhi Pass Kabhi Fail.

IV Logos of banks are given. Please write their names with the Help Box.


1)



2)



3)




[5 × 1 = 5]

4)



5)



HELP BOX

Punjab National Bank, ICICI Bank, Bank of India, Allahabad Bank, Union Bank of India.

V Match the following sports men with their games.

[5 × 1 = 5]

- 1) Serena Williams
- 2) Pankaj Advani
- 3) Dhyan Chand
- 4) Sunil Gavaskar
- 5) Vikas Gowda

- Cricket.
- Athletics
- Lawn Tennis.
- Billiards.
- Hockey.

Name :

Class :

Section :

Roll No.

I. Recognise the figures with the using 'Help Box'.

[10 × 1 = 10]


1)



2)



3)



4)




5)



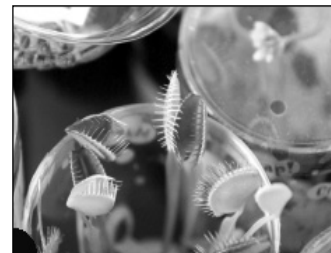
6)




7)




8)



9)



10)



HELP BOX

Dumbo Octopus, Nilgiri Langur, Quail, Cobra Plant, Kalidas, Andes, Bhaskara, Venus Flytrap, Snow Leopard, Ostrich.

II Name a crop that is mainly grown in the following states in the respective box.

Use the 'Help Box.'

[5 × 1 = 5]

1) Grown in Andhra Pradesh

| | | | | | | | |
|--|--|--|--|--|--|--|--|
| | | | | | | | |
|--|--|--|--|--|--|--|--|

2) Grown in Karnataka

| | | | | | | |
|--|--|--|--|--|--|--|
| | | | | | | |
|--|--|--|--|--|--|--|

3) Grown in Kashmir

| | | | | |
|--|--|--|--|--|
| | | | | |
|--|--|--|--|--|

4) Grown in Maharashtra

| | | | | |
|--|--|--|--|--|
| | | | | |
|--|--|--|--|--|

5) Grown in West Bengal

| | | | |
|--|--|--|--|
| | | | |
|--|--|--|--|

Help Box

Apple, Coffee, Jute, Tobacco, Jowar

III Match the idioms and phrases with their meanings.

[5 × 1 = 5]

1) To break the ice

Irregularly.

2) To cast a spell

In writing.

3) By fits and starts

To follow another's opinion.

4) In black and white

To attract or fascinate

5) To toe the line

To break the silence

IV. Choose the correct answer and put mark (✓) in the boxes. [10 × 1 = 10]

1. ----- can drink salt water.
a) Human beings b) Dogs c) Sea birds
2. The longest river in the world is the -----
a) Ganga b) Amazon c) Nile
3. Water covers of the earth surface.
a) 75% b) 71% c) 66%
4. Angel Falls, the highest waterfall in the world, is located in
a) Canada b) Venezuela c) Peru
5. Water vaporizes at degrees Celsius.
a) Zero b) fifty c) hundred
6. Frozen water is water in the liquid form.
a) heavier than b) lighter than
c) the same weight is
7. Most of the earth's water is stored in
a) ocean b) lakes c) rivers
8. Water freezes at degrees Celsius.
a) zero b) hundred c) fifty
9. Less than of the water supply on earth can be used as drinking water.
a) 10% b) 1% c) 70%
10. The ocean that contains the deepest trench on earth is the
a) Indian Ocean b) Atlantic Ocean c) Pacific Ocean

V. Fill in the Blanks.

[10 × 1 = 10]

1. ----- is an object that moves around a planet.
2. The planet closest to the sun is ----- .
3. ----- a British Sailor, who went around the world, mapping Australia and the Antarctica and Arctic regions.

4. Seeds of this plant are crushed to make cooking oil -----.
5. Ved Vyas is to Mahabharata as Bana Bhatt is to ----- .
6. 'Quit India' is to Mahatma Gandhi as 'Aram Haram Hai' is to ----- .
7. Lotus temple is to New Delhi as Charminar is to -----.
8. Which little girl wore a red cloak when she went to meet her grandmother ?
-----.
9. The coldest place in the solar system is -----.
10. A lion is to den as a dog is to ----- .

VI. There are different branches of science. Write the names of branches using the

'Help Box'.

[5 × 1 = 5]

- 1) Study of animals
- 2) Study of insects
- 3) Study of bones
- 4) Study of sound
- 5) Science of heavenly bodies

Help Box

Acoustics, Zoology, Astronomy, Entomology, Osteology

V. Answer the following questions .

[5 × 1 = 5]

- (1) The leaves of which plant are used to make blue dye ?
- (2) Who wrote 'Discovery of India' ?
- (3) The sap of which tree is used to make tyres, erasers, slippers, etc. ?
- (4) Who created the cartoon character Pikachu ?
- (5) Name the first Indian satellite launched into space ?

Name :

Class :

Section :

Roll No.

I Recognise the figures with the using 'Help Box' .

[10 × 1 = 10]

1)



2)



3)



4)




5)




6)



7)



8)



9)



10)



HELP BOX

Sheikh Hasina,
Golden Temple
Shamrock,
Kiwi

Napoleon Bonaparte,
Sanchi Stupa,
Drosera,

Lala Lajpat Rai,
Swami Vivekananda
Etruscan shrew,

II Match the great persons with their nick names :

[5 × 1 = 5]

- | | |
|------------------------|----------------------|
| 1) Jawaharlal Nehru | Iron Man of India |
| 2) Mahatma Gandhi | Nightingale of India |
| 3) Vallabhbhai Patel | Son of Soil |
| 4) Sarojini Naidu | Father of the Nation |
| 5) Lal Bahadur Shastri | Chacha |

III Identify the following social reformers and write their names in the given spaces.

Use the 'Help Box'.

[5 × 1 = 5]



1. He preached against idol worship.
-




2. Popularly known as the Father of Indian Renaissance. He worked to abolish sati practice in India.
-



3. He propagated modern education in Muslim Society.
-



4. Popularly known as the Intellectual Monk of India. He brought spiritual awakening among Indians.
-



5. He fought for the rights of untouchables.
-

HELP BOX

Raja Rammohan Roy, Kabir Das, Mahatma Gandhi, Swami Vivekananda, Sir Sayed Ahmad Khan.

IV. Choose the correct answer and put mark (✓) in the boxes. [10 × 1 = 10]

1. The part of computer that allows computers to transmit data over telephone or cable lines is
a) CPU b) Modem c) Keyboard
2. What is a URL ?
a) Computer game b) Group of web users
c) Address of web page
3. Name the two parts of an e-mail id in the right order.
a) Username and domain name b) Domain name and username
c) Username and password
4. An online journal where an individual, group or corporation presents a records of activities, thoughts or beliefs is called:
a) Weblog or blog b) search engine c) Broadband
5. Which key do we press to capitalize a letter ?
a) Shift b) Ctrl c) Insert
6. Very delicate plants that creep on ground are called
a) Herbs b) Shrubs c) Creepers
7. Which of the following plants is climber ?
a) Watermelon b) Grapevine c) Rose
8. The roots of which of the following plants are used as vegetables ?
a) Ginger b) Spinach c) Tomato
9. The leaves of which of the following plants are used as vegetables ?
a) Radish b) Cabbage c) Cucumber
10. Which water animal comes up to the water surface to breathe in ?
a) Dolphin b) Octopus c) Whale

V. Fill in the Blanks.

[10 × 1 = 10]

- 1) ----- is an object that moves around a planet.
- 2) ----- a British Sailor, Who went around the world, mapping Australia and the Antarctica and Arctic regions.
- 3) Finland is to Parliament as Colombia is to ----- .
- 4) The Ganga is to India as the Huang Ho is to ----- .
- 5) Tamil is to Tamil Nadu as Telugu is to ----- .
- 6) The Himalayas are to Asia as the Andes are to ----- .
- 7) Vihwanathan Anand is to chess as M.C. Mary Kom is to ----- .
- 8) The planet known as the evening star is ----- .
- 9) Golden temple situated in ----- city.
- 10) Lotus Temple is to New Delhi as Charminar is to ----- .

VI. There are different branches of science. Write the names of branches using the 'Help Box'.

[5 × 1 = 5]

- 1) Science of diet and nutrition
- 2) Study of earthquakes
- 3) Branch of medicine dealing with skin
- 4) Study of fruits and seeds
- 5) Study of birds

Help Box

Ornithology, Dietecics, Horticulture, Dermatology, Seismology

VII. Write the answers for the following questions :

[5 × 1 = 5]

- 1) What is the meaning of idiom 'To break the ice' ?
- 2) When was the second battle of Panipat fought ?
- 3) Which trees are used to make cricket bat ?
- 4) Who created the cartoon character 'Pikachu' ?
- 5) What is the national emblem of united kingdom ?

| | | | |
|---------------|----------------|------------------|-----------------|
| Name : | Class : | Section : | Roll No. |
|---------------|----------------|------------------|-----------------|

I Recognise the figures with the using 'Help Box' .

[10 × 1 = 10]


1)




2)



3)



4)




5)



6)



7)



8)



9)



10)



HELP BOX

Armadillo, Dr. Zakir Hussain, Candela brum, John Milton, Volcano, HDFC Bank, Aung San Suu Kyi, Gagan Narang, Lavani.

II Match the terms to their sports.

[5 × 1 = 5]

- | | |
|---------------------------------------|-----------|
| 1) Hattrick, Crease, Fine Leg | Baseball |
| 2) Bird, Deuce, Smash | Wrestling |
| 3) Battery, Diamond, Pullout | Swimming |
| 4) Free style, Heave, Rebouts | Badminton |
| 5) Butterfly, Break Stroke, Freestyle | Cricket |

III Their are different branches of science. Write the names of branches using the 'Help Box'.

[5 × 1 = 5]

- | | |
|-------------------------------|-------|
| 1) Study of animals | ----- |
| 2) Study of insects | ----- |
| 3) Study of bones | ----- |
| 4) Study of sound | ----- |
| 5) Science of heavenly bodies | ----- |

HELP BOX

Entomology, Acoustics, Zoology, Osteology, Astronomy

IV. Choose the correct answer and put (✓) in the boxes. [10 × 1 = 10]

1. One which does not belongs to the group ?

a) Sofa

b) Cycle

c) Bed

2. The river Gomati is a tributary of which river ?

- a) Ganga b) Indus c) Brahmaputra

3. Which of these islands is NOT a part of India ?

- a) Seychelles b) Lakshadweep c) Andamans

4. What are the Sundarbans ?

- a) River b) Delta c) Islands

5. Which of the following rivers is the main tributary of river Ganga ?

- a) Yamuna b) Kosi c) Mahanadi

6. Which state is also known as the 'Spice Garden of India' ?

- a) Kerala b) Uttar Pradesh c) Odisha

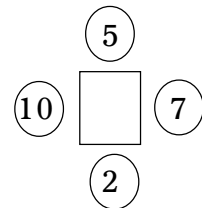
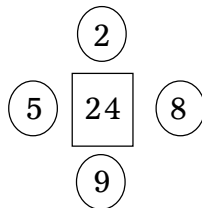
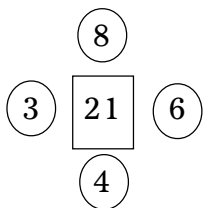
7. Which of these is a major plateau in India ?

- a) Potwar Plateau b) Baghelkhand Plateau
c) Colorado Plateau

8. Which rivers/s flow/s into the Bay of Bengal ?

- a) Mahanadi b) Kaveri c) Both

9. Insert the missing number.



- a) 24 b) 25 c) 20

10. Earth is surrounded by layer of air called

- a) Atmosphere b) Biosphere c) Hemisphere

V. Fill in the blanks.

[10 × 1 = 10]

- 1) is an object that moves around a planet.
- 2) The Planet closest to the sun is
- 3) The biggest planet in our solar system is
- 4) The planet with rings of ice and dust is
- 5) The coldest place in the solar system is
- 6) The Ganga is to India as the Huang Ho is to
- 7) Tamil is to Tamil Nadu as Telugu is to
- 8) The Himalayas are to Asia as the Andes are to
- 9) Vihwanathan Anand is to chess as M.C. Mary Kom is to
- 10) Lotus Temple is to New Delhi as Charminar is to

VI. Name your doctor using the 'Help Box'.

[5 × 1 = 5]

- 1) A person who treats skin diseases
- 2) A person who carries out operations.
- 3) A person who treats heart diseases.
- 4) A person who tests your eyes.
- 5) A person who treats illness and disorder of the mind.

HELP BOX

Optician, Cardiologist, Dermatologist, Psychiatrist, Surgeon.

VII. Answer the following questions :

[5 × 1 = 5]

- 1) Which bank is known as the banker's bank ?
- 2) What is the name of the SriLanka's Parliament ?
- 3) Which part of our body is affected by Goitre ?
- 4) What is the full form of CD ?
- 5) What is the Principal language of Japan ?

