

C - 18  
Lotus  
SEMESTERS

# FORMATIVE ASSESSMENT - III

## Lotus Rainbow SEMESTER BOOK

Syllabus :  
(Lessons : 1 & 2 )  
Pg. No.s 3 – 14

Class - 4 :: ENGLISH : SEMESTER - II

Time : 1 Hour

Max. Marks : 25

25

Name :	Class :	Section :	Roll No.
--------	---------	-----------	----------

### Listening and Speaking

- I. In early April, 1930 Gandhi, 61 years old, reached Dandi after walking 241 miles in 24 days. He then defied the law by making salt. It was a brilliant, non – violent strategy by Gandhi. To enforce the law of the land, the British had to arrest the satyagrahis (soldiers of civil disobedience) and Indians courted arrest in millions. There was panic in the administration and Indian freedom struggle finally gathered momentum both inside and outside of India. [5 x 1 = 5]

#### Fill in the blanks.

- Gandhiji walked \_\_\_\_\_ miles to reach Dandi.
  - He was \_\_\_\_\_ years old at that time.
  - He defied the law by \_\_\_\_\_ salt.
  - This was a \_\_\_\_\_ strategy by Gandhi.
  - The soldiers of civil disobedience were called \_\_\_\_\_.
- II. Have you ever been on a boat ? A ferry may be ? Or have you ever crossed a water body while travelling ? Where were you going ? How was the journey ? What did you enjoy most about it ? Describe the boat. Talk about it with your partner. [3M]

### Reading

- A. Answer the following. [2 x 1 = 2M]
- Why was Gandhiji called 'the father of the nation' ?
  - Did Gandhiji use weapons for India's freedom ?

**B. Complete the following sentences.**

[2 x 1 = 2M]

1. California was just twenty miles away, but

.....

2. Everyone thought that the Titanic could never sink. Hence they called it.

.....

**Writing**

**Read the following sentences. Now rearrange them in the correct order to make a story. Then elaborate each sentence to complete the story.**

[5 x 1 = 5]

1. The dog reached a stream.
2. A dog grabbed a bone and ran off.
3. There was a bridge over the stream.
4. The dog saw its reflection.
5. The bone drowned in the river.

**Grammar**

**Complete the sentences given below by filling the blanks with past tenses of the words given in brackets.**

[4 x 1 = 4]

1. Raj \_\_\_\_\_ (wake) up at seven in the morning yesterday.
2. He \_\_\_\_\_ (walk) to the bus stop.
3. He \_\_\_\_\_ (board) the school bus.
4. He \_\_\_\_\_ (play) with his friends in the evening.

**Vocabulary**

**Give one word for the sentences given below.**

[4 x 1 = 4]

1. To go down under water \_\_\_\_\_
2. Small boats carries on a ship to rescue passengers at the time of emergency \_\_\_\_\_
3. The floors of a ship \_\_\_\_\_
4. Group of people who work on a ship or an aeroplane together \_\_\_\_\_

★ ★ ★ ★

C - 18  
Lotus  
SEMESTERS

# FORMATIVE ASSESSMENT - III

## Lotus Rainbow SEMESTER BOOK

Syllabus :  
(Lesson : 1)  
Pg. No.s 39 – 42

Class - 4 :: GRAMMAR : SEMESTER - II

Time : 1 Hour

Max. Marks : 25

25

Name : \_\_\_\_\_ Class : \_\_\_\_\_ Section : \_\_\_\_\_ Roll No. \_\_\_\_\_

A. Write the sentences in the correct order. [7 x 1 = 7]

1. Sandra / dinner / cooked / last night / . / for / chicken

\_\_\_\_\_

2. cleaned / . / we / yesterday / the classroom

\_\_\_\_\_

3. I / teeth / my / brushed / . / last night

\_\_\_\_\_

4. My / washed / mother / . / dishes / the / yesterday

\_\_\_\_\_

5. mountain / climbed / He / a / Sunday / last / .

\_\_\_\_\_

6. went / on / we / a / picnic / . / Friday / last

\_\_\_\_\_

7. us / . / taught / she / English

\_\_\_\_\_

B. Write the past form of verbs in the correct box. [8 x 1 = 8]

read	wash	phone	teach	cook	live	sleep
study	dance	try	love	open	fry	see
cry	go	swim	run	paint	eat	

-ed

-d

-ied

irregular

C. Circle the correct words.

[5 x 1 = 5]

1. We (washes / washed) the car yesterday.
2. My mother (cleaned / cleaning) the house last weekend.
3. He (is climbing / climbed) a tree yesterday.
4. Mr. and Mrs. Perkins (was danced / danced) last Sunday.
5. I (washed / wash) my dog yesterday.

D. Look at the pictures and make sentences. Add -d, -ed or -ied to the verbs.

[5 x 1 = 5]



I / dance / last night / .

---



she / clean / . / window / the / yesterday

---



They / walk / park / . / last Saturday / in the

---



We / visit / . / Jack / yesterday

---



He / study / . / last weekend / English

---

★ ★ ★ ★

C - 18  
Lotus  
SEMESTERS

# FORMATIVE ASSESSMENT - III

## Lotus Rainbow SEMESTER BOOK

Syllabus:  
(1 - 3 Units)  
Pg. No.s 57 - 98

Class - 4 :: MATHEMATICS : SEMESTER - II

Time : 1 Hour

Max. Marks : 25

25

Name : \_\_\_\_\_ Class : \_\_\_\_\_ Section : \_\_\_\_\_ Roll No. \_\_\_\_\_

A. Write the following time in numbers.

[3 x 1 = 3]

1. Quarter to one \_\_\_\_\_
2. Half past six \_\_\_\_\_
3. Quarter past eleven \_\_\_\_\_

B. Estimate the sum by rounding each number to the nearest ten.

[3 x 1 = 3]

1.  $169 + 529 =$  \_\_\_\_\_
2.  $753 + 814 =$  \_\_\_\_\_
3.  $914 + 521 =$  \_\_\_\_\_

C. Write the weights after examining the pictures carefully.

[6 x 1 = 6]

1. 2 packets of milk \_\_\_\_\_
2. 1 bottle of honey \_\_\_\_\_
3. 5 bars of chocolate \_\_\_\_\_
4. 4 packets of sugar \_\_\_\_\_
5. 1 packet of tea \_\_\_\_\_
6. 2 packets of salt \_\_\_\_\_



250 g



500 g



350 g



40 g



750 ml

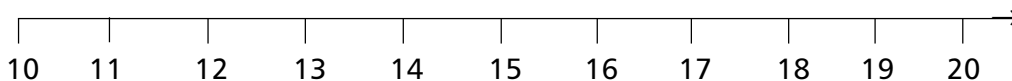


600 ml

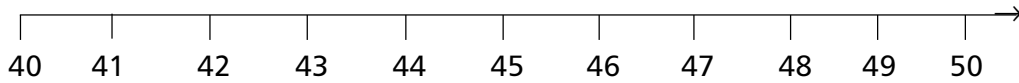
D. Using the number line, round the following numbers to nearest ten.

[3 x 1 = 3]

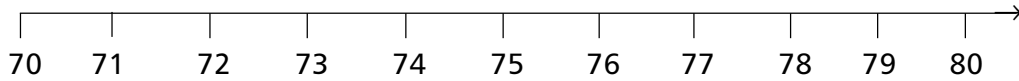
1. Is 15 nearer to 10 or 20 ? \_\_\_\_\_



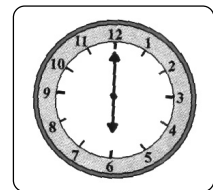
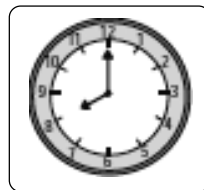
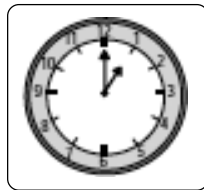
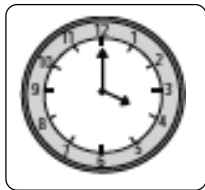
2. Is 44 nearer to 40 or 50 ? \_\_\_\_\_



3. Is 73 nearer to 70 or 80 ? \_\_\_\_\_



E. All the clocks below show the time in the afternoon or evening. Write the times below the clocks using 24 – hour time. [4 x 1 = 4]



Time is : \_\_\_\_\_ Time is : \_\_\_\_\_ Time is : \_\_\_\_\_ Time is : \_\_\_\_\_

F. Add the following.

[3 x 1 = 3]

1.            km m 25 105 + 22 203 <hr style="width: 100%;"/>	2.            l ml 21 + 2 237 <hr style="width: 100%;"/>	3.            kg g 3 400 + 2 132 <hr style="width: 100%;"/>
--	---	--

G. Solve the following.


[3 x 1 = 3]

1. 2 : 34 : 32 + 6 : 35 : 40 = \_\_\_\_\_
2. 4 : 52 : 12 + 3 : 24 : 29 = \_\_\_\_\_
3. 3 : 45 : 12 – 2 : 45 : 30 = \_\_\_\_\_

★ ★ ★ ★

C - 18  
Lotus  
SEMESTERS

**FORMATIVE ASSESSMENT - III**  
**Lotus Rainbow SEMESTER BOOK**



Syllabus:  
(Lessons : 1 & 2 )  
Pg. No.s 153 – 168

**Class - 4 :: SCIENCE : SEMESTER - II**

Time : 1 Hour

Max. Marks : 25

Name :	Class :	Section :	Roll No.
--------	---------	-----------	----------

**A. Short Answer Type Questions.**

[2 x 2 = 4]

1. Name four safety rules that you most follow on the road.
2. Write the features of a good house.

**B. Very Short Answer Type Questions.**

[2 x 1 = 2]

1. Why should phenyl be used while mopping the floor ?
2. What is the Caravan house made up ?

**C. Fill in the blanks with suitable words given below.**

[4 x 1 = 4]

Minor anti-tetanus flooded stilt

1. In case of \_\_\_\_\_ burns, hold the burnt part under running water.
2. Garbage should be thrown only in a \_\_\_\_\_
3. Houses made on wooden poles in areas that are often deluged are called \_\_\_\_\_ houses.
4. If a wound is due to a dirty or rusted object, we may need an \_\_\_\_\_ injection.

**D. Write 'T' for true statements and 'F' for false statements.**

[5 x 1 = 5]

1. A pucca house is very strong.
2. A good house must have atleast five doors.
3. If clothes catch fire, we should stop, drop and roll.
4. All medicines should be kept within easy reach of children.
5. Cuts and wounds should be washed properly with water.

**E. Tick ( ✓ ) the correct answers.**

[5 x 1 = 5]

1. Stilt houses are also called

a) caravan

b) caves

c) cottages

d) pile dwelling

2. Which statement is not correct in case you catch fire ?

- a) Run as fast as you can.
- b) Stop and cover your face with your hands.
- c) Drop to the ground.

3. Which statement is not correct ?

- a) Prevention is better than cure.
- b) Do not put fingers into electrical Sockets.
- c) Cut off the electric supply in case of an electric shock hurting a person.

4. Which statement is not correct, in case someone else catch fire ?

- a) Roll him / her in a blanket till the flames are put out.
- b) Do not pour water.
- c) Pour water over the person.

5. A pucca house is made up of

- a) cement  b) mud
- c) brick  d) Both (a) and (c)

F. Match the following columns.

[5 x 1 = 5]

Column - A

Column - B

- |                |  |
|----------------|--|
| 1. Igloo       | a) soldiers                              |
| 2. Tent        | b) tourists                              |
| 3. Caravan     | c) persons living in flood – prone areas |
| 4. Houseboat   | d) nomads                                |
| 5. Stilt house | e) eskimos                               |

★ ★ ★ ★



C - 18  
Lotus  
SEMESTERS

**FORMATIVE ASSESSMENT - III**  
**Lotus Rainbow SEMESTER BOOK**

Syllabus:  
(Lessons : 1 - 4 )  
Pg. No.s 209 – 232

**Class - 4 :: SOCIAL STUDIES : SEMESTER - II**

Time : 1 Hour

Max. Marks : 25

25

Name :	Class :	Section :	Roll No.
--------	---------	-----------	----------

**A. Define :** [4 x 1 = 4]

1. Poverty
2. Hydroelectricity
3. Irrigation
4. Marshy Forest

**B. Answer the following questions.** [3 x 2 = 6]

1. What do you mean by wild life ? What steps has our government taken to protect wild animals ?
2. Which is the oldest means of irrigation ? In which states do the people use this ?
3. How is coal formed ? Write any three uses of coal.

**C. Fill in the blanks with suitable words given below.** [4 x 1 = 4]

Coal    Odisha    bauxite    Green

1. \_\_\_\_\_ is also known as black diamond.
2. Aluminium is produced from \_\_\_\_\_
3. Chilika Lake Bird Sanctuary is in the state of \_\_\_\_\_
4. \_\_\_\_\_ revolution is the bright example of our agricultural development.

**D. Write 'T' for true and 'F' for false statements.** [3 x 1 = 3]

1. Population has a link with poverty in our country.
2. Indian farmers extremely depend on rain for agriculture.
3. Deciduous forests are also called Monsoon forests.

**E. Tick ( ✓ ) the correct option.**

**[3 x 1 = 3]**

1. Van Mahotsav is celebrated every year in the beginning of \_\_\_\_\_  
1) Rainy season     ii) Winter season     iii) Spring season
2. Dams help in controlling.  
i) Earthquake     ii) Volcanic irruption     iii) Flood
3. Which country has the largest cattle in the world ?  
i) India     ii) Pakistan     iii) U.S.A.

**F. Match the following.**

**[5 x 1 = 5]**

- | A                         | B                    |
|---------------------------|----------------------|
| 1. Mineral oil            | i) CNG               |
| 2. Coal                   | ii) Ankleshwar       |
| 3. Sun                    | iii) Liquid gold     |
| 4. Compressed Natural Gas | iv) Renewable source |
| 5. Oil field              | v) Black diamond     |

★ ★ ★ ★

C - 18  
Lotus  
SEMESTERS

**FORMATIVE ASSESSMENT - III**  
**Lotus Rainbow SEMESTER BOOK**  
**Class - 4 :: GENERAL KNOWLEDGE :**  
**SEMESTER - II**

25

Syllabus :  
(1 & 2 (a, b) Chapters)  
Pg. No.s 287 – 295

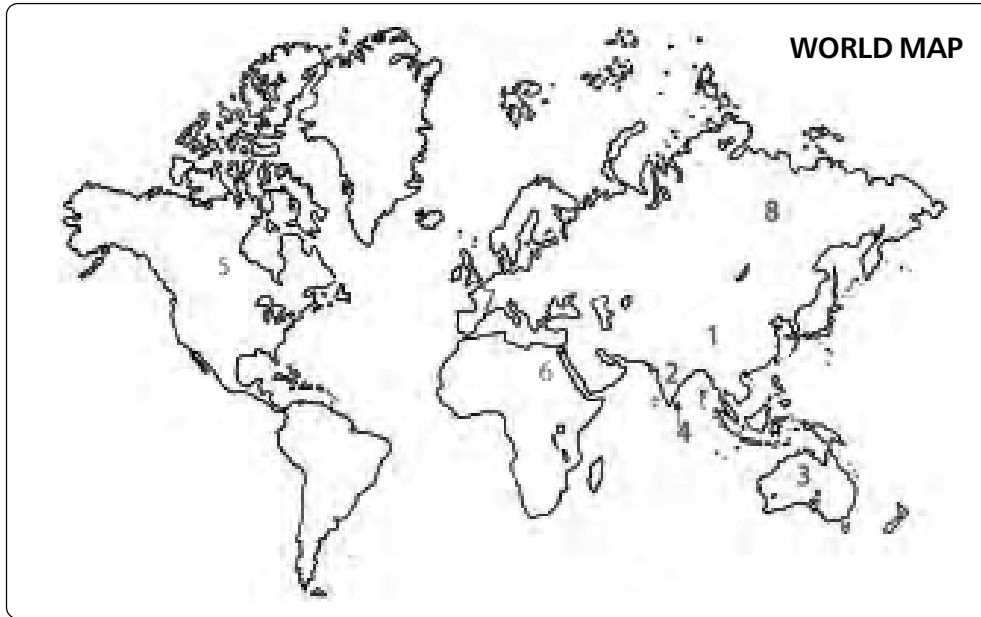
Time : 1 Hour

Max. Marks : 25

Name : \_\_\_\_\_ Class : \_\_\_\_\_ Section : \_\_\_\_\_ Roll No. \_\_\_\_\_

I. Look at the world Map and Name the countries.

[8 x 1 = 8]



1. \_\_\_\_\_

5. \_\_\_\_\_

2. \_\_\_\_\_

6. \_\_\_\_\_

3. \_\_\_\_\_


7. \_\_\_\_\_

4. \_\_\_\_\_

8. \_\_\_\_\_

II. Name the countries to which the following flags belong.

[3 x 1 = 3]



1. \_\_\_\_\_

2. \_\_\_\_\_

3. \_\_\_\_\_

**III. Answer the questions.**

[4 x 1 = 4]

1. The hair and nail are made of \_\_\_\_\_
2. Each finger in our hands has \_\_\_\_\_
3. The only muscle in the Human body that does not rest in its life time is \_\_\_\_\_
4. The Adam's apple found in the \_\_\_\_\_

Take My Help :

Eye, Keratin, Liver, No muscle, Stirrup, Throat, Enamel,  
525, Brain, Heart, Thigh

**IV. Match the following.**

[5 x 1 = 5]

- |                     |        |               |
|---------------------|--------|---------------|
| 1. Voltage          | [    ] | a) Pyrometer  |
| 2. Purity of milk   | [    ] | b) Optometer  |
| 3. High temperature | [    ] | c) Anemometer |
| 4. Eye sight        | [    ] | d) Lactometer |
| 5. Speed of wind    | [    ] | e) Voltmeter  |

**V. Fill in the blanks.**

[5 x 1 = 5]

1. \_\_\_\_\_ is god of the underworld in Roman mythology.
2. The planet closet to the earth is \_\_\_\_\_
3. The second largest planet is \_\_\_\_\_
4. The planet blue in colour is \_\_\_\_\_
5. The planet closest to the sun is \_\_\_\_\_

Jupiter      Venus      Mars      Mercury      Neptune

★ ★ ★ ★