

C - 18
Lotus
SEMESTERS

FORMATIVE ASSESSMENT - IV

Lotus Rainbow SEMESTER BOOK

Syllabus :
(Lessons : 3 & 4)
Pg. No.s 15 – 27

Class - 4 :: ENGLISH : SEMESTER - II

Time : 1 Hour

Max. Marks : 25

25

Name :	Class :	Section :	Roll No.
--------	---------	-----------	----------

Listening

- I. The Great Wall of China is a series of stone and earthen fortifications in northern China, built to protect the northern borders of the Chinese Empire. Several walls have been built since the 5th century BC in China that are referred to collectively as the Great Wall. Majority of the existing wall was built during the Ming Dynasty.

While some portions north of Beijing and other tourist centres have been preserved and even extensively renovated, in many locations the wall is in ruins. Sections of the wall have also been destroyed. It is China's biggest and most popular tourist attraction. The length of the wall was over 6,000 kilometres.

Answer the following questions.

[6 × 1 = 6M]

1. It is China's biggest and most popular _____ attraction.
2. The passage is about the Great Wall of _____.
3. The Great Wall of China is a series of stone and earthen fortifications in southern Japan.
Correct the sentence. Say what is wrong with it.
4. What is the approximate length of the Great Wall of China ?
5. Several walls have been built since the 5th century BC - true or false ?
6. Majority of the existing wall was built during the _____ Dynasty.

Reading

Answer the following questions.

[4 × 1 = 4 M]

1. According to you, what kind of person was Sinbad ?
2. Why was Kabuliwala arrested ?
3. Where did Sinbad live ? Describe the surroundings.
4. What did Mini's father do after seeing the handprints of the Kabuliwala's daughter ?

Writing

Imagine you were a wizard. What are the six magical things that you would like to do ? [4 M]

Grammar

Change the sentences into questions. Begin each question with do / does

[7 x 1 = 7 M]

1. Praveen teaches well. _____
2. He is hard working. _____
3. You know him. _____
4. The driver drives carefully. _____
5. The strawberry is sweet. _____
6. The dog barked at strangers. _____
7. The Moon rotates round the Earth. _____

Vocabulary

Use the following verbs (believe, fill, get, look, put, switch, take, throw, turn, try) and the prepositions (away, down, for, in, off, on, out) and form meaningful sentences. [4 x 1 = 4 M]

1. The firemen were able to _____ the fire.
2. It's so noisy here. Can you _____ the TV ?
3. Does your little sister _____ demons ?
4. It's warm inside _____ your socks.

★ ★ ★ ★


Name : _____ **Class :** _____ **Section :** _____ **Roll No.** _____

A. Look at the pictures and write the answers.

[6 x 1 = 6 M]



1. Did you play basketball ?



2. Did they watch TV ?



3. Did the baby cry ?



4. Did he call his friend ?



5. Did your mother cook dinner ?



6. Did the dog run ?

B. Circle the wrong words and correct them.

[3 x 1 = 3 M]

1. It's rainy. Her needs an umbrella.

2. This is Evan. Do you know his ?

3. We want cakes. Please, bring we cakes.

C. Write an interrogative (question) sentence. Then, write a negative sentence.

[4 x 1 = 4 M]

1. She washed her clothes last night.

2. He visited his uncle last weekend.

3. The dog played in the garden.
4. Mary and her sister painted the house.

D. Put the object pronouns in the blanks.

[4 x 1 = 4 M]

1. Look at _____ ! They are playing baseball.
2. Here are the pencils. Put _____ in your pencil case.
3. This is Sally's bike. Do you like _____ ?
4. We want some ice-cream. Please bring _____ some ice-cream.

E. Put a tick to the right sentence.

[4 x 1 = 4 M]



1. – Look at us! We are friends.
- Look at we ! We are strong.



2. – Look at it ! It has milk.
- Look at us ! We have toys.



3. – Look at they ! They're playing.
- Look at them ! They're playing.



4. – Look at it ! It is sleeping.
- Look at them ! They're lions.

F. Change the words to object pronouns.

[4 x 1 = 4 M]

1. Grandmother is in the hospital.

I should visit _____.

(she)

3. He doesn't know _____.

(I)

But, I know _____.

(he)

2. Mr. Park is a good teacher.

He is teaching _____ English.


(we)

4. Children, where are you ?

I can't find _____.

(you)

★ ★ ★ ★



Name : _____ **Class :** _____ **Section :** _____ **Roll No.** _____

I. Solve the given word problems.

[3 x 2 = 6 M]

1. A flower garden measures 20m in length and 15m in width. What is the area of the garden ?
2. Find the area of a square field whose side measures 35m.
3. A table cloth is 225 cm long and 95 cm wide. How long is the lace needed to put as an edging for the table cloth ?

II. Complete the list and describe the pattern !

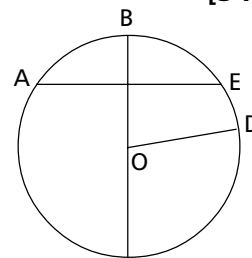
[5 x 1 = 5 M]

1. 30, 55, —, —, 130, 155, What is the pattern ? _____
2. 80, 90, —, —, 120, 130, What is the pattern ? _____
3. —, —, 120, 145, 170, 195, What is the pattern ? _____
4. 40, 60, —, —, 120, 140, What is the pattern ? _____
5. —, 55, 80, 105, 130, What is the pattern ? _____

III. Answer the following.

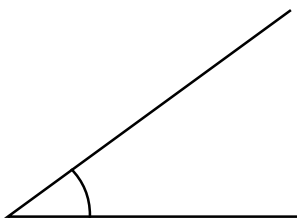
[3 x 1 = 3 M]


1. What is the centre of the circle. _____
2. Name the diameter of the circle. _____
3. Name the radii of the circle. _____

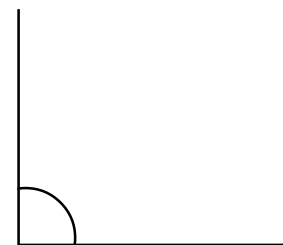


IV. Label each angle is Right, obtuse or Acute.

[3 x 1 = 3 M]

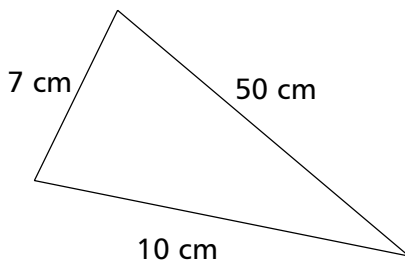




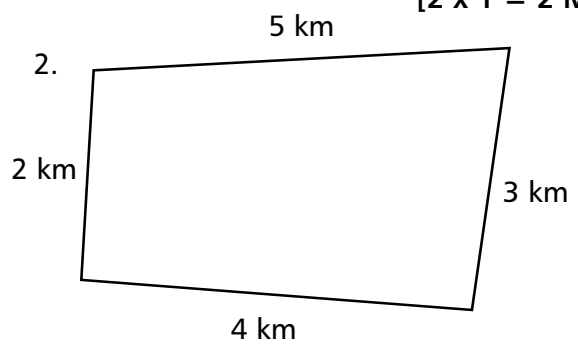


V. Find the perimeter of each shape by adding the lengths of each side. Be sure to include the units in you answer. [2 x 1 = 2 M]

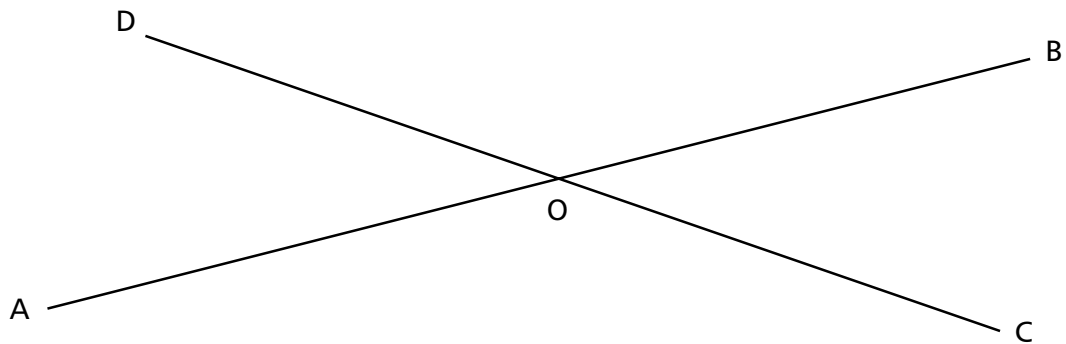
1.



2.



VI. In the given figure, two lines AB and CD pass through a common point O. Name all the lines formed. [3 M]



VII. Find the area of rectangles and complete the table. [3 x 1 = 3 M]

No.	Length	Breadth	Area
1.	7 cm	4 cm	
2.	13 cm	11 cm	
3.	3 cm	2m	

★★★★

C - 18
Lotus
SEMESTERS

FORMATIVE ASSESSMENT - IV
Lotus Rainbow SEMESTER BOOK
Class - 4 :: SCIENCE : SEMESTER - II

25

Syllabus:
(Lessons : 3 - 5)
Pg. No.s 169 – 192

Time : 1 Hour

Max. Marks : 25

Name :	Class :	Section :	Roll No.
--------	---------	-----------	----------

A. Short Answer Type Questions. [2 x 2 = 4 M]

1. What is force ? Why is it necessary ?
2. What are the common properties of matter ?

B. Very Short Answer Type Questions. [4 x 1 = 4 M]

1. On heating, it gives purple fumes.
2. Define water table.
3. The ability to do work.
4. What is storm ?

C. Fill in the blanks with suitable words given below. [4 x 1 = 4 M]

sea breeze lever buoyancy regular

1. Wind blowing from sea towards land is called _____.
2. Particles are arranged in a _____ pattern in solid.
3. Scissors are an example of a _____.
4. Ship floats on water due to _____.

D. Write 'T' for true statement & 'F' for false statement. [6 x 1 = 6 M]

1. All machines are levers.
2. Sublimation is a process of changing solid directly into liquid.
3. When our sweat evaporates, we feel sticky and uncomfortable.
4. Molecules of gas are not scattered.
5. Work will be done only if force is applied.
6. The amount of water vapour present in the air is called dew.

E. Tick (✓) the correct answers.

[7x 1 = 7 M]

1. The process of change of solid directly into gas is called

- a) evaporation b) condensation
c) Sublimation d) melting

2. What are the sources of energy ?

- a) water b) sun and wind
c) All of these

3. Which one of the following is called a light and swift blow ?

- a) wind storm b) thunderstorm
c) breeze d) None of these

4. Select the correct statement.

- a) Molecules in gas are linked with one another.
b) Molecules in gas are scattered.
c) Molecules are close in a gas.
d) All of the above.

5. Solution of water and milk is a

- a) solid-liquid solution b) liquid – liquid solution
c) liquid – gas d) None of these

6. What are the forms of energy ?

- a) Heat, light
b) Electrical, magnetic and sound energy
c) All of these

7. Which state of matter does not flow freely ?

- a) Solid b) Liquid
c) Gas d) Liquid and gas

★ ★ ★ ★

C - 18
Lotus
SEMESTERS

FORMATIVE ASSESSMENT - IV
Lotus Rainbow SEMESTER BOOK

Syllabus:
(Lessons : 5 - 9)
Pg. No.s 233 – 268

Class - 4 :: SOCIAL STUDIES : SEMESTER - II

Time : 1 Hour

Max. Marks : 25

25

Name :	Class :	Section :	Roll No.
--------	---------	-----------	----------

A. Define : [4 x 1 = 4 M]

1. Epic
2. Heritage
3. ISD
4. Industry

B. Answer the following questions. [3 x 2 = 6 M]

1. Write the names of some important seaports and airports of India.
2. How is post office helpful to us ?
3. What are the common teachings of Buddhism and Jainism ?

C. Fill in the blanks with suitable words given below. [3 x 1 = 3 M]

hymns Textile Mumbai

1. _____ is the largest seaport in India.
2. Guru Granth sahib contains a collection of _____.
3. _____ industries are the oldest and largest industries in India.

D. Write 'T' for true and 'F' for false statements. [3 x 1 = 3 M]

1. Rajdhani Express is the slowest train in India.
2. India has the largest postal service in the world.
3. Raja Ram Mohan Roy wrote many articles to enlighten the people of the social evils existing in the society.

E. Tick (✓) the correct option.

[4 x 1 = 4 M]

1. Who among the following fought against sati ?

- i) Sir Syed Ahmad Khan ii) Raja Ram Mohan Roy
iii) Akbar

2. Ghoomar is a popular folk dance of

- i) Gujarat ii) Rajasthan iii) Assam

3. The oldest and largest industries of India are the _____ industries.

- i) Iron & steel ii) Automobile iii) Textile

4. The development of the means of transport has _____ among countries.

- i) Increased distance ii) Decreased distance
iii) Same distance

F. Match the following.

[5 x 1 = 5 M]

A

B

- | | |
|------------------------|-----------------------|
| 1. Hindi | i) Maharashtra |
| 2. Bhangra | ii) Devanagari Script |
| 3. Lavani | iii) Punjab |
| 4. Yakshaganam | iv) Tabla |
| 5. Ustad Zakir Hussain | v) Karnataka |

★ ★ ★ ★

C - 18
Lotus
SEMESTERS

FORMATIVE ASSESSMENT - IV
Lotus Rainbow SEMESTER BOOK
Class - 4 :: GENERAL KNOWLEDGE :
SEMESTER - II

25

Syllabus:
(2 (c, d) & 3 (a - f)
Chapters)
Pg. No.s 296 – 305

Time : 1 Hour

Max. Marks : 25

Name : _____ **Class :** _____ **Section :** _____ **Roll No.** _____

I. Choose the correct answer.

[6 x 1 = 6 M]

1. This place is known as 'The Paradise on Earth'.

i) Kerala ii) Punjab iii) Kashmir

2. This state is known as 'the granary of India'.

i) Kerala ii) Gujarat iii) Punjab

3. State where the famous pushkar fair is held every year.

i) Karnataka ii) Rajasthan iii) Gujarat

4. State whose name means 'The Abode of Clouds'.

i) Mizoram ii) Assam iii) Meghalaya

5. The city is known as 'the pink city of India'.

i) Hyderabad ii) Bangalore iii) Jaipur

6. These islands are known as 'Kalapani'.

i) Lakshadweep ii) Andaman and Nicobar iii) Srilanka

II. Answer the following questions.

[4 x 1 = 4 M]

1. Which state is famous for sandal wood carving ?

2. Bidar in Karnataka is famous for a special craft. It is known as

3. The 'Venkatagiri', 'Narayanpet and 'Pochampalli' sarees are named after the respective towns. Name the state.

4. The Ajanta caves are known for their paintings. Why are the Ellora caves famous.

Sculptures	Andhra pradesh
Bidriware	Karnataka

III. Match the following.

[6 x 1 = 6 M]

- | | |
|---------------|-------------|
| 1. Agra | a. Krishna |
| 2. Cuttack | b. Tapti |
| 3. Nasik | c. Godavari |
| 4. Surat | d. Hoogly |
| 5. Vijayawada | e. Mahanadi |
| 6. Kolkata | f. Yamuna |

1) Andhra Pradesh	<input type="checkbox"/>	4) West Bengal	<input type="checkbox"/>
2) Uttar Pradesh	<input type="checkbox"/>	5) Gujarat	<input type="checkbox"/>
3) Odisha	<input type="checkbox"/>	6) Maharashtra	<input type="checkbox"/>

IV. Here are some important Indian Superlatives. Name them.

[4 x 1 = 4 M]



- The Largest desert
- The Largest Mosque
- The Highest Minar
- The Largest Statue

Gomateswar,	Qutub Minar,
Jama Masjid,	Thar

V. Fill in the boxes with the names of festivals. Take the help of 'clues'.

[5 x 1 = 5]

- Lamps and Crackers. _____
- A boat race in the back waters. _____
- These are birthdays. _____
- All these are new years. _____
- A beautifully decorated tree. _____

Christmas	Gandhi Jayanthi	Raksha Bandhan	
Take My Help : Ugadi	Krishna Jayanthi	Gurupurb	Id-ul-Fitar
Navroz	Teej	Onam	

★ ★ ★ ★