


C - 18
Lotus Rainbow
Semesters

FORMATIVE ASSESSMENT - III

Lotus Rainbow Semester Book



Syllabus:
(1 & 2 Lessons)
(Pg. No.s : 3 – 17)

Class - 5 :: English : SEMESTER - II

Time : 1 Hour

Max.Marks: 25

Name :

Section :

Roll No.

Listening and Speaking

- I. Helen Adams Keller (June 27, 1880 – June 1, 1968) was an American author, political activist, and lecturer. She was the first deaf and blind person to earn a Bachelor of Arts degree. The story of how Keller's teacher, Anne Sullivan, broke touched the deaf and blind girl's heart and helped her to communicate, has become widely known through the and film The Miracle Worker.

Helen Keller was not born blind and deaf; it was not until she was 19 months old that she had an illness, which might have been scarlet fever or meningitis. The illness did not last for a particularly long time, but it left her deaf and blind. At that time, she was able to communicate somewhat with Martha Washington, the six – year – old daughter of the family cook, who understood her signs; by the age of seven, she had over 60 home signs to communicate with her family.

Re – write the paragraph in your own words.

[4M]

- II. Write about your favourite outdoor game. Explain in detail about how it is played, how many players are required, what sort of discipline does it require, what are the rules and the equipment required to play.

[3M]

Reading

Answer the following questions.

[4 x 1 = 4M]

1. What was Captain Hook afraid of and why ?
2. Why was Peter crying ? How did Wendy help him ?
3. How did Wendy and the others begin to miss their home ?
4. How did Wendy meet Peter for the first time ?

Writing

Draft a complaint letter to the owner of a shop complaining against a bad product which was sold to you. Remember to : **[5M]**

1. Describe the purchase you made.
2. Include the name of product and the serial number.
3. Include the date and place of purchase.
4. State the problem with the product.
5. Give the history of the problem.
6. Ask for specification.
7. Allow time for action.
8. Provide details on how you can be reached.

Grammar

Write questions in present perfect simple tense. **[5 x 1 = 5]**

1. you / see / the picture
2. how many books / Bob / read
3. Water / call / us
4. it / rain / a lot
5. Jenny / lock / the door

Vocabulary

Following are some words. Use them in sentences of your own.

[4 x 1 = 4]

1. Alacrity : _____

2. Anticipation : _____

3. Absorbing interest : _____

4. Dilapidated : _____

★ ★ ★ ★ ★

Name :

Section :

Roll No.

I. Fill in the blanks with may or may not.

[5 x 1 = 5]



1. _____ I have some apple juice ?

I'm sorry. We don't have any apple juice.



2. Mom, _____ I go over there ?

Yes, you _____ .



3. _____ I drive the car, Dad ?

No, you _____. You're too young !

II. Fill in the blanks with helping verbs from the table.

[5 x 2 = 10]

can can't may shouldn't may not should

1. You _____ watch this movie. I really enjoyed it.

2. "You _____ go to Sarah's house until you clean your bedroom!" said Dad.


3. He _____ play baseball, but he can't snowboard.

4. Mom, _____ I have some chocolate ? No, you may not.

5. You _____ run near the swimming pool. It's dangerous !

III. Make sentences using can or can't.

[5 x 2 = 10]



1. _____
2. _____
3. _____
4. _____
5. _____

★ ★ ★ ★ ★

Name :

Section :

Roll No.

I. Solve the following word problems.

[3 x 2 = 6]

1. Jack purchased a refrigerator for ₹ 8,000. He had to sell it at a loss of 10 %. What was the original selling price ?
2. There are 36 carpenters in a row on a certain day, 29 were present. What percent of workers were present ?
3. A shopkeeper sells a TV set for ₹ 12,000. The cost of the set was ₹ 10,000. What is his percent profit or loss ?

II. Harsh borrowed ₹ 20,600 from a bank at 8% Rate of interest. How much interest will he pay in 2 years ?

[2M]

III. Find the values of.

[4 x 1 = 4]

1. 87% of 105 - _____
2. 15% of 60 - _____
3. 125% of 60 - _____
4. 29% of ₹ 236 - _____

IV. Find the table given below :

[6 x 1/2 = 3]

Item	Cost Price (CP)	Selling Price (SP)	Profit / Loss	Profit / Loss in Rupees
1. A box of sweets	₹ 75	₹ 87		
2. School bag	₹ 380	₹ 410		
3. Chart Paper	₹ 10	₹ 8		
4. Cake	₹ 450	₹ 520		
5. Pencil Box	₹ 40	₹ 37		
6. Dress	₹ 970	₹ 1,000		

V. Express the following decimals as percent.

[3 x 1 = 3]

1. 12.73 - _____

2. 0.008 - _____

3. 2.79 - _____

VI. Fill in the blanks.

[5 x 1 = 5]

Sr. No.	Principal (P)	Rate %(R)	Time (T)	Simple Interest (S.I.)	Amount (A)
1.	₹ 3,000	10%	1		
2.	₹ 5,000	8%	2		
3.	₹ 3,200	4%	1		
4.	₹ 6,000	5%	3		
5.	₹ 4,800	6%	4		

VII. Express the following fractions as percentage.

[2 x 1 = 2]

1. $\frac{9}{25}$ - _____

2. $5\frac{1}{4}$ - _____

★ ★ ★ ★ ★

Name :

Section :

Roll No.

A. Short Answer Type Questions.

[2 x 2 = 4]

1. Name six simple machines. Give examples of each one of them.
2. What is a mixture ? Name two types of mixture.

B. Very Short Answer Type Questions.

[2 x 1 = 2]

1. What are metallic minerals ?
2. What is wedge ?

C. Fill in the blanks with suitable words given below.

[4 x 1 = 4]

screw sedimentary third solvent

1. Ice tongs are an example of _____ class lever.
2. The _____ is the substance in which the solute gets dissolved.
3. Sandstone is a _____ rock.
4. A _____ is used to hold things together.

D. Write 'T' for true and 'F' for false statements.

[5 x 1 = 5]

1. Gases have fixed shape and volume.
2. Coal and petroleum are metallic minerals.
3. A simple machine uses a single force.
4. Milk is miscible in water, but oil is not.
5. A ramp is an example of an inclined plane.

E. Tick (✓) the correct answer.

[5 x 1 = 5]

1. A car jack is used to _____ the vehicle.
- a) lift b) lower
c) move d) none of these
2. What are different types of soil ?
- a) Alluvial soil b) Red soil
c) Black soil d) All of these
3. What are different types of rock ?
- a) Sedimentary rock b) Metamorphic rock
c) Igneous d) All of these
4. _____ are the building blocks of matter.
- a) atoms b) solids
c) molecules d) liquids
5. The inter – molecular spaces in the gases are _____.
- a) smallest b) largest
c) medium d) none of these

F. Match the following columns.


[5 x 1 = 5]

- | Column - A | | Column - B |
|-------------------|--------|-------------------------------------|
| 1. Solute | () | a) water, milk, kerosene |
| 2. Solid | () | b) which dissolves something in it |
| 3. Solvent | () | c) oxygen, carbon dioxide |
| 4. Liquid | () | d) wood, glass, plastic |
| 5. Gas | () | e) that gets dissolved in something |

★ ★ ★ ★ ★

C - 18
Lotus Rainbow
Semesters

FORMATIVE ASSESSMENT - III
Lotus Rainbow SEMESTER BOOK



Syllabus:
(1 – 4 Lessons)
(Pg. No.s : 219 – 246)

Class - 5 :: Social Studies : SEMESTER - II

Time : 1 Hour

Max.Marks: 25

Name :

Section :

Roll No.

A. Define :

[2 x 1 = 2]

1. Charity
2. Drill

B. Answer the following questions.

[3 x 2 = 6]

1. What led to the World Wars ?
2. What is industrial revolution ?
3. How is a thermometer used ?

C. Fill in the blanks with suitable words given below.

[4 x 1 = 4]

stones Galileo 10th December factory

1. Microscope was invented by _____
2. The owners of the _____ were called capitalists.
3. Early man used _____ as the main tool and weapon.
4. _____ is celebrated as the Human Rights Day every year.

D. Write 'T' for true and 'F' for false statements.

[4 x 1 = 4]

1. India was the member of UN when it was formed.
2. Electricity is not a form of energy.
3. Stethoscope was invented by Fahrenheit.
4. Abraham Lincoln was born to a very poor family.

E. Tick (✓) the correct option.

[4 x 1 = 4]

1. Socrates died by

a) Hanging

b) Murder

c) Hemlock

d) His own

2. First World War ended in

a) 1914

b) 1919

c) 1939

d) 1945

3. Thermometer was invented in

a) 1615

b) 1715

c) 1815

d) 1785

4. The steam engine was invented by

a) Daimler

b) James Watt

c) George Stephenson

d) Volta

F. Match the following.

[5 x 1 = 5]

A

B

1. Treaty of Versailles

()

i) 1939 – 1945

2. UN day

()

ii) 10th December

3. First World War

()

iii) 1919

4. Second World War

()

iv) 1914 – 1919

5. Human Rights Day

()

v) 24th October

★ ★ ★ ★ ★

C - 18
Lotus Rainbow
Semesters

FORMATIVE ASSESSMENT - III


Lotus Rainbow SEMESTER BOOK

Syllabus:
(Chapters-1,2(a-c))
(Pg. No.s : 295 – 301)

Class - 5:: General Knowledge : SEMESTER - II

Time : 1 Hour

Max. Marks: 25



Name :

Section :

Roll No.

I. Answer the following questions.

[5 x 1 = 5]

1. What is the Polar Circumference of the Earth ?

2. What is the average distance between the Earth and the Sun ?

3. What is the Equatorial diameter of the Earth ?

4. Name the highest land point on the Earth.

5. What is the period of rotation on polar axis ?

II. Read the description and name them.

[5 x 1 = 5]

1. He was the greatest Indian king. He was called Devanam

Priya and Priyadarsi. He is _____

2. He was a great Maratha Leader. He fought against the Mughal Emperor, Aurangzeb.

His name is _____

3. He was the founder of Mughal Empire in India.

He is _____

4. He attended the parliament of religions at Chicago in 1893.

He is _____

5. He founded the Brahma Samaj. He fought against the practice of Sati.

He is _____

Ashoka

Swami Vivekananda

Raja Ram Mohan Roy

Babur

Shivaji

III. Answer the following questions.

[5 x 1 = 5]

1. The pressure of air on the Earth's surface is roughly around _____
2. _____ exerts a pressure on us all the time.
3. _____ protects from the harmful rays of _____
4. The atmosphere is the band of _____
5. Air extends from the Earth's surface into _____

Ozone layer nitrogen sun, outer space
1 Kg / cm² Air

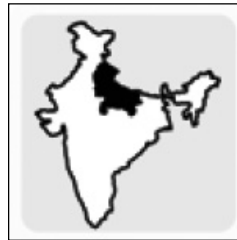
IV. Identify the State. Write the name of its capital and the language spoken.[2 x 3 = 6]



State

Capital

Language



State

Capital

Language

V. Name the period using the given information.

[4 x 1 = 4]

1. This age was regarded as Golden Age for Tamil literature in the ancient period. It is _____
2. This Empire flourished during the 4th century AD. It is _____
3. This Islamic Empire was founded by Babur. It is the _____
4. The people who produced the vedic literature were the builders of this civilization. It is _____

Mughal Empire Sangam Age Aryan Civilization
Gupta Empire

★ ★ ★ ★ ★