

Name :

Section :

Roll No.

Speaking

This is Preety's room. Write how she can look after her things and tidy up her room. [4M]



Reading

Answer the following questions.

[3 x 2 = 6]

1. Where was the city of Troy located ?

2. What advice did the weaver's wife give him ?

3. What clever trick did Odysseus play ?

Writing

We all have heard the famous story of Snow White and the Seven Dwarfs. Write a short scene from the story in the form of play, giving each character its own lines. [5M]

Grammar

Form contractions from the words given below. [10 x 1/2 = 5]

- | | |
|-----------------------|----------------------|
| 1. what is – _____ | 6. have not – _____ |
| 2. could not – _____ | 7. you are – _____ |
| 3. does not – _____ | 8. you would – _____ |
| 4. he is – _____ | 9. there is – _____ |
| 5. should not – _____ | 10. can not – _____ |

Vocabulary

Write the names of the places where these people work. [5 x 1 = 5]

1. Chef – _____
2. Professor – _____
3. Purser – _____
4. Postman – _____
5. Secretary – _____



Name :

Section :

Roll No.

I. Circle the correct forms.

[4 x 1 = 4]

1. I want (to buy / buying) some cheese at the supermarket.
2. He doesn't (like / likes) to play tennis.
3. I am learning to (skates / skate) in the park.
4. She promised (to wear / wearing) her new pink dress.

II. Look at the pictures and answer the questions.

[3 x 2 = 6]

1. Is she going to take a shower ?



2. Are they going to play baseball ?



3. Is he going to go swimming ?



III. Fill in the blanks with the right forms of the verbs.

[3 x 1 = 3]

1. We all _____ soccer yesterday. (to agree / to play)
2. He _____ mistakes on tests. (to hate / to make)
3. Do you _____ a new computer ? (to want / to buy)

IV. Complete the sentences using be going to.

[4 x 1 = 4]

1. Susan and I are in the library.
We _____ English. (study)

2. Sam and Mary are at the swimming pool.

They _____ in the pool. (swim)

3. Max's mother is making chicken.

Max _____ some chicken with her mother. (eat)

4. Paul's grandmother is in the hospital.

He _____ his grandmother. (visit)

V. Answer the questions.

[4 x 1 = 4]

1. What do you want to do in class today ?


2. What do you love to do ?

3. What does your father like to do ?

4. What do you want to do tomorrow ?

VI. Look at the picture. Match the parts of the sentences.

[4 x 1 = 4]




1. Mom likes () a) to race Sally.

2. The children love () b) to eat a hot dog.

3. John wants () c) to ride the horses.

4. Sam agreed () d) to go to the park.

★ ★ ★ ★ ★



Name :

Section :

Roll No.

I. Answer the following.

[2 x 2 = 4]

1. A truck travels a distance of 360 km in 2 hrs, calculate the speed of the truck in m/s.
2. John can type 960 words in 20 minutes. Calculate his typing speed in words per minute.

II. Given are measures of the angle, classify them as acute, obtuse, right, straight or reflex.

[3 x 1 = 3]

1. 119° – _____
2. 45° – _____
3. 193° – _____

III. Fill in the blanks.

[3 x 1 = 3]

1. In an obtuse triangle one angle measures _____ than 90° .
2. If volume is 70 cm^3 then capacity is _____
3. A scalene triangle has all sides of _____ length.

IV. Express each of the speeds in m/s.

[3 x 1 = 3]

1. 144 km / hr – _____
2. 70 km / hr – _____
3. 27 km / hr – _____

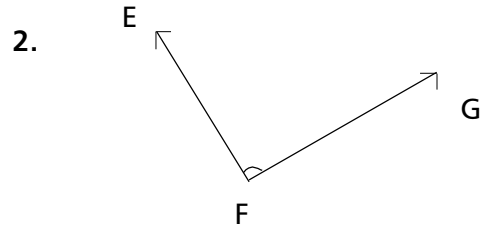
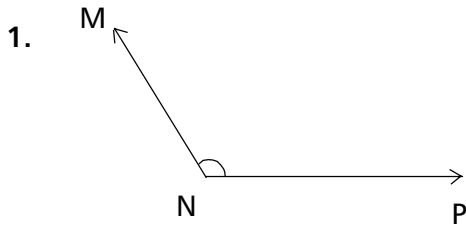
V. Find the area of the squares with given measurements.

[3 x 1 = 3]

1. side = 8 cm – _____
2. side = 5.5 cm – _____
3. side = 4 cm – _____

VI. Classify and measure the angles.

[2 x 1 = 2]



VII. Calculate the sum of angles of the following polygons.

[3 x 1 = 3]

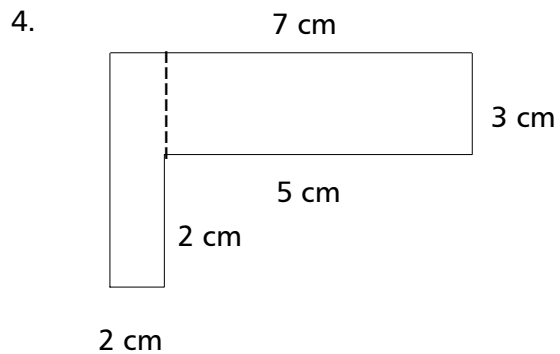
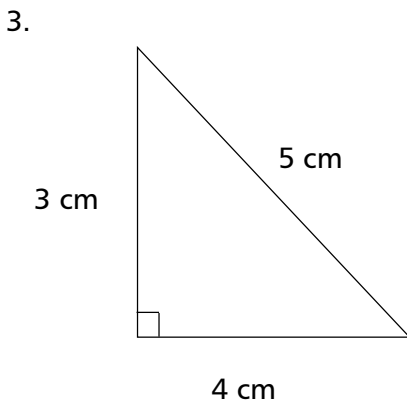
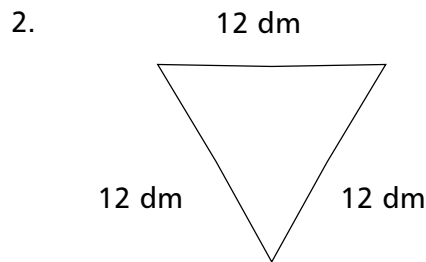
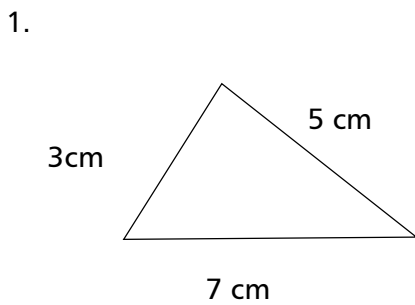
1. decagon – _____

3. quadrilateral – _____

2. hexagon – _____

VIII. Find the the perimeter of the following figures.

[4 x 1 = 4]



★ ★ ★ ★ ★

Name :

Section :

Roll No.

A. Short Answer Type Questions.

[2 x 2 = 4]

1. What are asteroids ?
2. What first aid should be given in case of a snake bite ?

B. Very Short Answer Type Questions.

[2 x 1 = 2]

1. What is Burnol ?
2. Define waxing and waning.

C. Fill in the blanks with suitable words given below.

[4 x 1 = 4]

27 milkmoon jupiter viruses

1. The other name of full moon when it appears in the month of may is _____.
2. The planet _____ has 62 satellites.
3. The saliva of dogs and cats contain _____.
4. The moon takes about _____ days to go around the earth.

D. Write 'T' for true and 'F' for false statements.

[5 x 1 = 5]

1. Mercury is the largest planet.
2. We should wash our hands before giving first-aid to an injured person.
3. Planets do not have their own light.
4. There is no atmosphere on the moon.
5. A lunar month is about 27 days.

E. Tick (✓) the correct answers.

[7 x 1 = 7]

1. Which planet is the nearest one to the sun ?

- | | | | |
|------------|--------------------------|------------|--------------------------|
| a) Mercury | <input type="checkbox"/> | b) Earth | <input type="checkbox"/> |
| c) Jupiter | <input type="checkbox"/> | d) Neptune | <input type="checkbox"/> |

2. Remember – at all times

- a) stay calm b) think before you do anything
c) look for an adult for help
d) All of the above

3. Which planet is the farthest one from the sun ?

- a) Venus b) Mars
c) Saturn d) Neptune

4. Which statement is correct in case of safety ?

- a) Be alert b) Be properly dressed
c) Avoid being over confident
d) Do not follow the safety rules impatiently

5. The second full moon occurring within a calendar month is the

- a) blue moon b) milk moon
c) snow moon d) hunter's moon

6. Which of the following has its own light ?

- a) Sun b) Moon
c) Venus d) None of these

7. The astronaut to go into space aboard Apollo 11

- a) Neil Armstrong b) Michael Collins
c) Edwin Aldrin d) All of these

F. Unscramble the following words.

[3 x 1 = 3]

1. DENTSACCI : _____
2. TURESFRAC : _____
3. DIFITSRA : _____

★ ★ ★ ★ ★

Name :

Section :

Roll No.

A. Define :

[2 x 1 = 2]

1. Trust Territories
2. Doctrine of Lapse

B. Answer the following questions.

[3 x 2 = 6]

1. Why did the Revolt of 1857 fail ?
2. Who were the founders of the Non-Aligned Movement ?
3. Who were known as 'Lal, Bal, Pal' ?

C. Fill in the blanks with suitable words given below.

[4 x 1 = 4]

15 Buxar Egypt birthright

1. G.A.Nasser was the president of _____.
2. Freedom is my _____ and I shall have it.
3. The Battle of _____ took place in 1764.
4. The ICJ consists of _____ judges.

D. Write 'T' for true and 'F' for false statements.

[4 x 1 = 4]

1. The USSR started the Non-Alignment Movement.
2. The Portuguese dealt in spices as it made meat Tastier.
3. Indian society during the British rule was backward.
4. The Security Council has 10 permanent members.

E. Tick (✓) the correct option.

[4 x 1 = 4]

1. The first session of the Indian National Congress was held in

a) Delhi

b) Bombay

c) Calcutta

d) Madras

2. The Secretary - General of the UN is elected for a period of

a) Two years

b) Five years

c) Six years

d) Ten years

3. The Battle of Plassey took place in

a) 1757

b) 1857

c) 1783

d) 1764

4. The USSR collapsed in

a) 1990

b) 1991

c) 1994

d) 1999

F. Match the following.

[5 x 1 = 5]

A

B

1. Apartheid

()

i) Indonesia

2. Mrs. Vijaya Lakshmi Pandit

()

ii) India

3. Dr. Sukarno

()

iii) South Africa

4. Peace Loving nation

()


iv) Panch sheel

5. Pt. Nehru

()

v) President of Generally Assembly

★ ★ ★ ★ ★



Name :

Section :

Roll No.

I. Write the names of the games with which the following cups and trophies are associated. [5 x 1 = 5]

1. Aga Khan Cup _____
2. Ezra Cup _____
3. DCM Trophy _____
4. Irani Trophy _____
5. Durand Cup _____

II. Answer the following. [5 x 1 = 5]

1. Who was the Vice – captain of the Indian team ?
A. _____
2. Who is the dancing bowler of the team ?
A. _____
3. Name any three young players who contributed to the sensation victory.
A. _____
4. 'Singh is King' – who does the king refer to ?
A. _____
5. Who did the Indian team defeat in the finals ?
A. _____

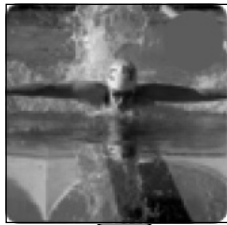
III. Pick the right word and tick it. [5 x 1 = 5]

1. To whom was the Gita recited first ? _____ (Arjuna / Bhima)

2. How many puranas are there ? _____ (17 / 18).
3. There are _____ (600 / 700) shlokas in the Gita.
4. The Holy book of the Parsis is _____ (the Holy Bible /Avesta)
5. The Mahabharata has _____ (10,000 / 20,000) verses.

IV. Can you name the following sport ?


[5 x 1 = 5]



1



2



3



4



5

1. _____
2. _____
3. _____
4. _____
5. _____

Swimming Shooting Weight lifting Lawn Tennis

V. Name the sport / game with which these terms are associated.

[5 x 1 = 5]

TERMS

SPORTS

- | | |
|---|--|
| <ol style="list-style-type: none"> 1. Dribble 2. Crease 3. Cue 4. Punter 5. Gambit | <p>_____</p> <p>_____</p> <p>_____</p> <p>_____</p> <p>_____</p> |
|---|--|

★ ★ ★ ★ ★