

FORMATIVE ASSESSMENT - I

Class - IV :: Vikram Lotus English

25

 Syllabus :
Term 1 (Lessons 1 & 2)
Page No. 3 - 11

Time : 1 Hour

Max.Marks: 25

Name :

Class :

Section :

Roll No.

Listening and Speaking

I. Read the passage carefully and then answer the questions. [4 x 1 = 4M]

I am an Indian donkey. I am grey in colour. Often, I am treated as a beast of burden, carrying heavy load from one place to another. A male donkey is called a jack. A female donkey is called a jenny. A baby donkey is called a colt. The sound that a donkey makes called bray.

- 1) What is a donkey's call called ?
- 2) How does a donkey help humans ?
- 3) What is a female donkey called ?
- 4) Why is a donkey also called a 'beast of burden'.

II. When we sneeze, we generally hear people telling us "God bless you". Do you know why? If not, think about a few good reasons and write about it. [4M]

Reading

I. Answer the following questions. [3 x 2 = 6M]

- 1) How does Mr. Nobody soil the carpets ?
- 2) What are some of the things that Mr. Nobody does ?
- 3) Why do you think Mr. Nobody actually is ? Do you have someone like Mr. Nobody in your house ?

Writing

I. Write a paragraph about your grandparents. Use the following questions as pointers. [3 x 1 = 3M]

- 1) Who are your grandparents ?

- 2) How old are they ?
- 3) How do you spend time with them ?

Grammar

I. Fill in the blanks using 'so' or 'because'.

[4 x 1 = 4M]

- 1) She drank a glass of water _____ she was thirsty.
- 2) Ajit has a bad cold, _____ he didn't go to school.
- 3) He doesn't like the taste of lemon, _____ he didn't eat the pie.
- 4) Grandpa has misplaced his spectacles, _____ he is looking for them.

Vocabulary

I. From the list below each, choose the word most similar in meaning to. [4 x 1 = 4M]

a) **smell, odour**

grace, delight, scent, limb, retrieve

b) **keep, save**

claim, scold, intend, resign, preserve

c) **big, large, huge**

slight, lame, bear, immense, plight

d) **private, secret**

shallow, humble, confidential, regard

FORMATIVE ASSESSMENT - I

Class - IV :: Vikram Lotus Mathematics

25

Time : 1 Hour

Max.Marks: 25

Name :	Class :	Section :	Roll No.
--------	---------	-----------	----------

I. Solve the following word problems.

[3 x 2 = 6M]

1) In a city, there are 8,02,434 men, 13,46,319 women and 27,83,678 children. What is the total population of the city ?

2) Subtract the sum of 539,276 and 452,131 from 1,000,000.

3) A video game company sold 8,650 white game consoles and 6,989 black consoles. How many consoles have been sold altogether ?

II. Convert the following to Roman Numerals.

[2 x 1 = 2M]

1) 30 - _____

2) 4 - _____

III. Subtract without regrouping.

[2 x 1 = 2M]

1) $86,255 - 43,122$ _____

2) $58,985 - 26,430$ _____

IV. Fill in the blanks without actual addition.

[3 x 1 = 3M]

1) $1,20,451 + \underline{\hspace{2cm}} = \underline{\hspace{2cm}} + 2,10,510$

2) $23,521 + \underline{\hspace{2cm}} = 23,521$

3) $10,000 + 27,612 = 27,612 + \underline{\hspace{2cm}}$

V. Find the successor of the following numbers.

[3 x 1 = 3M]

1) 12,600 – _____

2) 19,999 – _____

3) 4,69,009 – _____

VI. Fill in the blanks with the correct sign < or > to compare the numbers.[3 x 1 = 3M]

1) 9,834 _____ 9,234

2) 2,45,008 _____ 3,67,654

3) 1,00,000 _____ 10,000

VII. Arrange the following numbers in ascending order.

[2 x 1 = 2M]

1) 3,45,601 ; 2,60,912 ; 1,06,732 ; 2,79,021 ; 5,60,634

2) 23,567; 45,098; 14,560; 90,800; 35,803

VIII. Match the following.

[4 x 1 = 4M]

1) V () a) 100

2) XII () b) 4

3) IV () c) 5

4) C () d) 12

FORMATIVE ASSESSMENT - I

Class - IV :: Vikram Lotus Science

25

 Syllabus :
Term 1 (Lessons 1 & 2)
Page No. 87 - 101

Time : 1 Hour

Max.Marks: 25

Name :**Class :****Section :****Roll No.**
I. Short answer type questions.

[2 x 2 = 4M]

- 1) How does a cactus survive in the desert ?
- 2) What do we get from plants ?

II. Very short answer type questions.

[4 x 1 = 4M]

- 1) What are breathing roots ?
- 2) What is a leaf ?
- 3) What are aquatic plants ?
- 4) What are carnivorous plants ?

III. Tick (✓) the right and cross (×) the wrong statements.

[4 x 1 = 4M]

- 1) Duckweed is a fixed water plant.
- 2) Oxygen is absorbed during photosynthesis.
- 3) Insectivorous plants eat insects to get nutrition.
- 4) Plants store their food in the roots.

IV. Tick (✓) the correct answer.

[4 x 1 = 4M]

1) Which one of the following is responsible for green colour of the leaves ?

- | | | | |
|-----------------|--------------------------|-----------------|--------------------------|
| i) Node | <input type="checkbox"/> | ii) Chlorophyll | <input type="checkbox"/> |
| iii) Guard cell | <input type="checkbox"/> | iv) Stomata | <input type="checkbox"/> |

2) What do leaves release in the atmosphere during photosynthesis ?

- | | | | |
|-------------|--------------------------|--------------------|--------------------------|
| i) Hydrogen | <input type="checkbox"/> | ii) Carbon dioxide | <input type="checkbox"/> |
| iii) Water | <input type="checkbox"/> | iv) Oxygen | <input type="checkbox"/> |

3) Which series of plants comes from grass family ?

- i) Desert plants
- ii) Aquatic plants
- iii) Wheat, rice, maize, bamboo

4) Which one of the following statements is correct ?

- i) Terrestrial plants grow on land and in water
- ii) Aquatic plants grow on land
- iii) Terrestrial plants grow on land

V. Unscramble the following words to make meaningful words.

[4 x 1 = 4M]

- 1) VOROUSSECINTI : _____
- 2) TICAQUA : _____
- 3) TRIALTERRES : _____
- 4) TATIONADAP : _____

VI. Match the following columns.

[5 x 1 = 5M]

Column A		Column B	
1) Cactus	()	a) plains	
2) Coniferous trees	()	b) marshy areas	
3) Mango trees	()	c) hilly areas	
4) Coconut tree	()	d) desert areas	
5) Mangroves	()	e) evergreen	

FORMATIVE ASSESSMENT - I

Class - IV :: Vikram Lotus Social Studies

25

Syllabus :
Term 1 (Lessons 1 - 4)
Page No. 121 - 143

Time : 1 Hour

Max.Marks: 25

Name :	Class :	Section :	Roll No.
--------	---------	-----------	----------

I. Define : [4 x 1 = 4M]

- 1) Terai
- 2) Basin
- 3) Island
- 4) Phiran

II. Answer the following questions. [3 x 2 = 6M]

- 1) Write the names of religious places located in Uttarakhand.
- 2) What makes the Northern plains so fertile ?
- 3) Why is India called a peninsula ?

III. Fill in the blanks with suitable words given below. [4 x 1 = 4M]

Delhi , Mask, Himachal, Allahabad

- 1) The river Ganga joins the river Yamuna at _____
- 2) The _____ dance of Sikkim is popular all over India.
- 3) _____ is the National Capital Territory.
- 4) Pir Panjal range is located in _____ range.

IV. Write 'T' for true and 'F' for false statements. [3 x 1 = 3M]

- 1) The Yamuna starts from Yamunotri.
- 2) The Himalayas have four ranges.
- 3) Out of all the Himalayan ranges, Himachal is the highest range.

V. Multiple choice questions. Tick (✓) the correct option.

[3 x 1 = 3M]

1) Corbett National Park is located in _____

A) Himadri ranges

B) Himachal ranges

C) Shiwalik ranges

2) Which river is the most important river in the Northern Plain ?

A) Ganga

B) Yamuna

C) Brahmaputra

3) To the east of India, there is _____

A) Arabian Sea

B) Indian Ocean

C) Bay of Bengal

VI. Match the following.

[5 x 1 = 5M]

A

B

1) Highest peak in the world

()

a) Famous Valley

2) Shimla

()

b) Gangotri

3) Ganga

()

c) Tashi Malik

4) Kangra

()

d) Hill Station

5) Mountaineer

()

e) Mount Everest

Name :



Class :

Section :

Roll No.

I. Look at the pictures and match them with the description.

[6 x 1 = 6M]



- 1) I am the king of Fruits.
- 2) I keep the doctor away.
- 3) I am full of water.
- 4) You enjoy drinking my juice.
- 5) I yield citric acid which is a flavouring agent.
- 6) I help in the treatment scurvy.

II. Where are the following parks and wild life sanctuaries located ?

[6 x 1 = 6M]

- 1) Jaldapara Sanctuary _____
- 2) Gir National Park _____
- 3) Ranthambore Tiger Sanctuary _____
- 4) Manas Tiger Sanctuary _____
- 5) Kanha National Park _____
- 6) Dudhwa National Park _____

Take My Help :

Rajasthan, Uttar Pradesh, West Bengal, Assam, Gujarat, Madhya Pradesh

III. Fill in the blanks with the name of the plant.

[4 x 1 = 4M]

1)



This tree has no branches. _____

2)



The wood of this tree is used to make cricket bats. _____

3)



The leaves of this plant form the main food of the silk worm. _____


4)




Pandas live by eating leaves of this plant. _____

IV. Identify the following animals and write their names.


[9 x 1 = 9M]




1




2



3




4



5




6



7



8



9

- 1) Fastest Running Animal _____
- 2) Smallest Mammal _____
- 3) Largest Fish _____
- 4) Smallest Bird _____
- 5) Largest Lizard _____
- 6) Smallest Insect _____
- 7) Smallest Fish _____
- 8) Fastest Flying Insect _____
- 9) Largest Land Animal _____
