

FORMATIVE ASSESSMENT - II

Class - III :: Vikram Lotus English

25

 Syllabus :
 Term 1 (Lesson 3)
 Page No. 15- 21

Time : 1 Hour

Max.Marks: 25

Name :**Class :****Section :****Roll No.**

Speaking

I. Complete the sentences with suitable words.

[5 × 1 = 5M]

Please forgive me, I beg you pardon, I am sorry, I feel really bad

- 1) _____ I could not attend your party last evening.
- 2) _____ for not paying attention while you were reading.
- 3) Mummy _____ for making noise and waking you up.
- 4) _____ that I broke your scale.
- 5) _____ for losing your book.

Reading

I. Answer the following questions.

[3 x 1 = 3M]

1. Why was King John worried about his people ?
2. How did the king explain the plan to his people ?
3. What happened when a horse rang the bell ?

Writing

I. Write a short story that would begin with the following sentence.

[5M]

Rajan was a blind boy. Everyone loved him because






Grammar

I. Fill in the blanks with present continuous tense of the verbs given in the bracket. [5 × 1 = 5M]

- 1) The doctor _____ his patients. (examine)
- 2) The teacher _____ on the blackboard. (write)
- 3) My daddy _____ around the country this month.
(travel)
- 4) We _____ to music now. (listen)
- 5) The dogs _____ at the stranger. (bark)

Vocabulary

I. Match the words with the faces given below. [5 x 1 = 5M]

- | | | | | |
|--------------|---|--|---|--|
| 1) Happy | ● | | ● |  |
| 2) Sad | ● | | ● |  |
| 3) Scared | ● | | ● |  |
| 4) Angry | ● | | ● |  |
| 5) Surprised | ● | | ● |  |

Pronunciation

I. Write the plural of the following. [2 x 1 = 2M]

1. Study – _____
2. Puppy – _____

FORMATIVE ASSESSMENT - II

Class - III :: Vikram Lotus Mathematics

25

 Syllabus :
Term 1 (Units 3 & 4)
Page No. 45 - 60

Time : 1 Hour

Max.Marks: 25

Name :**Class :****Section :****Roll No.**
I. Solve the following word problems.

[3 x 2 = 6M]

- There are 1730 boys and 1500 girls in a school. How many children are there altogether?
- In a day, an ice-cream factory makes 2195 orange ice-creams and 1293 vanilla ice-creams. How many ice-creams does it make in a day ?
- A fruitseller bought 3 boxes of apples containing 1210, 2100, 1520 apples respectively. Find the total number of apples bought.

II. Fill in the blanks.

[2 x 1 = 2M]

- $871 + 96 = \underline{\hspace{2cm}} + \underline{\hspace{2cm}}$.
- $715 + 142 = \underline{\hspace{2cm}} + \underline{\hspace{2cm}}$.

III. Add the following numbers by arranging them in columns.

[2 x 1 = 2M]

- 268 and 680 = $\underline{\hspace{2cm}}$
- 588 and 348 = $\underline{\hspace{2cm}}$

IV. Addition with one regrouping.

[2 x 1 = 2]

$$\begin{array}{r}
 \text{1) Th} \quad \text{H} \quad \text{T} \quad \text{O} \\
 \hline
 2 \quad 3 \quad 1 \quad 9 \\
 + 4 \quad 5 \quad 7 \quad 6 \\
 \hline
 \underline{\hspace{2cm}}
 \end{array}$$

$$\begin{array}{r}
 \text{2) Th} \quad \text{H} \quad \text{T} \quad \text{O} \\
 \hline
 7 \quad 5 \quad 6 \quad 2 \\
 + 2 \quad 3 \quad 2 \quad 8 \\
 \hline
 \underline{\hspace{2cm}}
 \end{array}$$

V. Write the answer of the following in roman numerals.

[4 x 1 = 4M]

1) $14 \div 2 =$ _____

2) $24 + 4 =$ _____

3) $8 \times 1 =$ _____

4) $100 - 5 =$ _____

VI. Add the following.

[3 x 1 = 3M]

1) 65 and 25 = _____

2) 38 and 44 = _____

3) 74 and 08 = _____

VII. Find the sum of the following.

[3 x 1 = 3M]

1) $231 +$ _____ $= 232$

2) $193 + 1 =$ _____

3) $1 +$ _____ $= 49$

VIII. What do the following roman numerals stand for ?

[3 x 1 = 3M]

1) XV – _____

2) XL – _____

3) VII – _____

FORMATIVE ASSESSMENT - II

Class - III :: Vikram Lotus Science

25

 Syllabus :
Term 1 (Lesson 3)
Page No. 93 - 100

Time : 1 Hour

Max.Marks: 25

Name :**Class :****Section :****Roll No.**
I. Short Answer Type Questions.

[2 x 2 = 4M]

- 1) How many types of roots are there ?
- 2) Name any two plants that have tap roots.

II. Very Short Answer Type Questions.

[4 x 1 = 4M]

- 1) Differentiate between stem and trunk.
- 2) Why is root an important part of any plant ?
- 3) In which direction shoot grows ?
- 4) Why do we eat the stem of potato, ginger and sugarcane ?

III. Tick (✓) the right statements and cross (×) the wrong statements.

[4 x 1 = 4M]

- 1) Many side veins arise from the main vein in plant leaves.
- 2) The stem of a money plant is very hard and strong.
- 3) Stems hold the plant upright.
- 4) In a tap root plant, main root grows from end of the stem.

IV. Tick (✓) the correct answers.

[5 x 1 = 5M]

- 1) Which one of the following does not have any seed ?

i) Guava

ii) Banana

iii) Orange

iv) Apple

2) Which part of the plant is called kitchen of the plant ?

- | | | | |
|------------|--------------------------|----------|--------------------------|
| i) stem | <input type="checkbox"/> | ii) root | <input type="checkbox"/> |
| iii) fruit | <input type="checkbox"/> | iv) leaf | <input type="checkbox"/> |

3) In which of the following plant, roots store food ?

- | | | | |
|-------------|--------------------------|------------------|--------------------------|
| i) Radish | <input type="checkbox"/> | ii) Beetroot | <input type="checkbox"/> |
| iii) Carrot | <input type="checkbox"/> | iv) All of these | <input type="checkbox"/> |

4) The plant stores food in the _____

- | | | | |
|-------------|--------------------------|------------------|--------------------------|
| i) Roots | <input type="checkbox"/> | ii) Stems | <input type="checkbox"/> |
| iii) Leaves | <input type="checkbox"/> | iv) All of these | <input type="checkbox"/> |

5) Which one of the following has tap roots ?

- | | | | |
|------------|--------------------------|-----------|--------------------------|
| i) Carrot | <input type="checkbox"/> | ii) Wheat | <input type="checkbox"/> |
| iii) Grass | <input type="checkbox"/> | iv) Rice | <input type="checkbox"/> |

V. Fill in the blanks with suitable words given below.

[3 × 1 = 3M]

lamina upright root

- 1) The _____ is the part which grows below the ground.
- 2) The root helps the plants to stand _____ .
- 3) The flat and broad part of a leaf is called _____ .

VI. Match the following columns.

[5 x 1 = 5M]

Column – A

Column – B

- | | | |
|-------------------------------|--------|------------|
| 1) Tap root | () | a) onion |
| 2) Fibrous root | () | b) stomata |
| 3) Tiny pores inside the leaf | () | c) papaya |
| 4) With many seeds | () | d) mango |
| 5) With one seed | () | e) radish |

FORMATIVE ASSESSMENT - II**Class - III :: Vikram Lotus Social Studies****25**
 Syllabus :
Term 1 (Lesson 4 - 5)
Page No. 131- 143
Time : 1 Hour**Max.Marks: 25**

Name :	Class :	Section :	Roll No.
--------	---------	-----------	----------

I. Define : **[3 x 1 = 3M]**

- 1) State Government 2) Food grains 3) Union Territory

II. Answer the following questions. **[3 x 1 = 3M]**

- 1) How is a vegetarian different from a non-vegetarian ?
-
- 2) What are seasonal fruits and vegetables ?
-
- 3) How are the Union Territories governed ?

III. Fill in the blanks with suitable words given below. **[4 x 1 = 4M]**

Central Rajasthan West West Bengal

- 1) Gujarat lies to the _____ of India.
-
- 2) Sandesh of _____ are famous worldwide.
-
- 3) Jowar and bajra are commonly eaten in _____.
-
- 4) The _____ government is responsible for the security of the people.

IV. Write 'T' for True and 'F' for False Statement. **[5 x 1 = 5M]**

- 1) There are 28 Union Territories in India.
-
-
- 2) Vegetarians do not eat vegetables.
-
-
- 3) Bananas are available throughout the year.
-
-
- 4) The Prime Minister of India lives in Mumbai.
-
-
- 5) The offices of the state government are located in its capital.
-

V. Multiple Choice Questions. Tick (✓) the correct option. **[5 x 1 = 5M]**

- 1) The National Capital Territory of Delhi is a

- | | | | |
|-------------------------|--------------------------|-----------|--------------------------|
| i) Union Territory | <input type="checkbox"/> | ii) State | <input type="checkbox"/> |
| iii) Central Government | <input type="checkbox"/> | | |

2) Litchi is available in

i) Summer

ii) Winter

iii) None of these

3) Rice is not a popular food in _____.

i) West Bengal

ii) Kerala

iii) Rajasthan

4) The capital of Punjab

i) Raipur

ii) Haryana

iii) Chandigarh

5) Shimla is the capital of

i) Arunachal Pradesh

ii) Himachal Pradesh

iii) Rajasthan

VI. Match the following columns.

[5 x 1 = 5M]

Column – A

Column – B

1) Rice with fish

a) Non-vegetarian

2) Potato

b) Mangoes

3) Coriander

c) Seasonal Vegetable

4) Egg

d) Coastal areas

5) Alphonso

e) Dhania

FORMATIVE ASSESSMENT - II**Class - III :: Vikram Lotus General Knowledge****25**

Syllabus :
Term 1 (Chapter 2)
Page No. 3 - 14

Time : 1 Hour

Max.Marks: 25

Name :**Class :****Section :****Roll No.****I. Fill in the blanks.****[9M]**

1) Trees give us



2) Trees give us



3) Trees give us



4) Trees give us



5) Trees give us



6) Trees give us



7) Trees give us



8) Trees give us



9) Trees give us









II. Name the spices and beverages.**[8M]**

1.



2.




3. 
4. 
5. 
6. 
7. 
8. 

Take My Help :

Ginger, Coffee beans, Coriander, Turmeric, Black pepper, Tea leaves, Cloves, Chillies

III. Plants grow in different kinds of soil. Look at the plants and write where they grow best. [8M]



Mango tree



Coconut tree



Pine tree



Date palm



Cactus tree



Banyan tree



Sea weeds



Water lily

Take My Help :

desert

plains

mountains and hills

coast

sea

fresh water

swamps
