

FORMATIVE ASSESSMENT - IV

Class - III :: Vikram Lotus English

25

 Syllabus :
Term 3 (Lesson 1 - 2)
Page No. 3 - 13

Time : 1 Hour

Max.Marks: 25

Name :**Class :****Section :****Roll No.**

Speaking

- I. Talk about our climate. How many seasons do you experience ? What happens in those seasons ?

How does your dressing change according to the season ? Do your eating habits also change or do you eat anything specific in a specific season ? [6M]

Reading

- I. Answer the following questions. [4 x 1 = 4M]

1. Why do you think the poet wants to be in that land ?
2. Which other people can we see in this land ?
3. Why did Jawaharlal Nehru go to jail ?
4. What was he affectionately called ? Why ?

Writing

- I. Children's Day is all about having fun. Write down 10 lines on what you did last year on Children's Day. What made the day special ? [7M]

Grammar

- I. Underline the adverbs of manner in the sentences given below. [4 × 1 = 4M]

- 1) He patiently waited for the right time.
- 2) She closed the door behind her loudly.

3) She entered the room quietly so that she would not wake the baby up.

4) Terry drives dangerously.

Vocabulary

I. Match the picture of the gemstones with their names. The colours of the stones will help you. [4 x 1 = 4M]

1) Ruby ◆



2) Emerald ◆



3) Diamond ◆



4) Sapphire ◆



FORMATIVE ASSESSMENT - IV

Class - III :: Vikram Lotus Mathematics

25

Syllabus :
Term 3 (Lessons 1 -4)
Page No. 31 - 68

Time : 1 Hour

Max.Marks: 25

Name :

Class :

Section :

Roll No.

I. Convert the following from rupees to paise.

[2 x 1 = 2M]

1) ₹ 5 = _____ paise.

2) ₹ 0.85 = _____ paise.

II. Word problems (verbal sums).

[4 x 2 = 8M]

1) If one paperclip has the mass of 1 gram and 1,000 paperclips have a mass of 1 kilogram, how many kilograms are 8,000 paperclips ?

2) The cost of note book is ₹14.50 and cost of pen is ₹ 5.50. What will be the cost of 10 notebooks and two pens ?

3) Geri takes 50 grams of vitamin C every day. How many grams of vitamin C does Geri take in 30 days ?

4) A crayon has a mass of 30 grams. How many crayons can be made with 30 kilograms of coloured wax ?

III. Convert the following measures of capacity.

[2 x 1 = 2M]

1) 3852 ml = _____ l _____ ml.

2) 9 l 952 ml = _____ ml

IV. Write the following amounts in numeric form.

[2 x 1 = 2M]

1) Three rupees and fifty paise = _____.

2) Two hundred thirty rupees and forty five paise = _____.

V. Find out whether the given years are leap years or not.

[2 x 1 = 2M]

1) 2010 = _____

2) 1990 = _____

VI. Add the following by arranging them in columns.

[2 x 1 = 2M]

1) 15 kg 240 g + 60 kg 525 g

2) 46 kg 300 g + 35 kg 560 g

VII. Multiply the following.


[2 x 1 = 2M]

1) ₹ 210.07 × 7


2) ₹ 20.5 × 6

3) ₹ 123 × 2

VIII. Write the time in digital form and indicate it on the clock along side. [2 x 1 = 2M]



A quarter to 5



A quarter past 7

IX. Write in words.

[3 x 1 = 3M]

1) ₹ 14.05 = _____

2) ₹ 97.25 = _____

3) ₹ 23.75 = _____

FORMATIVE ASSESSMENT - IV

Class - III :: Vikram Lotus Science

25

 Syllabus :
Term 3 (Lesson 1 - 3)
Page No.95 - 115

Time : 1 Hour

Max.Marks: 25

Name :**Class :****Section :****Roll No.**

I. Short Answer Type Questions.

[2 x 2 = 4M]

- 1) Why are safety rules required ?
- 2) What are the functions of clothes ?

II. Very Short Answer Type Questions.

[4 x 1 = 4M]

- 1) What are natural fibres ?
- 2) How is first aid given to a patient who has wound ?
- 3) What is the normal temperature of a human body ?
- 4) How many metres are there in 1 kilometer ?

III. Tick (✓) the right statements and cross (×) the wrong statements.

[4 x 1 = 4M]

1) The length of a book is measured in millimetres.

2) It is dangerous to play with fire works.

3) The fruits and vegetables are weighed in metres.

4) We should not have windows in our house.

IV. Tick (✓) the correct answers.

[4 x 1 = 4M]

1) Temperature is measured in

i) Celsius

ii) Fahrenheit

iii) Both (i) and (ii)

iv) None of these

2) It is a fibre that we get from animal.

i) jute

ii) rayon

iii) cotton

iv) wool

3) First aid means _____

i) the arrival of doctor

ii) the last thing to do

iii) the first remedy

iv) none of these

4) Never take medicines without consulting a _____

i) farmer

ii) doctor

iii) postman

iv) lawyer

V. Fill in the blanks with suitable words given below.

[4 × 1 = 4M]

electric shock kilometers 0.9144 walls

1) The distance between two cities is measured in _____.

2) One yard is equal to _____ metre.

3) You may get _____ if you touch the electric appliances with wet hands.

4) A good house should have thick _____ .

IV. Match the following columns.

[5 x 1 = 5M]

Column – A

Column – B

1) Never drink cold water

a) can occur anywhere

2) You can slip

b) cure

3) Wash the wound

c) just after playing or if you are sweating

4) Accidents

d) with dettol and cold water

5) Prevention is better than

e) if you leave the soap on bathroom

FORMATIVE ASSESSMENT - IV

Class - III :: Vikram Lotus Social Studies

25

Syllabus :
Term 3 (Lesson 1 - 4)
Page No. 133 - 157

Time : 1 Hour

Max.Marks: 25

Name :	Class :	Section :	Roll No.
--------	---------	-----------	----------

I. Define in a sentence.

[3 x 2 = 6M]

- 1) Landmark
- 2) Diamond Harbour
- 3) Carnatic music

II. Answer the following questions.

[3 x 1 = 3M]

- 1) What do you know about the Queen's Necklace ?
- 2) Why is Kolkata called the "City of Palaces" ?
- 3) What is the importance of Amar Jawan Jyoti ?

III. Fill in the blanks with suitable words given below.

[5 x 1 = 5M]

metro	fish	seaport	capital	Marine Drive
-------	------	---------	---------	--------------

- 1) The British government shifted the _____ from Calcutta (Kolkata) to Delhi in 1911.
- 2) Nariman point is on the extreme south of _____.
- 3) Kolkata has an underground railway system called _____.
- 4) _____ and rice are the staple food of the Bengalis.
- 5) Chennai is a very busy and important _____ of the eastern coast of India.

IV. Write 'T' for True and 'F' for False Statements.

[3 x 1 = 3M]

- 1) The climate of Chennai is warm and humid.
- 2) National Library of Kolkata is the biggest library of India.
- 3) The first train in India ran from Mumbai to Delhi

V. Multiple Choice Questions. Tick (✓) the correct option.

[3 x 1 = 3M]

1) The Popular sweet dish of Mumbai is

i) Shrikhand

ii) Vada Pav

iii) Rasgulla

iv) Laddu

2) Belur Math is situated near

i) Kolkata

ii) New Delhi

iii) Chennai

iv) Mumbai

3) St. Thomas Church is situated in

i) Bengaluru

ii) Chennai

iii) Hyderabad

iv) Pune

VI. Match the following columns.

[5 x 1 = 5M]

Column – A

Column – B

1) Elephanta

a) Art Gallery

2) Essel

b) Railway Station

3) Jahangir

c) Street food

4) Bombay VT

d) Caves

5) Bhelpuri

e) World

FORMATIVE ASSESSMENT - IV

Class - III :: Vikram Lotus General Knowledge

25

 Syllabus :
 Term 3 (Chapter 1 - 2)
 Page No. 171- 184

Time : 1 Hour

Max.Marks: 25

Name :**Class :****Section :****Roll No.**

I. Rearrange the following jumbled words. You get names of rivers and mountains.

[10M]

- 1) BAHRAMATRAPU _____
- 2) REVYCAU _____
- 3) TELSUI _____
- 4) AIRHSNK _____
- 5) MRADANA _____
- 6) ARAIAWL _____
- 7) GLIRINI _____
- 8) CHALVINDHYA _____
- 9) TATIP _____
- 10) HIMLAAYAS _____

II. Name the Language spoken in each of the following states.

[5M]

- 1) Gujarat _____
- 2) Maharashtra _____
- 3) Andhra Pradesh _____
- 4) Rajasthan _____
- 5) West Bengal _____


III. Write the name of the country where these famous buildings and monuments are located. [5M]



Mount Rushmore



Buckingham Palace



Great Wall



Angel Falls



Colosseum

Write your answers here :

- 1) _____
- 2) _____
- 3) _____
- 4) _____
- 5) _____

IV. Here are some popular brand names. Can you name the product ? [5 × 1 = 5M]

1.	Bata	
2.	Kodak	
3.	Hero Honda	
4.	Britannia	
5.	Lifebuoy	
