

# SUMMATIVE ASSESSMENT - II

## Class - IV :: Vikram Lotus English

# 50

 Syllabus :  
Term 2 (Lessons 1 - 4)  
Page No. 3 - 24

Time : 2 1/2 Hours

Max.Marks: 50

Name :

Class :

Section :

Roll No.

### Listening and Speaking

I. Fill in the blanks after reading the text.

[5 x 1 = 5M]

In early April, 1930 Gandhi, 61 years old, reached Dandi after walking 241 miles in 24 days. He then defied the law by making salt. It was a brilliant, non-violent strategy by Gandhi. To enforce the law of the land, the British had to arrest the satyagrahis (soldiers of civil disobedience) and Indians courted arrest in millions. There was panic in the administration and Indian freedom struggle finally gathered momentum both inside and outside of India.

- 1) Gandhiji walked \_\_\_\_\_ miles to reach Dandi.
- 2) He was \_\_\_\_\_ years old at that time.
- 3) He defied the law by \_\_\_\_\_ salt.
- 4) This was a \_\_\_\_\_ strategy by Gandhi.
- 5) The soldiers of civil disobedience were called \_\_\_\_\_.

II. Have you ever been on a boat ? A ferry maybe ? Or have you ever crossed a water body while travelling ? Where were you going ? How was the journey ? What did you enjoy most about it ? Describe the boat.

[4M]

### Reading

I. Answer the following questions.

[3 x 2 = 6M]

- 1) What does the poet think about the creator of this creature ?
- 2) How will you describe father William and his son ?
- 3) What words are repeated ? Why ?

II. Complete the following sentences.

[4 x 1 = 4M]

- 1) The ships builders were sure that the Titanic would never sink, hence they put only
- 2) California was just twenty miles away, but

- 3) It was later decided that all ships must have enough room in their.
- 4) Everyone thought that the Titanic could never sink. Hence they called it

### Writing

**I. Read the following sentences. Now rearrange them in the correct order to make a story. Then elaborate each sentence to complete the story. [5 x 1 = 5M]**

- 1) The bone drowned in the river.
- 2) A dog grabbed a bone and ran off.
- 3) The dog saw its reflection.
- 4) The dog reached a stream.
- 5) There was a bridge over the stream.

**II. In the poem 'Tiger, tiger, burning bright', we can see how the poet is fascinated by the tiger. There are many other such magnificent wild animals. Which one is your favourite? Write about it. What do you think makes it stand out? What are its habits? Where it is generally found ? [5M]**

### Grammar

**I. Complete the sentences given below by filling the blanks with past tenses of the words given in brackets. [5 x 1 = 5M]**

- 1) He \_\_\_\_\_ (like) his music class the most.
- 2) Raj \_\_\_\_\_ (wake) up at seven in the morning yesterday.
- 3) He \_\_\_\_\_ (board) the school bus.
- 4) He \_\_\_\_\_ (eat) his breakfast quickly.
- 5) He \_\_\_\_\_ (play) with his friends in the evening.


**II. Fill in the correct relative pronoun. (who, whom, whose, which). [4 x 1 = 4M]**

- 1) \_\_\_\_\_ did you want to meet ?
- 2) This is the ruler \_\_\_\_\_ I had lost.
- 3) Time \_\_\_\_\_ is lost, is lost forever.
- 4) It was Neil Armstrong \_\_\_\_\_ first landed on Moon.

**Vocabulary**

I. This is Robin's family tree. Look and answer the questions below.

[7M]



- 1) Robin is Pauline's \_\_\_\_\_
- 2) Veronica is Isabelle's \_\_\_\_\_
- 3) Jared is Lauren's \_\_\_\_\_
- 4) Peter and Lois are Isabelle's \_\_\_\_\_
- 5) Lois is Robin's \_\_\_\_\_
- 6) Julie and Julia are \_\_\_\_\_
- 7) Julia is Robin's \_\_\_\_\_

II. Give one word for the sentences given below.

[5 x 1 = 5M]

- 1) To go down under water \_\_\_\_\_
- 2) Group of people who work on a ship or an aeroplane together \_\_\_\_\_
- 3) A special ship which sails under the water \_\_\_\_\_
- 4) The floors of a ship \_\_\_\_\_
- 5) Huge mass of ice floating in sea in very cold regions \_\_\_\_\_

\*\*\*\*\*



# SUMMATIVE ASSESSMENT - II

## Class - IV :: Vikram Lotus Mathematics

# 50

 Time : 2  $\frac{1}{2}$  Hours

Max.Marks: 50

| Name : | Class : | Section : | Roll No. |
|--------|---------|-----------|----------|
|--------|---------|-----------|----------|

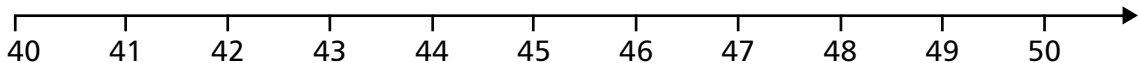
I. Solve the following word problems.

[4 x 2 = 8M]

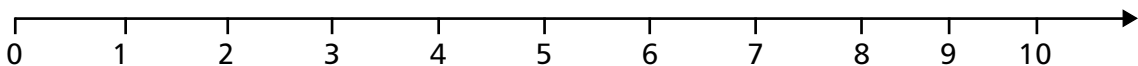
- 1) Jug A has 2.17 litres of water and Jug B has 0.79 litres less water than Jug A. Find the total volume of water in the two jugs.
- 2) Sheetal ate 5 sweets out of 7 sweets. What fraction of sweets did she eat ?
- 3) Jasmine has a ribbon that is 12.6 metres long. Sharon has a ribbon that is 3.8 metres shorter. What is the length of the two ribbons ?
- 4) Out of 40 students in a class 23 are girls. What is the fraction of girls in a class ?

II. Using the number line, round the following numbers to nearest ten. [2 x 1 = 2M]

- 1) Is 41 nearer to 40 or 50 ? \_\_\_\_\_



- 2) Is 8 nearer to 0 or 10 ? \_\_\_\_\_



III. Convert the following units of length as directed.

[3 x 1 = 3M]

- 1) 23 km = \_\_\_\_\_ m
- 2) 678 dm = \_\_\_\_\_ m
- 3) 56 m = \_\_\_\_\_ mm

IV. Find the prime factors of the following numbers. Using the factor tree method.

[2 x 1 = 2M]

- 1) 108 Prime factor = \_\_\_\_\_      2) 60 Prime factor = \_\_\_\_\_

V. Find the next five equivalent fractions to.

[3 x 1 = 3M]

1)  $\frac{3}{7} =$  \_\_\_\_\_

2)  $\frac{2}{5} =$  \_\_\_\_\_

3)  $\frac{4}{7} =$  \_\_\_\_\_

VI. Convert the following mixed fractions to improper fractions.

[3 x 1 = 3M]

1)  $5\frac{4}{7} =$  \_\_\_\_\_

2)  $1\frac{1}{17} =$  \_\_\_\_\_

3)  $3\frac{1}{8} =$  \_\_\_\_\_

VII. Arrange in descending order using the symbol >.

[3 x 1 = 3M]

1)  $\frac{4}{6}, \frac{3}{8}, \frac{6}{12} =$  \_\_\_\_\_

2)  $\frac{2}{7}, \frac{11}{35}, \frac{9}{14} =$  \_\_\_\_\_

3)  $\frac{1}{2}, \frac{5}{6}, \frac{2}{3} =$  \_\_\_\_\_

VIII. Write the weights after examining the pictures carefully.

[4 x 1 = 4M]

1) 1 packet of tea \_\_\_\_\_

2) 4 packets of sugar \_\_\_\_\_

3) 2 packets of milk \_\_\_\_\_

4) 5 bars of chocolate \_\_\_\_\_



500 g



350 g



40 g



750 ml

IX. Write the following decimal numbers in words without the place value. [4 x 1 = 4M]

1) 545.001 = \_\_\_\_\_

2) 2004.02 = \_\_\_\_\_

3) 10.18 = \_\_\_\_\_

4) 7.077 = \_\_\_\_\_

X. Add the following units of mass.

[3 x 1 = 3M]

$$\begin{array}{r}
 \text{Kg} \quad \text{g} \\
 1) \quad 15 \quad 290 \\
 + \quad 3 \quad 742 \\
 \hline
 \\
 \hline
 \end{array}$$

$$\begin{array}{r}
 \text{Kg} \quad \text{g} \\
 2) \quad 17 \quad 186 \\
 + \quad 21 \quad 200 \\
 \hline
 \\
 \hline
 \end{array}$$

$$\begin{array}{r}
 \text{Kg} \quad \text{g} \\
 3) \quad 4 \quad 498 \\
 + \quad 2 \quad 463 \\
 \hline
 \\
 \hline
 \end{array}$$

XI. Divide the following.

[2 x 1 = 2M]

1) 85 l 34 ml by 17 \_\_\_\_\_

2) 265 kg 450 g by 5 \_\_\_\_\_

XII. Write all the factors for the numbers below and circle whether they are prime or composite numbers. [5M]

| Numbers | Factors | Prime | Composite |
|---------|---------|-------|-----------|
| 3       | 1, 3,   | •     |           |
| 5       |         |       |           |
| 9       |         |       |           |
| 11      |         |       |           |
| 15      |         |       |           |
| 18      |         |       |           |
| 23      |         |       |           |
| 33      |         |       |           |
| 41      |         |       |           |
| 63      |         |       |           |
| 97      |         |       |           |

XIII. Compare the two fractions using the correct signs (>, < or =).

[4 x 1 = 4M]

1)  $3\frac{4}{6}$  \_\_\_\_\_  $3\frac{7}{9}$

2)  $1\frac{2}{3}$  \_\_\_\_\_  $2\frac{6}{8}$

3)  $3\frac{2}{3}$  \_\_\_\_\_  $3\frac{2}{7}$

4)  $2\frac{3}{4}$  \_\_\_\_\_  $1\frac{4}{8}$

XIV. Write each of the following as a decimal number.

[4 x 1 = 4M]

1)  $\frac{3}{10} + \frac{7}{100}$  \_\_\_\_\_

2)  $7 + \frac{2}{10} + \frac{6}{100} + \frac{8}{1000}$  \_\_\_\_\_

3)  $4 + \frac{3}{10} + \frac{5}{100}$  \_\_\_\_\_

4)  $9 + \frac{6}{1000} + \frac{4}{10000}$  \_\_\_\_\_

\*\*\*\*\*



# SUMMATIVE ASSESSMENT - II

## Class - IV :: Vikram Lotus Science

# 50

Syllabus :

Term 2 (Lessons 1 - 5)

Page No. 107 - 146

Time : 2 1/2 Hours

Max.Marks: 50

**Name :****Class :****Section :****Roll No.**

### I. Short answer type questions.

[7 x 2 = 14M]

- 1) Why do Eskimos make igloos ?
- 2) What is first aid ? What first aid should be given to a person suffering from burns ?
- 3) What kind of clothes do you wear in winter ?
- 4) Write the features of a good house.
- 5) How is water helpful to our body ?
- 6) Why should we visit a dentist regularly ?
- 7) How can accidents be avoided in the kitchen ?

### II. Very short answer type questions.

[5 x 1 = 5M]

- 1) Write the names of some energy - giving foods.
- 2) Name two synthetic fibres.
- 3) Why should phenyl be used while mopping the floor ?
- 4) Name two natural fibres obtained from animals.
- 5) How many teeth are there in a temporary teeth set ?

### III. Tick (✓) the right statements and cross (×) the wrong statements.

[8 x 1 = 8M]

- 1) Eating sugar, chocolate and drinking soft drinks are good for teeth.
- 2) Eskimos live in the coldest region.
- 3) If clothes catch fire, we should stop, drop and roll.
- 4) We should dry our clothes in a room.
- 5) Cooking makes the food soft, tasty and easy to digest.

6) Cheese and milk have lots of proteins.

7) An adult man has 32 teeth.

8) Kutcha house is made up of wood and cement.

**IV. Tick (✓) the correct answer.**

**[8 x 1 = 8M]**

1) Which statement is not correct in case you catch fire ?

A) Run as fast as you can

B) Stop and cover your face with your hands

C) Drop to the ground

2) A pucca house is made up of

A) Cement

B) Mud

c) Brick

D) Both (A) and (C)

3) Which one of the following is a synthetic fibre ?

A) Wool

B) Cotton

C) Nylon

D) All of these

4) Which one of the following attacks woollen clothes ?

A) Bird

B) Silver Fish

C) Wasp

D) All of these

5) Which statement is not correct in case someone else catches fire ?

A) Roll him/her in a blanket till the flames are put out

B) Do not pour water

C) Pour water over the person

6) Decaying teeth may lead to :

A) Bad breath

B) Fever

C) Headache

7) Green leafy vegetables are rich in terms of \_\_\_\_\_

A) Vitamins and minerals

B) Proteins

C) Fats

8) Which one of the following protects us from getting wet in the rainy season ?

A) Cotton Shirt

B) Rain Coat

C) T-shirt

D) None of these

V. Fill in the blanks with the help of words given in the box.

[6 x 1 = 6M]

enamel, mouth, calcium, uniform, foot path, house

- 1) \_\_\_\_\_ is important for keeping teeth strong.
- 2) Some people are identified by the \_\_\_\_\_ they wear.
- 3) Always walk on the \_\_\_\_\_
- 4) A tent is a short-term \_\_\_\_\_
- 5) Digestion begins in the \_\_\_\_\_
- 6) The hard, white part on the outside the tooth is called \_\_\_\_\_

VI. Match the following columns.

a.                      Column - A                                      Column - B                                      [4 x 1 = 4M]

- |               |        |                                |
|---------------|--------|--------------------------------|
| 1) Dentine    | (    ) | a) the outer part of the tooth |
| 2) Enamel     | (    ) | b) make us feel the toothache  |
| 3) Milk teeth | (    ) | c) the layer below the enamel  |
| 4) Nerves     | (    ) | d) temporary teeth             |

b.                      Column - A                                      Column -B                                      [5 x 1 = 5M]

- |                |        |                                    |
|----------------|--------|------------------------------------|
| 1) Igloo       | (    ) | a) soldiers                        |
| 2) Tent        | (    ) | b) tourists                        |
| 3) Caravan     | (    ) | c) persons living food-prone areas |
| 4) Houseboat   | (    ) | d) nomads                          |
| 5) Stilt house | (    ) | e) eskimos                         |

\*\*\*\*\*



# SUMMATIVE ASSESSMENT - II

## Class - IV :: Vikram Lotus Social Studies

# 50

Syllabus :  
Term 2 (Lessons 1 - 8)  
Page No. 149 - 198

Time : 2 1/2 Hours

Max.Marks: 50

| Name : | Class : | Section : | Roll No. |
|--------|---------|-----------|----------|
|--------|---------|-----------|----------|

I. Answer the following questions.

[8 x 2 = 16M]

- 1) Why is the black soil called as black cotton soil ?
- 2) Write three metallic minerals and their uses.
- 3) What is Blue Revolution ?
- 4) What do you mean by human resources ?
- 5) Name the states covered by the Coastal Regions.
- 6) Write the different sources of water.
- 7) Name the main factors that affect the climate of a place.
- 8) Name the different types of forests in India.

II. Define :

[6 x 1 = 6M]

- 1) Endangered
- 2) Coast
- 3) Hydroelectricity
- 4) Forest
- 5) Poverty
- 6) Ore

III. Fill in the blanks with suitable words given below.

[6 x 1 = 6M]

Wealth, Tidal, Electricity, Dairy, Odisha, Odisha

- 1) Minerals are the \_\_\_\_\_ of a country.
- 2) Hirakud Dam over thr river Mahanadi is in the state of \_\_\_\_\_
- 3) Amul is a famous \_\_\_\_\_ product.
- 4) Dams help in the production of \_\_\_\_\_
- 5) Mangrove and Sundari are common trees found in \_\_\_\_\_ forests.
- 6) Chilika Lake Bird Sanctuary is in the state of \_\_\_\_\_

**IV. Write 'T' for true and 'F' for false statements.**

**[6 x 1 = 6M]**

- 1) Marina Beach is a famous beach in Kerala.
- 2) Forests help in the occurrence of rain.
- 3) India is a developing country.
- 4) Red soil is black in colour.
- 5) We can live without water.
- 6) Bhakra Nangal Dam is built over the river Damodar.

|  |
|--|
|  |
|  |
|  |
|  |
|  |
|  |

**V. Multiple choice questions. Tick (✓) the correct option.**

**[6 x 1 = 6M]**

- 1) Which of following is a metallic mineral ?  
A) Limestone  B) Mineral oil  C) Iron
- 2) Many people suffer from sunstroke in \_\_\_\_\_ season.  
A) Rainy  B) Summer  C) Spring
- 3) Visakhapatnam is the \_\_\_\_\_ largest port in India.  
A) Second  B) Third  C) Fourth
- 4) If the soil particles are a little coarse, it is called \_\_\_\_\_.  
A) Sand  B) Clay  C) Silt
- 5) Fort Aguada is situated in  
A) Tamil Nadu  B) Goa  C) Karnataka
- 6) Which of the following is a domestic animal ?  
A) Tiger  B) Wolf  C) Cow

**VI. Match the following.**

- |                           |          |                     |          |                     |
|---------------------------|----------|---------------------|----------|---------------------|
| <b>a.</b>                 | <b>A</b> |                     | <b>B</b> | <b>[5 x 1 = 5M]</b> |
| 1) Mineral oil            | ( )      | a) CNG              |          |                     |
| 2) Coal                   | ( )      | b) Ankleshwar       |          |                     |
| 3) Sun                    | ( )      | c) Liquid gold      |          |                     |
| 4) Compressed Natural Gas | ( )      | d) Renewable Source |          |                     |
| 5) Oil field              | ( )      | e) Black diamond    |          |                     |

- |                 |          |                      |          |                     |
|-----------------|----------|----------------------|----------|---------------------|
| <b>b.</b>       | <b>A</b> |                      | <b>B</b> | <b>[5 x 1 = 5M]</b> |
| 1) Darjeeling   | ( )      | a) Winter Season     |          |                     |
| 2) Mawsynram    | ( )      | b) Hill station      |          |                     |
| 3) Loo          | ( )      | c) Pleasant season   |          |                     |
| 4) Spring       | ( )      | d) Heaviest rainfall |          |                     |
| 5) Shorter days | ( )      | e) Hot and dry wind  |          |                     |

\*\*\*\*\*

# SUMMATIVE ASSESSMENT - II

## Class - IV :: Vikram Lotus General Knowledge

# 50

Syllabus :  
Term 2 (Chapters 1 - 3)  
Page No.201 - 218

Time : 2 1/2 Hours

Max.Marks: 50

Name :



Class :

Section :

Roll No.

I. Answer the following questions.

[8 x 1 = 8M]



- 1) Name the first man to go into space. \_\_\_\_\_
- 2) Name the first woman to go into space. \_\_\_\_\_
- 3) Who was the first Indian born woman to go into space ? \_\_\_\_\_
- 4) Name the first human to set foot on the Moon. \_\_\_\_\_
- 5) Who was the first Indian to go into the Space ? \_\_\_\_\_
- 6) Name the first Space Craft to land on the Moon. \_\_\_\_\_
- 7) Name the first Scientific Satellite of India. \_\_\_\_\_
- 8) Name the first Living Creature sent up in Space. \_\_\_\_\_

Take My Help :

|   |                      |
|---|----------------------|
| The dog Laika in Sputnik II, 3 Nov 1957 | Rakesh Sharma        |
| Aryabhata                               | Neil Armstrong, 1969 |
| Luna 9 in 1966                          | Kalpana Chawla       |
|   | Valentina Tereshkova |
|   | Yuri Gagarin         |

II. Here are some of the writers and their works. The name of the author is given. Name their famous work and the language in which each of them has written his / her works. [10M]

| Name                   | Work  | Language |
|------------------------|-------|----------|
| 1) Kalidas             | _____ | _____    |
| 2) Tulasidas           | _____ | _____    |
| 3) Rabindranath Tagore | _____ | _____    |
| 4) Prem Chand          | _____ | _____    |
| 5) M.K. Gandhi         | _____ | _____    |
| 6) Arundhati Roy       | _____ | _____    |
| 7) William Shakespeare | _____ | _____    |
| 8) Jawaharlal Nehru    | _____ | _____    |
| 9) Jayadev             | _____ | _____    |
| 10) R.K. Narayan       | _____ | _____    |

**Take My Help :**

English, Hindi, Sanskrit, Bengali, Geet Govind, Discovery of India, Shakuntalam, Ramacharitmanas, Malgudi Days, Geetanjali, Goden, My experiments with Truth, God of Small Things, Hamlet.

III. Choose words from the box and fill in the blanks. [10 x 1 = 10M]

- 1) I hurt my foot but I hope it will soon \_\_\_\_\_ (heel, heal)
- 2) He wants to \_\_\_\_\_ his white shirt blue. (die, dye)
- 3) It was a very \_\_\_\_\_ and peaceful scene. (quiet, quite)
- 4) A \_\_\_\_\_ is an animal. (dear, deer)
- 5) We missed only one \_\_\_\_\_ of the movie. (scene, seen)
- 6) His feet were \_\_\_\_\_ and dirty. (bear, bare)
- 7) When people grow very old they \_\_\_\_\_ (die, dye)
- 8) The poor \_\_\_\_\_ had a thorn in its foot. (bear, bare)
- 9) I \_\_\_\_\_ the answers to all the questions. (knew, new)
- 10) The \_\_\_\_\_ on my shoe came off. (heel, heal)



**IV. Tick (✓) the appropriate geographical term for each of the following. [8x1=8M]**

- |   |                           |
|---|---------------------------|
| 1) A piece of land with water on three sides is               | Oasis ( ) / Peninsula ( ) |
| 2) The place where the river flows out into the sea is called | Ocean ( ) / Delta ( )     |
| 3) A mass of slow moving ice on mountains is called           | Glacier ( ) / River ( )   |
| 4) A portion of sea partly enclosed by land is                | Bay ( ) / Gulf ( )        |
| 5) The part of a river mouth that is affected by sea tides is | Gulf ( ) / Estuary ( )    |
| 6) Low land between hills or mountains is                     | Land ( ) / Valley ( )     |
| 7) Land completely surrounded by water is                     | Plain ( ) / Island ( )    |
| 8) Dry, almost rainless region of land is called              | Plain ( ) / Desert ( )    |

**V. Say 'yes' or 'No' for the following statements. [4M]**

- |   |     |
|---|-----|
| 1) Diphtheria is a serious infections disease of the throat.        | ( ) |
| 2) Cancer is a disease in which there is too much glucose in blood. | ( ) |
| 3) Leukaemia is another name for blood cancer.                      | ( ) |
| 4) Rat causes Scabies.  | ( ) |

**VI. Match the author with the character. [10 x 1 = 10M]**

- |                            |     |                    |
|----------------------------|-----|--------------------|
| 1) R.K. Narayan            | ( ) | a) Guilliver       |
| 2) Agatha Christie         | ( ) | b) Swami           |
| 3) Charles Dickens         | ( ) | c) Harry Potter    |
| 4) Edgar Rice Burroughs    | ( ) | d) Tarzon          |
| 5) Lewis Caroll            | ( ) | e) Tom Sawyer      |
| 6) Sir Arthur Conan Doyale | ( ) | f) Sherlock Holmes |
| 7) Rudyard Kipling         | ( ) | g) Alice           |
| 8) Jonathan Swift          | ( ) | h) Hercule Poirot  |
| 9) Mark Twain              | ( ) | i) Oliver Twist    |
| 10) J.K. Rowling           | ( ) | j) Baloo, the Bear |

\*\*\*\*\*

