

SUMMATIVE ASSESSMENT - II

Class - V :: Vikram Lotus English

50

 Syllabus :
 Term 2 (Lessons 1- 4)
 Page No. 3 - 30

Time : 2½ Hours

Max.Marks: 50

Name :**Class :****Section :****Roll No.**

Listening and Speaking

- I. Read the passage about gladiators. Then fill in the blanks. [5 × 1 = 5M]

The word 'Gladiator' comes from a Latin word meaning swordsman. A gladiator was an armed fighter who entertained audiences in the ancient Roman Empire. Often, gladiators would have to fight ruthlessly with other gladiators, wild animals and even condemned criminals. Some gladiators chose to appear in the arena out of their own free will.

Others, however, were treated as slaves. They trained in harsh conditions and were kept away from society.

However, gladiators displayed to the audience various fighting skills. They won admiration if they fought well or died bravely. Painters and poets often celebrated the courage of gladiators in their works.

- 1) The word 'gladiator' comes from a Latin word meaning _____.
- 2) The gladiators entertained audiences in the ancient _____ empire.
- 3) The gladiators had to fight ruthlessly with _____ and condemned _____.
- 4) Some gladiators were treated as _____.
- 5) _____ and _____ often celebrated the courage of gladiators in their works.

- II. Write about your favourite outdoor game. [5M]

Explain in detail about how it is played, how many players are required, what sort of discipline does it require, what are the rules and the equipment required to play.

Reading

I. Answer the following questions.

[4 x 1 = 4M]

1. What made Ralph the Rover cut the bell free ?
2. What did Ralph the Rover feel just before his ship sank ?
3. Why did Androcles run away from his master ?
4. What did Androcles see when he lay starving in the cave ?

II. Identify whether the following statements are 'True' or 'False'.

[2 x 1 = 2M]

- 1) Aunt Polly is happy that Jim decides to help Tom paint. _____
- 2) Tom really enjoys white washing fences. _____

III. Answer the following questions.

[4 x 1 = 4M]

- 1) How did Wendy meet Peter for the first time ?
- 2) Describe the scene which took place near the mermaid's lagoon.
- 3) Why did Peter never want to leave Neverland ?
- 4) How did Wendy and the others begin to miss their home ?

Writing

I. You lent your favourite story book to your classmate who then misplaced the book.

Do you feel angry ? Do you feel hurt ? Or do you forgive your friend easily ? Write a letter to express your feelings. Also mention what steps you can take to solve the problem. [5M]

II. Draft a complaint letter to the owner of a shop complaining against a bad product which was sold to you. Remember to : [5M]

- * describe the purchase you made.
- * include the name of product and the serial number.
- * include the date and place of purchase.
- * state the problem with the product.
- * give the history of the problem.
- * ask for specification.
- * allow time for action.
- * provide details on how you can be reached.

Grammar

I. Write questions in present perfect simple tense.

[4 × 1 = 4M]

- 1) you / answer / the question _____
- 2) it / rain / a lot _____
- 3) Jenny / lock / the door _____
- 4) Maureen / watch / the film _____

II. Fill in the blanks with 'whom' or 'whose' according to the sentence. [2 × 1 = 2M]

- 1) I know exactly _____ I need to support.
- 2) _____ are you going to recommend ?

III. Fill in the right words to complete the sentences.

[4 × 1 = 4M]

- 1) I worked all day in the office, _____ I went shopping.
- 2) I worked all day. _____ I went shopping.
- 3) _____ my friend joined me, I was bored.
- 4) I worked until 6 p.m. _____ I was glad to have an invitation from a friend to go shopping.

Vocabulary

I. There are different words to describe people. Some are based on an occupation, while others are based on a characteristic. Use a dictionary to find out the meaning of the following words and then fill in the blanks with the correct word.[3 × 1 = 3M]

archaeologist, pessimist, optimist, astronomer

- 1) One who looks on the dark side of things is a _____ .
- 2) An _____ is a person that studies ancient people, societies and cultures.
- 3) A scientist who studies celestial bodies such as planets, stars and galaxies is an _____ .

II. Following are some words used in the story. Use them in sentences of your own.

[4 x 1 = 4M]

- 1) Absorbing interest : _____
- 2) Survey : _____
- 3) Anticipation : _____
- 4) Alacrity : _____

III. Sometimes pronouncing 'ch' is pronounced as 'k' as in character. With the help of the clues given below find out and write down the words written as 'ch' but pronounced as 'k'. [3 x 1 = 3M]

- 1) These substances are used in laboratories – ch _____
- 2) The green pigment found in plants that is used to make food – ch _____
- 3) A small lizard like creature that changes its colour according to its surroundings – ch _____

SUMMATIVE ASSESSMENT - II**Class - V :: Vikram Lotus Mathematics****50**
 Syllabus :
Term 2 (Units 1 - 6)
Page No. 33 - 90

Time : 2½ Hours

Max.Marks: 50

Name :**Class :****Section :****Roll No.****I. Solve the following word problems.****[5 x 2 = 10M]**

- Mr. Sharma earns ₹ 5,600 per week. He works 8 hours per day. How much does he earn in an hour ?
- There are 32 students in a class. Nine of these students are women. What percent are men ?
- Jack purchased a refrigerator for ₹ 8,000. He had to sell it at a loss of 10%. What was the original selling price ?
- If Principal = ₹2,000, Rate of Interest = $2\frac{1}{2}\%$, Time = 3 years. Find the Simple Interest.
- 7 out of every 10 people like to eat French fries. Calculate it as a percentage ?

II. Add the following.**[2 x 2 = 4M]**

1) _____
 2 1 · 3 2

+ 3 1 · 1 5

2) _____
 1 · 1 5 3

+ 3 · 4 9 9

III. Solve the following problems.**[2 x 1 = 2M]**

- The height of 5 boys in a group is 138 cm, 144 cm, 132 cm, 141 cm and 150 cm. What is the average height of the boys ?
- Four people in a group weigh 64 kg, 70 kg, 90 kg and 72 kg. What is the average weight of this group of people ?

IV. Express the following percent as decimal.**[3 x 1 = 3M]**

1) 13.5 % – _____

2) 30.25 % – _____

3) 7.6 % – _____

V. Complete the table given below.

[5M]

Sr. No.	Cost Price	Selling Price	Profit / Loss	Profit /Loss in Rupees	% of Profit / Loss
1.	₹ 4,000	₹ 4,200			
2.	₹ 6,100	₹ 5,800			
3.	₹ 825	₹ 830			
4.	₹ 2,150	₹ 2,000			
5.	₹ 3,720	₹ 3,500			

VI. Find the selling price when :

[3 × 1 = 3M]

1) Cost price = ₹ 750, Loss % = 15 % - _____

2) Cost price = ₹ 1200, Gain % = 15 % - _____

3) Cost price = ₹ 675, Loss % = 12 % - _____

VII. Subtract the following.

[2 × 1 = 2M]

$$\begin{array}{r} \text{1) } \underline{\hspace{2cm}} \\ 3 \cdot 73 \\ - 2 \cdot 15 \\ \hline \end{array}$$

$$\begin{array}{r} \text{2) } \underline{\hspace{2cm}} \\ 47 \cdot 37 \\ - 21 \cdot 153 \\ \hline \end{array}$$

VIII. Convert the following fractions to decimals.

[3 x 1 = 3M]

1) $5\frac{1}{5}$ - _____

2) $7\frac{3}{7}$ - _____

3) $\frac{3}{4}$ - _____

IX. Round each number to the underlined place value position.

[6 x 1/2 = 3M]

1) 18.99 - _____

4) 268.936 - _____

2) 98.76 - _____

5) 0.4376 - _____

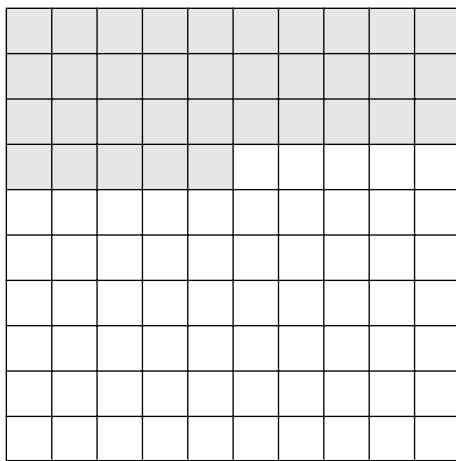
3) 17.28 - _____

6) 5.491 - _____

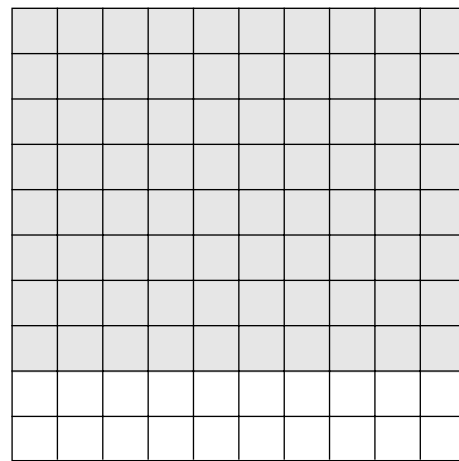
X. Express the shaded portions of the given figures as.

[2 x 1 = 2M]

1) Fraction



2) Decimal



XI. Fill in the blanks.

[5M]

Sr. No.	Principal (P)	Rate % (R)	Time (T)	Simple Interest (S.I.)	Amount (A)
1.	₹ 3,000	10%	1		
2.	₹ 5,000	8%	2		
3.	₹ 3,200	4%	1		
4.	₹ 6,000	5%	3		
5.	₹ 4,800	6%	4		

XII. Compare the two decimal numbers and fill in the appropriate sign in the blank

>, <, =.

[4 × ½ = 2M]

1) 12.44 _____ 12.54

2) 132.04 _____ 123.04

3) 0.734 _____ 0.70

4) 4.631 _____ 4.631

XIII. Multiply.

[3 × 1 = 3M]

$$\begin{array}{r} 1) \quad 3.40 \\ \times 7.30 \\ \hline \\ \hline \end{array}$$

$$\begin{array}{r} 2) \quad 7.51 \\ \times 182.00 \\ \hline \\ \hline \end{array}$$

$$\begin{array}{r} 3) \quad 2.98 \\ \times 245.00 \\ \hline \\ \hline \end{array}$$

XIV. Convert the fractions into decimals.

[3 × 1 = 3M]

1) $\frac{13}{10}$

2) $249\frac{7}{1000}$

3) $\frac{23}{1000}$

SUMMATIVE ASSESSMENT - II

Class - V :: Vikram Lotus Science

50

Syllabus :
Term 2 (Lessons 1 - 5)
Page No. 93 - 132

Time : 2½ Hours

Max.Marks: 50

Name :	Class :	Section :	Roll No.
--------	---------	-----------	----------

I. Short Answer Type Questions.

[5 x 3 = 15M]

- Write the composition of air. Give one use of each.
- Give difference between physical change and chemical change.
- Why are carbohydrates and fats important for us ? Name the foods rich in carbohydrates and fats.
- How are sedimentary rocks formed ?
- What is a pulley ? How does it make work easy ?

II. Very Short Answer Type Questions.

[5 x 2 = 10M]

- What is wedge ?
- What is immunity ?
- Compound.
- What are metallic minerals ?
- Define insoluble impurities.

III. Tick (✓) the right statements and cross (×) the wrong statements.

[5 x 1 = 5M]

- Soluble impurities are removed by sedimentation. []
- Minerals are needed in very small amounts. []
- Shale is the most abundant of all sedimentary rocks. []
- A screw has two inclined planes together. []
- The smallest part of matter is molecule. []

IV. Tick (✓) the correct answers.

[5 x 1 = 5M]

- How many types of water impurities are there ?

- | | | | |
|----------|--------------------------|----------|--------------------------|
| i) Three | <input type="checkbox"/> | ii) Four | <input type="checkbox"/> |
| iii) Six | <input type="checkbox"/> | iv) Two | <input type="checkbox"/> |

- Which of the following is (are) micro-nutrients ?

- | | | | |
|-------------|--------------------------|------------------|--------------------------|
| i) Vitamins | <input type="checkbox"/> | ii) Protein | <input type="checkbox"/> |
| iii) Fat | <input type="checkbox"/> | iv) All of these | <input type="checkbox"/> |

3) Matter exists in _____ states.

i) two

ii) three

iii) four

iv) five

4) What are different types of soil ?

i) Alluvial soil

ii) Red soil

iii) Black soil

iv) All of these

5) A car jack is used to _____ the vehicle.

i) lift

ii) lower

iii) move

iv) all of these

V. Unscramble the following words to make meaningful words.

[5 × 1 = 5M]

1) G E W D E : _____ .

2) T R I E N T S N U : _____ .

3) E A S E D I S : _____ .

4) U L P L E Y : _____ .

5) E L V R E : _____ .

VI. Fill in the blanks with suitable words given below.

[5 × 1 = 5M]

night blindness filter paper paper sedimentary single

1) A simple machine uses a _____ force.

2) Sandstone is a _____ rock.

3) _____ does not allow impurities to pass through it.

4) Deficiency of vitamin A causes _____ .

5) A solid which burns easily can be a piece of _____.

VII. Match the following.

[5 × 1 = 5M]

Column A

Column B

1) Solute

()

a) water, milk, kerosene

2) Solid

()

b) which dissolves something in it

3) Solvent

()

c) oxygen, carbon dioxide

4) Liquid

()

d) wood, glass, plastic

5) Gas

()

e) that gets dissolved in something

SUMMATIVE ASSESSMENT - II**Class - V :: Vikram Lotus Social Studies****50**

Syllabus :
Term 2 (Lessons 1 - 7)
Page No. 135-184

Time : 2½ Hours

Max.Marks: 50

Name :	Class :	Section :	Roll No.
--------	---------	-----------	----------

I. Answer the following questions.**[7 x 2 = 14M]**

- 1) Which city contains main slaughtering centres ?
- 2) Who built the GT Road ?
- 3) How did early men communicate with others ?
- 4) What is the importance of literacy ?
- 5) How was the vaccine for smallpox developed ?
- 6) What are the alternative source of energy ?
- 7) What did Mother Teresa do for the poor ?

II. Define**[7 x 1 = 7M]**

- | | |
|----------------|-------------|
| 1) Philosopher | 5) Internet |
| 2) Drill | 6) Highway |
| 3) Antiseptic | 7) Beef |
| 4) Braille | |

III. Fill in the blanks with suitable words given below.**[6 x 1 = 6M]**

ranches Thane long steam Roman Factory
--

- 1) The _____ engine was used for many purposes.
- 2) Satellites can remain in space for _____ periods .
- 3) The owners of the _____ were called capitalists.
- 4) First railway line in India was laid between Mumbai and _____.
- 5) Open grasslands are called _____ .
- 6) English language is derived from _____ script.

IV. Write 'T' for True and 'F' for False statements.

[6 x 1 = 6M]

- 1) Televisions are only used for entertainment. []
- 2) There are no industries in Prairies. []
- 3) India is surrounded by water bodies on 2 sides. []
- 4) The word paper has been derived from Papyrus. []
- 5) Bronze was a mixture of copper and tin. []
- 6) Stethoscope was invented by Fahrenheit. []

V. Multiple Choice Questions. Tick (✓) the correct option.

[6 x 1 = 6M]

1) Dr. Simpson discovered chloroform in

- | | | | |
|-----------|--------------------------|----------|--------------------------|
| i) 1857 | <input type="checkbox"/> | ii) 1847 | <input type="checkbox"/> |
| iii) 1957 | <input type="checkbox"/> | iv) 1947 | <input type="checkbox"/> |

2) The main crop of the Prairies is

- | | | | |
|------------|--------------------------|------------|--------------------------|
| i) Maize | <input type="checkbox"/> | ii) Rice | <input type="checkbox"/> |
| iii) Wheat | <input type="checkbox"/> | iv) Pulses | <input type="checkbox"/> |

3) The national language of India is

- | | | | |
|------------|--------------------------|----------------|--------------------------|
| i) English | <input type="checkbox"/> | ii) Hindi | <input type="checkbox"/> |
| iii) Urdu | <input type="checkbox"/> | iv) Devanagari | <input type="checkbox"/> |

4) The first metal discovered by early man was

- | | | | |
|-----------|--------------------------|------------|--------------------------|
| i) iron | <input type="checkbox"/> | ii) silver | <input type="checkbox"/> |
| iii) gold | <input type="checkbox"/> | iv) copper | <input type="checkbox"/> |

5) Socrates died by

- | | | | |
|--------------|--------------------------|-------------|--------------------------|
| i) Hanging | <input type="checkbox"/> | ii) Murder | <input type="checkbox"/> |
| iii) Hemlock | <input type="checkbox"/> | iv) His own | <input type="checkbox"/> |

6) Water transport includes

- | | | | |
|-------------|--------------------------|------------------|--------------------------|
| i) rivers | <input type="checkbox"/> | ii) seas | <input type="checkbox"/> |
| iii) oceans | <input type="checkbox"/> | iv) all of these | <input type="checkbox"/> |


VI. Complete the crossword using the clues given below.

[6 x 1 = 6M]

Across :

- 1) Founded Missionaries of Charity.
- 2) City where Mother Teresa worked.
- 3) Fought against slavery in USA.
- 5) Fought against discrimination of blacks and Indians in South Africa.

Down :



VII. Match the following.

[5 x 1 = 5M]

- | A | | B |
|--------------|---------|---------------------------------|
| 1) ISD | () | a) Marconi |
| 2) Telegraph | () | b) International Film Festivals |
| 3) Radio | () | c) Print media |
| 4) Cinema | () | d) International calls |
| 5) Newspaper | () | e) Samuel Morse |

SUMMATIVE ASSESSMENT - II

Class - V :: Vikram Lotus General Knowledge

50

Syllabus :
Term 2 (Chapters -1, 2)
Page No. 187- 200

Time : 2½ Hours

Max.Marks: 50

Name :	Class :	Section :	Roll No.
---------------	----------------	------------------	-----------------

I. Here are some words with the letters jumbled up. Write them out correctly. The pictures will help you. [10 × 1 = 10M]



- | | |
|-----------------|--------------------|
| 1) eors | 6) satrnoaut..... |
| 2) octodr | 7) dalem |
| 3) akec | 8) arydiction..... |
| 4) amnospt..... | 9) rrowspa |
| 5) eetr | 10) rscisso |

II. Replace a single word for each of the following expressions. [6 × 1 = 6M]

- 1) Doing good or being charitable. _____
- 2) A speech delivered for the first time. _____
- 3) Acceptable to everyone. _____
- 4) Who is all powerful ? _____
- 5) A man whose wife is dead. _____
- 6) One who looks at the dark side of things. _____

Take My Help :

unanimous pessimist speech a maiden philanthropist omnipotent widower

III. Think of words with diphthongs and write them here.

[10 × 1 = 10M]

Diphthongs	Words
ai	Gain,
ae	Aesthetic,
au	Audio,
ay	Play,
ea	Clean,
ei	Height
ia	Diamond,
ie	Field,
io	Period,
owl	Bowl

IV. Rearrange the words.

[8 × 1 = 8M]

1.	PEA – An animal	_____
2.	ALMP – A kind of tree	_____
3.	LOOP – A small water body	_____
4.	SAY – A beast of burden	_____
5.	RAC – A four wheeler	_____
6.	STOP – Water containers	_____
7.	EAT – A drink	_____
8.	LOCKC – It tells us the time	_____

VI. Match the place with its description.

[8 × 1 = 8M]

- 1) A building in which beer is made.
- 2) A place where dead people are burnt.
- 3) A kitchen in a ship or an aircraft.
- 4) A place where bricks are made.
- 5) A hotel for motorists.
- 6) A hospital for the care of mentally ill people.
- 7) A place where ships are built and repaired.
- 8) A large building with thick walls, towers etc., for defence.

Take My Help :

- | | | | | | |
|--------------|---------------|------------|-------------|------------|-------------|
| 1) Motel | 2) Laboratory | 3) Kiln | 4) Inn | 5) Gallery | 6) Dockyard |
| 7) Crematory | 8) Castle | 9) Brewery | 10) Arsenal | 11) Asylum | |
