


C - 18

Vikram
Real Life
Term Book

FORMATIVE ASSESSMENT - I



Syllabus :
Term 1 (Lessons 1 & 2)
Page No's. 5 - 14

Class - III :: Vikram Real Life English

Time : 1 Hour

Max.Marks: 25

Name :

Class :

Section :

Roll No.

I. Answer the following questions.

[5 x 2 = 10M]

- 1) Who is the following footsteps ?
- 2) Where did the tortoise and the fox live ?
- 3) Why did the boy want to follow his father ?
- 4) Why did the tortoise not run back to the pond when it saw the cheetah ?
- 5) Is the boy's father is walking fast ?

II. Write the appropriate meaning for the following.

[6 x 1 = 6M]

- 1) footsteps =
- 2) curious =
- 3) lead =
- 4) crack =
- 5) pounced =
- 6) follow =

III. Write TRUE or FALSE for the following statement.

[3 x 1 = 3M]

- 1) The cheetah took the tortoise to its den. []
- 2) The fox saved the tortoise. []
- 3) The boy wants his father to walk slowly. []

IV. Fill in the blanks with the words given below.

[4 x 1 = 4M]

eat, drink, fly, look at

- 1) I cool drinks.
- 2) I samosas.
- 3) I a kite.
- 4) I different places around.

V. Write the answers given below.

[2 x 1 = 2M]

- 1) Who used to help me with my homework ?
- 2) Who used to take me to the park ?

FORMATIVE ASSESSMENT - I**25**Syllabus :
Term 1 (Lessons 1 - 3)
Page No's. 31 - 41**Class - III :: Vikram Real Life English Grammar**

Time : 1 Hour

Max.Marks: 25

Name :**Class :****Section :****Roll No.****I. Pick out nouns in the following sentences.****[5 x 1 = 5M]**

- 1) Kolkata is a big city _____ .
- 2) The girl wrote a letter _____ .
- 3) Ashok is a smart boy _____ .
- 4) Money makes many things _____ .
- 5) Akbar was a great king _____ .

II. Fill up the blanks with collective nouns. Choose the nouns from the list given below.**Pack, flock, fleet, swarm, committee****[5 x 1 = 5M]**

- 1) A collection of ships is called a _____ .
- 2) A collection of sheep is called a _____ .
- 3) A collection of flies is called a _____ .
- 4) A collection of wolves is called a _____ .
- 5) A collection of members is called a _____ .

III. Fill in the blanks with the correct form of Reflexive Pronoun.**[5 x 1 = 5M]**

- 1) Rama has hurt _____ .
- 2) He washes _____ when he gets up.
- 3) She killed _____
- 4) The prisoner hanged _____
- 5) We often deceive _____

IV. Identify the common nouns and the proper nouns in the following sentences.

[5 x 1 = 5M]

- 1) Asoka was an ideal king.
- 2) Tokyo is the capital of Japan.
- 3) Jawaharlal was the first Prime Minister.
- 4) The Krishna is a holy river.
- 5) January is the first month of the year.

V. Choose the correct verb in the brackets.

[5 x 1 = 5M]

- 1) John is (climbing / running) the hill.
- 2) The cat (catches / praises) the mice.
- 3) Clouds (take / give) us rain
- 4) The hunter (kills / meets) the lion.
- 5) The earth (moves / dances) round the sun.

FORMATIVE ASSESSMENT - ISyllabus :
Term 1 (Units 1 - 2)
Page No's. 51 - 75**Class - III :: Vikram Real Life Mathematics**

Time : 1 Hour

Max.Marks: 25

25**Name :****Class :****Section :****Roll No.****I. Do the following sums.****[5 x 2 = 10M]**

- 1) Counting in thousands write all numerals from 2250 to 8250.
- 2) Write the numeral for each number name given below.
 - a) Five thousand, four hundred thirty six.
 - b) One thousand sixteen .
- 3) Using each digit only once in the same number write the largest and the smallest numbers which form with the digits 5, 0 and 9.
- 4) Write the number names for the following numerals.
(a) 976 (b) 9008.
- 5) Arrange the following group of numerals both in the ascending and in the descending order. 7096, 9800, 6403, 900, 1650.

II. Fill in the blanks.**[5 x 1 = 5M]**

- 1) The place value of 6 in 4368 =
- 2) If is subtracted from any number, we get its immediate predecessor.
- 3) The largest two-digit number is
- 4) The smallest three-digit number is
- 5) 904 = Hundreds + Tens + ones

III. Compare the following pairs of numbers using the symbols $>$, $<$ or $=$.

[4 x 1 = 4M]

1) 4720 2702

2) 3691 3961

3) 8003 8003

4) 2675 2567

IV. Write the number which comes between.

[3 x 1 = 3M]

1) 899 901

2) 75 77

3) 128 130

V. Complete the following pattern.

[3 x 1 = 3M]

1) 35, 40, 45 , _____, _____, _____, _____.

2) 150, 160, 170 , _____, _____, _____, _____.

3) 18, 20, 22 , _____, _____, _____, _____.

C - 18

Vikram
Real Life
Term Book

FORMATIVE ASSESSMENT - I

25

Syllabus :
Term 1 (Lesson 1 - 2)
Page No. 117 - 135

Class - III :: Vikram Real Life Science

Time : 1 Hour

Max.Marks: 25

Name :

Class :

Section :

Roll No.

I. Answer the following questions.

[5 x 2 = 10M]

- 1) Give five examples of man-made things.
- 2) Give three examples of non-living natural things.
- 3) What are the common features of living things ?
- 4) Why is the leaf called food factory of a plant ?
- 5) What is photosynthesis ?

II. Fill in the blanks with right words.

[4 x 1 = 4M]

stomata, animals, die, stem

- 1) have sense organs.
- 2) All living things someday.
- 3) Plants breathe through the
- 4) The grows above the ground.

III. Choose the correct answer.

[4 x 1 = 4M]

- 1) Plants take in this gas during day time ()
a) oxygen b) carbon dioxide c) both
- 2) An example for non-living thing ()
a) rose plant b) sparrow c) pen

3) The part of the plant that prepares food for the plant is ()

- a) fruit b) stem c) leaves

4) Flowers help the plant to ()

- a) prepare food b) reproduce c) suck water from soil

IV. Write True or False for the following.

[3 x 1 = 3M]

1) Only green plants make their own food. []

2) Plants are non-living things. []

3) Flowers are called food the factories of a plant. []

V. Match the following.

[4 x 1 = 4M]

1) Stomata a) absorb water from soil ()

2) Dogs b) babies ()

3) Roots c) puppies ()

4) Human beings d) tiny pores present in leaves ()

C - 18

Vikram
Real Life
Term Book

FORMATIVE ASSESSMENT - I

25

Syllabus :
Term 1 (Lessons 1 - 3)
Page No's 163 - 178

Class - III :: Vikram Real Life Social Studies

Time : 1 Hour

Max.Marks: 25

Name :	Class :	Section :	Roll No.
--------	---------	-----------	----------

I. Answer the following questions.

[5 x 2 = 10M]

- 1) What is an Atlas ?
- 2) How does the Earth look like ?
- 3) Why is India called a sub-continent ?
- 4) Who was the first Indian to travel in space ?
- 5) Which countries are our neighbours on the north and the west ?

II. Fill in the blanks.

[5 x 1 = 5M]

- 1) The Earth revolves round the
- 2) Longitudes help us in calculating also.
- 3) The desert in India is
- 4) Our neighbours on the east are
- 5) Our country is in the continent.

III. Write True or False for the following.

[5 x 1 = 5M]

- 1) Pakistan is our neighbour in the east. []
- 2) The sun revolves round the Earth. []
- 3) The area beyond the Earth and the atmosphere is known as space. []
- 4) A sea is bigger than an ocean. []
- 5) India is the seventh largest country in the world. []

IV. Match the following

[5 x 1 = 5M]

(A)

(B)

- | | | |
|------------------------|-------------------------|-----|
| 1) South | a) Islands | () |
| 2) Andaman and Nicobar | b) Bottom side of a map | () |
| 3) Continent | c) Moderate climate | () |
| 4) Cauvery | d) Africa | () |
| 5) Coastal plains | e) River | () |

FORMATIVE ASSESSMENT - I

25

Syllabus :
Term 1 (Chapter - 1)
Page No's 211 - 222

Class - III :: Vikram Real Life General Knowledge

Time : 1 Hour

Max.Marks: 25

Name :	Class :	Section :	Roll No.
---------------	----------------	------------------	-----------------

I. Name these Reptiles.


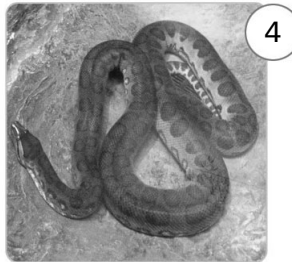


[5 x 1 = 5M]



1) 2) 3)..... 4)..... 5).....

II. Identify the following animals and write their names.

[5 x 1 = 5M]



- Largest snake
- Tallest animal
- Largest animal of the sea
- Largest animal of the cat family
- Largest land animal


III. State whether the following statements are true or false.

[5 x 1 = 5M]

- 1) Dinosaurs were as heavy as Ten Elephants. []
- 2) Some of them were as tiny as a chicken. []
- 3) Dinosaurs have become extinct. []
- 4) Dinosaurs laid eggs. []
- 5) Some were meat – eaters. []

IV. Match the animal to its right description.



[6 x 1 = 6M]



- People use me to carry heavy logs in the forests.
- I can walk miles and miles in the desert. I am called the ship of the desert.
- People call me the friend of a farmer.
- The washer men and others use me to carry loads.
- You find me mostly in villages. I pull carts.
- I am the better's favourite. I run the race.

V. Name these aquatic animals.

[4 x 1 = 4M]



- 1)
- 2)
- 3)
- 4)

Help Box

Octopus, Shark, Puffer Fish, Dolphin
