

C - 18

Vikram
Real Life
Term Book

FORMATIVE ASSESSMENT - II

Syllabus :
Term 1 (Lessons 3)
Page No's. 15 - 20

Class - III :: Vikram Real Life English

Time : 1 Hour

Max.Marks: 25

25

Name :

Class :

Section :

Roll No.

I. Answer the following questions.

[5 x 2 = 10M]

- 1) What did Mrs. Gupta tell Manish ?
- 2) How many phone conversations did you find in the lesson ?
- 3) a) In phone call 1 who called ?
b) In phone call 2 who received the call ?
- 4) Why did Mrs. Gupta speak to Manish ?
- 5) Why didn't Rohit go to school ?

II. Write the meanings the following.

[5 x 1 = 5M]

- 1) at home =
- 2) to ring =
- 3) to hold on =
- 4) return =
- 5) call back =

III. Write True or False in the box given against each statement.

[5 x 1 = 5M]

- 1) Manish works in a bank.
- 2) Rohit's father is Mr.Manish.
- 3) Rohan didn't go to school.
- 4) Rohan is going to Rohit's house to tell about the homework.
- 5) Mr. Gupta is coming back home late in the evening.

IV. Write the following sentences in three different ways.

[2 x 2½= 5M]


1) I want to talk to Rajan.

Ans.
.....
.....

2) I want to play in the garden.

Ans.
.....
.....

FORMATIVE ASSESSMENT - II



Syllabus :
Term 1 (Lessons 4 - 6)
Page No's. 42 - 47

Class - III :: Vikram Real Life English Grammar

Time : 1 Hour

Max.Marks: 25

Name :	Class :	Section :	Roll No.
--------	---------	-----------	----------

I. Fill in the blanks with suitable prepositions. [5 x 1 = 5M]

- 1) Jack and Jill went to fetch a pail _____ water.
- 2) He hid _____ the door.
- 3) We cannot live _____ water.
- 4) The little girl sat _____ a tree.
- 5) Humpty Dumpty sat _____ a wall.

II. Pick out adverbs in the following sentences. Show to what kind of adverbs does each belong. [5 x 1 = 5M]

- 1) They rose early.
- 2) He is old enough to know all these things.
- 3) These mangoes are quite ripe.
- 4) He is far better now.
- 5) Walk backward.

III. Pick out Adjectives of Number or Quantity in the following sentences.[5 x 1 = 5M]

- 1) He showed great patience.
- 2) Some mangoes are sour.
- 3) He has lost all his wealth.
- 4) He demanded a half share in the property.
- 5) She has little intelligence.

IV. Pick out Adverbs of place in the following sentences :

[5 x 1 = 5M]

- 1) The bus does not stop here.
- 2) He looked up.
- 3) They ran down the street.
- 4) It is raining outside.
- 5) Don't go too far.

V. Pick out the possessive and Interrogative Adjectives in the following sentences.

[5 x 1 = 5M]

- 1) What time is it ?
- 2) Which way shall we go ?
- 3) This boy is my brother.
- 4) Which is your pen ?
- 5) Whose shoes are these ?

Name :**Class :****Section :****Roll No.****I. Do the following sums.****[3 x 2 = 6M]****1) Add the following.**

a) Th H T O 1 3 2 4 1 0 5 2 + 2 1 1 3 _____ _____ _____ _____	b) Th H T O 2 4 7 3 3 5 6 4 + 9 7 8 _____ _____ _____ _____
--	--

2) Subtract the following :

a) 3 4 0 0 - 1 8 0 0 _____ _____ _____	b) 4 5 6 0 - 3 5 7 0 _____ _____ _____
--	--

3) Add the difference between 4251 and 2649 to 976.

II. Do the following sum.**[1 x 4 = 4M]**

In a school the number of girl students is 326. If the number of boys in the school is 132 more than the number of girls, find the number of boys and the total number of students in the school.

III. Fill in the boxes.**[7 x 1 = 7M]**

1) $5200 + \square = 2700 + 5200$

2) $3479 - 3479 = \square$

3) $1496 + 1278 = \square + 1496$

4) $0 + 1728 = \square$

5) $\square - 0 = 1976$

6) $1675 + \square = 1675 + 4125$

7) $1234 - 0 = \square$

IV. Fill in the following blanks without actual addition.

[2 x 2 = 4M]

1) $(1200 + 1680) + 1760 = (1760 + \underline{\hspace{2cm}}) + 1200$

2) $3750 + (\underline{\hspace{2cm}} + 2380) = (3750 + 0) + 2380.$

V. Arrange each set of numbers given below in the descending order and find their sum.

[2 x 2 = 4M]

1) 1600, 1760, 1440

2) 2300, 2320, 2200

C - 18

Vikram
Real Life
Term Book

FORMATIVE ASSESSMENT - II

Syllabus :

Class - III :: Vikram Real Life Science

Term 1 (Lessons 3 - 4)

Page No's. 136 - 152

Time : 1 Hour

Max.Marks: 25

25

Name :

Class :

Section :

Roll No.

I. Answer the following questions.

[5 x 2 = 10M]

- 1) Name the types of feathers.
- 2) What type of teeth are found in plant-eating animals ?
- 3) What are omnivores ? Give two examples.
- 4) What are the differences between the grass-eating and flesh-eating animals ?
- 5) What is the use of the tail for a bird ?

II. Fill in the blanks with right words.

[4 x 1 = 4M]

carnivores, boat, swallows, proboscis

- 1) A frog _____ its prey in whole.
- 2) Flesh-eating animals are called _____.
- 3) A bird's body is shaped like a _____ .
- 4) Butterfly sucks nectar with the help of its _____ .

III. Choose the correct answer.

[4 x 1 = 4M]

- 1) Crow and sparrow are ()
a) perching birds b) wading birds c) preying birds
- 2) A flightless bird ()
a) ostrich b) hen c) crane

3) Which one of the following is a herbivore ? ()

- a) vulture b) bear c) cow

4) Animal that sucks the blood of other animals. ()

- a) tiger b) bear c) leech

IV. On the basis of food habits circle the animal that does not belong to the group.

[3 x 1 = 3M]

1) Leech, mosquito, vulture, butterfly.

2) Frog, lizard, butterfly, snake.

3) Giraffe, zebra, rabbit, wolf.

V. Match the following.

[4 x 1 = 4M]

- | | | |
|-----------|----------------------|---|
| 1) Tiger | <input type="text"/> | a) chews the cud |
| 2) Cow | <input type="text"/> | b) Tears off the flesh, chew and then swallow |
| 3) Snake | <input type="text"/> | c) traps the insects |
| 4) Spider | <input type="text"/> | d) swallows its prey without chewing |

C - 18

Vikram
Real Life
Term Book

FORMATIVE ASSESSMENT - II

Syllabus :
Term 1 (Lessons 4 - 6)
Page No's. 179 - 197

Class - III :: Vikram Real Life Social Studies

Time : 1 Hour

Max.Marks: 25

25

Name :

Class :

Section :

Roll No.

I. Answer the following questions.

[5 x 2 = 10M]

- 1) What is the capital city of Telangana ?
- 2) What is the capital city of Andaman and Nicobar Islands ?
- 3) What are the boundaries of Karnataka ?
- 4) Name some important fruits available in our country.
- 5) What kind of dress is worn by men in our country ?

II. Fill in the blanks.

[5 x 1 = 5M]

- 1) Orissa is on the _____ of Andhra Pradesh.
- 2) The Capital city of Uttar Pradesh is _____ .
- 3) Cloth is produced in _____ .
- 4) _____ is called the garden city.
- 5) Coconut oil is used for _____ .

III. Write True or False.

[5 x 1 = 5M]

- 1) Andhra Pradesh is the fifth largest state in India. ()
- 2) Apples are not available in India. ()
- 3) The Capital city of Haryana is Chandigarh. ()
- 4) In India all are vegetarians. ()
- 5) Union Territories are under the control of State Governments. ()

IV. Match the following.

[5 x 1 = 5M]

- | | | |
|-----------------------------------|-------------------|--------|
| 1) Woollen clothes | a) Andhra Pradesh | () |
| 2) Pyjama – Kurtha | b) Karnataka | () |
| 3) The Granery of the South | c) Men's dress | () |
| 4) Famous for Sandalwood products | d) Panaji | () |
| 5) Goa | e) Kashmir | () |

Name :**Class :****Section :****Roll No.****I. Name the kind of plant on the basis of its description.****[7 x 1 = 7M]**

- 1) Pitcher Plant This plant grow bushy. a.
- 2) Lotus These plants are usually less than one metre in height b.
- 3) Rose Plant The plants have weak stems. c.
- 4) Water Melon These plant creep on the ground. d.
- 5) Grapes These plants bear thorns. e.
- 6) Tomato These are water plants. f.
- 7) Jasmine Plant These are insect-eating plants. g.

**II. Fill in the blanks.****[9 x 1 = 9M]**

1) Trees give us



2) Trees give us



3) Trees gives us



4) Trees give us



5) Trees give us



6) Trees gives us



7) Trees give us




8) Trees give us



9) Trees gives us



III. Plants grow in different kinds of soil. Look at the plants and write where they grow best. [5 x 1 = 5M]



Mango tree



Date palm



Banyan tree



Sea weeds



Water lily

Help Box

Desert, Plains, sea, fresh water, swamps

IV. Name the spices and beverages. [4 x 1 = 4M]

1)




2)



3)



4)



Help Box

Black pepper, Cloves, Coriander, Tea Leaves
