

C - 18

Vikram
Real Life
Term Book

FORMATIVE ASSESSMENT - I

Syllabus :

Term 1 (Lessons 1 & 2)

Class - IV :: Vikram Real Life English

Page No. 5 - 15

Time : 1 Hour

Max.Marks: 25

25

Name :

Class :

Section :

Roll No.

I. Answer the following questions.

[5 x 2 = 10M]

1) How did the crane carry the crab ?

A) _____

2) Where was the old woman going ?

A) _____

3) What was the old woman doing ?

A) _____

4) Did the crane eat the crab ?

A) _____

5) Where was the lake located ?

A) _____

II. Read the following and write TRUE or FALSE in each box.

[3 x 1 = 3M]

1) The crane showed a new lake to the first fish.

[]

2) The old woman sweeps cobwebs in the sky.

[]

3) There were not many fish and crabs in the lake.

[]

III. Write the appropriate meaning for the following.

[3 x 1 = 3M]

1) beak = _____

2) cobweb = _____

3) agreed = _____

IV. Write the opposites for the following.

[3 x 1 = 3M]

1) under × _____

2) high × _____

3) up × _____

V. Fill in the blanks with the following words.

[6 x 1 = 6M]

tastier, happier, taller, shorter, heavier, brighter

1) This star is bright. That star is _____

2) Renu is short. Venu is _____

3) I am tall. But my brother is _____

4) Preeti is happy. Sethu is _____

5) This curry is tasty. Sambar is _____

6) His bag is heavy. My bag is _____

FORMATIVE ASSESSMENT - I**25**

Syllabus :

Class - IV :: Vikram Fundamentals of English Grammar

Term 1 (Lessons 1 - 3)

Page No. 37 - 49

Time : 1 Hour

Max.Marks: 25

Name :**Class :****Section :****Roll No.**

I. Here are some nouns given. Pick up the appropriate word and fill up the blanks.

[5 x 1 = 5M]

sailor, teacher, pilot, puppy, zoo

- 1) A person who teaches children is a _____
- 2) A place where animals are kept is a _____
- 3) A person who flies an aeroplane is a _____
- 4) A person who works on a ship is a _____
- 5) A baby dog is called a _____

II. Fill in the blanks with suitable pronouns.

[5 x 1 = 5M]

- 1) Sunil bought five balloons _____ brought _____ home.
- 2) Sarala and Madhavi are good friends. _____ like dancing. _____ like playing tennis also.
- 3) You have a name. What is _____ ?
- 4) I asked Gopal to put my books on the table. See whether _____ has done it. No, _____ did not put _____ there.
- 5) Did Ashok attend school yesterday ? yes, _____ did. What about Sita ? _____ was absent.

III. Fill in the blanks with the Abstract Nouns formed from words given in the brackets.

[5 x 1 = 5M]

- 1) We all love _____ (honest).
- 2) The elephant is an animal of great _____ (strong).
- 3) We should always speak _____ (true).
- 4) It is a flower of great _____ (beautiful).
- 5) Without health there is no _____ (happy).

IV. Fill in the blanks with Reflexive pronouns.

[5 x 1 = 5M]

- 1) You have to express _____ clearly.
- 2) The boys hurt _____.
- 3) He poisoned _____.
- 4) They enjoyed _____.
- 5) We deceived _____.

V. Join the following pairs of sentences with a relative pronoun.

[5 x 1 = 5M]

- 1) The child is dead. I saw the child yesterday.
- 2) We met a girl. The girl had lost her way.
- 3) I know a man. The man has been to the States.
- 4) I know the man. He stole my bicycle.
- 5) Here is the doctor. He cured me of malaria.

C - 18

Vikram
Real Life
Term Book

FORMATIVE ASSESSMENT - I

Syllabus :

Term 1 (Units 1 & 2)

Page No. 59 - 92

Class - IV :: Vikram Real Life Mathematics

Time : 1 Hour

Max.Marks: 25

25

Name :

Class :

Section :

Roll No.

I. Do the following sums.

[5 x 2 = 10M]

1) Arrange the numerals given below in the decreasing order of numbers.

a) 9099, 90009, 99009, 9900.

b) 11200, 12001, 12010, 20101.

2) Rewrite 1178365 in the expanded form.

3) Find the prime factorization of 108. Use factor Tree Method.

4) Write the numeral for the number one less than one lakh and write its number name.

5) Find all odd numbers between 30 and 50.

II. Fill in the blanks.

[5 x 1 = 5M]

1) 10 millions make _____ crore.

2) The smallest of the even numbers is _____

3) A prime number has exactly _____ factors.

4) The place value of 6 in 36924 is _____

5) Zero is a multiple of _____

III. Choose the correct answer and write the letter of the correct answer in the box.

[5 x 1 = 5M]

- 1) One crore is equal to _____ millions.
- A) 10 B) 100 C) 1000 D) 1
- 2) If 5 is a factor of 30, then the other factor is
- A) 25 B) 35 C) 150 D) 6
- 3) A factor of 32 among the following is
- A) 8 B) 7 C) 6 D) 5
- 4) A factor of 18 among the following is
- A) 4 B) 5 C) 6 D) 8
- 5) The immediate successor of the largest 5-digit number is
- A) 10,000 B) 100000 c) 100001 d) 99999

IV. Write (T) for True and (F) False statements.

[5 x 1 = 5M]

- 1) There is no prime number which is even.
- 2) Zero is a factor of every number.
- 3) Any prime number has at least 3 factors.
- 4) 12 is a composite number because 12 has 6 factors.
- 5) 10×15 is not a multiple of 30.

C - 18

Vikram
Real Life
Term Book

FORMATIVE ASSESSMENT - I

Syllabus :

Class - IV :: Vikram Real Life Science

Term 1 (Lessons 1 & 2)

Page No. 135 - 150

Time : 1 Hour

Max.Marks: 25

25

Name :

Class :

Section :

Roll No.

I. Answer the following questions.

[5 x 2 = 10M]

- 1) What are the most important food items we get from plants ?

- 2) What is photosynthesis ?

- 3) Why do animals and human beings depend on plants ?

- 4) How do you test for starch ?

- 5) What materials do plants use to make their food ?

II. Fill in the blanks with suitable words.

[4 x 1 = 4M]

- 1) Nagarjuna and Charaka were the ancient experts in _____.
- 2) The leaves are green due to the presence of _____.
- 3) The tiny opening on the surface of the leaves are called _____.
- 4) _____ is called the 'Ship of the Desert'.

III. Choose the correct answer and write the letter of the correct answer in the box.

[4 x 1 = 4M]

- 1) Medicine for malaria is prepared from
- A) neem tree B) castor seeds C) cinchona
- 2) The solution used to test the starch is
- A) Iodine B) Tincture C) Both A and B
- 3) Paper is made of
- A) teak B) neem C) bamboo
- 4) This oil is used as a purgative.
- A) eucalyptus oil B) castor oil C) coconut oil

IV. Write True or False for the following.

[3 x 1 = 3M]

- 1) Wool is also made from the hair of the yak.
- 2) All plants do not produce flowers.
- 3) Eggs are rich in proteins.

V. Match the following.

[4 x 1 = 4M]

- 1) Tap root system a) drink
- 2) Fibrous root system b) medicine
- 3) Cinchona c) main root with small roots
- 4) Coffee d) group of small roots

C - 18

Vikram
Real Life
Term Book

FORMATIVE ASSESSMENT - I

Syllabus :

Class - IV :: Vikram Real Life Social Studies

Term 1 (Lessons 1 - 3)

Page No. 173 - 188

Time : 1 Hour

Max.Marks: 25

25

Name :

Class :

Section :

Roll No.

I. Answer the following questions.

[5 x 2 = 10M]

- 1) Why is South India called a peninsula ?
- 2) What is a Delta ?
- 3) Where do the northern plains lie ?
- 4) What are the five major physical regions of India ?
- 5) What is the extent of the Himalayas in India ?

II. Fill in the blanks.

[5 x 1 = 5M]

- 1) The word "Himalaya" means _____
- 2) _____ is the second most populous country in the world.
- 3) India is the _____ largest country in the world.
- 4) _____ is the highest peak in the world.
- 5) The Indian woman who conquered Mount Everest was _____.

III. Write True or False for the following.

[5 x 1 = 5M]

1) The second highest peak K₂ or Godwin Austin is in India.

2) The Himalayas are the highest mountain ranges in the world.

3) There are four parallel ranges in the Himalayas.

4) The Himalayas are wider in the west than in the east.

5) The Greater Himalayas are also called the Himachal.

IV. Match the following.

[5 x 1 = 5M]

1) Punjab and Haryana Plain

a) Assam

2) The Lakshadweep Islands

b) Beas and Sutlej

3) Food Bowl of India

c) Arabian Sea

4) Palk Strait

d) Northern Plains

5) Brahmaputra Plain

e) India and Sri Lanka

FORMATIVE ASSESSMENT - I

Syllabus :





Class - IV :: Vikram Real Life General Knowledge

Term 1 (Chapters 1 & 2)

Page No. 211 - 225

Time : 1 Hour

Max.Marks: 25

25**Name :****Class :****Section :****Roll No.****I. Identify the following animals and write their names.****[5 x 1 = 5M]**








- 1) Fastest Running Animal _____
- 2) Largest Fish _____
- 3) Smallest Bird _____
- 4) Largest Land Animal _____
- 5) Fastest Flying Insect _____

II. Where are the following parks and wildlife sanctuaries located ?**[6 x 1 = 6M]**

Assam, Kerala, Madhya Pradesh, West Bengal, Rajasthan, Uttaranchal
--

- 1) Ranthambore Tiger sanctuary _____
- 2) Manas Tiger sanctuary _____
- 3) Jaldapara sanctuary _____
- 4) Periyar sanctuary _____
- 5) Kanha National Park _____
- 6) Corbett National Park _____

III. How much do you know about the leafy leaves ? Look and name them. [7 x 1 = 7M]

1)		_____	2)		_____
3)		_____	4)		_____
5)		_____	6)		_____
7)		_____			

IV. Fill in the blanks with the name of the plant. [7 x 1 = 7M]

- 1) Pines, firs, spruce belong to this category of trees.
- 2) Pandas live by eating leaves of this plant.
- 3) This tree has no branches.
- 4) The wood of this tree is used to make cricket bats.
- 5) The wood of this tree is very good for making furniture.
- 6) This tree gives fruits that are long in shape and very sour.
- 7) The leaves of this plant form the main food of the silk worm.
