

| Name : | Class : | Section : | Roll No. |
|--------|---------|-----------|----------|
|--------|---------|-----------|----------|

I. Answer the following questions.

[5 x 2 = 10M]

- 1) How did the monkey escape ?
- 2) Do you think the child is happy in the village ? Why do you think so ?
- 3) How did the crocodile plan to bring the monkey home ?
- 4) What was the dog doing on the Christmas eve ?
- 5) What did the tiny man promise Ken to do ?

II. Write the appropriate meaning for the following.

[3 x 1 = 3M]

- 1) Bank =
- 2) Scared =
- 3) Shocked =

III. Write True (or) False for the following statement.

[3 x 1 = 3M]

- 1) The crocodile lived on the banks of the river. []
- 2) The child wishes to see bright twinkling stars. []
- 3) Ken did not want to help the tiny man. []

IV. Match the following.

[4 × ½ = 2M]

- | A | B |
|-------------------------|---------------------------------|
| 1) If you work hard, | he'll run away |
| 2) If you run fast, | We'll get a holiday |
| 3) If he sees a dog, | You'll win the race |
| 4) If it rains heavily, | You'll get 1 st rank |

V. Use the words in the box to complete the sentences given below. [4 x 1 = 4M]

quiet, birds, bright, flowers, tall, twinkling, wood, lonely

- 1) The lights in the streets of a town are _____. When we look down from an aeroplane the lights appear _____.
- 2) My house is near a _____. Every morning I hear chirping sounds of the _____ and smell sweet fragrance of _____.
- 3) The buildings in the towns are _____.
- 4) I was walking down the street in a village and felt _____. The streets in the village are very _____ in the afternoons.

VI. Complete the following sentences using the clues given. [3 x 1 = 3M]

- 1) I wish _____ (you had a small bicycle)
- 2) I wish _____ (you got a first rank in the class)
- 3) I wish _____ (your father bought a computer for you)

C - 18

Vikram
Real Life
Term Book

FORMATIVE ASSESSMENT - III

Syllabus :
Term 2 (Lessons 1 - 5)
Page No's. 33 - 44

Class - III :: Vikram Real Life English Grammar

Time : 1 Hour

Max.Marks: 25

25

| Name : | Class : | Section : | Roll No. |
|--------|---------|-----------|----------|
|--------|---------|-----------|----------|

I. Fill in the blanks with suitable articles a, an or the : [5 x 1 = 5M]

- 1) Sri Lanka is _____ island.
- 2) Delhi is _____ capital of _____ India.
- 3) French is _____ easy language.
- 4) Copper is _____ useful metal.
- 5) Let us discuss _____ matter seriously.

II. Arrange the following groups of words in proper order to make them sentences.
giving full meaning. [5 x 1 = 5M]

- 1) Podger hangs uncle picture a
- 2) Krishna of the Vijayawada banks is on the
- 3) She church pray to went to
- 4) tree fell apple from the the
- 5) rises east sun in the the

III. Match the following subjects with their predicates. [5 x 1 = 5M]

- | | | |
|--------------|-----|------------------------|
| 1) The earth | () | a) lays eggs |
| 2) Apples | () | b) run fast |
| 3) Birds | () | c) moves round the sun |
| 4) Hens | () | d) fall on the ground |
| 5) The hare | () | e) fly in the air |

IV. Change the following sentences into plural sentences.

[5 x 1 = 5M]

- 1) The cat killed a mouse.
- 2) The dog ran after the thief.
- 3) The lady is watching a picture.
- 4) The baby is crying for milk.
- 5) The child is eating an apple.

V. Rewrite the following sentences changing the gender of the nouns in italics. Make other necessary changes also.

[5 x 1 = 5M]

- 1) The Headmaster punished the boys for their misbehaviour.
- 2) The washerman and the maidservant gave their master a lot of trouble.
- 3) The wife told her husband not to quarrel with the gentleman.
- 4) My grandfather along with his brother will be visiting us tomorrow.
- 5) The king ordered his men to bring him milk.

Name :**Class :****Section :****Roll No.****I. Do the following sums.****[3 x 2 = 6M]**

1) Write the Roman numeral corresponding to each of the following Hindu-Arabic numerals.

a) 4 b) 19 c) 26 d) 31

2) Find the quotient and remainder.

a) $236 \div 10$ b) $906 \div 3$

3) Write the next 4 odd numbers which come after 75.

II. Do the following sum.**[1 x 4 = 4M]**

In a school 108 benches were put equally in 9 rooms. How many benches were put in each room ?

III. Fill in the blanks.**[5 x 1 = 5M]**

1) The sum of two odd numbers is _____ .

2) If one is added to an odd number, we get an _____ number.

3) If one is subtracted from an even number, we get an _____ number.

4) $8 \div 8 =$ _____ .5) $3 \div 1 =$ _____ .**IV. Write division facts for the following.****[2 x 1 = 2M]**1) $2 \times 8 = 16$ 2) $3 \times 9 = 27$ **V. Put the correct sign 'x' or '÷' in the following.****[3 x 1 = 3M]**

1) $10 \square 2 = 5$

2) $1 \square 7 = 7$

3) $24 \square 8 = 3$

VI. Match the following.

[5 x 1 = 5M]

1) IX () a) 18

2) XII () b) 9

3) VI () c) 12

4) XVIII () d) 21

5) XXI () e) 6

C - 18

Vikram
Real Life
Term Book

FORMATIVE ASSESSMENT - III

25

Syllabus :
Term 2 (Lessons 1 - 3)
Page No's. 121 - 143

Class - III :: Vikram Real Life Science

Time : 1 Hour

Max.Marks: 25

Name :

Class :

Section :

Roll No.

I. Answer the following questions.

[5 x 2 = 10M]

- 1) What are a child's first teeth called ?
- 2) How can you keep your teeth healthy ?
- 3) How is the circulatory system useful to us ?
- 4) How do proteins help us ?
- 5) What gives shape to our body ?

II. Fill in the blanks with right words.

[4 x 1 = 4M]

canines, heart, rotten, carbohydrates

- 1) _____ is the main organ of the nervous system.
- 2) Teeth used for tearing food are called _____ .
- 3) Do not eat _____ fruits.
- 4) Cereals are rich sources of _____ .

III. Choose the correct answer.

[4 x 1 = 4M]

- 1) Front teeth help us in _____ ()
a) cutting b) tearing c) grinding
- 2) We have _____ sense organs. ()
a) three b) four c) five

3) Milk is a ()

- a) carbohydrate b) protein c) complete food

4) A new born child has ()

- a) no teeth b) 20 teeth c) 32 teeth

IV. Write True or False for the following statement.

[3 x 1 = 3M]

1) Permanent set consists of 26 teeth. []

2) Milk set consists of 20 teeth. []

3) Cereals and oils do not give us energy. []

V. Match the following.

[4 x 1 = 4M]

1) Wheat () a) cutting teeth

2) Water () b) temporary teeth


3) Milk teeth () c) Cereal

4) Incisors () d) helps in digestion

C - 18

Vikram
Real Life
Term Book

FORMATIVE ASSESSMENT - III



Syllabus :
Term 2 (Lessons 1 - 5)
Page No's. 154 - 180

Class - III :: Vikram Real Life Social Studies

Time : 1 Hour

Max.Marks: 25

25

| Name : | Class : | Section : | Roll No. |
|--------|---------|-----------|----------|
|--------|---------|-----------|----------|

I. Answer the following questions.

[5 x 2 = 10M]

- 1) Write about the important postal services.
- 2) What taxes are collected by Municipalities ?
- 3) What is an occupation ?
- 4) What are the means of road transport ?
- 5) How is the doctor helpful to us ?

II. Fill in the blanks.

[5 x 1 = 5M]

- 1) The head of the Municipal Committee is
- 2) Trains travel on
- 3) E-mail means mail.
- 4) The weave clothes.
- 5) The teacher trains the pupils to become good

III. Write True or False for the following statement.

[5 x 1 = 5M]


- 1) There should be at least one woman member in a panchayat. []
- 2) A bird is treated by a veterinary doctor. []
- 3) Air transport is cheap. []
- 4) The cart was used after the invention of the wheel. []
- 5) Every village in our country has a hospital. []

IV. Match the following.

[4 x 1 = 4M]

1) Desert

() a)




2) Sea

() b)




3) Forest

() c)



4) Village

() d)



5) Sky

() e)



Name :**Class :****Section :****Roll No.**

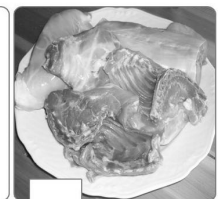

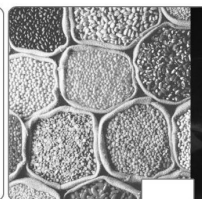


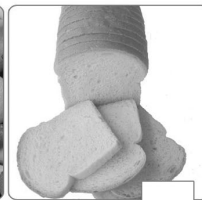

I. Name the great men of science who invented the following : [5 x 1 = 5M]

- He was an American inventor. He invented Electric Light Bulb.
- This Scottish born American Scientist invented Telephone.
- This Scottish Engineer invented the first Steam Engine.
- This German Professor made the first Helicopter.
- This English Surgeon was the first to use antiseptics to prevent infections during operations.

Help Box

1. Joseph Lister 2. Heinriche Focke
3. James Watt 4. Graham Bell 5. Thomas Alva Edison

II. Look at the food items. Write B for body building foods, E for energy giving foods and P for Protective foods. [12 x 1/2 = 6M]




III. Answer the following questions.

[6 x 1 = 6M]

- 1) is the largest planet in the Solar System.
- 2) A galaxy is the collection of
- 3) is also known as the 'red planet'.
- 4) is the farthest planet from the Sun.
- 5) is the planet that has rings around it.
- 6) is the planet that takes the longest to rotate around the sun.

IV. Identify and name these Men of Science.

[5 x 1 = 5M]



- 1)
- 2)
- 3)
- 4)
- 5)

Help Box

Vikram Sarabhai
Kalpana Chawla

S.C. Bose
A.P.J. Abdul Kalam

Srinivasa Ramanujan

V. Identify the following pictures and name them.

[3 x 1 = 3M]



Write your answers here.

1)

2)

3)



Hills, Mountain, Water fall
