

C - 18

Vikram
Real Life
Term Book

SUMMATIVE ASSESSMENT - III

Syllabus :
Term 3 (Lessons 1 - 4)
Page No. 3 - 30

Class - V :: Vikram Real Life English

Time : 2½ Hour

Max.Marks: 50

50

Name :

Class :

Section :

Roll No.

I. Answer the following questions.

[5x 3 = 15M]

- 1) What was the first reaction of Rip Van Winkle after he got up after the long sleep ?
- 2) What is mountaineering ? What is it also called ?
- 3) Who are the opponents in the mountaineering ?
- 4) What things can the mountain do, which the squirrel cannot do ?
- 5) Where is the Buddha statue ? How can we reach there ?

II. Read the following and write "TRUE" or "FALSE".

[5 x 1 = 5M]

- 1) Rip Van Winkle was loved by everyone. ()
- 2) Mountaineers stop at different summits before reaching the highest summit. ()
- 3) Rahul spent his holidays in Hyderabad. ()
- 4) All mountains are steep. ()
- 5) Rahul and Sonu are friends. ()

III. Write the following meanings.

[5 x 1 = 5M]

- | | | | |
|----------------|---------|-------------|---------|
| 1) willing | = _____ | 4) heart | = _____ |
| 2) adventurous | = _____ | 5) fountain | = _____ |
| 3) talent | = _____ | | |

IV. From the following table, make as many meaningful sentences as possible.

[10 x 1 = 10M]

It is difficult	for	me	to reach the top of the mountain.
It is easy		him	to pass the final exam.
		her	to solve this problem.
		them	to score 50 runs in the match.
			to cover my books.

V. Rewrite the sentences given below.

[5 x 1 = 5M]

- 1) Sheela is not so beautiful as Vineela.
- 2) My friend is not so tall as I.
- 3) Hyderabad is not so cool as Ooty.
- 4) You are not so small as I.
- 5) The tea is not so hot as the coffee.

VI. Write five sentences as shown in the example.

[5 x 1 = 5M]

Example : If I had worked hard, I would have got good marks in the examination.

- 1) If _____
- 2) If _____
- 3) If _____
- 4) If _____
- 5) If _____

VII. Now complete the following table. Write the missing statement or question in each

now.

[10 x 1 = 10M]

Statement	Question
1. The boat is very big.	
2.	Is it a mini-train ?
3. There is a train in the photograph.	
4.	Are there many places around it ?
5. She is beautiful.	
6.	Are the children climbing trees ?
7. He is doing his homework	
8.	Are they watching the match ?
9. She was absent yesterday	
10.	Were they dancing the whole night ?

SUMMATIVE ASSESSMENT - III**Class - V :: Vikram Fundamentals of English Grammar****Time : 2½ Hour****Max.Marks: 50****50**

Name :	Class :	Section :	Roll No.
--------	---------	-----------	----------

I. Fill in the blanks with 'A, An' or The where necessary. [5x 1 =5M]

- 1) Dog is faithful animal.
- 2) Sri Lanka is Island.
- 3) John is American, David is European.
- 4) I met him year ago.
- 5) Benares is holy city.

II. Rewrite the sentences changing the verbs into the Past Tense. [5 x 1 = 5M]

- 1) I am reading a novel.
- 2) He goes to Ooty.
- 3) The boys have played well.
- 4) She takes tea.
- 5) She is dancing very well.

III. Fill in the blanks with the past tense (or) past participle of the verb given.

[5 x 1 = 5M]

- 1) She up the letter in anger. (tear)
- 2) The book a hundred rupees. (cost)
- 3) The bird has away. (fly)
- 4) I was in England. (bear)
- 5) He to talk nonsense. (begin)

IV. Fill in the blanks with the correct form of the verb in brackets.

[5 x 1 = 5M]

- 1) Fifty kilometres a great distance. (be)
- 2) Two and two four. (make)
- 3) Rama not you won the prize. (have)
- 4) Iron as well as gold found in India. (be)
- 5) The meeting chosen a president. (have)

V. Change the following into Active voice.

[5 x 1 = 5M]

- 1) She was kept waiting.
- 2) Afghanistan is being bombed by America.
- 3) My pocket has been picked.
- 4) I was refused permission by him.
- 5) By whom will he be helped ?

VI. Change the following into Indirect Speech.

[5 x 1 = 5M]

- 1) He always says, "I do not smoke".
- 2) The teacher says, "you are a very clever boy".
- 3) He said to me, " I shall do my best to help you."
- 4) She said, " I shall not go there now."
- 5) I said to her, "You are perfectly right."

VII. Punctuate the following, using capital letters where necessary.

[5 x 1 = 5M]

- 1) Many may come many may go but i go on forever
- 2) he came he saw and he conquered
- 3) where are you going dileep
- 4) Where do you live my firend asked me
- 5) boys do you know what tiger is

VIII. Read the following poem carefully.

[5 x 1 = 5M]

The mountain and the squirrel
Had a quarrel.
And the former called the latter "Little Prig".
Bun replied :
"You are doubtless very big;
But all sorts of things and weather
Must be taken in together
To make up a year
And a sphere.
And I think it no disgrace
To occupy my place.
If I'm not so large as you,
You are not so small as I,
And not half so sry,
I'll not deny you make
A very pretty squirrel track :
Talents differ all is well and wisely put.
If I cannot carry forests on my back,
Neither can you crack a nut."

Now answer the following questions.

- 1) How does the mountain ridicule the squirrel ?
- 2) What is 'Bun' ? Whom does it refer to ?
- 3) What things go to make a year and a sphere ?
- 4) What are the things that the squirrel can do which the mountain cannot ?
- 5) Is there any moral conveyed through the poem ? If yes, what is it ?

IX. Writing a letter to your friend inviting him/her to your birthday party. [1 x 5 = 5M]

X. Study the pictures and hints. Develop the hints into stories with the help of the pictures. [1 x 5 = 5M]

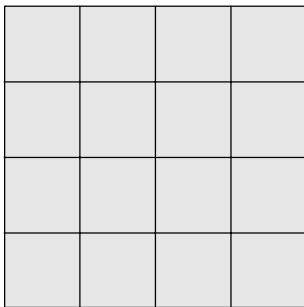


Hints : A priest – buys a kid for sacrifice – on the way, a thief wonders – the priest carrying a dog – priest ignores him – a second thief comes – repeats the words of the first thief – priest gets doubtful – then a third thief – follows the other thieves – priest believes their words – leaves the kid – goes his way – The three thieves take away the kid – had a good feast – three crafty thieves prove themselves smart and clever.

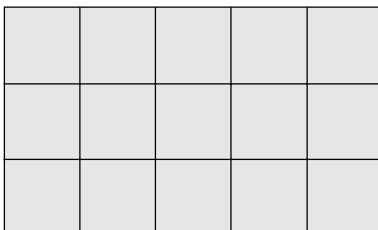
Name :**Class :****Section :****Roll No.****I. Answer the following questions.****[6 x 3 = 18M]**

- 1) 31.5 kg of tamarind is made into small packets each of which weighing 750g. Find the number of packets.
- 2) Convert the following as required 960 l into kl.
- 3) The perimeter of a square is 90cm. Find the length of each side.
- 4) Taking each small square region as 1 sqcm find the area of each of the following by counting square regions.

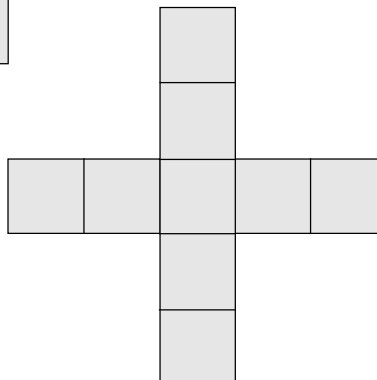
i)



ii)



iii)



- 5) 25kg of sugar costs Rs. 387.50. What is the cost of 12kg of sugar ?
- 6) Subtract the following . 60 y 5 mon – 43 y 8 mon

II. Answer any ONE of the following.**[1 x 3 = 3M]**

- 1) The cost price of a bicycle is Rs. 1650. If the dealer sells it for Rs. 1875, does he gain or lose ? By how much ?
- 2) A milkmaid has 3 cans with her containing 5.625 l, 12.750 l and 9.5 l of milk. What is the total quantity of milk, the milkmaid has ?

III. Answer any ONE of the following.**[1 x 3 = 3M]**

- 1) The side of a square garden which measures 75m. Find the cost of fencing round the garden at Rs. 9 per metre.
- 2) A school was closed for summer vacation from 23rd April and was reopened on 12th June. How long was the school kept closed for summer ?

IV. Answer any ONE of the following.**[1 x 3 = 3M]**

- 1) The length and the perimeter of a rectangular plot are respectively 45m and 140m. What is the breadth of the plot ?
- 2) A man purchased a shirting cloth of length 21m 50 cm and got 6 shirts stitched out of this. What length of cloth is needed if each shirt requires 2 m 30cm of cloth ?

V. Answer any ONE of the following.**[1 x 3 = 3M]**

- 1) Find the profit or loss in each of the following.

	Cost price	Selling Price	Profit or Loss
1.	Rs. 225	Rs. 20.0	?
2.	Rs.7.50	Rs. 11.75	?
3.	Rs.172.50	Rs.172.50	?

- 2) Convert the following as required.
 - 1) 4 min 15 sec into seconds.
 - 2) 1000 seconds into min and sec.
 - 3) 342 hours into days.

IX. Match the following.

[5 x 1 = 5M]

A

B

- | | | |
|-----------|-----|---------------|
| 1. 1 kg | () | a) 1000 cu cm |
| 2. 1m | () | b) 60 sec |
| 3. 1 hour | () | c) 7 days |
| 4. 1 lt | () | d) 1000 gms |
| 5. 1 week | () | e) 10 dm |

Name :	Class :	Section :	Roll No.
--------	---------	-----------	----------

I. Answer the following questions.

[5 x 3 = 15M]

- 1) How are sedimentary rocks formed ?
- 2) How are high tides formed ?
- 3) What is an accident ?
- 4) What is a wedge? How is it used ?
- 5) What is White Revolution ?

II. Answer any ONE of the following questions.

[1 x 5 = 5M]

- 1) How are metamorphic rocks formed ?
- 2) What immediate treatment should be given to a person bitten by snake ?

III. Answer any ONE of the following questions.

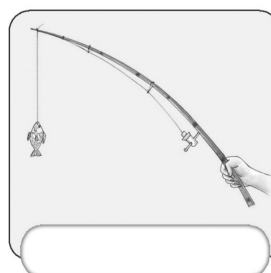

[1 x 5 = 5M]

- 1) What are the problems created by the Green Revolution ?
- 2) How did the modern man influence the nature ?

IV. Answer any ONE of the following.

[1 x 5 = 5M]

- 1) Draw the diagram of Solar eclipse.
- 2) In the following diagrams identify the lever class ?



C - 18

Vikram
Real Life
Term Book

SUMMATIVE ASSESSMENT - III

Syllabus :
Term - 3
(Lessons 1 - 6)
Page No. 183 - 214

Class - V :: Vikram Real Life Social Studies

Time : 2½ Hour

Max.Marks: 50

50

Name :	Class :	Section :	Roll No.
--------	---------	-----------	----------

I. Answer the following questions.

[5 x 2 = 10M]

- 1) Write any three objectives of the U.N.O.
- 2) In which ways is the UNICEF helping the children of the world ?
- 3) To which countries were India's peace keeping forces sent ?
- 4) What is the importance of the battles of Plassey and Buxar ?
- 5) Write about the Home Rule Movement.

II. Answer any ONE of the following questions.

[1 x 5 = 5M]

- 1) What is the importance of the Swadeshi Movement ?
- 2) Write any four human rights included in the declaration of human rights.

III. Answer any ONE of the following questions.

[1 x 5 = 5M]

- 1) Who were the leaders of our social reform movement ?
- 2) How did the revolt of 1857 start ?

IV. Answer any ONE of the following questions.

[1 x 5 = 5M]

- 1) What is the importance of the Quit India Movement ?
- 2) How did India react against the racist regime in South Africa ?

V. Choose the correct answers.

[5 x 1 = 5M]

- 1) The Rowlatt Act was ()
a) a cruel act b) a liberal act c) like by Indians
- 2) Who was known as 'Frontier Gandhi'? ()
a) Mahatma Gandhi b) Khan Abdul Gaffar Khan c) Alluri Sita Rama Raju
- 3) The immediate cause of the revolt of 1857 was ()
a) Injustice to sepoy b) Bad treatment of sepoy c) Introduction of enfield rifles

- 4) Civil Disobedience Movement was started in _____ ()
 a) 1929 b) 1942 c) 1930
- 5) The founder of Azad Hind Fauz. ()
 a) Gandhiji b) Subhash Chandra Bose c) Tilak

VI. Fill in the blanks. [10 x 1 = 10M]

- 1) World War-I ended in _____.
- 2) The President of the General Assembly is elected once in a _____ .
- 3) The magazines 'Maratha' and 'Kesari' were started by _____.
- 4) _____ of India was elected the President of the U.N. General Assembly in 1953.
- 5) Ramakrishna Mission was established by _____.

VII. Write 'True' or 'False' . [5 x 1 = 5M]

- 1) Atom bombs destroyed the cities of Hiroshima and Nagasaki. ()
- 2) Annie Besant started the Home Rule Movement. ()
- 3) India is in favour of total disarmament. ()
- 4) Indians have no faith in the principles of the U.N. ()
- 5) Ghadar Party was started in America. ()

VIII. Match the following. [5 x 1 = 5M]

- | | | |
|-----------------------------------|-----|--------------------------------------|
| 1) Arya Samaj | () | a) Rangoon (Yangon) |
| 2) Bahadur Shah | () | b) International Labour organisation |
| 3) ILO | () | c) Dayananda Saraswati |
| 4) Secretary General | () | d) 1929 |
| 5) Lahore session of the Congress | () | e) Head of the Secretariat |

IX. Write the full form of the following acronyms. [5 x 1 = 5M]

- 1) NAM _____
- 2) UNDP _____
- 3) WHO _____
- 4) UNICEF _____
- 5) UNESCO _____

SUMMATIVE ASSESSMENT - III**Class - V :: Vikram Real Life General Knowledge****Time : 2½ Hour****Max.Marks: 50****50****Name :****Class :****Section :****Roll No.****I. Pick the right word and tick it.****[10 x 1 = 10M]**

- 1) What is the number of the Vedas ? (4 / 5)
- 2) There are (600 / 700) shlokas in the Gita.
- 3) How many puranas are there ? (17 / 18)
- 4) There are (20,000 / 24,000) verses in the Ramayana.
- 5) The Mahabharata has (10,000 / 20,000) verses.
- 6) The Bible contains (65 / 66) books.
- 7) The Quran contains (114 / 115) surahs.
- 8) The Holy book of the Parsis is (the Holy Bible / Avesta)
- 9) To whom was the Gita recited first ? (Arjuna / Bhima)
- 10) How many Kandas does the Ramayana of Valmiki have ? (8 / 9)

II. Here are some countries, Capitals and currencies.**[10 × 1 = 10M]****Fill in the blanks with a right word.**

	COUNTRY	CAPITAL	CURRENCY
1.	Brazil	Brasilia	
2.	Chile		Peso
3.		Copenhagen	Krone
4.	Israel		Shekel
5.	Jordan	Amman	
6.		Nairobi	Shilling
7.	Kuwait		Dinar
8.	Malaysia	Kuala Lumpur	
9.		Mexico City	Peso
10.	Netherlands		Guilder

(Amsterdam, Mexico, Ringgit, Kuwait City, Kenya, Dinar, Jerusalem,
Denmark, Santiago, Cruzeiro Real)

III. Write the names of the games with which the following cups and trophies are associated. [10× 1 =10M]

Name of the Cup / Trophy	Associated Sport
1. Derby
2. Duleep Trophy
3. Durand Cup
4. Ezra Cup
5. Irani Trophy
6. Jaya Lakshmi Cup
7. Lady Ratan Tata Trophy
8. Prudential Cup
9. Ranji Trophy
10. Reliance Cup

IV. Name the sport / game with which these terms are associated. [10 x 1 = 10M]

TERMS	SPORTS
1. Target
2. Smash
3. Double Fault
4. Dribble
5. Pivot
6. Cue
7. Punch
8. Gambit
9. Crease
10. Free kick

V. Read the description and name them.

[5 x 1 = 5M]

(Shivaji, Ashoka, Samudra Gupta, Raja Ram Mohan Roy, Babur)

- 1) He was called the Indian Napoleon. He is _____.
- 2) He was a great Maratha Leader. He fought against the Mughal Emperor, Aurangzeb. His name is _____.
- 3) He founded the Brahma Samaj. He fought against the practice of Sati. He is _____.
- 4) He was the founder of Mughal Empire in India. He is _____.
- 5) He was the greatest Indian king. He was called Devanam Priya and Priyadarsi. He is _____.

VI. Name the period using the given information.

[5 x 1 = 5M]

- 1) This age was regarded as Golden Age for Tamil literature in the ancient period. It is _____.
- 2) This Empire brought political unity to India. It is _____.
- 3) These rulers built the town of Mahabalipuram. They are the _____.
- 4) These rulers were known for their courage and patriotism. They are the _____.
- 5) This Islamic Empire was founded by Babur. It is the _____.

Take My help

Mughal Empire, Rajputs, Pallavas, Mouryan Empire, Sangam Age
