

C - 18

Vikram  
Real Life  
Term Book

# SUMMATIVE ASSESSMENT - III

Syllabus :

Class - IV :: Vikram Real Life English

Term 3 (Lessons 1 - 5)

Page No. 5 - 37

Time : 2 1/2 Hours

Max.Marks: 50

50

Name :

Class :

Section :

Roll No.

I. Answer the following questions.

[5 x 3 = 15M]

- 1) What did the poet see there in the poem "The wood of Flowers" ?
- 2) What did the big fish say to Gopal whenever he asked for something ?
- 3) What do you think that no frog was a dunce in the lot ?
- 4) Which country has secured the highest number of gold medals ?
- 5) What kind of a boy do you think Steve is ? Do you like him ?

II. Read the following and write 'True' or 'False' in each bracket.

[5 x 1 = 5M]

- 1) One day Gopal brought home a big fish. ( )
- 2) Froggies do not follow any rules in the school. ( )
- 3) Very few countries played in the Afro - Asian Games. ( )
- 4) Samuel fell into a lake. ( )
- 5) The games were held at Hyderabad. ( )

III. Write the following meanings.

[5 x 1/2 = 2 1/2 M]

- 1) announced = \_\_\_\_\_
- 2) vest = \_\_\_\_\_
- 3) rushed = \_\_\_\_\_
- 4) replied = \_\_\_\_\_
- 5) peasant = \_\_\_\_\_

**IV. Fill in the blanks with rhyming words.**

[5 x 1 = 5M]

- 1) ground = \_\_\_\_\_
- 2) blow = \_\_\_\_\_
- 3) drive = \_\_\_\_\_
- 4) flowers = \_\_\_\_\_
- 5) gaiety = \_\_\_\_\_

**V. Read the following sentences and write who said these sentences and to who.**

[3 x 1 = 3M]

- 1) "She wants a big house and servants."
- 2) "No, I want food and a new dress everyday".
- 3) "Dear, are you happy now?"

**VI. Write the opposite words for the following.**

[4 x 1/2 = 2M]

- 1) broken × \_\_\_\_\_
- 2) clean × \_\_\_\_\_
- 3) happy × \_\_\_\_\_
- 4) rich × \_\_\_\_\_

**VII. The events in the story are given in a jumbled order below. Rearrange them in proper order.**

[2 x 1 = 2M]

- 1) Area around the lake was decorated with colour paper strings.
- 2) Steve saved the boy from drowning.

**VIII. Complete the following sentences by looking at the pictures given against each sentences.**

[3 x 1 = 3M]

- 1) There are fruits \_\_\_\_\_ the tree.
- 2) The birds are \_\_\_\_\_ the nest.
- 3) A man standing \_\_\_\_\_ the bus stop.



IX. Write a small paragraph about the way the Republic Day was celebrated in your school. [5 x 1 = 5M]

X. Complete the following sentences using the phrases given in the box. [1 x 2 = 2M]

would    pray    would    buy

- 1) Everyday he \_\_\_\_\_ god after his bath.
- 2) He \_\_\_\_\_ bicycle if he had enough money.

XI. What do you do during holidays? Write six sentences. Use the words in the box.

[1 x 2 1/2 = 2 1/2M]

sometimes always play watch go visit

XII. Let us say you have seen the event described in the Stevenson story. You want to inform your cousin about what happened at the lake. Write a letter to your cousin.

[3M]

\*\*\*\*\*



**SUMMATIVE ASSESSMENT - III**

Syllabus :

**Class - IV :: Vikram Fundamentals of English Grammar**

Term 3 (Lessons 1 - 9)

Page No. 43 - 60

Time : 2 1/2 Hours

Max.Marks: 50

**50****Name :****Class :****Section :****Roll No.****I. Fill in the blanks with 'a', 'an' or 'the' where necessary.****[5 x 1 = 5M]**

- 1) The Sun rises in \_\_\_\_\_ east.
- 2) \_\_\_\_\_ sea is rough today.
- 3) He can play \_\_\_\_\_ guitar.
- 4) Where did you buy \_\_\_\_\_ Umbrella ?
- 5) He is \_\_\_\_\_ honour to his profession.

**II. Rewrite the following sentences, filling the blanks with correct tense forms of the verbs in brackets.**

**[5 x 1 = 5M]**

- 1) When I saw him, he \_\_\_\_\_. (sleep)  
When I went to see him again, he \_\_\_\_\_ out. (go) I was disappointed.
- 2) Lila always \_\_\_\_\_ on the first bench. (sit)  
But today, she \_\_\_\_\_ on the last bench. (sit)
- 3) Many passengers \_\_\_\_\_ for the train. (wait)  
They \_\_\_\_\_ for half an hour. (wait)
- 4) I \_\_\_\_\_ to the cinema tonight. (go)  
\_\_\_\_\_ you \_\_\_\_\_ with me? (come)
- 5) We \_\_\_\_\_ to Ooty every summer. (go)  
This year we \_\_\_\_\_ for Darjeeling. (leave)

**III. Fill in the blanks with suitable Past Tense / Past Participle forms of verb.[5 x 1 = 5M]**

- 1) I have never \_\_\_\_\_ a mango before. (eat)
- 2) He has \_\_\_\_\_ in a clever manner. (act)
- 3) My uncle \_\_\_\_\_ me a present. (give)
- 4) They have \_\_\_\_\_ the rules. (break)
- 5) Luckily, the boy \_\_\_\_\_. (escape)

**IV. Read the following sentences and write True or False. [5 x 1 = 5M]**

- 1) It can run at 30 miles an hour. \_\_\_\_\_
- 2) The ostrich is really an interesting bird. \_\_\_\_\_
- 3) The ostrich eats only leaves and grass. \_\_\_\_\_
- 4) It sometimes runs in circles. \_\_\_\_\_
- 5) It swallows pebbles and stones for a change. ` \_\_\_\_\_

**V. Fill in the blanks with Comparative or Superlative Adverbs given in brackets.**

**[5 x 1 = 5M]**

- 1) He returned \_\_\_\_\_ than expected. (soon)
- 2) You can get oranges \_\_\_\_\_ than anywhere else. (cheaply)
- 3) She looks at me \_\_\_\_\_ (angrily)
- 4) He resigned his job \_\_\_\_\_ (unwillingly)
- 5) Sita speaks \_\_\_\_\_ than Gita. (eloquently)

**VI. Rewrite the following sentences changing the simple present tense verbs in the simple past tense. [5 x 1 = 5M]**

- 1) It rains all night.
- 2) He answers the letter tonight.
- 3) I hope to get a holiday.

- 4) They have plenty of time.
- 5) She works hard to pass in 1 class.

**VII. Read the following passage carefully.**

**[5 x 1 = 5M]**

Once a man moved into a new house. Soon he realised that he had two blacksmiths as neighbours one on the left and the other on the right. They were a source of big nuisance to him. Day in and day out, the blacksmiths worked with their hammers. They made such thunderous sounds that our man had lost all peace and calmness. He did not know what to do. Finally he decided to put an end to this disturbance. He called the smith on the left, gave him a hundred rupees and requested him to move into another house. The smith agreed and took the money. He promised him that he would move into a new house by next morning. Now the man called the smith on the right and begged him to move into a new house, and gave him a hundred rupees. The smith obliged and promised to do as he wished. Our man is now very happy. He thought he could get rid of the disturbance and purchase peace for just two hundred rupees. That night he slept happily.

Next morning, he was awakened by the sound of hammers. He was greatly confused. He rushed out to ask the smith why they had not moved into a new house as promised. To his shock and dismay, he found that they did keep their word but in a different way - the smith on the left moved into the house of the smith on the right, the smith on the right had moved into the vacated house of the smith on the left.

**Now Answer the following questions.**

- 1) Who are the two neighbours of the man?
- 2) They were a source of big nuisance. How ?
- 3) How did the man suffer ?
- 4) What was his plan to put an end to the disturbance ?
- 5) Can you suggest a suitable title for the passage ?

**VIII. Your uncle has sent you a costly present as your Birthday Gift. Write a letter thanking him for the gift. Tell him also how you will be benefited by the gift. [5M]**

IX. Fill in the blanks with given words to complete a story.

[10M]

kill, hurt, harm, fun, pitiful, death, pity, heaven's, boys, ashamed, threw pond, throw, stones, played, play, wounded, water.

In a village, there was a \_\_\_\_\_. It was full of \_\_\_\_\_. Many frogs lived in it. Some mischievous boys \_\_\_\_\_ daily by the pond. They used to \_\_\_\_\_ stones at the frogs. Some \_\_\_\_\_ hit the frogs, and \_\_\_\_\_ them. It was sheer \_\_\_\_\_ for the boys.

At last, an old frog said to the boys : "Boys, you're doing great \_\_\_\_\_ to us. Your stones \_\_\_\_\_ us or \_\_\_\_\_ us. It may be \_\_\_\_\_ to you. But it is \_\_\_\_\_ to us. Have \_\_\_\_\_ on us and leave us alone for \_\_\_\_\_ sake". These \_\_\_\_\_ words of the old frog moved the hearts of the \_\_\_\_\_. They felt \_\_\_\_\_ of themselves and thereafter they never \_\_\_\_\_ any stones at the frogs.

\*\*\*\*\*



C - 18

Vikram  
Real Life  
Term Book

## SUMMATIVE ASSESSMENT - III

Syllabus :  
Term 3 (Units 1 - 5)

Class - IV :: Vikram Real Life Mathematics

Page No. 63 - 128

Time : 2 1/2 Hours

Max.Marks: 50

50

Name :

Class :

Section :

Roll No.

I. Answer the following questions.

[5 x 3 = 15M]

1) Write the standard form of

$$50 + \frac{5}{10} + \frac{5}{1000}$$

2) Find the area of the rectangle of length 10 cm and breadth 6 cm.

3) Find the area of a square playground of side 75m.

4) Convert 1675 minutes as hours and minutes.

5) What is the time gap between 6.14 a.m. and 5.10 p.m. ?

II. Answer any ONE of the following.

[1 x 4 = 4M]

1) Read and write the number names.

i) 0.45      ii) 0.79      iii) 0.08      iv) 1.04

2) There are two square house plots. The side of one plot is 32m. The side of the other plot is two times that of the first one. What is the perimeter of second plot ?

III. Answer any ONE of the following.

[1 x 4 = 4M]

1) A Childrens park is in the shape of a triangle of sides 175 m, 120 m and 100 m. What is the perimet of the park ?

2) Howrah Hyderabad express arrived at Hyderabad at 10 - 20 p.m. Express this time in 24 hour clock time.

**IV. Answer any ONE of the following.**

**[1 x 4 = 4M]**

- 1) Ramu took 3 h 15 m to do a work. His sister Leela could do the same work in only 2 h 45 m. How much less time than Ramu did Leela take to do the work ?
- 2) Write as kilogrames.
  - a) 75 gram    b) 180 g    c) 640 g    d) 20 kg 20g

**V. Answer any ONE of the following.**

**[1 x 3 = 3M]**

- 1) Express the following as minutes.
  - a) 7 h            b) 13 h            c) 16h 45 m
- 2) Find the area of a square of side.
  - i) 4 cm            ii) 6 cm            iii) 10 cm

**VI. Choose the correct answer.**

**[5 x 1 = 5M]**

- 1) 8.008 is equivalent to ( )
  - A) 80.08                            B) 800.08                            C) 8.0080
- 2)  $l = 8$  cm,  $b = 4$  cm are of rectangle is ( )
  - A)  $8 + 4$                             B)  $8 - 4$                             C)  $3 \times 4$
- 3) 60 minutes = ( )
  - A) 1 day                            B) one hour                            C) half day
- 4) Area of square = ( )
  - A) side  $\times$  side                            B) side + side                            C) side – side
- 5) A leap year usually comes every \_\_\_\_\_ years. ( )
  - A) 4                            B) 5                            C) 3

**VII. Fill in the blanks.**

**[5 x 1 = 5M]**

- 1) 15.620 , 5 is in the \_\_\_\_\_ place.
- 2) 0.01 m is called \_\_\_\_\_.
- 3) A closed curve which does not cross itself is called a \_\_\_\_\_.

4) Number of numerals on the clock dial \_\_\_\_\_.

5) 1 minute \_\_\_\_\_ seconds.

**VIII. Write 'True' or 'False'.**

**[5 x 1 = 5M]**

1)  $\frac{7}{10} = 0.07$

(    )

2) 1 m = 0.001 km.

(    )

3) In rectangle the two pairs of opposite sides are equal.

(    )

4)  $\frac{6}{100}$  : Decimal form as 0.06

(    )

5) November 14 is a childrens day.

(    )

**IX. Match the following.**

**[5 x 1 = 5M]**

1) February

(    )

a) 4 O' clock



(    )

b) 28 days

3) January 26<sup>th</sup>

(    )

c) Republic day



(    )

d) 1 minute

5) 60 seconds

(    )

e) 10 O' clock

\*\*\*\*\*



C - 18

Vikram  
Real Life  
Term Book

# SUMMATIVE ASSESSMENT - III

Syllabus :

Class - IV :: Vikram Real Life Science

Term 3 (Lessons 1 - 4)

Page No. 133 - 168

Time : 2 1/2 Hours

Max.Marks: 50

50

Name :

Class :

Section :

Roll No.

I. Answer the following questions.

[5 x 3 = 15M]

- 1) What is work ?
- 2) What is meant by condensation ?
- 3) What is meant by potential energy ? Give an example.
- 4) What is meant by soil erosion ?
- 5) Name the planets in the solar system.

II. Answer any ONE of the following.

[1 x 4 = 4M]

- 1) Mention the factors that influence the weather.
- 2) What is a satellite ?

III. Answer any ONE of the following.

[1 x 4 = 4M]

- 1) What is meant by kinetic energy ? Give an example.
- 2) How is dew formed ?

IV. Answer any ONE of the following.

[1 x 4 = 4M]

- 1) What are the different forms of energy ?
- 2) How can we prevent Soil erosion ?

V. Answer any ONE of the following.

[1 x 3 = 3M]

- 1) How do the changes in the weather affect us ?
- 2) How is fog formed ?

VI. Choose the correct answer.

[5 x 1 = 5M]

1) The water vapour condenses on the dust particles to form.

( )

A) dew

B) hail

C) fog

2) Some animals in polar region go into deep sleep. It is called.

( )

A) hibernation

B) evaporation

C) condensation

- 3) Loamy soil contains. ( )  
 A) rocks                      B) silt                      C) sand, clay and humus
- 4) The ability or capacity to do work is called. ( )  
 A) energy                      B) force                      C) electricity
- 5) \_\_\_\_\_ is the largest planet. ( )  
 A) Mars                      B) Neptune                      C) Jupiter

**II. Fill in the blanks.** [5 x 1 = 5M]

- 1) When water vapour condenses on grass, \_\_\_\_\_ is formed.
- 2) Evaporation is faster on \_\_\_\_\_ day.
- 3) \_\_\_\_\_ kind of soil is useful for laying roads.
- 4) The atomic energy is used to produce \_\_\_\_\_
- 5) The planets revolve round the \_\_\_\_\_

**III. Write "True" or "False".** [5 x 1 = 5M]

- 1) Soil covered by the grass is not easily eroded. ( )
- 2) Energy can be converted from one form into another form. ( )
- 3) The moon is the nearest planet to the Sun. ( )
- 4) Low rainfall results in drought. ( )
- 5) When it is cold, water evaporates quickly. ( )

**IV. Match the following.** [1 x 5 = 5M]

- |                           |     |  |
|---------------------------|-----|--|
| 1) Clothes dry up quickly | ( ) | a) hibernation                         |
| 2) Polar bears            | ( ) | b) on a windy day                      |
| 3) Winter                 | ( ) | c) Changing of water vapour into water |
| 4) Condensation           | ( ) | d) pieces of cotton                    |
| 5) Snow is like           | ( ) | e) woollen clothes                     |

\*\*\*\*\*

C - 18

Vikram  
Real Life  
Term Book

## SUMMATIVE ASSESSMENT - III

Syllabus :

Term 3 (Lessons 1 - 10)

Class - IV :: Vikram Real Life Social Studies

Page No. 173 - 237

Time : 2 1/2 Hours

Max.Marks: 50

50

Name :

Class :

Section :

Roll No.

I. Answer the following questions.

[5 x 3 = 15M]

- 1) What are the important festivals celebrated in Manipur ?
- 2) What are the historical monuments to be seen in Delhi ?
- 3) Name the important cities that lie in the Malwa Plateau.
- 4) Where is the Southern plateau ? Name the States covered by it.
- 5) Where does the coastal region lie in our country ?

II. Answer any ONE of the following questions.

[1 x 4 = 4M]

- 1) What is the importance of the Chota Nagpur Plateau ?
- 2) What are the famous handicrafts of Andhra Pradesh ?

III. Answer any ONE of the following questions.

[1 x 4 = 4M]

- 1) What are the important classical dances of our country ?
- 2) Describe our National Emblem.

IV. Answer any ONE of the following.

[1 x 4 = 4M]

- 1) What are the Fundamental Rights and Duties ?
- 2) What were the achievements of Indians in the field of science in ancient period ?

V. On an outline map of India locate the following places.

[6 x 1/2 = 3M]

- |              |                |                  |
|--------------|----------------|------------------|
| 1. Chennai   | 2. Ajmer       | 3. Visakhapatnam |
| 4. Ahmedabad | 5. Pondicherry | 6. Cochin        |

**VI. Choose the correct answer.**

**[5 x 1 = 5M]**

- 1) Our National Anthem was written by ( )  
A) Rabindranath Tagore B) Bankim Chandra Chatterje C) Mahmad Ekbal
- 2) The Judges in the High Court are appointed by the ( )  
A) Prime Minister B) Governor C) President
- 3) Supreme Court is located in ( )  
A) New Delhi B) Calcutta C) Hyderabad
- 4) India gate is found in ( )  
A) Chennai B) Delhi C) Mumbai
- 5) Ghumar is a folk dance in ( )  
A) Himachal Pradesh B) Rajasthan C) Jammu & Kashmir

**VII. Fill in the blanks.**

**[5 x 1 = 5M]**

- 1) \_\_\_\_\_ is found in the middle band of our National Flag.
- 2) The capital city of Nagaland is \_\_\_\_\_
- 3) \_\_\_\_\_ is our national language.
- 4) The \_\_\_\_\_ of Bhusaval are famous in Maharastra.
- 5) The Lok Sabha members hold office for \_\_\_\_\_ years.

**VIII. Write 'True' or 'False'.**

**[5 x 1 = 5M]**

- 1) Our National Flag has four colours. ( )
- 2) C.V. Raman won the Nobel Prize in Physics. ( )
- 3) Jaipur is known as the Green City. ( )
- 4) Railways and Posts and telegraphs are under the control of the State Governments. ( )
- 5) Aryabhata was a physician. ( )

**IX. Match the following.**

**[5 x 1 = 5M]**

**Group - A**

- |             |     |                  |
|-------------|-----|------------------|
| 1) Baisakhi | ( ) | a) Golden Temple |
| 2) Amritsar | ( ) | b) Tripura       |
| 3) Chhath   | ( ) | c) Punjab        |
| 4) Rasgulla | ( ) | d) Bihar         |
| 5) Lushais  | ( ) | e) West Bengal   |

\*\*\*\*\*



# INDIA









**Name :****Class :****Section :****Roll No.**

I. Here are some important Indian Superlatives, Name them.

[10 x 1 = 10M]



- 1)  The Largest desert \_\_\_\_\_
- 2)  The Longest Railway Platform \_\_\_\_\_
- 3)  The Highest Water falls \_\_\_\_\_
- 4)  The Largest Mosque \_\_\_\_\_
- 5)  The Highest Mountain Peak \_\_\_\_\_
- 6)  The Largest Dam \_\_\_\_\_
- 7)  The Longest Bridge \_\_\_\_\_
- 8)  The Highest Minar \_\_\_\_\_
- 9)  The Largest Statue \_\_\_\_\_
- 10)  The Highest Gateway \_\_\_\_\_

**Take My Help :**

Buland Darwaza, Gomateswar, Qutub Minar, Mahatma Gandhi Sethu, Bhakra Dam, Mountain K<sub>2</sub>, Jama Masjid, Jog Falls, Khargpur, Thar.

**II. Match the following.**

**[5 x 2 = 10M]**

- |               |        |                |
|---------------|--------|----------------|
| 1) Australia  | (    ) | a) Corn Flower |
| 2) Bangladesh | (    ) | b) Lily        |
| 3) Canada     | (    ) | c) Maple Leaf  |
| 4) France     | (    ) | d) Water Lily  |
| 5) Germany    | (    ) | e) Kangaroo    |

**III. Choose the correct answer.**

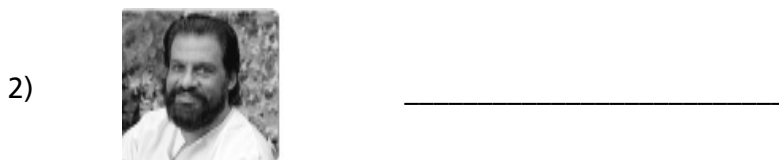
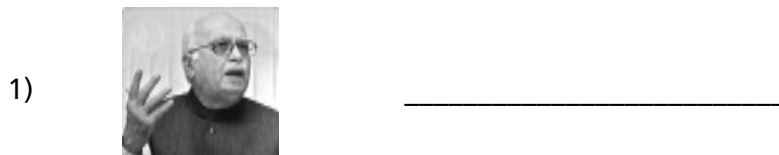
**[5 x 2 = 10M]**

- |  |        |
|--|--------|
| 1) The city is known as 'the pink city of India'.                        | (    ) |
| A) Hyderabad              B) Bengalur              C) Bengaluru          |        |
| 2) 'City of Palaces' is another name of                                  | (    ) |
| A) Agra                      B) Kolkata              C) Rayapur          |        |
| 3) The place is known as 'The paradise on Earth'                         | (    ) |
| A) Kerala                    B) Kashmir              C) Punjab           |        |
| 4) The world famous TajMahal is located in this city.                    | (    ) |
| A) Delhi                      B) Agra                    C) Gandhi Nagar |        |
| 5) State whose name means 'The Abode of Clouds'.                         | (    ) |
| A) Mizoram                  B) Asom                  C) Meghalaya        |        |

**IV. Write the names of the following personalities.**

**[5 x 2 = 10M]**

**Aiswarya Rai, Abishek Bachan, Chandra Babu Naidu, K.J. Yesudas, L.K. Advani**



3)



\_\_\_\_\_

4)



\_\_\_\_\_

5)



\_\_\_\_\_

**V. Answer the following questions.**

**[5 x 2 = 10M]**

- 1) India has won eight Olympic gold medals in.
- 2) What is the nick name of Sachin Tendulkar ?
- 3) With which State Filgree work is associated ?
- 4) Andhra Pradesh is famous for textiles ?
- 5) Where were the 2008 olympics held ?

\*\*\*\*\*

